





Используйте матрицу для решения задачи.

1)  $23 \times 20 =$




2)  $20 \times 28 =$




3)  $20 \times 21 =$




4)  $26 \times 20 =$



5)  $20 \times 22 =$



6)  $25 \times 20 =$



**Отвeты**

1. \_\_\_\_\_

2. \_\_\_\_\_

3. \_\_\_\_\_

4. \_\_\_\_\_

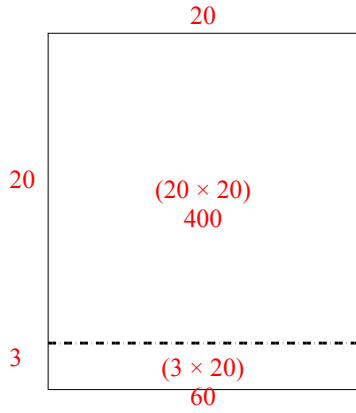
5. \_\_\_\_\_

6. \_\_\_\_\_

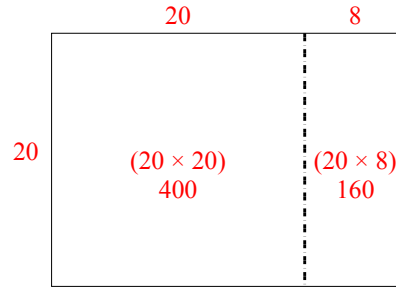


Используйте матрицу для решения задачи.

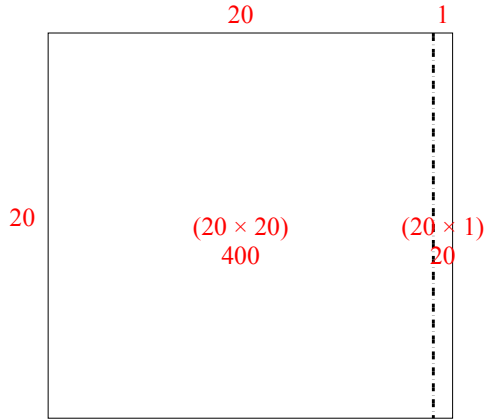
1)  $23 \times 20 =$



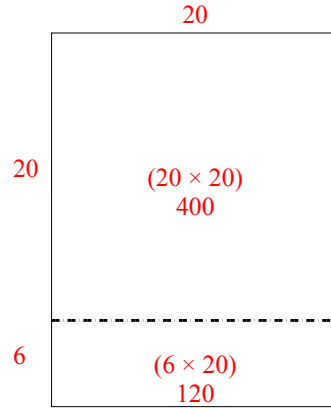
2)  $20 \times 28 =$



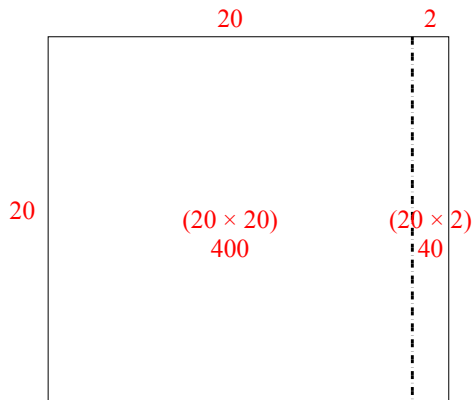
3)  $20 \times 21 =$



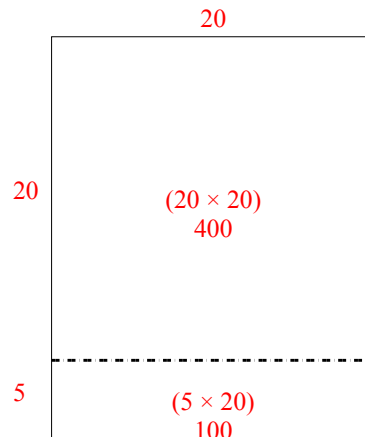
4)  $26 \times 20 =$



5)  $20 \times 22 =$



6)  $25 \times 20 =$



**Ответы**

1. 460
2. 560
3. 420
4. 520
5. 440
6. 500