





Используйте матрицу для решения задачи.


1) $27 \times 30 =$




2) $35 \times 20 =$




3) $30 \times 31 =$




4) $20 \times 29 =$



5) $27 \times 20 =$



6) $20 \times 25 =$



Отвeты

1. _____

2. _____

3. _____

4. _____

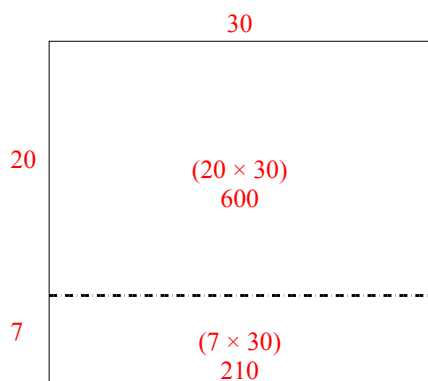
5. _____

6. _____

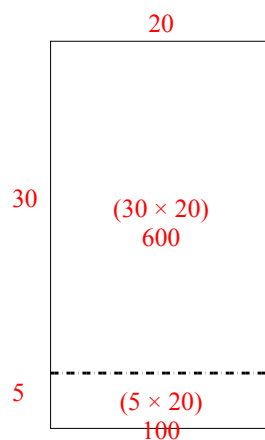


Используйте матрицу для решения задачи.

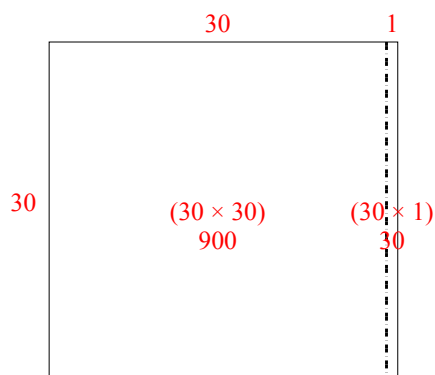
1) $27 \times 30 =$



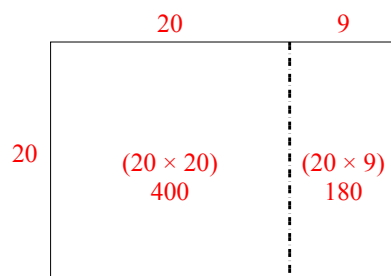
2) $35 \times 20 =$



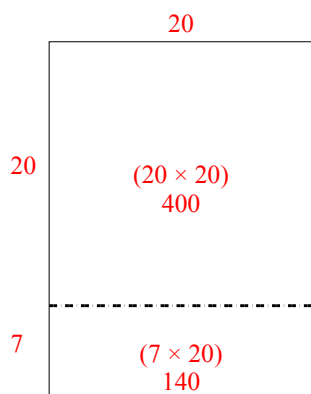
3) $30 \times 31 =$



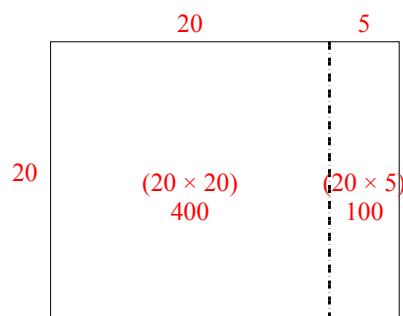
4) $20 \times 29 =$



5) $27 \times 20 =$



6) $20 \times 25 =$

Ответы1. 8102. 7003. 9304. 5805. 5406. 500