





Перепишите каждую матрицу в виде умножения и решите.

**ОТВЕТЫ**



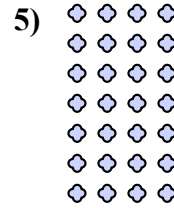

об. 6 × 7 = 42

1. \_\_\_\_\_

2. \_\_\_\_\_

3. \_\_\_\_\_

4. \_\_\_\_\_





5. \_\_\_\_\_

6. \_\_\_\_\_

7. \_\_\_\_\_

8. \_\_\_\_\_

9. \_\_\_\_\_



10. \_\_\_\_\_

11. \_\_\_\_\_

