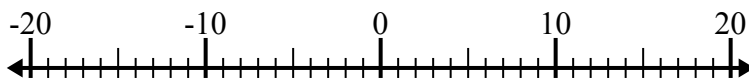




Решите каждую задачу. Используйте числовую прямую, если нужно.

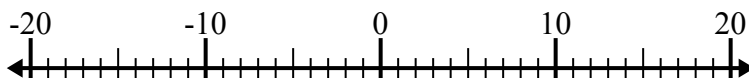
ОТВЕТЫ

1) $(-6) + (-2) =$ _____



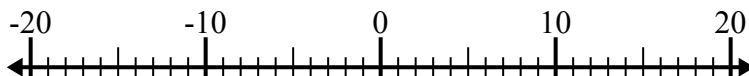
1. _____

2) $7 - (-1) =$ _____



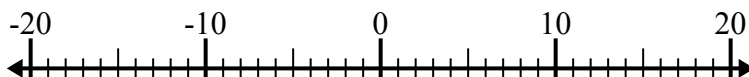
2. _____

3) $8 - (-12) =$ _____



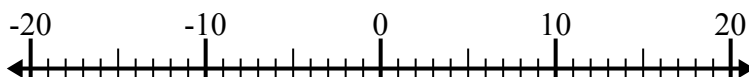
3. _____

4) $(-15) + (-1) =$ _____



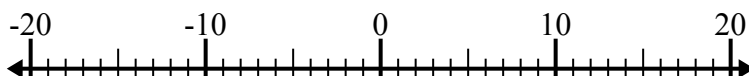
4. _____

5) $(-1) - (-6) =$ _____



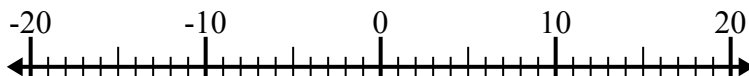
5. _____

6) $(-1) - (-10) =$ _____



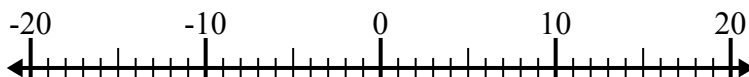
6. _____

7) $11 + (-1) =$ _____



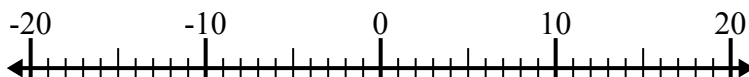
7. _____

8) $(-7) + 6 =$ _____



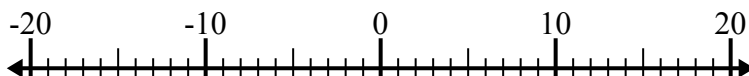
8. _____

9) $(-7) + 15 =$ _____



9. _____

10) $(-15) - 5 =$ _____

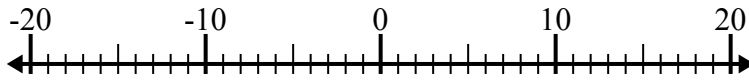


10. _____

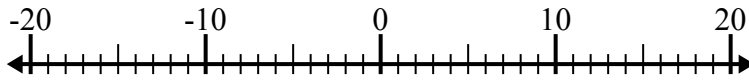


Решите каждую задачу. Используйте числовую прямую, если нужно.

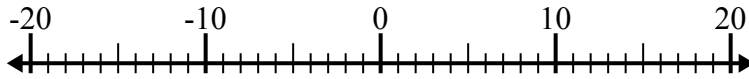
1) $(-6) + (-2) = \underline{-8}$



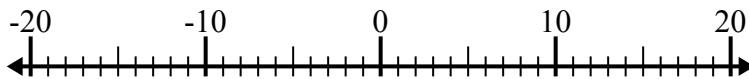
2) $7 - (-1) = \underline{8}$



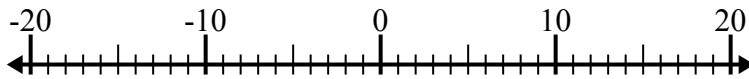
3) $8 - (-12) = \underline{20}$



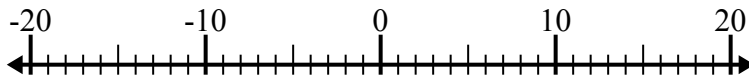
4) $(-15) + (-1) = \underline{-16}$



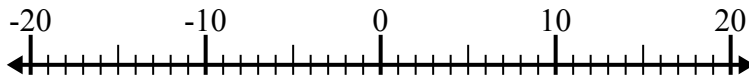
5) $(-1) - (-6) = \underline{5}$



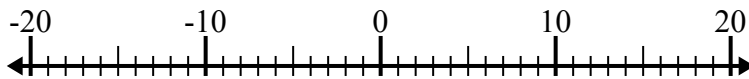
6) $(-1) - (-10) = \underline{9}$



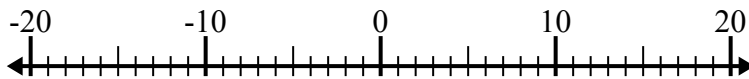
7) $11 + (-1) = \underline{10}$



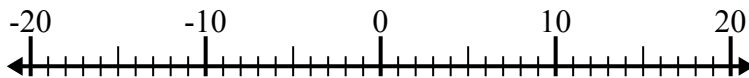
8) $(-7) + 6 = \underline{-1}$



9) $(-7) + 15 = \underline{8}$



10) $(-15) - 5 = \underline{-20}$

**ОТВЕТЫ**1. **-8**2. **8**3. **20**4. **-16**5. **5**6. **9**7. **10**8. **-1**9. **8**10. **-20**