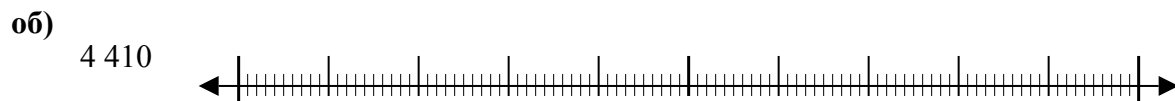


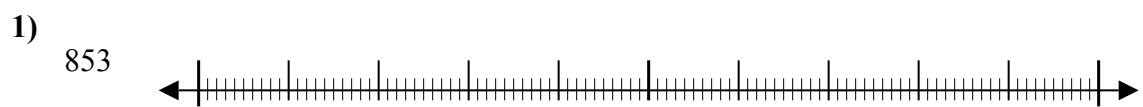


Используйте числовые прямые для округления до сотни.

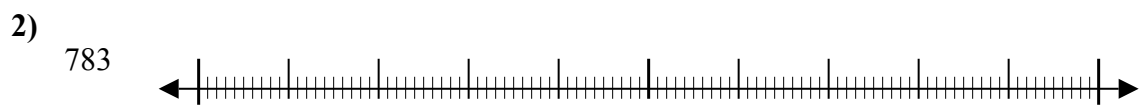
Ответы



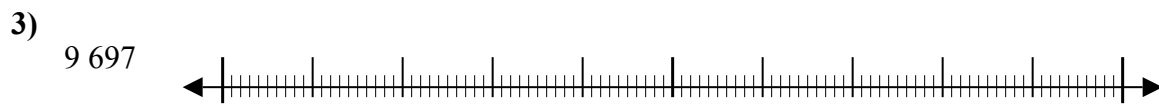
об. **4 400**



1. \_\_\_\_\_



2. \_\_\_\_\_



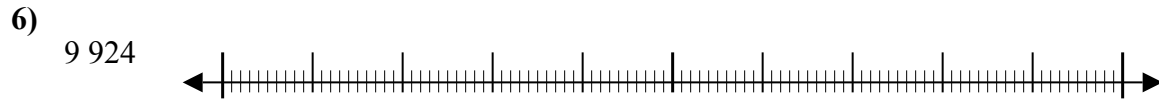
3. \_\_\_\_\_



4. \_\_\_\_\_



5. \_\_\_\_\_



6. \_\_\_\_\_



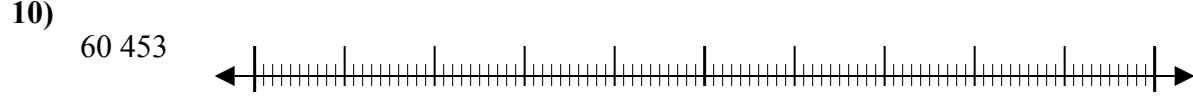
7. \_\_\_\_\_



8. \_\_\_\_\_



9. \_\_\_\_\_

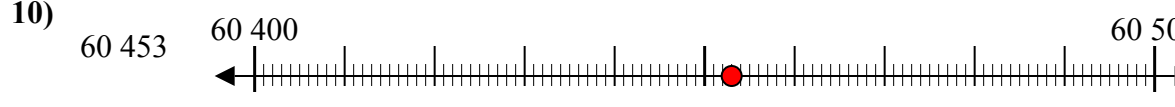
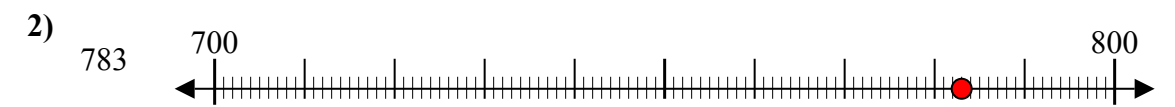
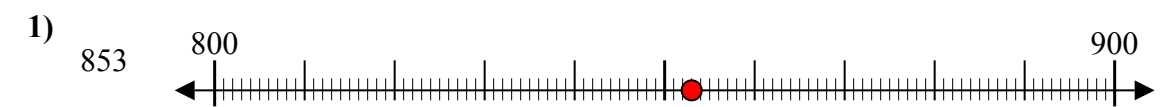
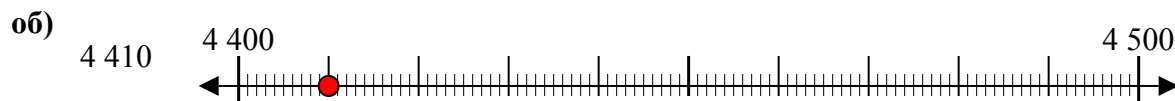


10. \_\_\_\_\_

10. \_\_\_\_\_



Используйте числовые прямые для округления до сотни.



**Ответы**

об. 4 400

1. 900

2. 800

3. 9 700

4. 9 000

5. 600

6. 9 900

7. 99 300

8. 90 000

9. 17 200

10. 60 500