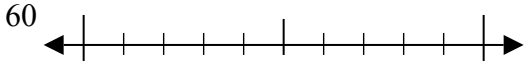




Используйте числовые прямые для округления до десятков.

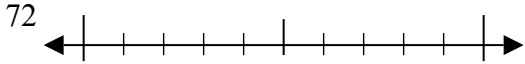
Отвeты

об)



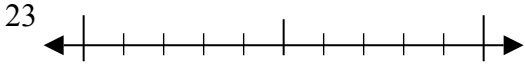
об. 60

1)



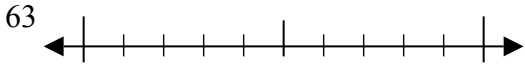
1. \_\_\_\_\_

2)



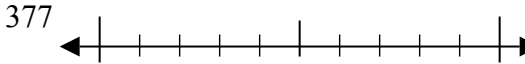
2. \_\_\_\_\_

3)



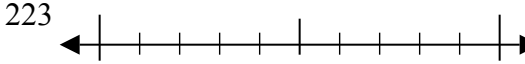
3. \_\_\_\_\_

4)



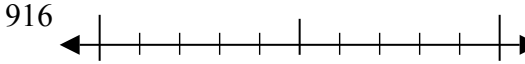
4. \_\_\_\_\_

5)



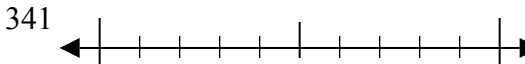
5. \_\_\_\_\_

6)



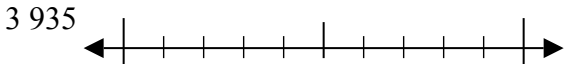
6. \_\_\_\_\_

7)



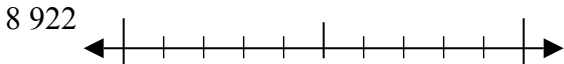
7. \_\_\_\_\_

8)



8. \_\_\_\_\_

9)

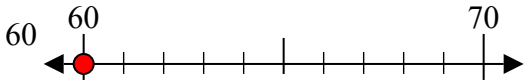


9. \_\_\_\_\_

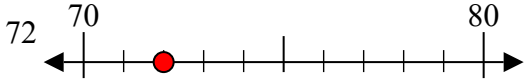


Используйте числовые прямые для округления до десятков.

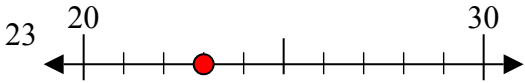
об)



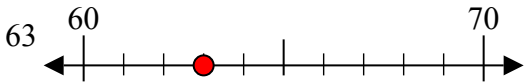
1)



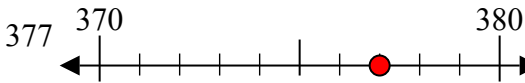
2)



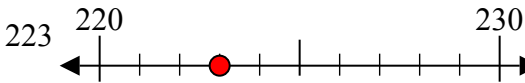
3)



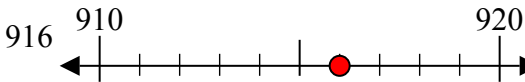
4)



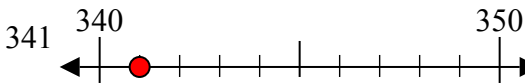
5)



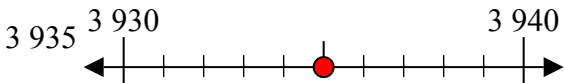
6)



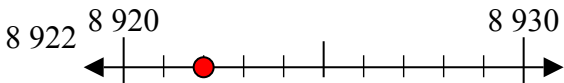
7)



8)



9)



**Ответы**

об. 60

1. 70

2. 20

3. 60

4. 380

5. 220

6. 920

7. 340

8. 3940

9. 8920