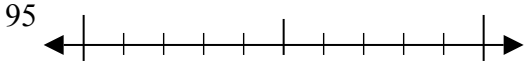


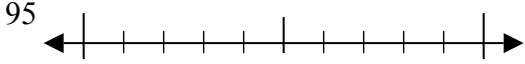


Используйте числовые прямые для округления до десятков.

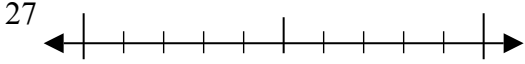
об)



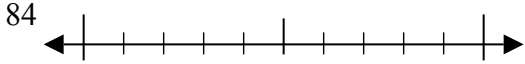
1)



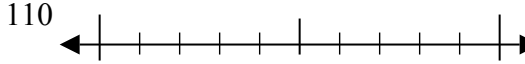
2)



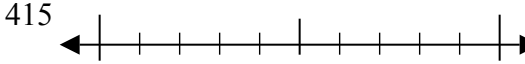
3)



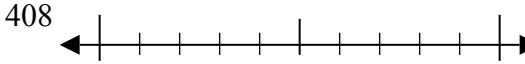
4)



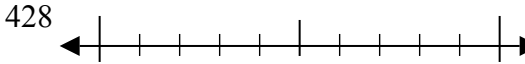
5)



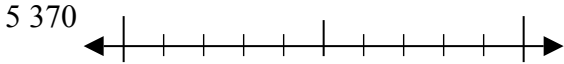
6)



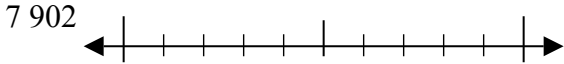
7)



8)



9)



Отвeты

об. 100

1. \_\_\_\_\_

2. \_\_\_\_\_

3. \_\_\_\_\_

4. \_\_\_\_\_

5. \_\_\_\_\_

6. \_\_\_\_\_

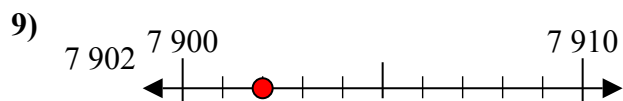
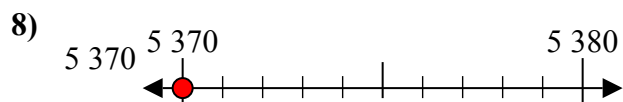
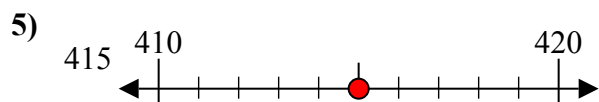
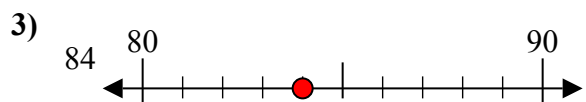
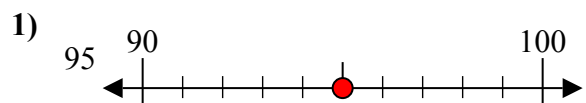
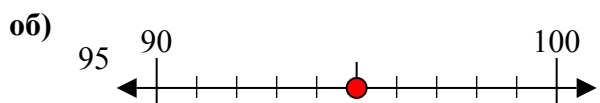
7. \_\_\_\_\_

8. \_\_\_\_\_

9. \_\_\_\_\_



Используйте числовые прямые для округления до десятков.



**Ответы**

об. 100

1. 100

2. 30

3. 80

4. 110

5. 420

6. 410

7. 430

8. 5370

9. 7900