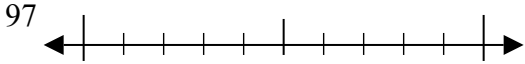




Используйте числовые прямые для округления до десятков.

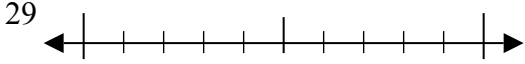
Отвeты

об)



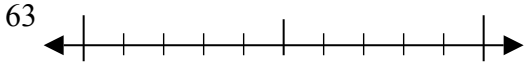
об. 100

1)



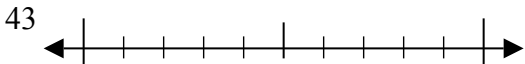
1. _____

2)



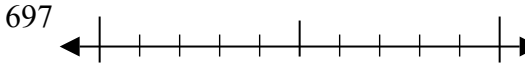
2. _____

3)



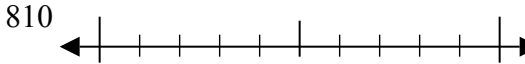
3. _____

4)



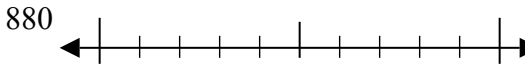
4. _____

5)



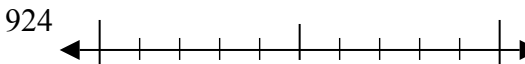
5. _____

6)



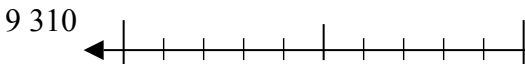
6. _____

7)



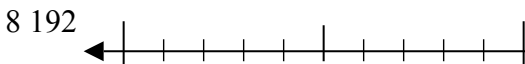
7. _____

8)



8. _____

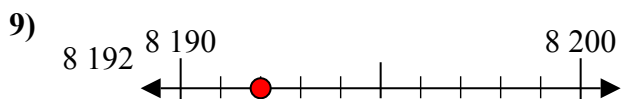
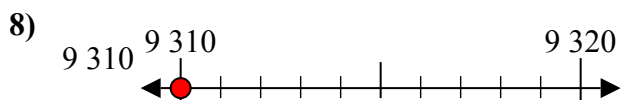
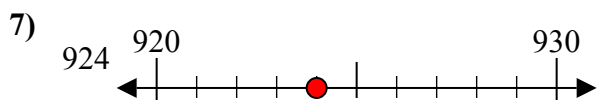
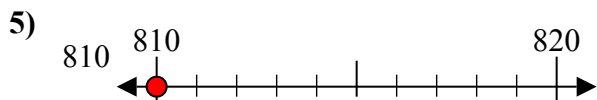
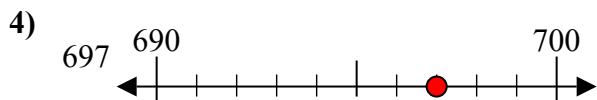
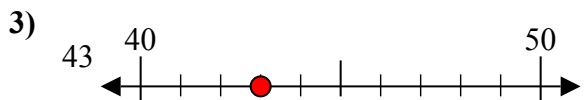
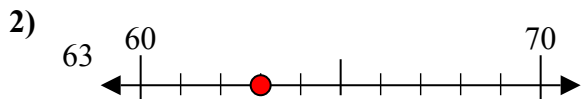
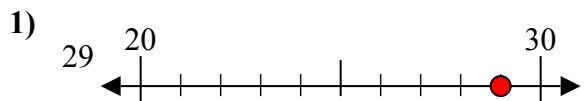
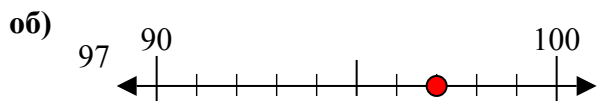
9)



9. _____



Используйте числовые прямые для округления до десятков.



Ответы

об. 100

1. 30

2. 60

3. 40

4. 700

5. 810

6. 880

7. 920

8. 9310

9. 8190