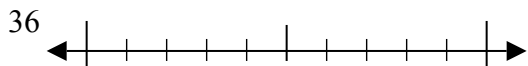


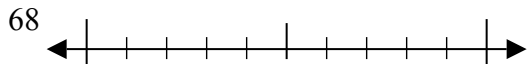


Используйте числовые прямые для округления до десятков.

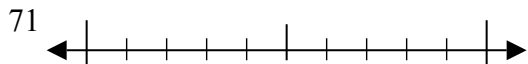
об)



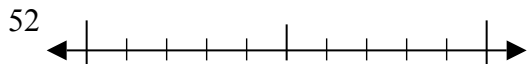
1)



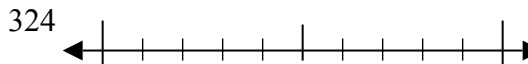
2)



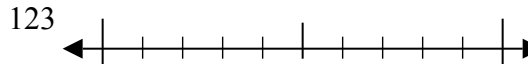
3)



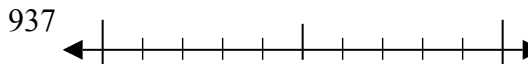
4)



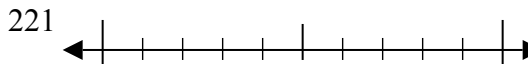
5)



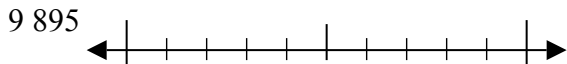
6)



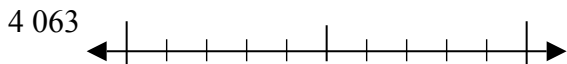
7)



8)



9)



Ответы

об. 40

1. _____

2. _____

3. _____

4. _____

5. _____

6. _____

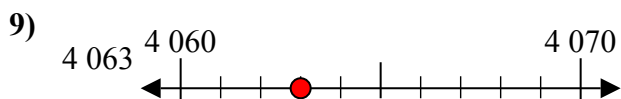
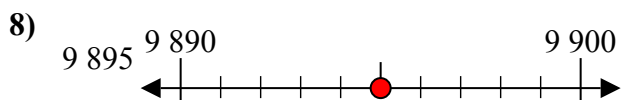
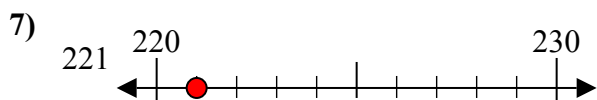
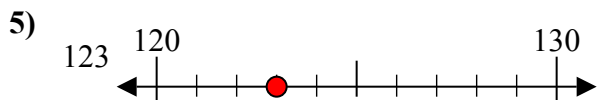
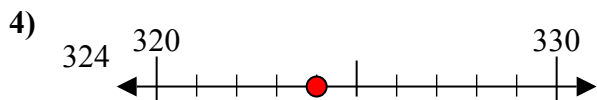
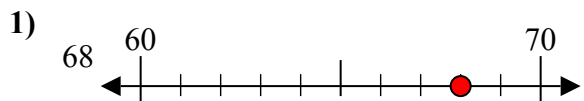
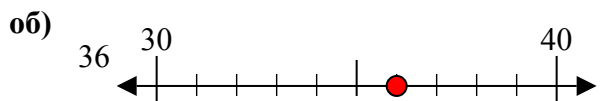
7. _____

8. _____

9. _____



Используйте числовые прямые для округления до десятков.



Ответы

об. 40

1. 70

2. 70

3. 50

4. 320

5. 120

6. 940

7. 220

8. 9900

9. 4060