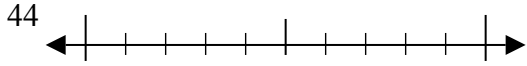




Используйте числовые прямые для округления до десятков.

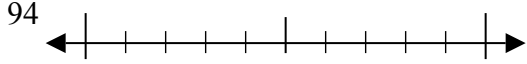
Ответы

об)



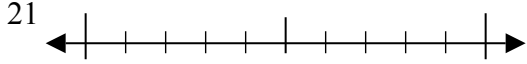
об. 40

1)



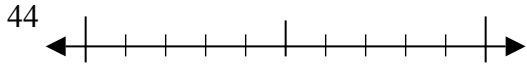
1. \_\_\_\_\_

2)



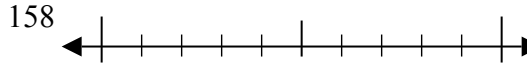
2. \_\_\_\_\_

3)



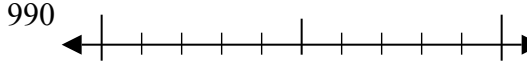
3. \_\_\_\_\_

4)



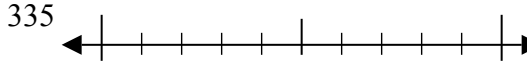
4. \_\_\_\_\_

5)



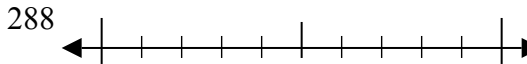
5. \_\_\_\_\_

6)



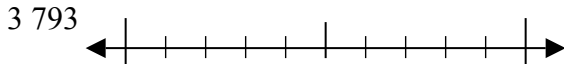
6. \_\_\_\_\_

7)



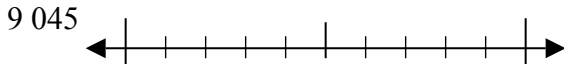
7. \_\_\_\_\_

8)



8. \_\_\_\_\_

9)

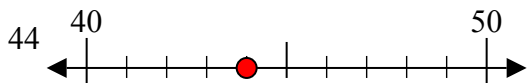


9. \_\_\_\_\_

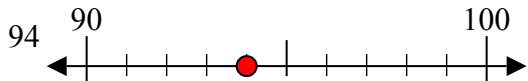


Используйте числовые прямые для округления до десятков.

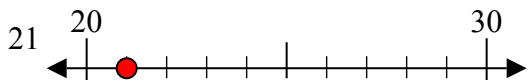
об)



1)



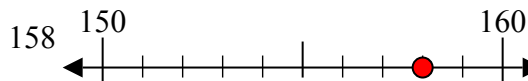
2)



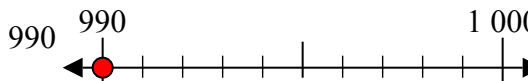
3)



4)



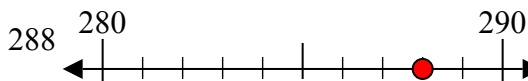
5)



6)



7)



8)



9)



**Отвeты**

об. 40

1. 90

2. 20

3. 40

4. 160

5. 990

6. 340

7. 290

8. 3790

9. 9050