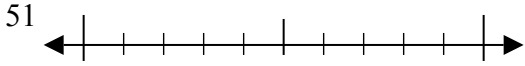




Используйте числовые прямые для округления до десятков.

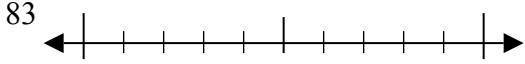
Ответы

об)



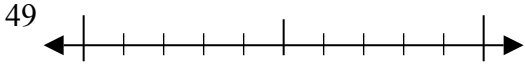
об. 50

1)



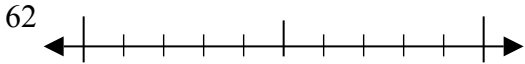
1. \_\_\_\_\_

2)



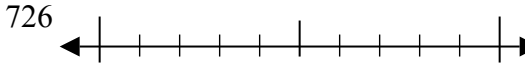
2. \_\_\_\_\_

3)



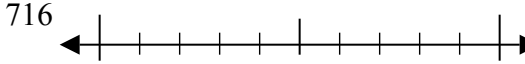
3. \_\_\_\_\_

4)



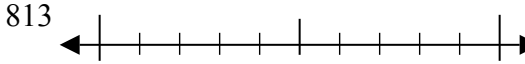
4. \_\_\_\_\_

5)



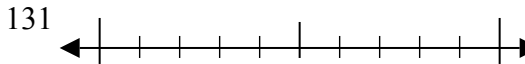
5. \_\_\_\_\_

6)



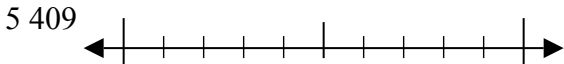
6. \_\_\_\_\_

7)



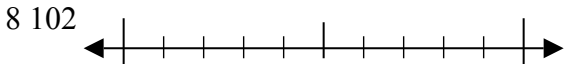
7. \_\_\_\_\_

8)



8. \_\_\_\_\_

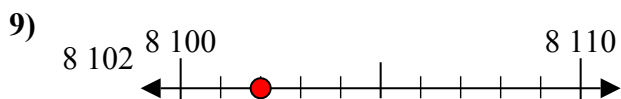
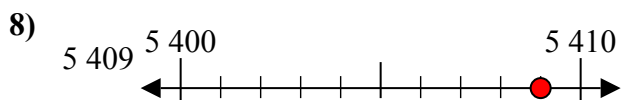
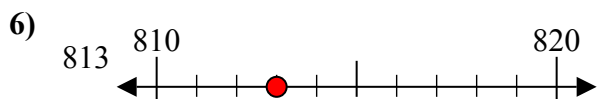
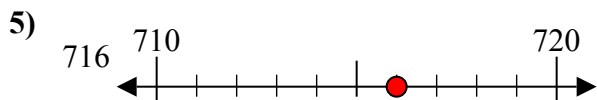
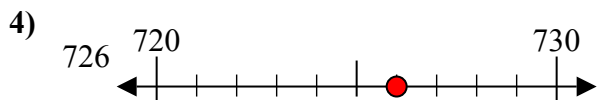
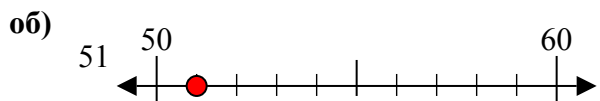
9)



9. \_\_\_\_\_



Используйте числовые прямые для округления до десятков.



**Ответы**

об. 50

1. 80

2. 50

3. 60

4. 730

5. 720

6. 810

7. 130

8. 5410

9. 8100