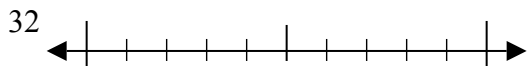




Используйте числовые прямые для округления до десятков.

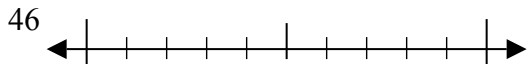
Ответы

об)



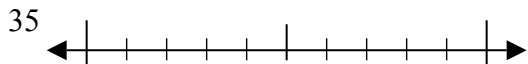
об. 30

1)



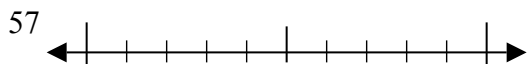
1. \_\_\_\_\_

2)



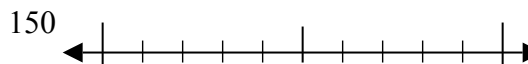
2. \_\_\_\_\_

3)



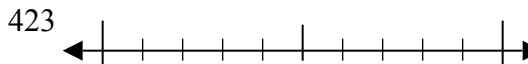
3. \_\_\_\_\_

4)



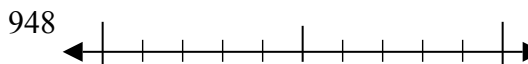
4. \_\_\_\_\_

5)



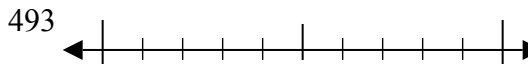
5. \_\_\_\_\_

6)



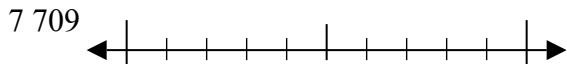
6. \_\_\_\_\_

7)



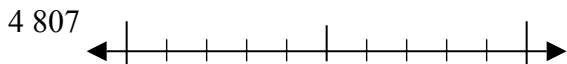
7. \_\_\_\_\_

8)



8. \_\_\_\_\_

9)

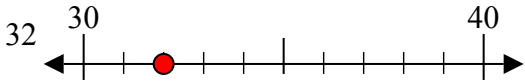


9. \_\_\_\_\_

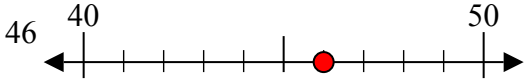


Используйте числовые прямые для округления до десятков.

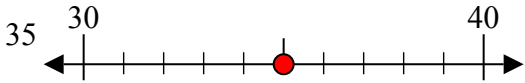
об)



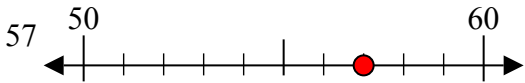
1)



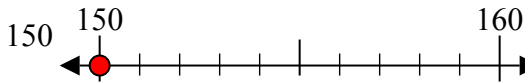
2)



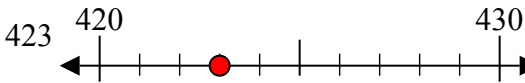
3)



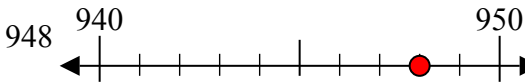
4)



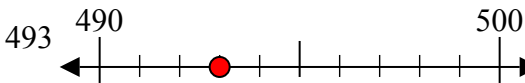
5)



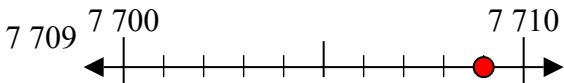
6)



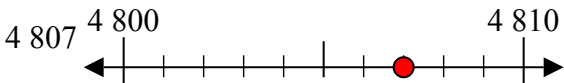
7)



8)



9)



Ответы

об. 30

1. 50

2. 40

3. 60

4. 150

5. 420

6. 950

7. 490

8. 7710

9. 4810