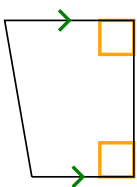




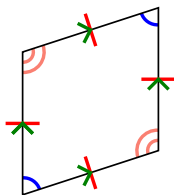
Определите какая перед Вами фигура: квадрат, прямоугольник, треугольник и т.п.

ОТВЕТЫ


1)



2)



3)



1. _____

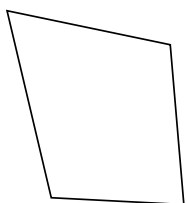
2. _____

3. _____

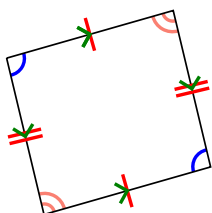
4. _____

5. _____

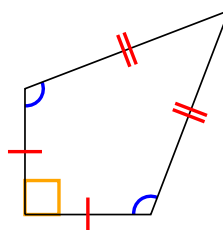
4)



5)



6)



6. _____

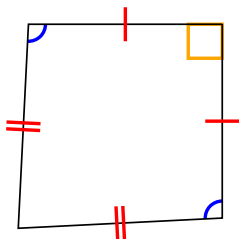
7. _____

8. _____

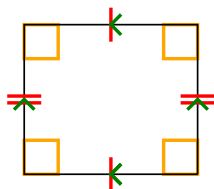
9. _____

10. _____

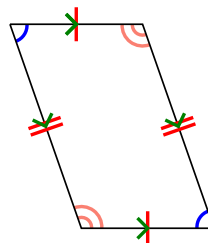
7)



8)



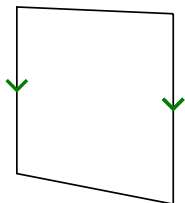
9)



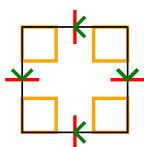
11. _____

12. _____


10)



11)



12)

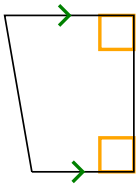




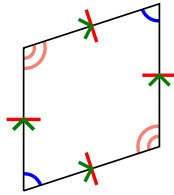
Определите какая перед Вами фигура: квадрат, прямоугольник, треугольник и т.п.

ОТВЕТЫ

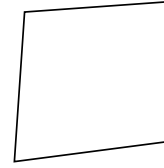
1)



2)



3)



1. Q,T

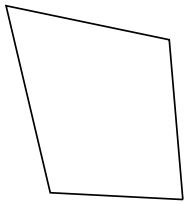
2. Q,P,H

3. Q

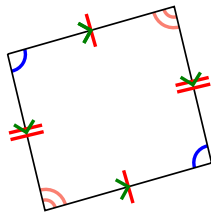
4. Q

5. Q,P

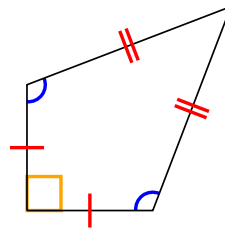
4)



5)



6)

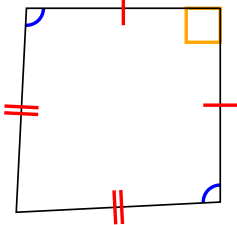


6. Q,K

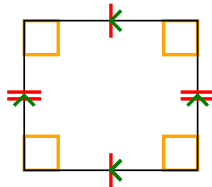
7. Q,K

8. Q,P,R

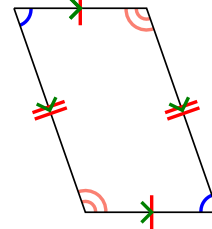
7)



8)



9)



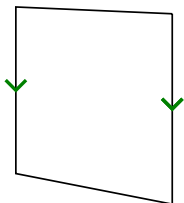
9. Q,P

10. Q,T

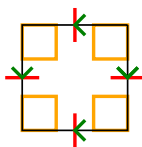
11. Q,P,H,R,S

12. Q

10)



11)



12)

