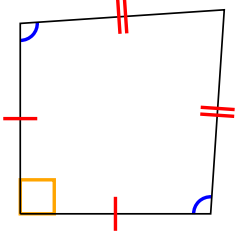




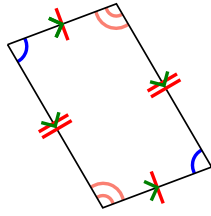
Определите какая перед Вами фигура: квадрат, прямоугольник, треугольник и т.п.

ОТВЕТЫ

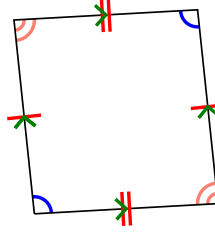
1)



2)



3)



1. _____


2. _____

3. _____

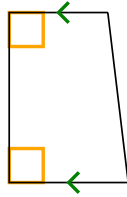
4. _____

5. _____

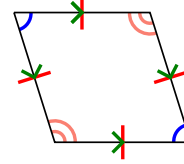
4)



5)



6)



6. _____

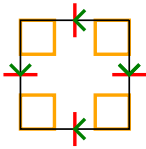
7. _____

8. _____

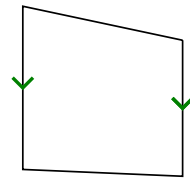
9. _____

10. _____

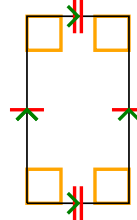
7)



8)




9)



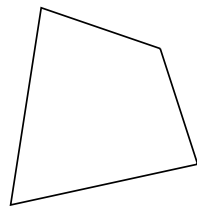
11. _____

12. _____

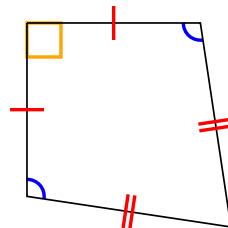
10)



11)



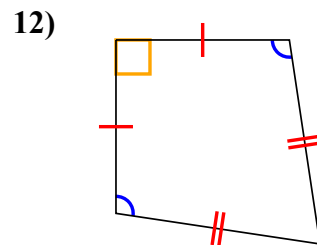
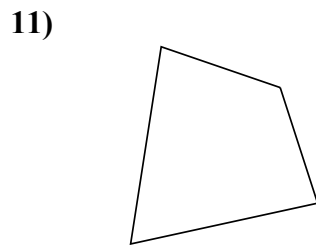
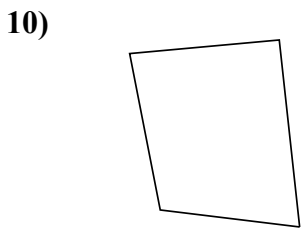
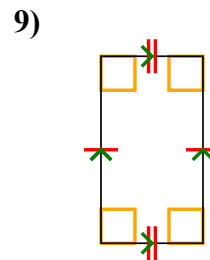
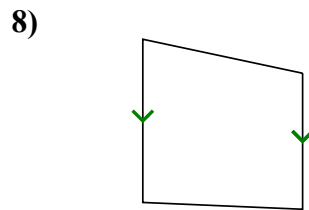
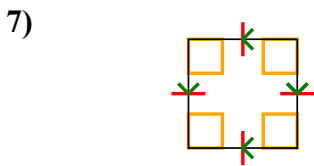
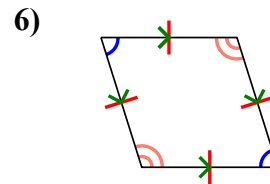
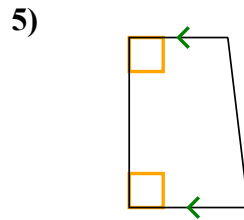
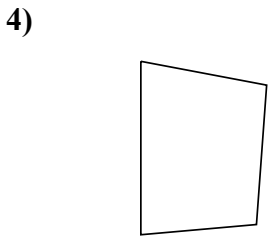
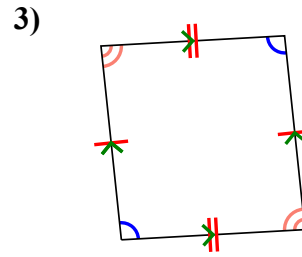
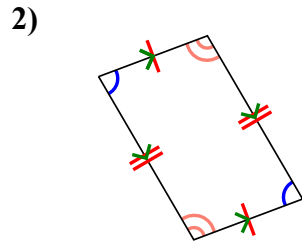
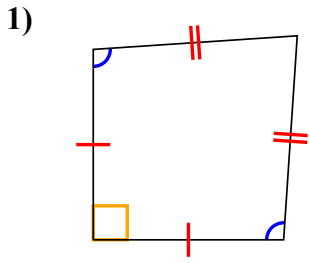
12)





Определите какая перед Вами фигура: квадрат, прямоугольник, треугольник и т.п.

ОТВЕТЫ



1. Q, K

2. Q, P

3. Q, P

4. Q

5. Q, T

6. Q, P, H

7. Q, P, H, R, S

8. Q, T

9. Q, P, R

10. Q

11. Q

12. Q, K