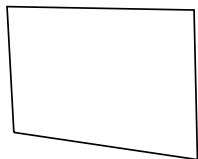




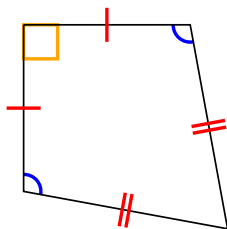
Определите какая перед Вами фигура: квадрат, прямоугольник, треугольник и т.п.

ОТВЕТЫ

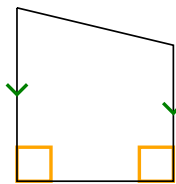
1)



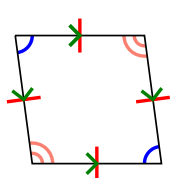
2)



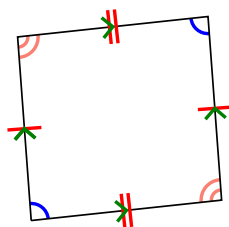
3)



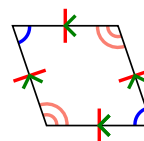
4)



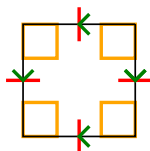
5)



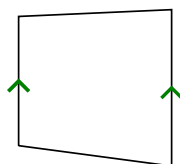
6)



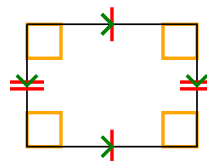
7)



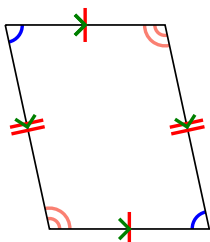
8)



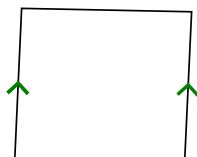
9)



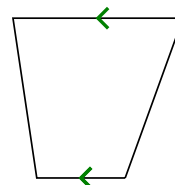
10)



11)



12)



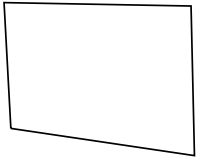
- 1. _____
- 2. _____
- 3. _____
- 4. _____
- 5. _____
- 6. _____
- 7. _____
- 8. _____
- 9. _____
- 10. _____
- 11. _____
- 12. _____



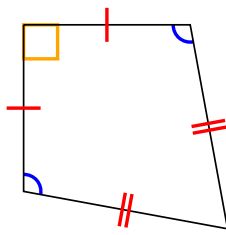
Определите какая перед Вами фигура: квадрат, прямоугольник, треугольник и т.п.

ОТВЕТЫ

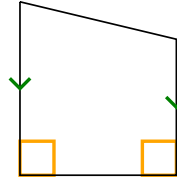
1)



2)



3)



1. Q

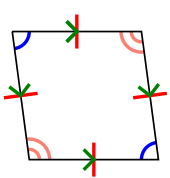
2. Q,К

3. Q,Т

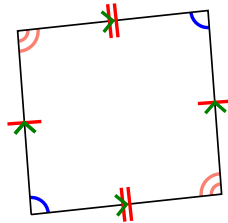
4. Q,Р,Н

5. Q,Р

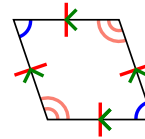
4)



5)



6)

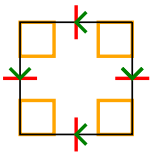


6. Q,Р,Н

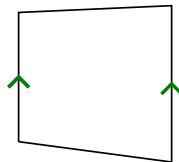
7. Q,Р,Н,Р,S

8. Q,Т

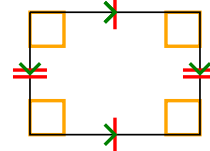
7)



8)



9)



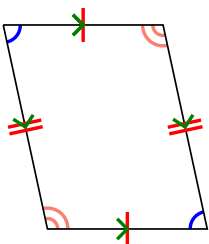
9. Q,Р,R

10. Q,Р

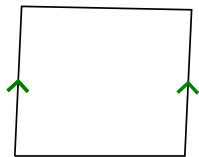
11. Q,Т

12. Q,Т

10)



11)



12)

