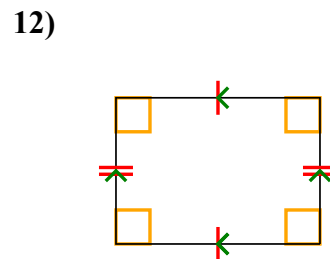
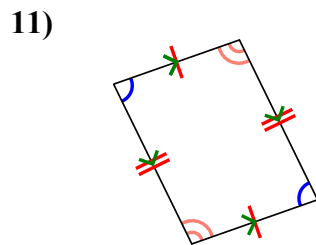
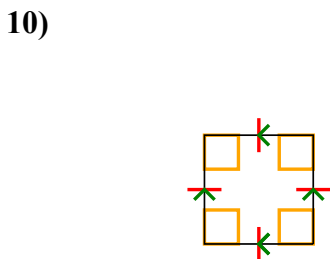
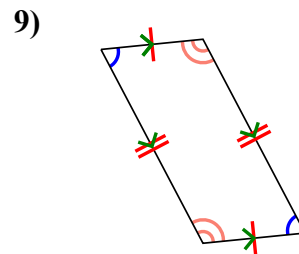
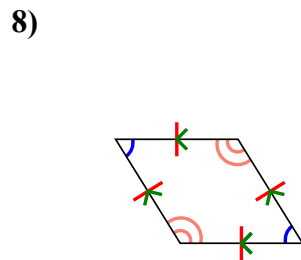
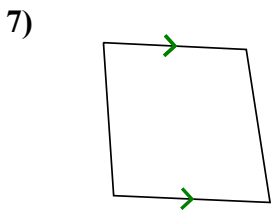
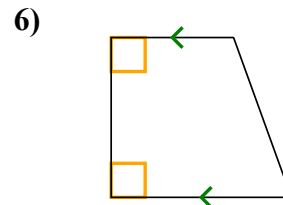
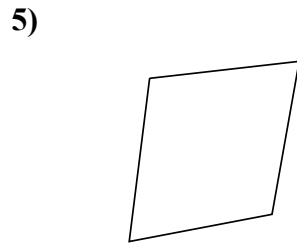
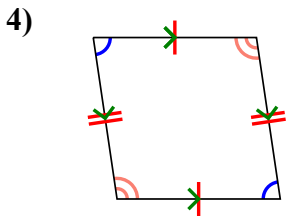
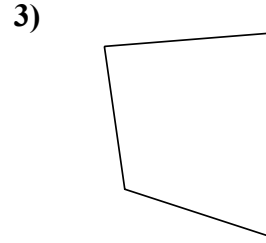
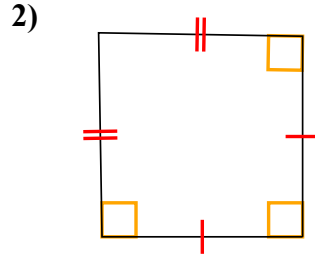
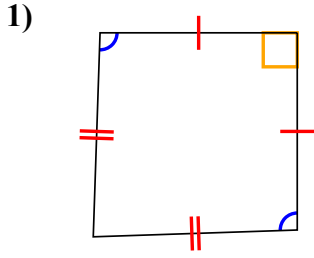




Определите какая перед Вами фигура: квадрат, прямоугольник, треугольник и т.п.

ОТВЕТЫ

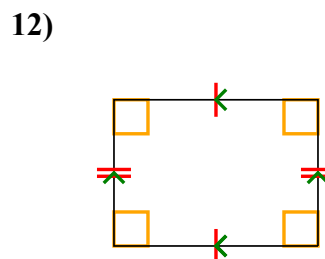
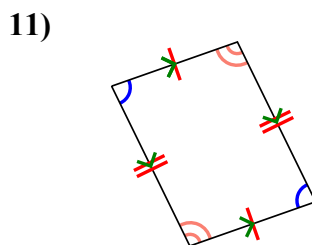
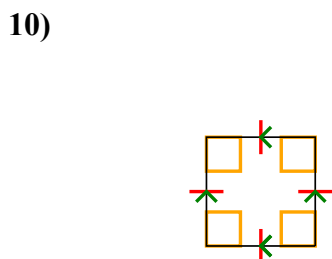
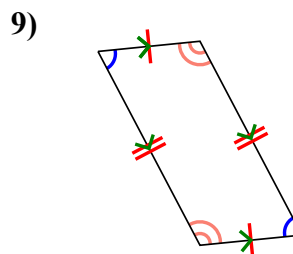
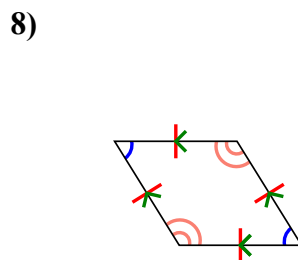
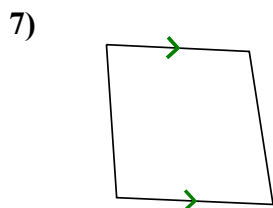
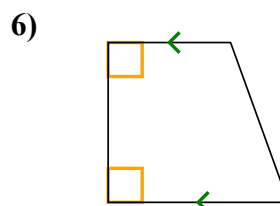
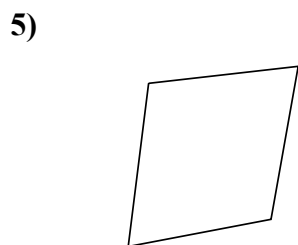
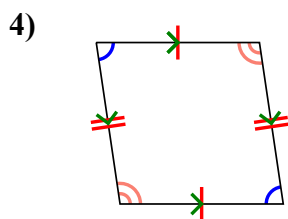
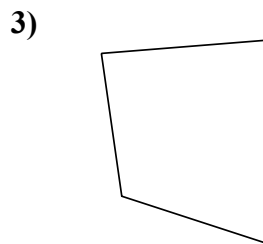
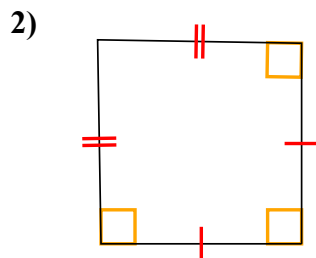
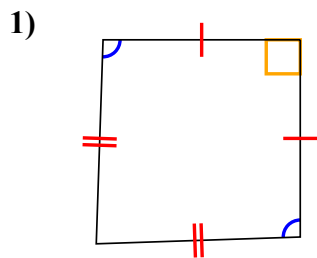


- 1. \_\_\_\_\_
- 2. \_\_\_\_\_
- 3. \_\_\_\_\_
- 4. \_\_\_\_\_
- 5. \_\_\_\_\_
- 6. \_\_\_\_\_
- 7. \_\_\_\_\_
- 8. \_\_\_\_\_
- 9. \_\_\_\_\_
- 10. \_\_\_\_\_
- 11. \_\_\_\_\_
- 12. \_\_\_\_\_



Определите какая перед Вами фигура: квадрат, прямоугольник, треугольник и т.п.

**ОТВЕТЫ**



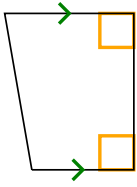
- 1. Q, K
- 2. Q, K
- 3. Q
- 4. Q, P
- 5. Q
- 6. Q, T
- 7. Q, T
- 8. Q, P, H
- 9. Q, P
- 10. Q, P, H, R, S
- 11. Q, P
- 12. Q, P, R



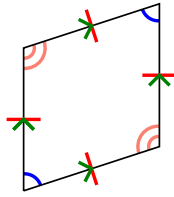
Определите какая перед Вами фигура: квадрат, прямоугольник, треугольник и т.п.

ОТВЕТЫ

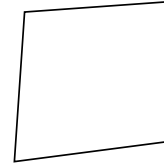
1)



2)



3)



1. \_\_\_\_\_

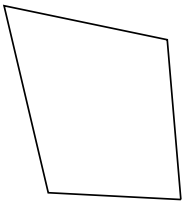
2. \_\_\_\_\_

3. \_\_\_\_\_

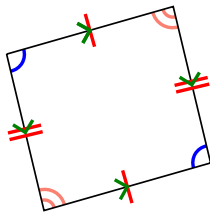
4. \_\_\_\_\_

5. \_\_\_\_\_

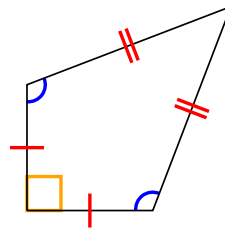
4)



5)



6)



6. \_\_\_\_\_

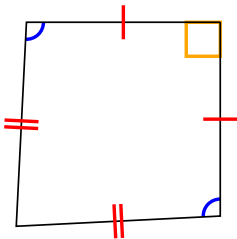
7. \_\_\_\_\_

8. \_\_\_\_\_

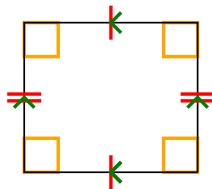
9. \_\_\_\_\_

10. \_\_\_\_\_

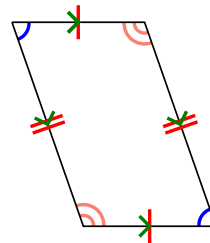
7)



8)



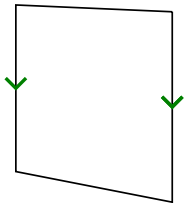
9)



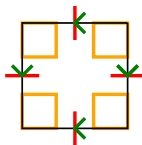
11. \_\_\_\_\_

12. \_\_\_\_\_


10)



11)



12)

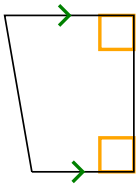




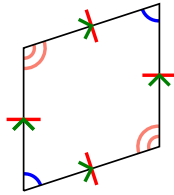
Определите какая перед Вами фигура: квадрат, прямоугольник, треугольник и т.п.

**ОТВЕТЫ**

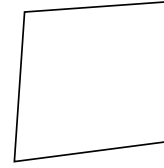
1)



2)

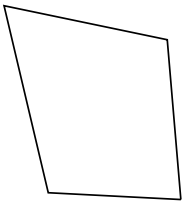


3)

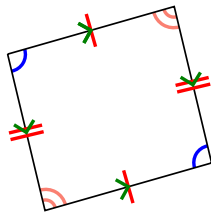


1. Q,T

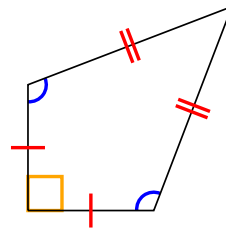
4)



5)



6)



2. Q,P,H

3. Q

4. Q

5. Q,P

6. Q,K

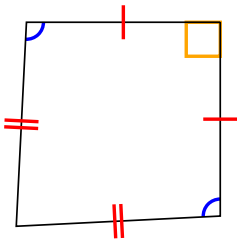
7. Q,K

8. Q,P,R

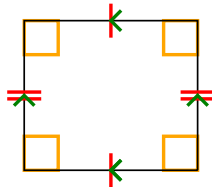
9. Q,P

10. Q,T

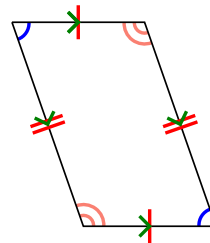
7)



8)



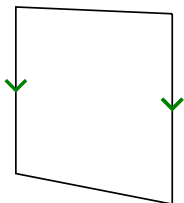
9)



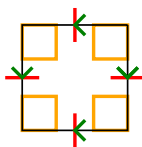
11. Q,P,H,R,S

12. Q


10)



11)



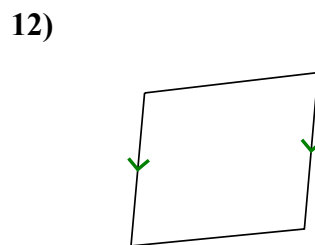
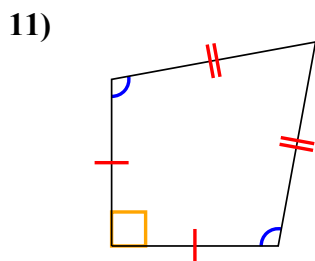
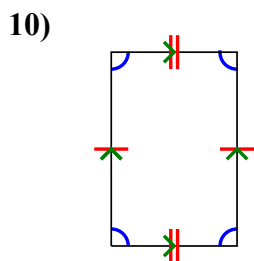
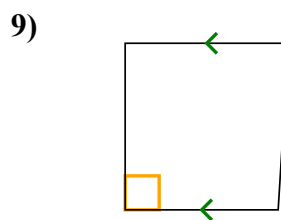
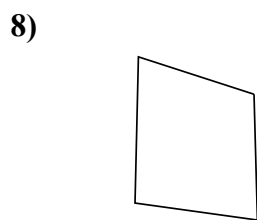
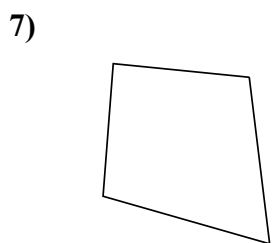
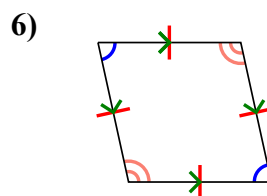
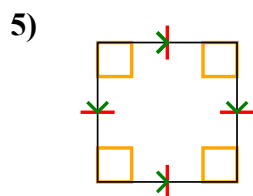
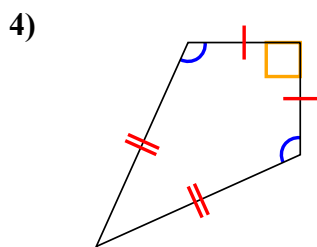
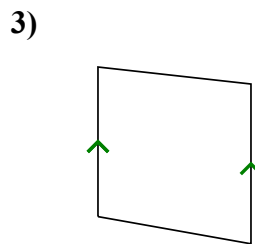
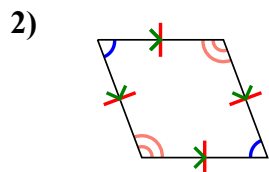
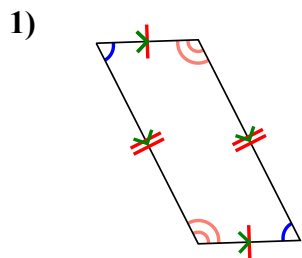
12)





Определите какая перед Вами фигура: квадрат, прямоугольник, треугольник и т.п.

ОТВЕТЫ

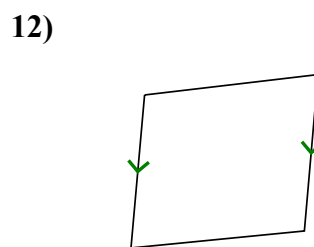
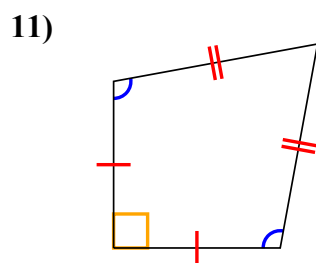
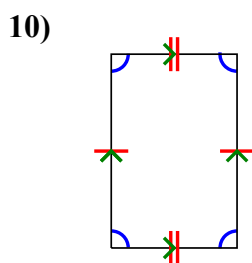
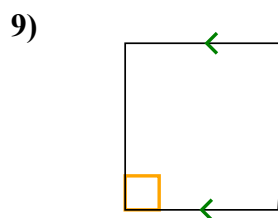
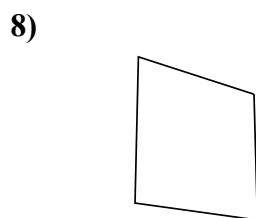
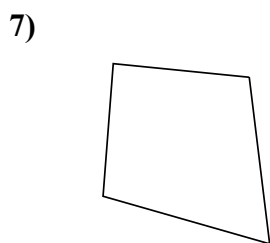
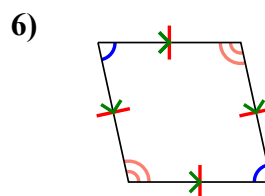
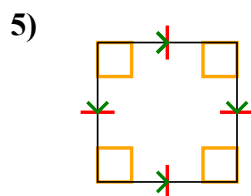
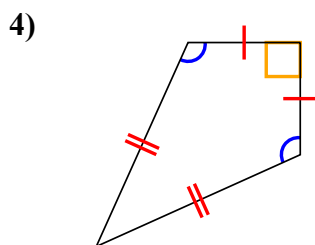
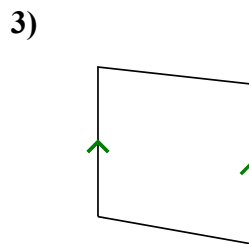
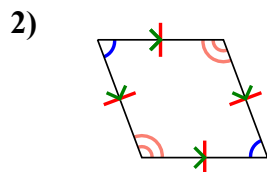
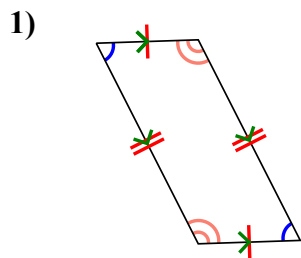


- 1. \_\_\_\_\_
- 2. \_\_\_\_\_
- 3. \_\_\_\_\_
- 4. \_\_\_\_\_
- 5. \_\_\_\_\_
- 6. \_\_\_\_\_
- 7. \_\_\_\_\_
- 8. \_\_\_\_\_
- 9. \_\_\_\_\_
- 10. \_\_\_\_\_
- 11. \_\_\_\_\_
- 12. \_\_\_\_\_



Определите какая перед Вами фигура: квадрат, прямоугольник, треугольник и т.п.

**ОТВЕТЫ**



1. Q,P

2. Q,P,H

3. Q,T

4. Q,K

5. Q,P,H,R,S

6. Q,P,H

7. Q

8. Q

9. Q,T

10. Q,P

11. Q,K

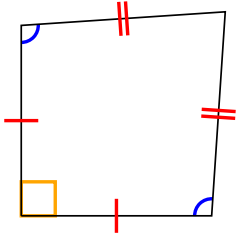
12. Q,T



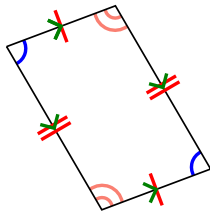
Определите какая перед Вами фигура: квадрат, прямоугольник, треугольник и т.п.

ОТВЕТЫ

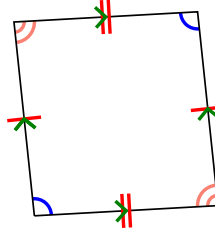
1)



2)



3)



1. \_\_\_\_\_


2. \_\_\_\_\_

3. \_\_\_\_\_

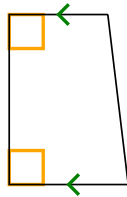
4. \_\_\_\_\_

5. \_\_\_\_\_

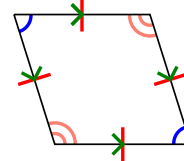
4)



5)



6)



6. \_\_\_\_\_

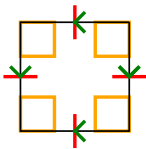
7. \_\_\_\_\_

8. \_\_\_\_\_

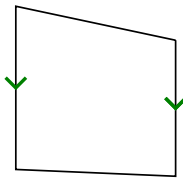
9. \_\_\_\_\_

10. \_\_\_\_\_

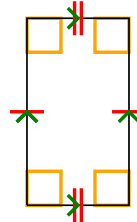
7)



8)




9)



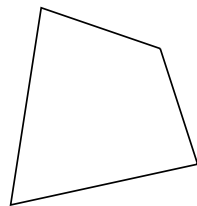
11. \_\_\_\_\_

12. \_\_\_\_\_

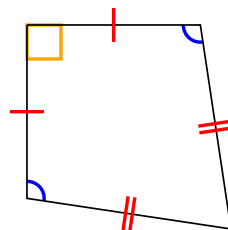
10)



11)



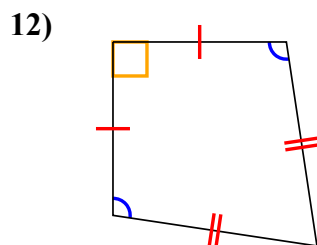
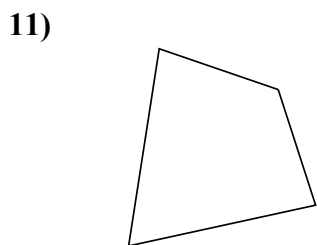
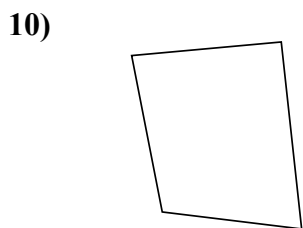
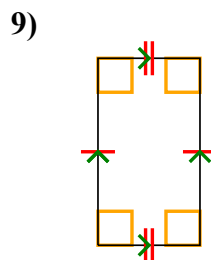
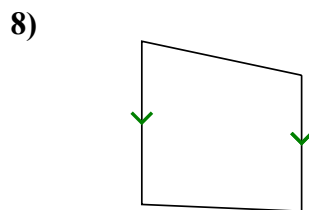
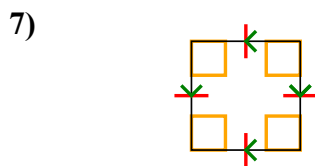
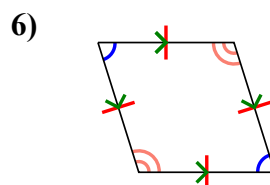
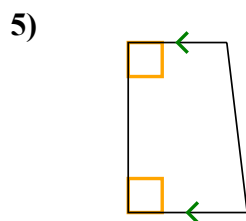
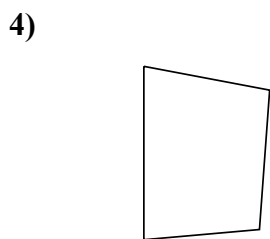
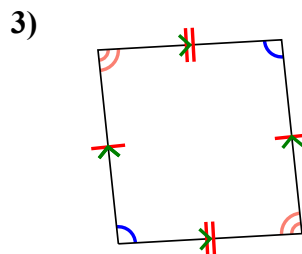
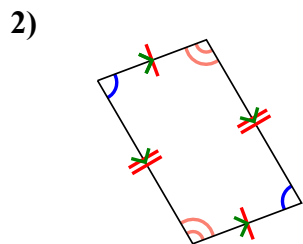
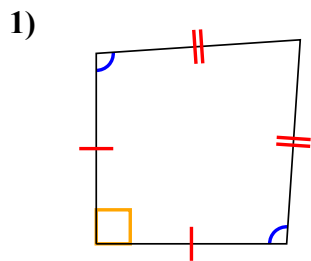
12)





Определите какая перед Вами фигура: квадрат, прямоугольник, треугольник и т.п.

**ОТВЕТЫ**



1. Q, K

2. Q, P

3. Q, P

4. Q

5. Q, T

6. Q, P, H

7. Q, P, H, R, S

8. Q, T

9. Q, P, R

10. Q

11. Q

12. Q, K

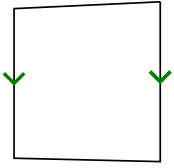




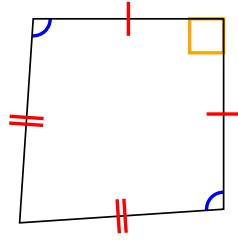
Определите какая перед Вами фигура: квадрат, прямоугольник, треугольник и т.п.

ОТВЕТЫ

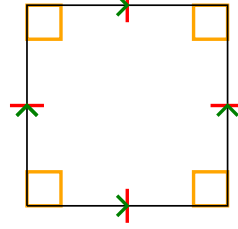
1)



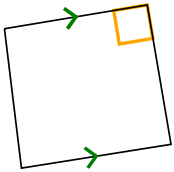
2)



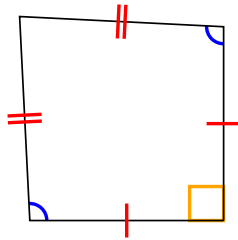
3)



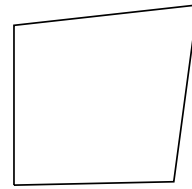
4)



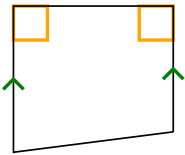
5)



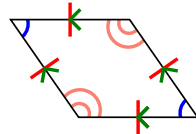
6)



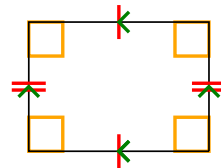
7)



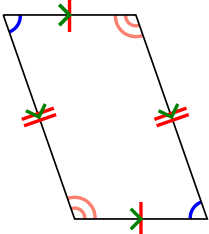
8)



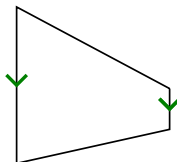
9)



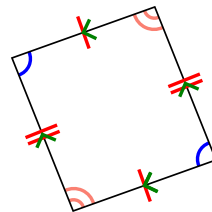
10)



11)



12)

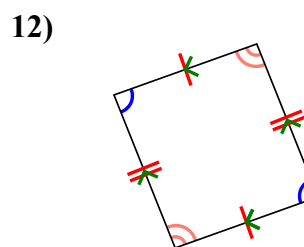
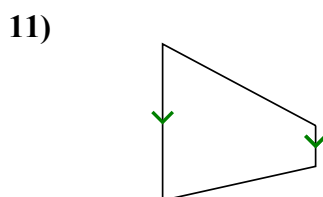
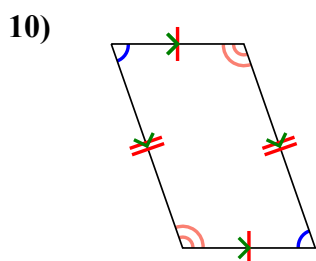
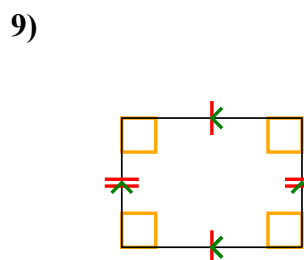
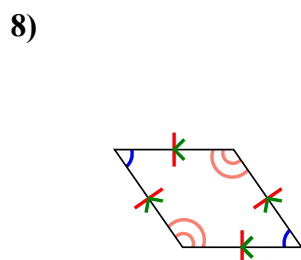
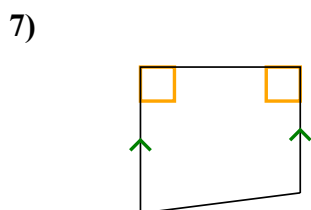
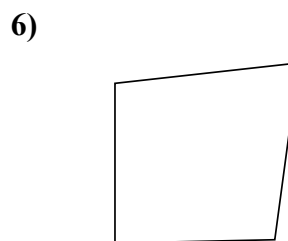
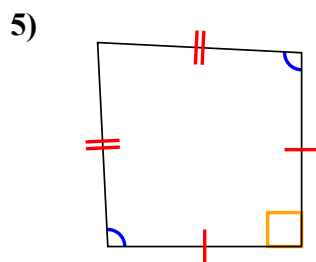
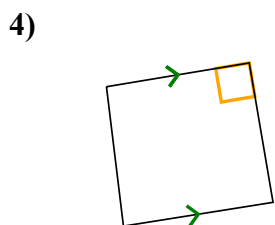
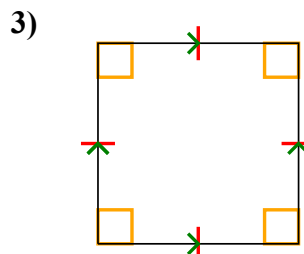
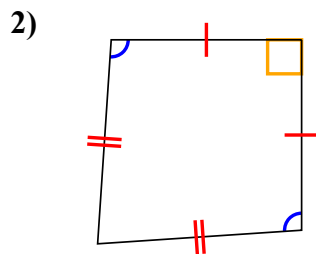
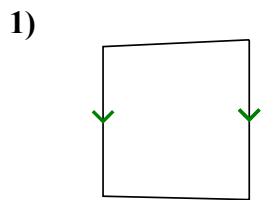


- 1. \_\_\_\_\_
- 2. \_\_\_\_\_
- 3. \_\_\_\_\_
- 4. \_\_\_\_\_
- 5. \_\_\_\_\_
- 6. \_\_\_\_\_
- 7. \_\_\_\_\_
- 8. \_\_\_\_\_
- 9. \_\_\_\_\_
- 10. \_\_\_\_\_
- 11. \_\_\_\_\_
- 12. \_\_\_\_\_



Определите какая перед Вами фигура: квадрат, прямоугольник, треугольник и т.п.

**ОТВЕТЫ**



1. Q,T

2. Q,K

3. Q,P,H,R,S

4. Q,T

5. Q,K

6. Q

7. Q,T

8. Q,P,H

9. Q,P,R

10. Q,P

11. Q,T

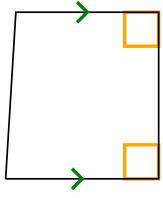
12. Q,P



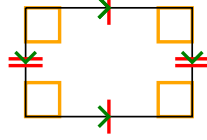
Определите какая перед Вами фигура: квадрат, прямоугольник, треугольник и т.п.

ОТВЕТЫ


1)



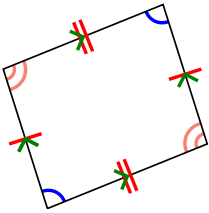
2)



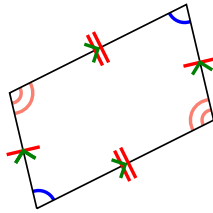
3)



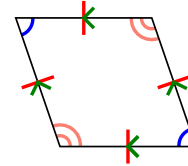
4)



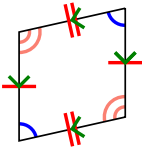
5)



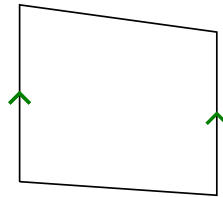
6)



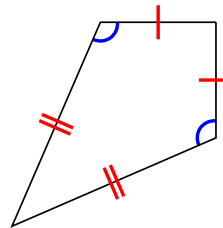
7)



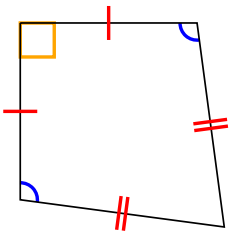
8)




9)




10)



11)



12)

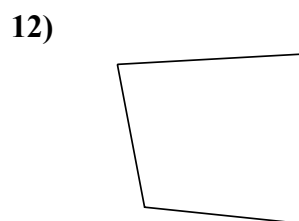
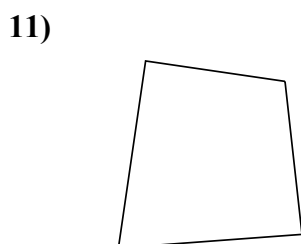
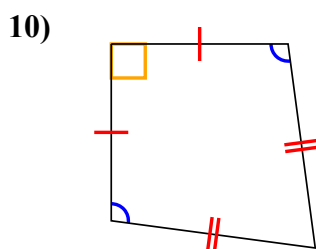
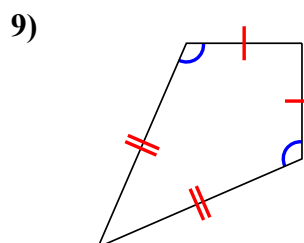
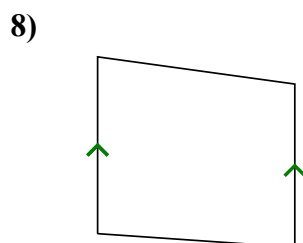
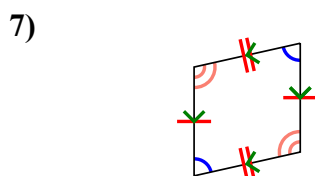
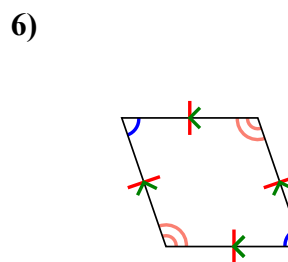
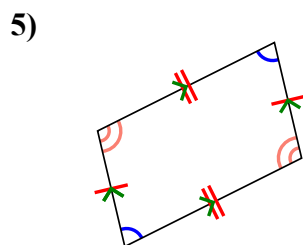
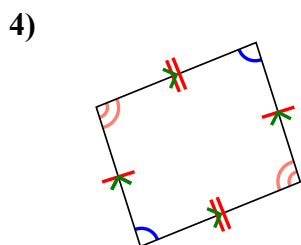
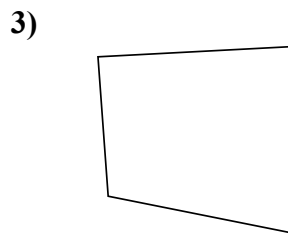
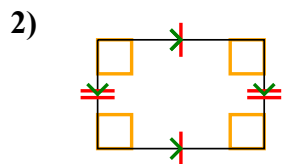
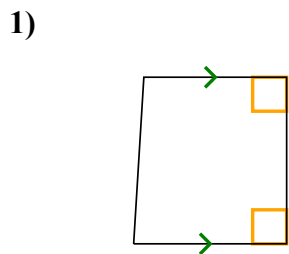


- 1. \_\_\_\_\_
- 2. \_\_\_\_\_
- 3. \_\_\_\_\_
- 4. \_\_\_\_\_
- 5. \_\_\_\_\_
- 6. \_\_\_\_\_
- 7. \_\_\_\_\_
- 8. \_\_\_\_\_
- 9. \_\_\_\_\_
- 10. \_\_\_\_\_
- 11. \_\_\_\_\_
- 12. \_\_\_\_\_



Определите какая перед Вами фигура: квадрат, прямоугольник, треугольник и т.п.

**ОТВЕТЫ**



1. Q,T

2. Q,P,R

3. Q

4. Q,P

5. Q,P

6. Q,P,H

7. Q,P

8. Q,T

9. Q,K

10. Q,K

11. Q

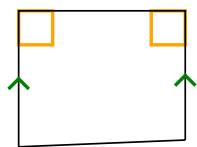
12. Q



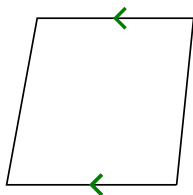
Определите какая перед Вами фигура: квадрат, прямоугольник, треугольник и т.п.

ОТВЕТЫ


1)



2)



3)



1. \_\_\_\_\_

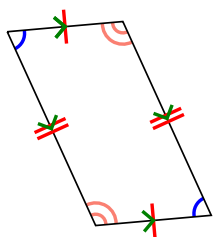
2. \_\_\_\_\_

3. \_\_\_\_\_

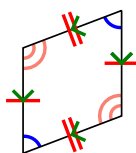
4. \_\_\_\_\_

5. \_\_\_\_\_

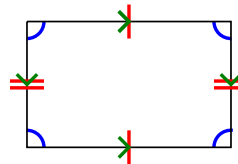
4)



5)



6)



6. \_\_\_\_\_

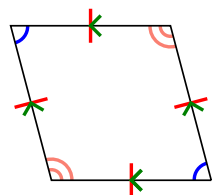
7. \_\_\_\_\_

8. \_\_\_\_\_

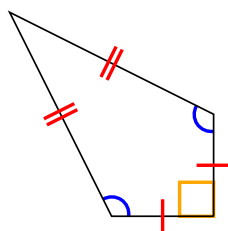
9. \_\_\_\_\_

10. \_\_\_\_\_

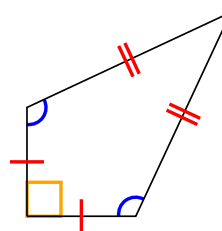
7)



8)



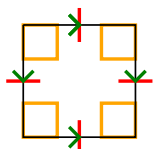
9)



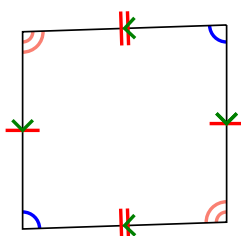
11. \_\_\_\_\_

12. \_\_\_\_\_


10)



11)



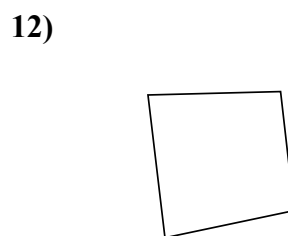
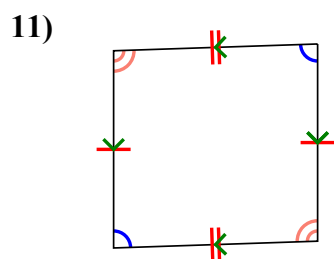
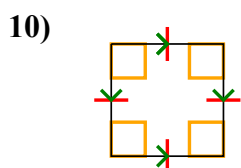
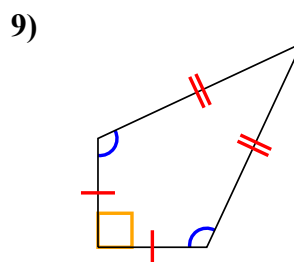
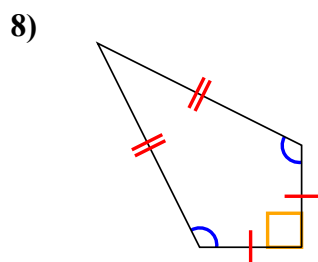
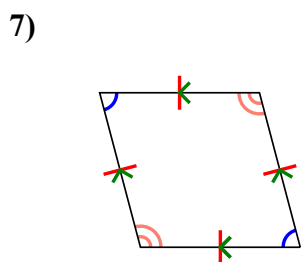
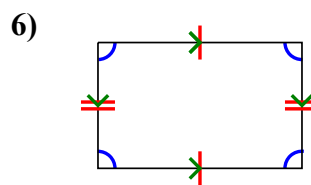
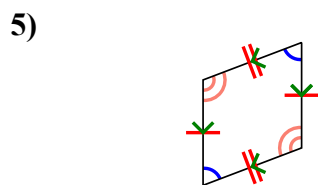
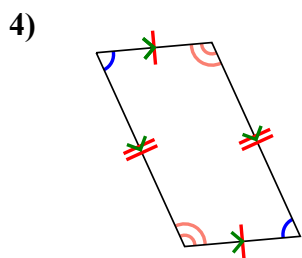
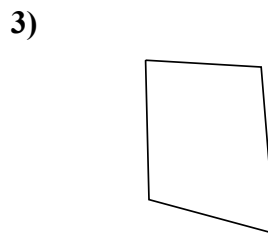
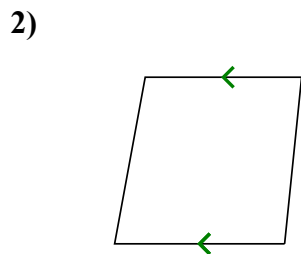
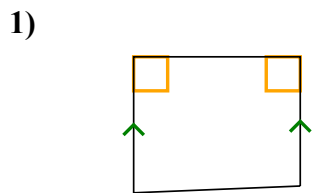
12)





Определите какая перед Вами фигура: квадрат, прямоугольник, треугольник и т.п.

**ОТВЕТЫ**



1. Q,T

2. Q,T

3. Q

4. Q,P

5. Q,P

6. Q,P

7. Q,P,H

8. Q,K

9. Q,K

10. Q,P,H,R,S

11. Q,P

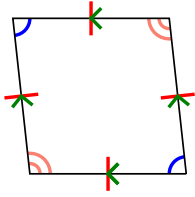
12. Q



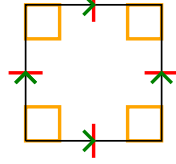
Определите какая перед Вами фигура: квадрат, прямоугольник, треугольник и т.п.

ОТВЕТЫ

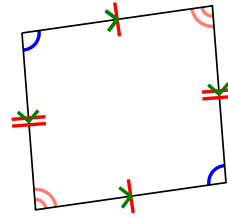
1)



2)



3)



1. \_\_\_\_\_

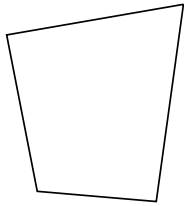
2. \_\_\_\_\_

3. \_\_\_\_\_

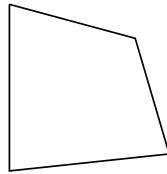
4. \_\_\_\_\_

5. \_\_\_\_\_

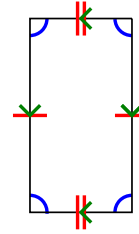
4)



5)



6)



6. \_\_\_\_\_

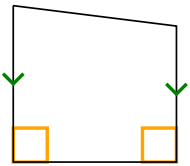
7. \_\_\_\_\_

8. \_\_\_\_\_

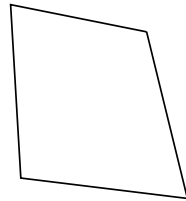
9. \_\_\_\_\_

10. \_\_\_\_\_

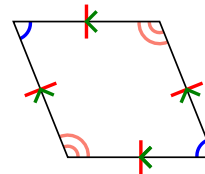
7)



8)



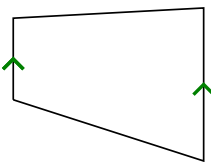
9)



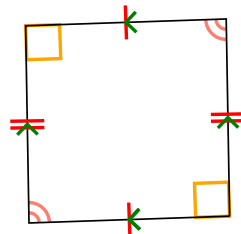
11. \_\_\_\_\_

12. \_\_\_\_\_

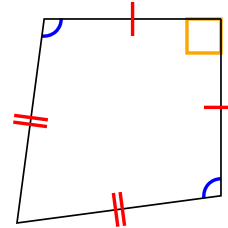
10)



11)



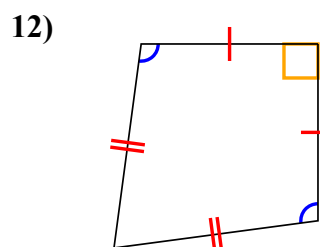
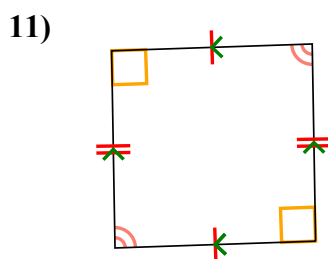
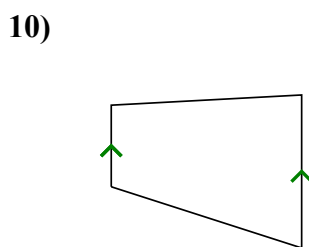
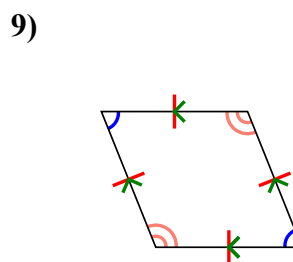
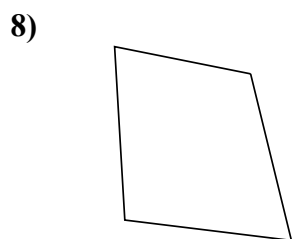
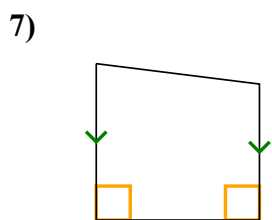
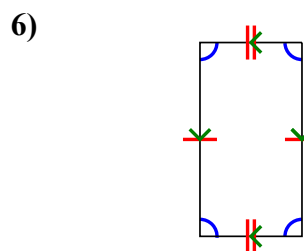
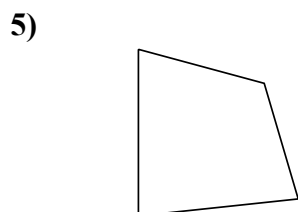
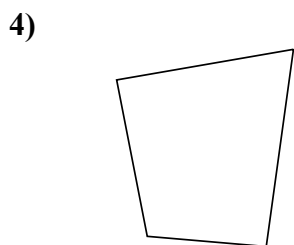
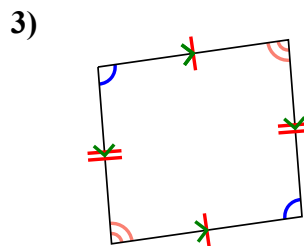
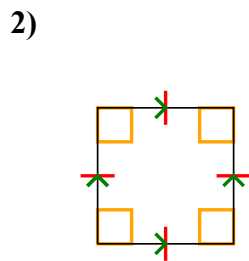
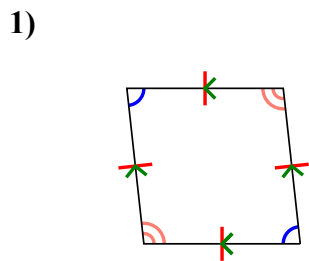
12)





Определите какая перед Вами фигура: квадрат, прямоугольник, треугольник и т.п.

**ОТВЕТЫ**



1. Q,P,H

2. Q,P,H,R,S

3. Q,P

4. Q

5. Q

6. Q,P

7. Q,T

8. Q

9. Q,P,H

10. Q,T

11. Q,P

12. Q,K

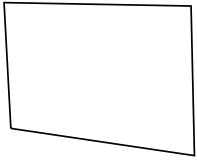




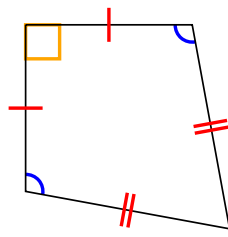
Определите какая перед Вами фигура: квадрат, прямоугольник, треугольник и т.п.

ОТВЕТЫ

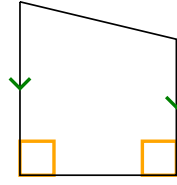
1)



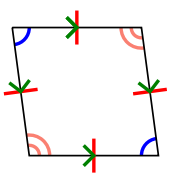
2)



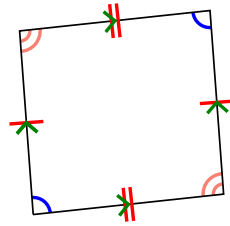
3)



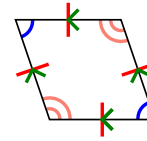
4)



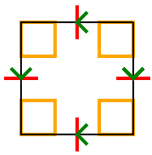
5)



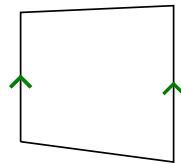
6)



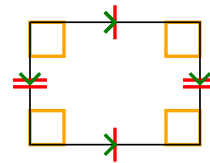
7)



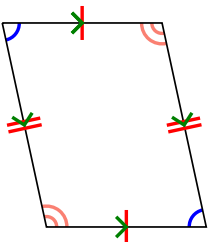
8)




9)



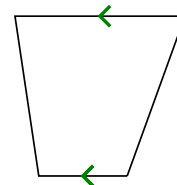
10)



11)



12)

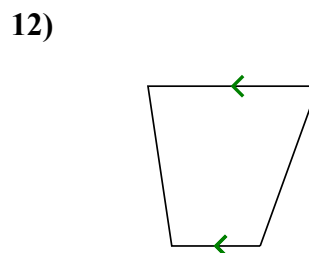
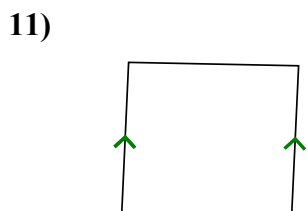
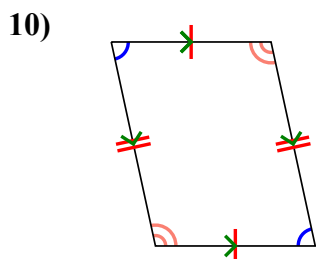
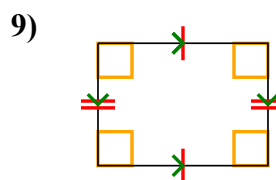
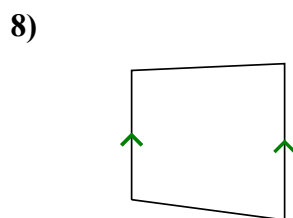
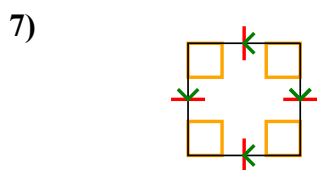
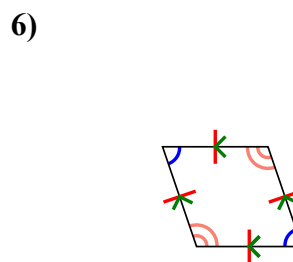
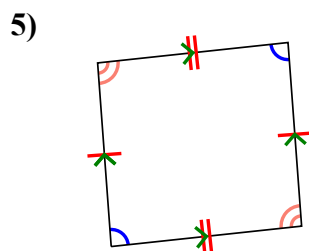
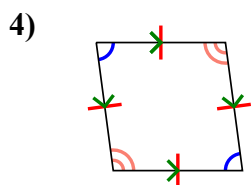
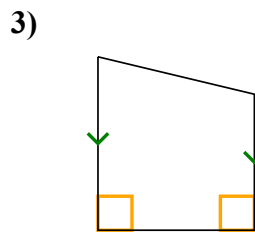
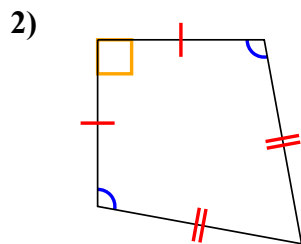



- 1. \_\_\_\_\_
- 2. \_\_\_\_\_
- 3. \_\_\_\_\_
- 4. \_\_\_\_\_
- 5. \_\_\_\_\_
- 6. \_\_\_\_\_
- 7. \_\_\_\_\_
- 8. \_\_\_\_\_
- 9. \_\_\_\_\_
- 10. \_\_\_\_\_
- 11. \_\_\_\_\_
- 12. \_\_\_\_\_



Определите какая перед Вами фигура: квадрат, прямоугольник, треугольник и т.п.

**ОТВЕТЫ**



1. Q

2. Q,К

3. Q,Т

4. Q,Р,Н

5. Q,Р

6. Q,Р,Н

7. Q,Р,Н,Р,S

8. Q,Т

9. Q,Р,Р

10. Q,Р

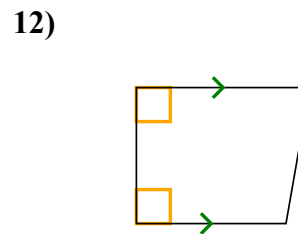
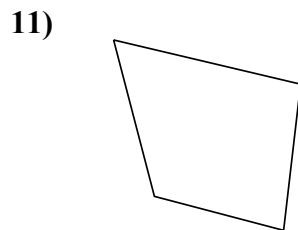
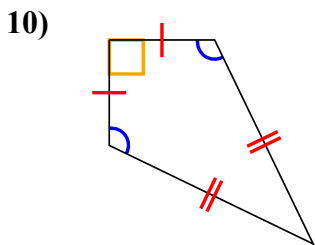
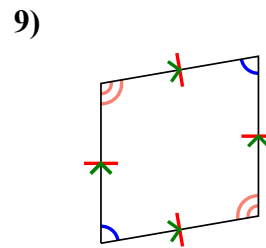
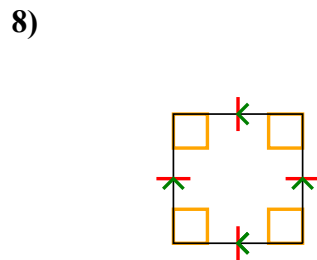
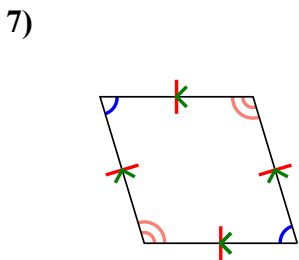
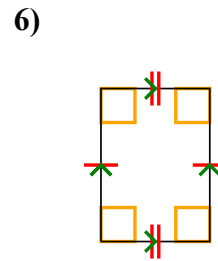
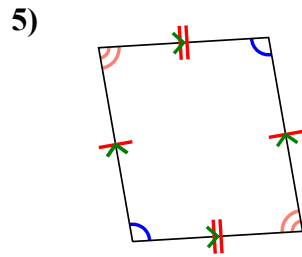
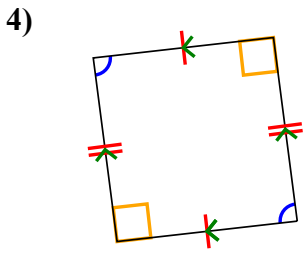
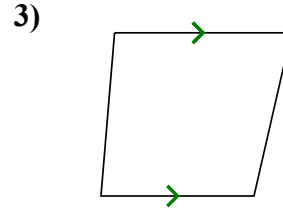
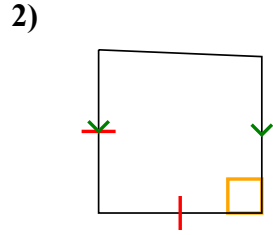
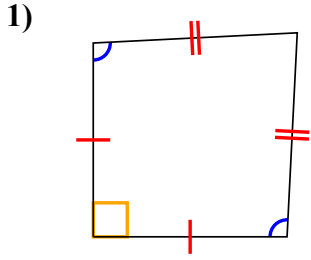
11. Q,Т

12. Q,Т



Определите какая перед Вами фигура: квадрат, прямоугольник, треугольник и т.п.

ОТВЕТЫ

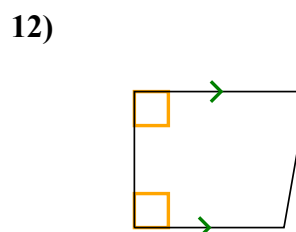
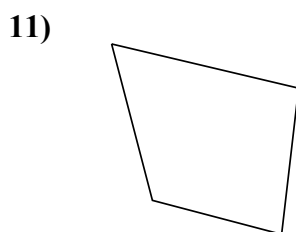
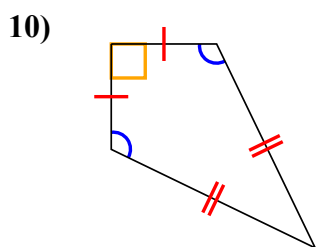
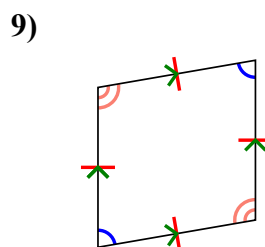
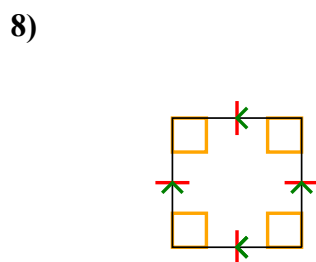
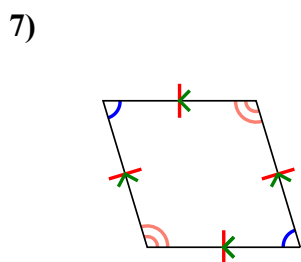
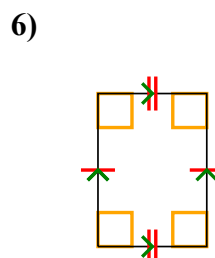
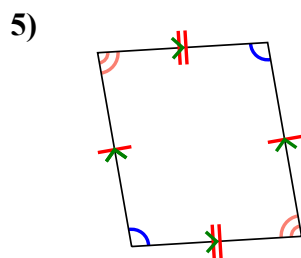
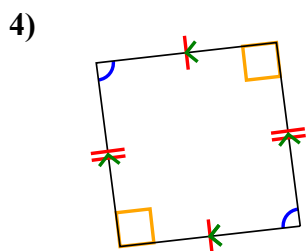
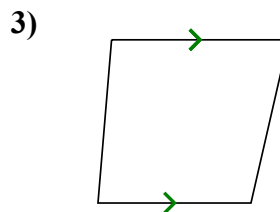
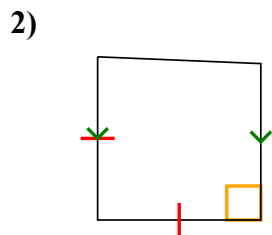
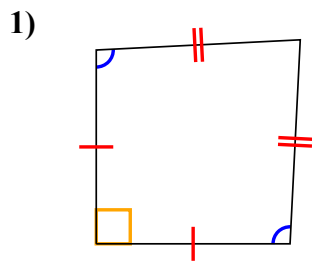


- 1. \_\_\_\_\_
- 2. \_\_\_\_\_
- 3. \_\_\_\_\_
- 4. \_\_\_\_\_
- 5. \_\_\_\_\_
- 6. \_\_\_\_\_
- 7. \_\_\_\_\_
- 8. \_\_\_\_\_
- 9. \_\_\_\_\_
- 10. \_\_\_\_\_
- 11. \_\_\_\_\_
- 12. \_\_\_\_\_



Определите какая перед Вами фигура: квадрат, прямоугольник, треугольник и т.п.

**ОТВЕТЫ**



1. Q, K

2. Q, T

3. Q, T

4. Q, P

5. Q, P

6. Q, P, R

7. Q, P, H

8. Q, P, H, R, S

9. Q, P, H

10. Q, K

11. Q

12. Q, T