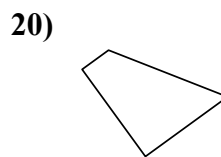
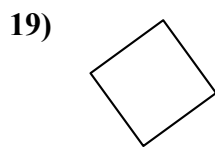
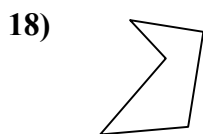
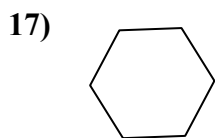
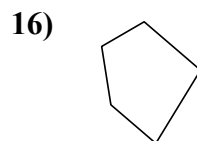
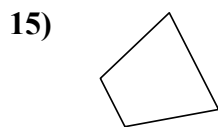

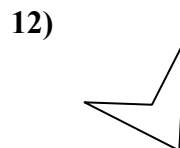
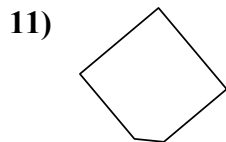
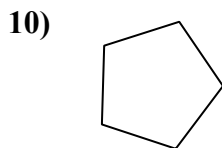
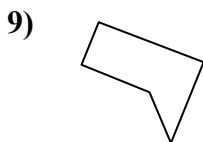
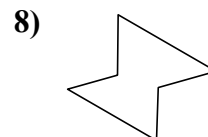
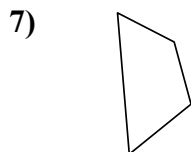
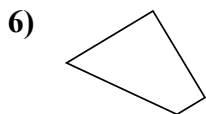
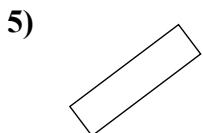
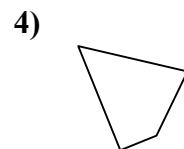
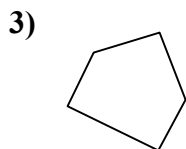
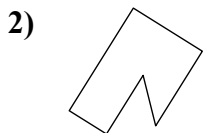
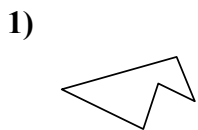




Определите, изображен ли четырехугольник или нет. (да или нет)

ОТВЕТЫ



1. \_\_\_\_\_

2. \_\_\_\_\_

3. \_\_\_\_\_

4. \_\_\_\_\_

5. \_\_\_\_\_

6. \_\_\_\_\_

7. \_\_\_\_\_

8. \_\_\_\_\_

9. \_\_\_\_\_

10. \_\_\_\_\_

11. \_\_\_\_\_

12. \_\_\_\_\_

13. \_\_\_\_\_

14. \_\_\_\_\_

15. \_\_\_\_\_

16. \_\_\_\_\_

17. \_\_\_\_\_

18. \_\_\_\_\_

19. \_\_\_\_\_

20. \_\_\_\_\_

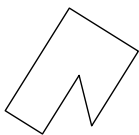


Определите, изображен ли четырехугольник или нет. (да или нет)

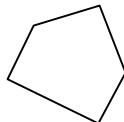
1)



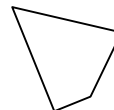
2)



3)



4)



**ОТВЕТЫ**

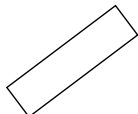
1. нет

2. нет

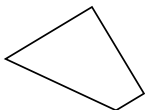
3. нет

4. да

5)



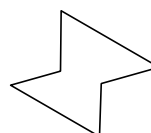
6)



7)



8)



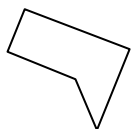
5. да

6. да

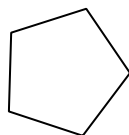
7. да

8. нет

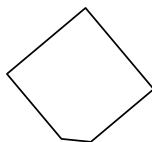
9)



10)



11)



12)



9. нет

10. нет

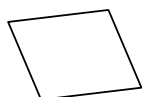
11. нет

12. да

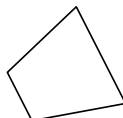
13)



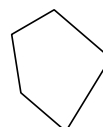
14)



15)



16)



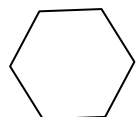
13. да

14. да

15. да

16. нет

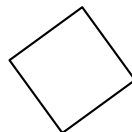
17)



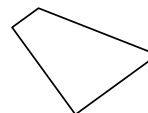
18)



19)



20)



17. нет

18. нет

19. да

20. да