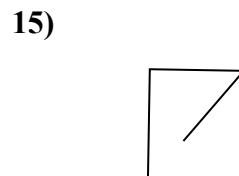
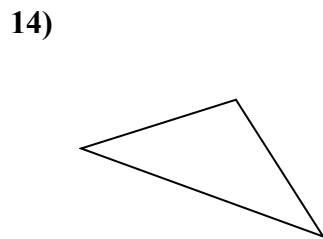
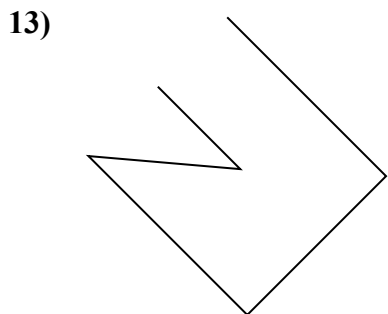
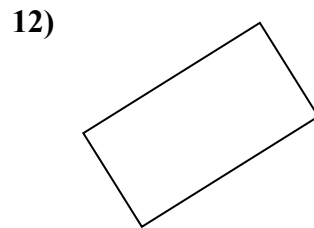
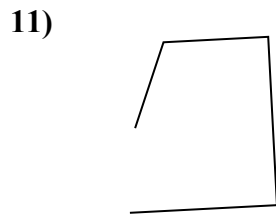
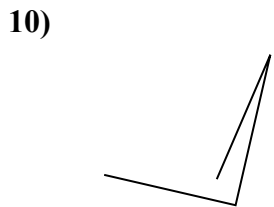

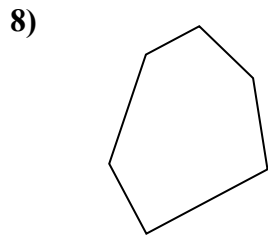
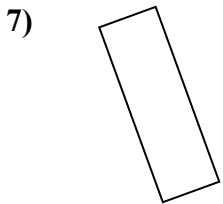
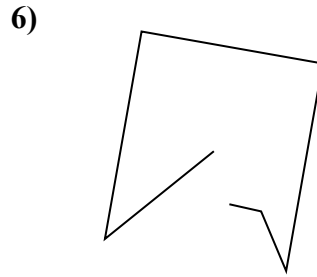
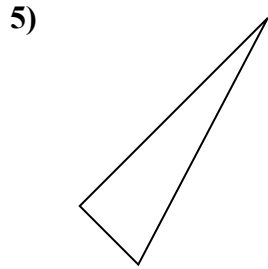
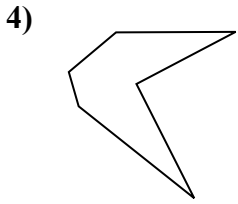
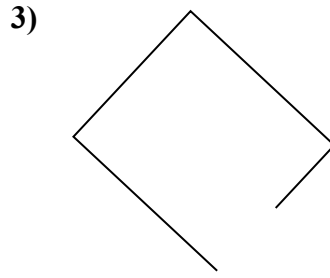
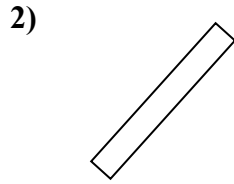
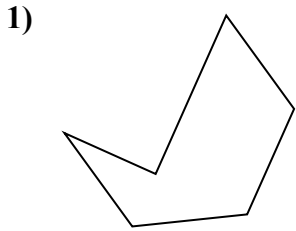




Определите, какая фигура изображена перед нами.

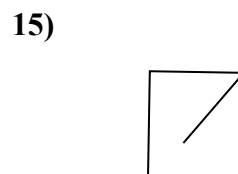
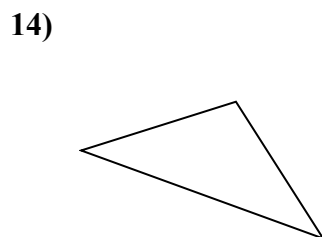
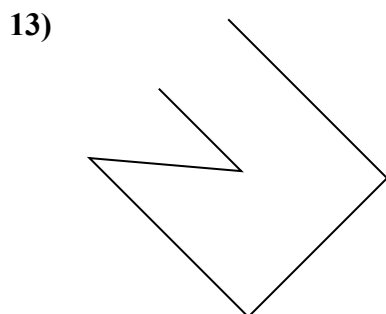
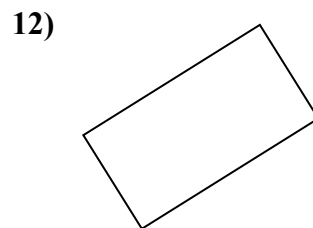
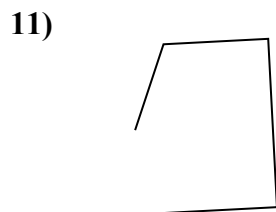
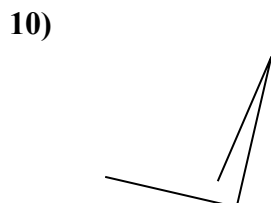

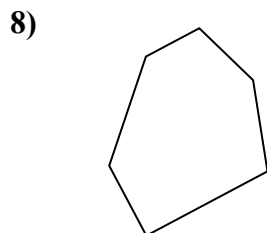
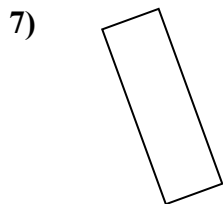
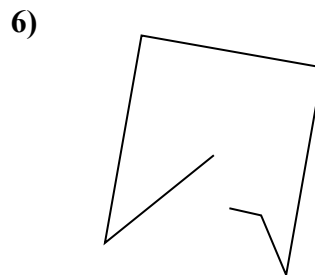
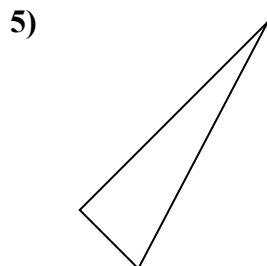
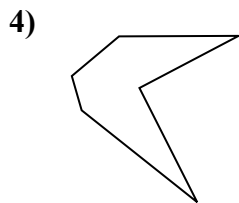
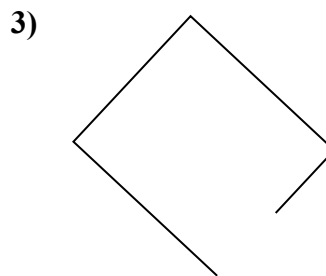
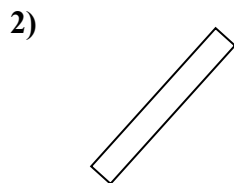
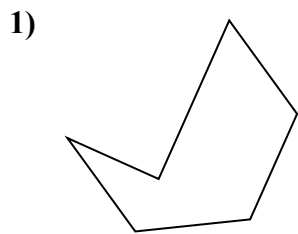
ОТВЕТЫ



- 1. \_\_\_\_\_
- 2. \_\_\_\_\_
- 3. \_\_\_\_\_
- 4. \_\_\_\_\_
- 5. \_\_\_\_\_
- 6. \_\_\_\_\_
- 7. \_\_\_\_\_
- 8. \_\_\_\_\_
- 9. \_\_\_\_\_
- 10. \_\_\_\_\_
- 11. \_\_\_\_\_
- 12. \_\_\_\_\_
- 13. \_\_\_\_\_
- 14. \_\_\_\_\_
- 15. \_\_\_\_\_



Определите, какая фигура изображена перед нами.



**ОТВЕТЫ**

1. шестиугольник

2. прямоугольник

3. другая

4. шестиугольник

5. треугольник

6. другая

7. прямоугольник

8. шестиугольник

9. треугольник

10. другая

11. другая

12. прямоугольник

13. другая

14. треугольник

15. другая