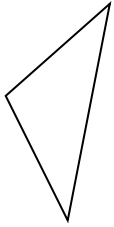




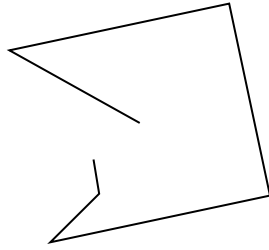
Определите, какая фигура изображена перед нами.

ОТВЕТЫ

1)



2)



3)



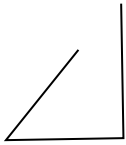
1. _____

2. _____

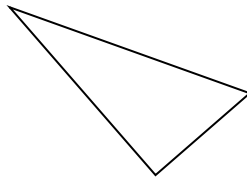
3. _____

4. _____

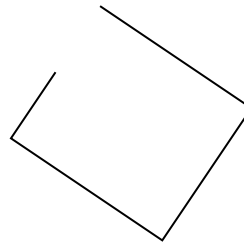
4)



5)



6)



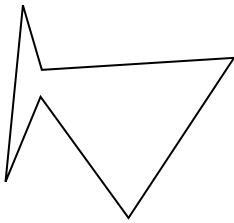
5. _____

6. _____

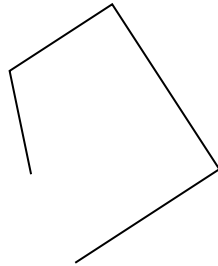
7. _____

8. _____

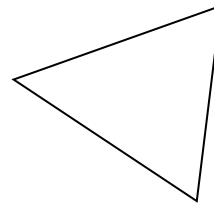
7)



8)



9)




9. _____

10. _____

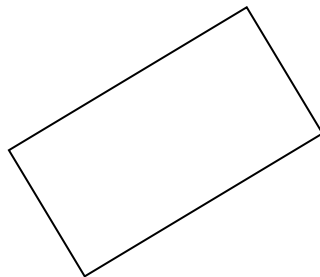
11. _____

12. _____


10)



11)



12)

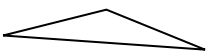


13. _____


14. _____

15. _____

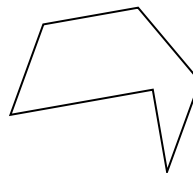
13)



14)



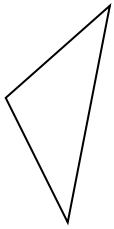
15)



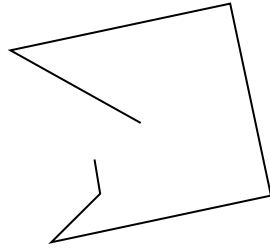


Определите, какая фигура изображена перед нами.

1)



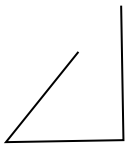
2)



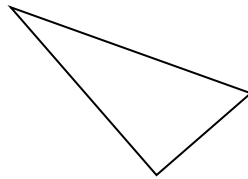
3)



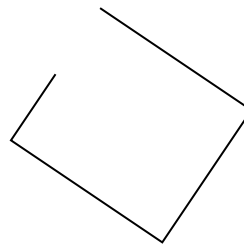
4)



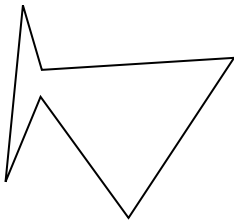
5)



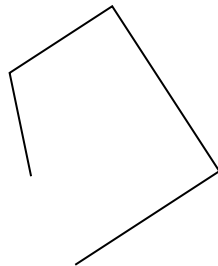
6)



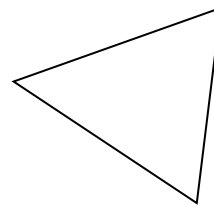
7)




8)



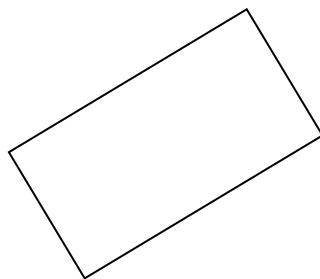
9)




10)



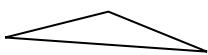
11)




12)



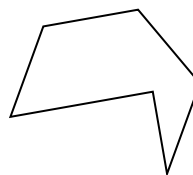
13)



14)



15)



ОТВЕТЫ

1. треугольник

2. другая

3. другая

4. другая

5. треугольник

6. другая

7. шестиугольник

8. другая

9. треугольник

10. другая

11. прямоугольник

12. шестиугольник

13. треугольник

14. другая

15. шестиугольник