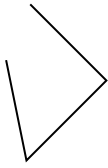




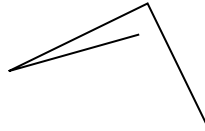
Определите, какая фигура изображена перед нами.

ОТВЕТЫ

1)



2)



3)



1. _____

2. _____

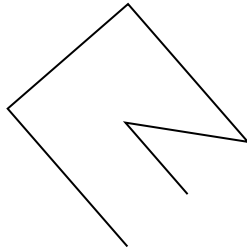
3. _____

4. _____

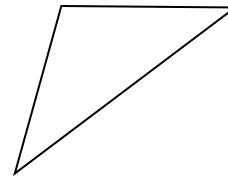
4)



5)



6)



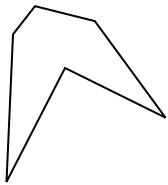
5. _____

6. _____

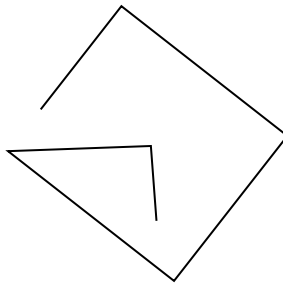
7. _____

8. _____


7)



8)



9)




9. _____

10. _____

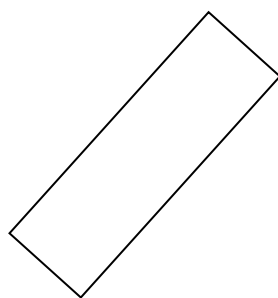
11. _____

12. _____

10)



11)



12)

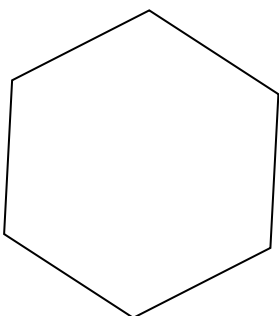


13. _____

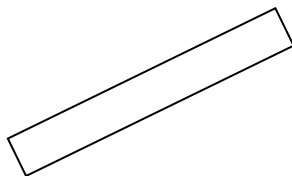
14. _____

15. _____

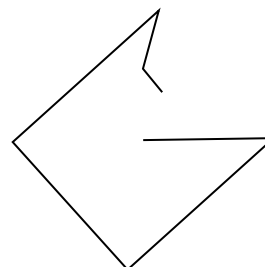
13)



14)



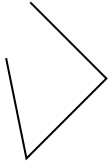
15)



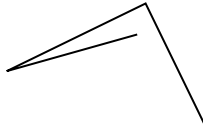


Определите, какая фигура изображена перед нами.

1)



2)



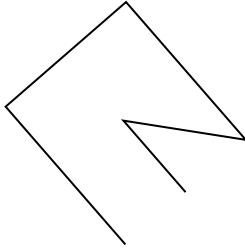
3)



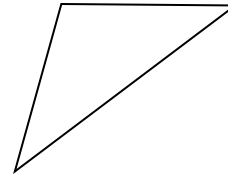
4)



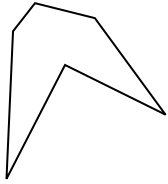
5)



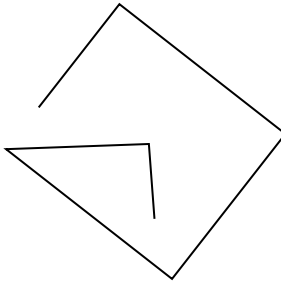
6)




7)




8)



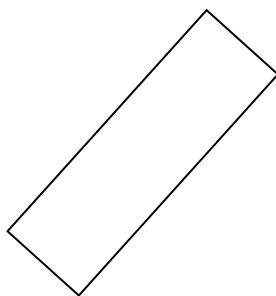
9)



10)



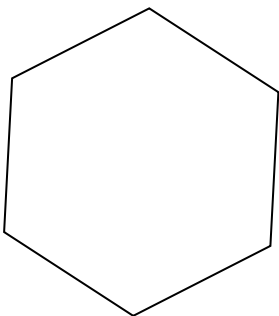
11)



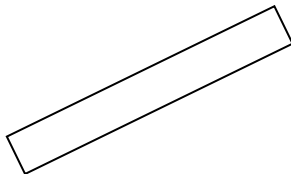
12)



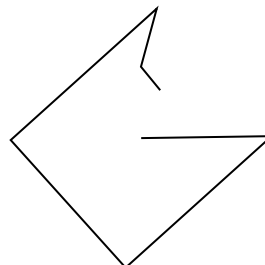
13)



14)



15)



ОТВЕТЫ

1. другая

2. другая

3. треугольник

4. другая

5. другая

6. треугольник

7. шестиугольник

8. другая

9. треугольник

10. квадрат

11. прямоугольник

12. прямоугольник

13. шестиугольник

14. прямоугольник

15. другая