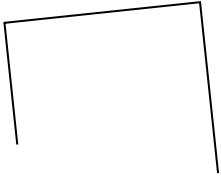




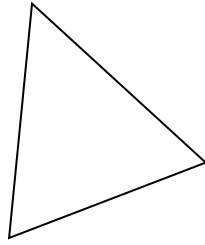
Определите, какая фигура изображена перед нами.

ОТВЕТЫ

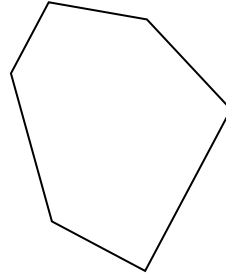
1)



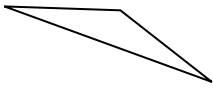
2)



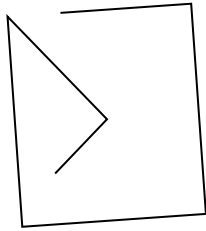
3)




4)



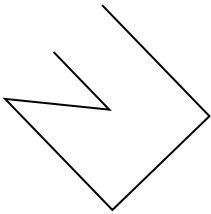
5)




6)



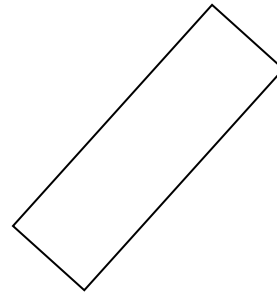
7)



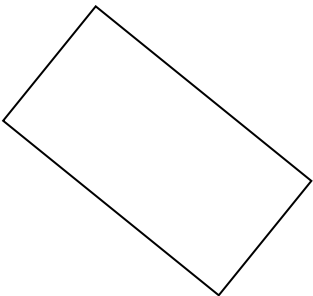
8)



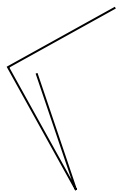
9)




10)



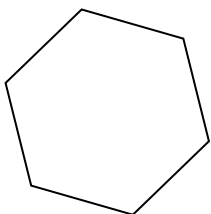
11)



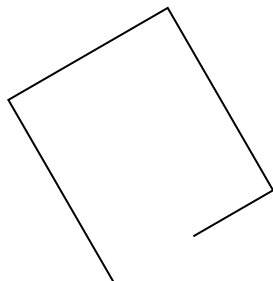
12)



13)



14)



15)

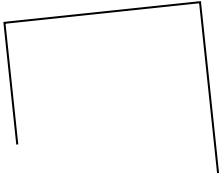


- 1. _____
- 2. _____
- 3. _____
- 4. _____
- 5. _____
- 6. _____
- 7. _____
- 8. _____
- 9. _____
- 10. _____
- 11. _____
- 12. _____
- 13. _____
- 14. _____
- 15. _____

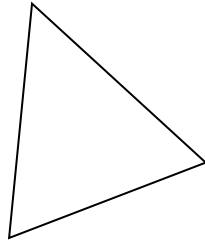


Определите, какая фигура изображена перед нами.

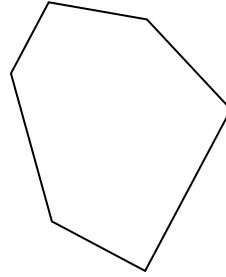
1)



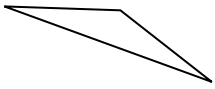
2)



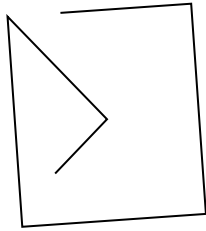
3)




4)



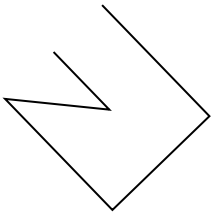
5)




6)



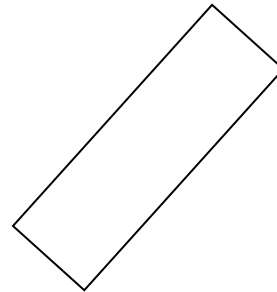
7)



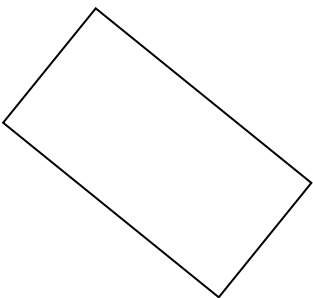
8)



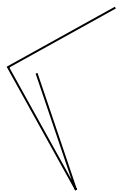
9)




10)



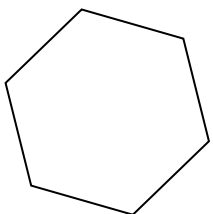
11)



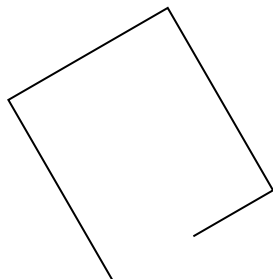
12)



13)



14)



15)



ОТВЕТЫ

1. другая

2. треугольник

3. шестиугольник

4. треугольник

5. другая

6. шестиугольник

7. другая

8. квадрат

9. прямоугольник

10. прямоугольник

11. другая

12. другая

13. шестиугольник

14. другая

15. треугольник