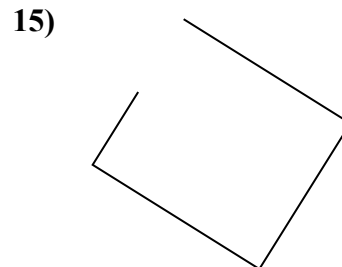
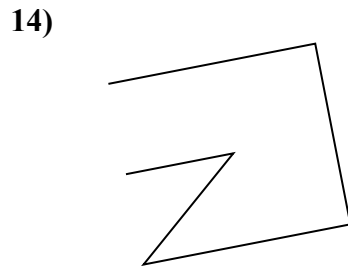
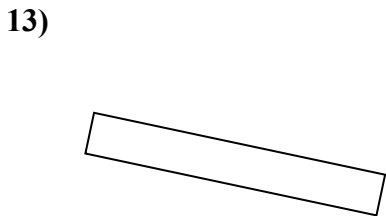
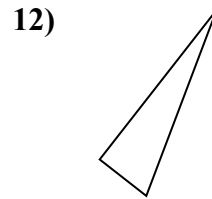
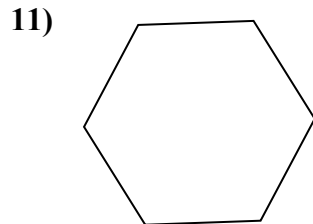
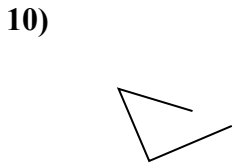
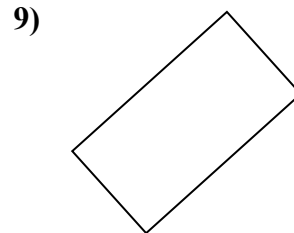
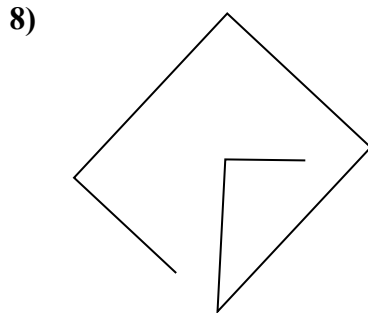
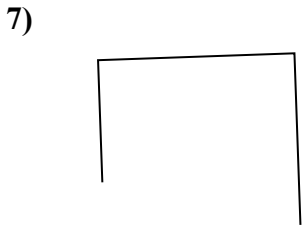
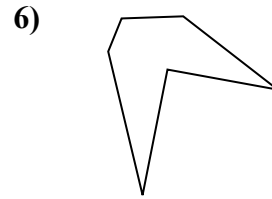
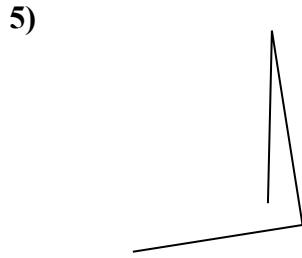
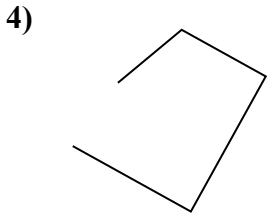
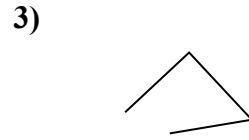
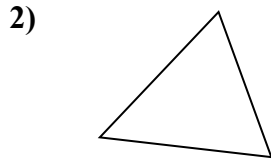





Определите, какая фигура изображена перед нами.

ОТВЕТЫ

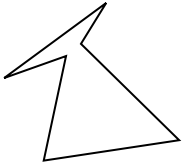


- 1. _____
- 2. _____
- 3. _____
- 4. _____
- 5. _____
- 6. _____
- 7. _____
- 8. _____
- 9. _____
- 10. _____
- 11. _____
- 12. _____
- 13. _____
- 14. _____
- 15. _____

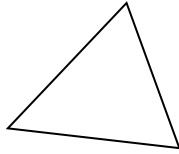


Определите, какая фигура изображена перед нами.

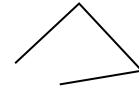
1)



2)



3)



ОТВЕТЫ

1. шестиугольник

2. треугольник

3. другая

4. другая

5. другая

6. шестиугольник

7. другая

8. другая

9. прямоугольник

10. другая

11. шестиугольник

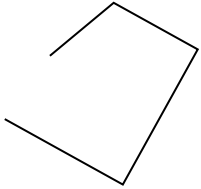
12. треугольник

13. прямоугольник

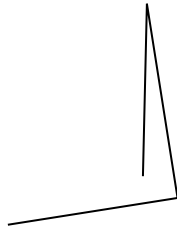
14. другая

15. другая

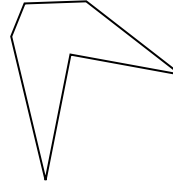
4)




5)



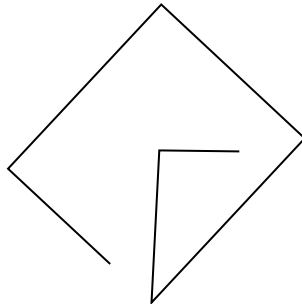
6)



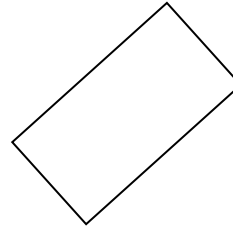
7)



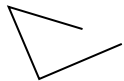
8)



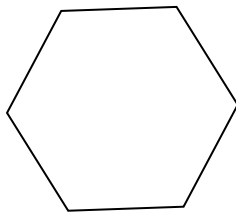
9)



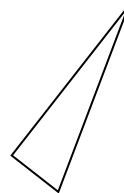
10)



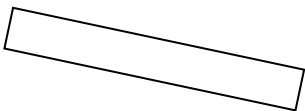
11)




12)



13)



14)



15)

