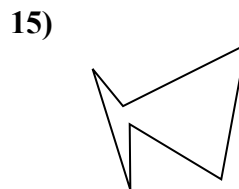
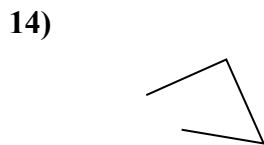
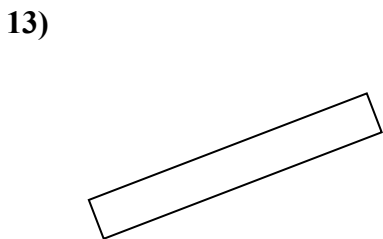
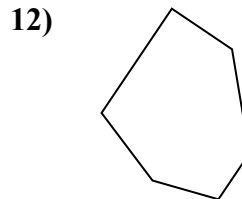
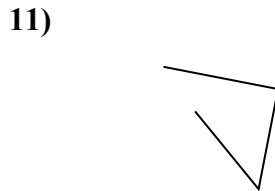
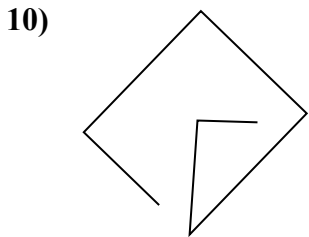
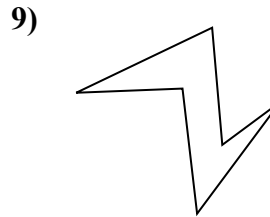
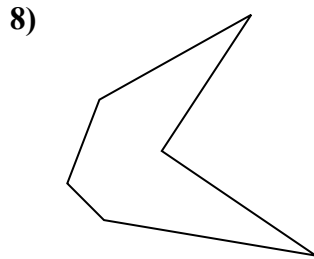
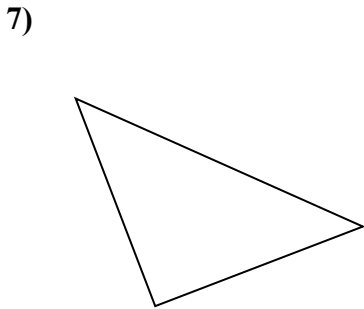

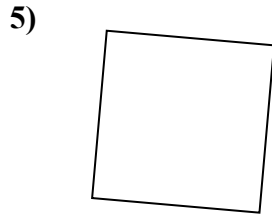

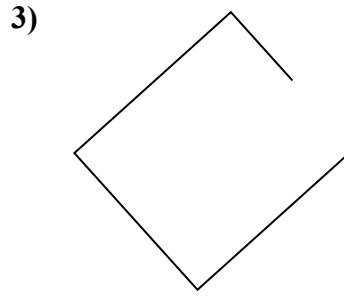
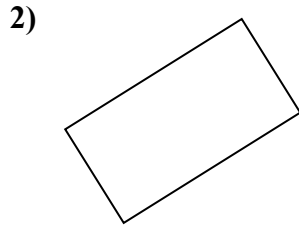
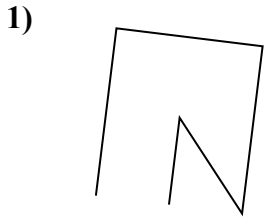




Определите, какая фигура изображена перед нами.

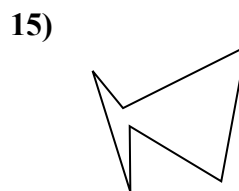
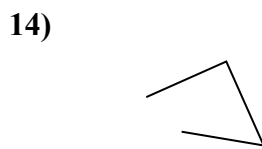
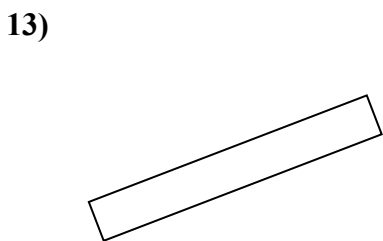
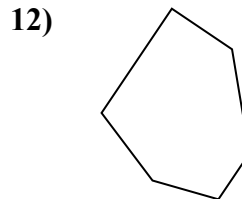
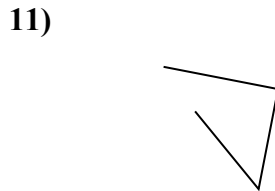
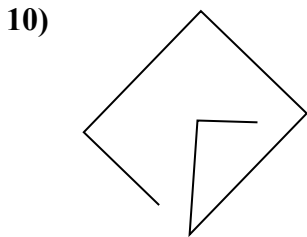
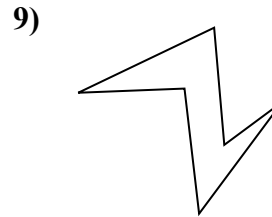
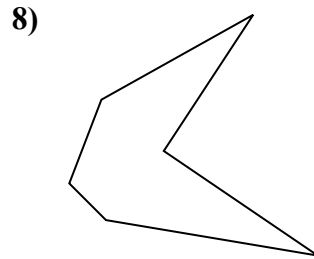
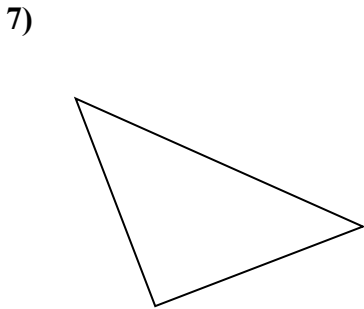

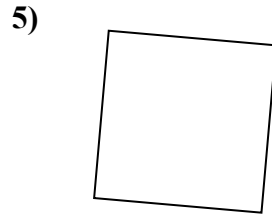
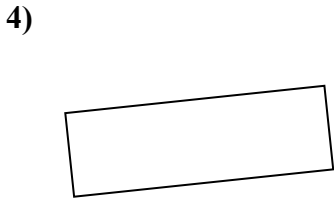
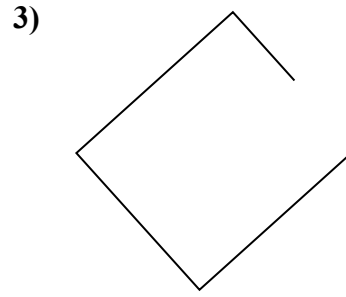
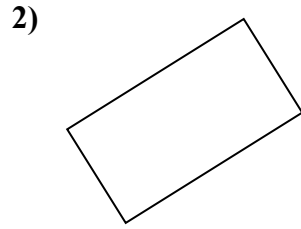
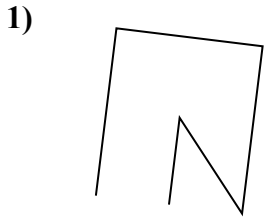
ОТВЕТЫ



- 1. _____
- 2. _____
- 3. _____
- 4. _____
- 5. _____
- 6. _____
- 7. _____
- 8. _____
- 9. _____
- 10. _____
- 11. _____
- 12. _____
- 13. _____
- 14. _____
- 15. _____



Определите, какая фигура изображена перед нами.



ОТВЕТЫ

1. другая

2. прямоугольник

3. другая

4. прямоугольник

5. квадрат

6. треугольник

7. треугольник

8. шестиугольник

9. шестиугольник

10. другая

11. другая

12. шестиугольник

13. прямоугольник

14. другая

15. шестиугольник



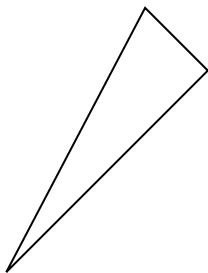
Определите, какая фигура изображена перед нами.

ОТВЕТЫ

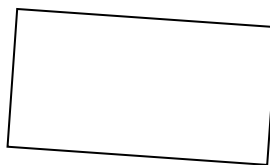
1)



2)

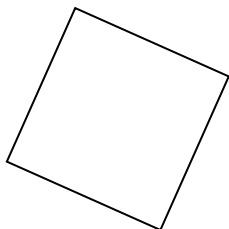


3)

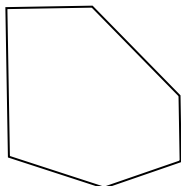


1. _____

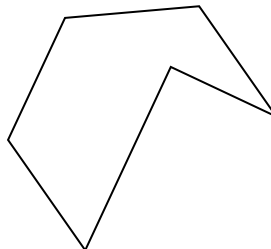
4)



5)

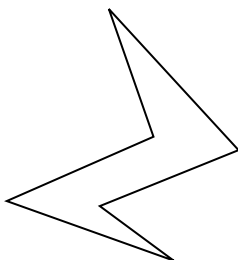


6)

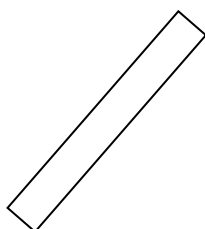


2. _____

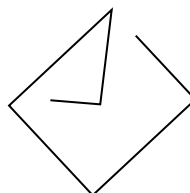
7)



8)



9)

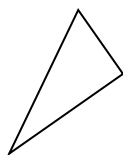


3. _____

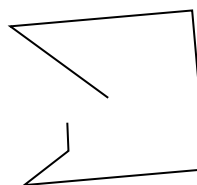
10)



11)




12)

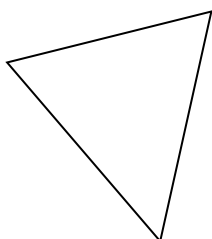


4. _____

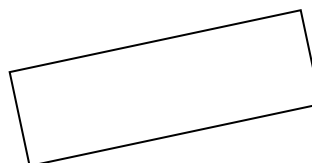
13)



14)



15)



5. _____

6. _____

7. _____

8. _____

9. _____

10. _____

11. _____

12. _____

13. _____

14. _____

15. _____

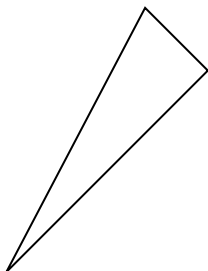


Определите, какая фигура изображена перед нами.

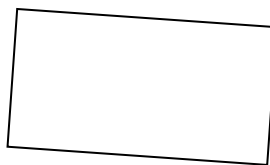
1)



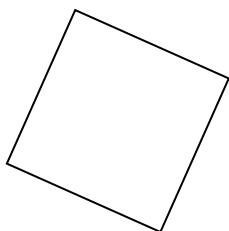
2)



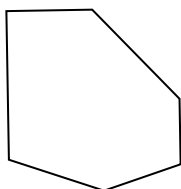
3)



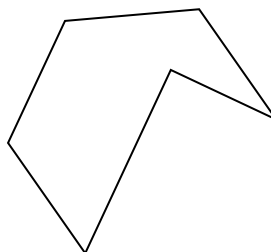
4)



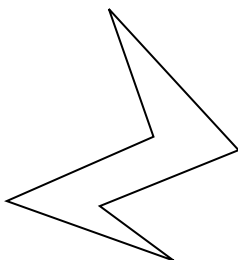
5)



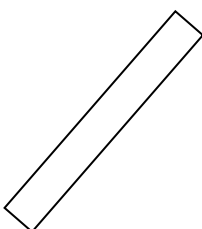
6)



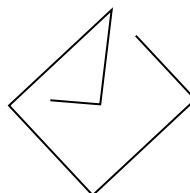
7)



8)



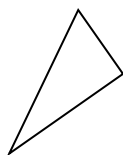
9)



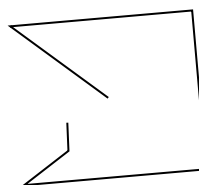
10)




11)



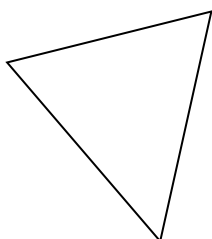
12)



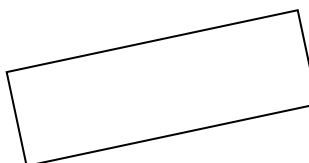
13)



14)



15)



ОТВЕТЫ

1. другая

2. треугольник

3. прямоугольник

4. квадрат

5. шестиугольник

6. шестиугольник

7. шестиугольник

8. прямоугольник

9. другая

10. треугольник

11. треугольник

12. другая

13. другая

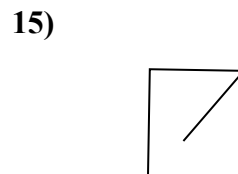
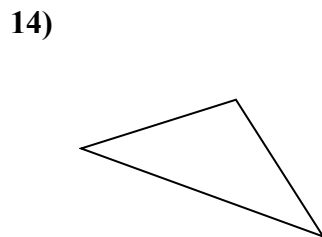
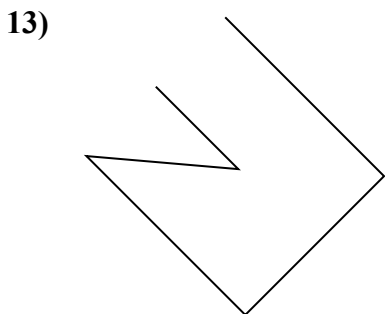
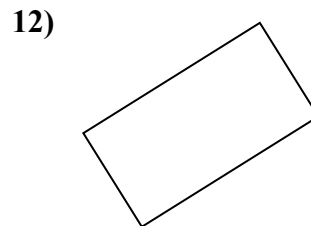
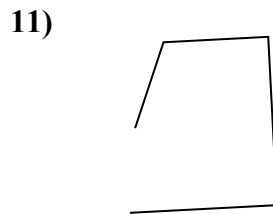
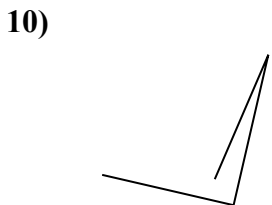

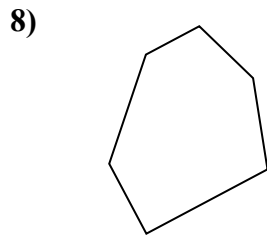
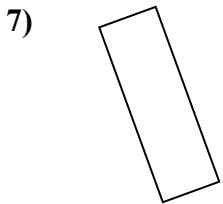
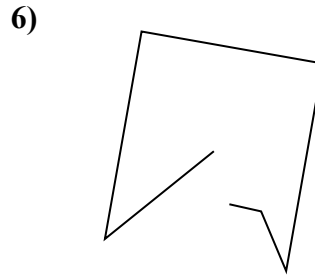
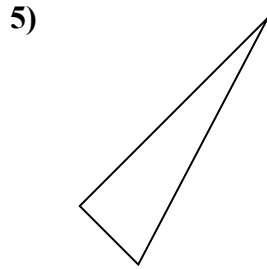
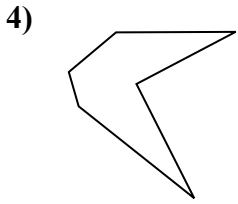
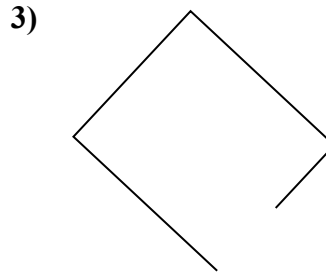
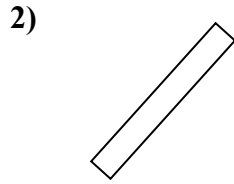
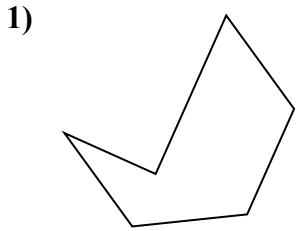
14. треугольник

15. прямоугольник



Определите, какая фигура изображена перед нами.

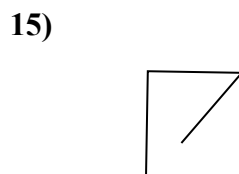
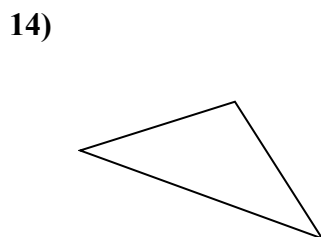
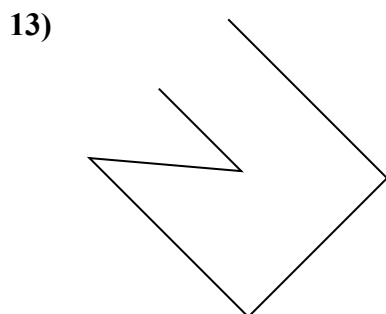
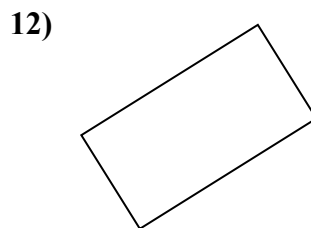
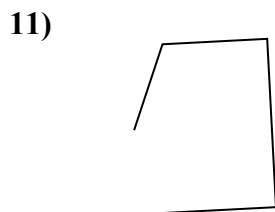
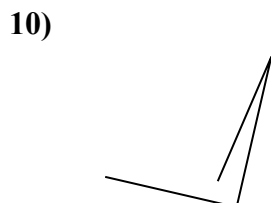

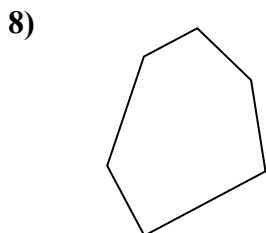
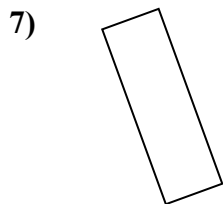
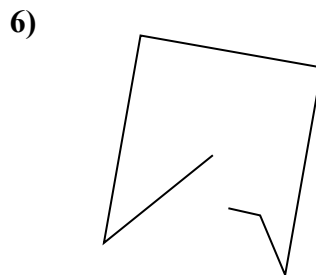
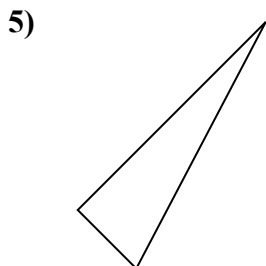
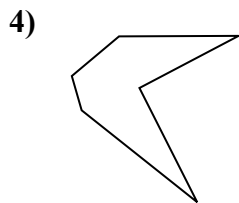
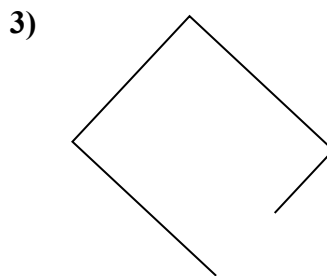
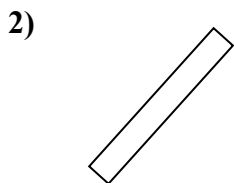
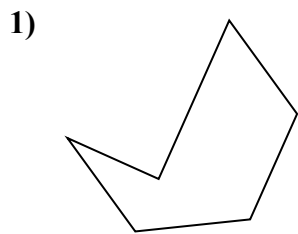
ОТВЕТЫ



- 1. _____
- 2. _____
- 3. _____
- 4. _____
- 5. _____
- 6. _____
- 7. _____
- 8. _____
- 9. _____
- 10. _____
- 11. _____
- 12. _____
- 13. _____
- 14. _____
- 15. _____



Определите, какая фигура изображена перед нами.



ОТВЕТЫ

1. шестиугольник

2. прямоугольник

3. другая

4. шестиугольник

5. треугольник

6. другая

7. прямоугольник

8. шестиугольник

9. треугольник

10. другая

11. другая

12. прямоугольник

13. другая

14. треугольник

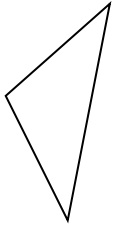
15. другая



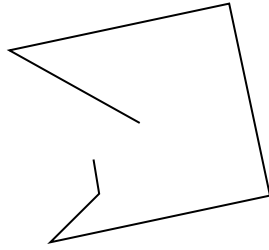
Определите, какая фигура изображена перед нами.

ОТВЕТЫ

1)



2)



3)



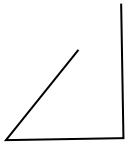
1. _____

2. _____

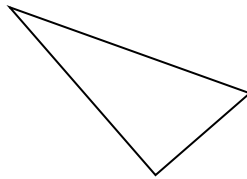
3. _____

4. _____

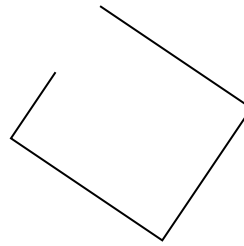
4)



5)



6)



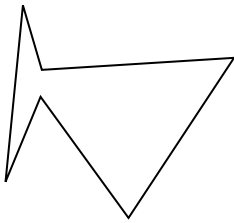
5. _____

6. _____

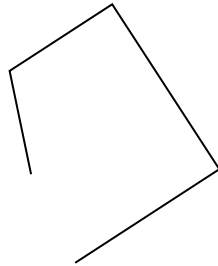
7. _____

8. _____

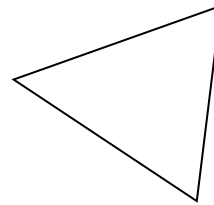
7)



8)



9)




9. _____

10. _____

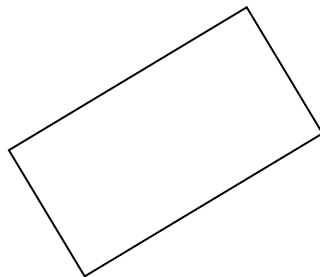
11. _____

12. _____


10)



11)



12)

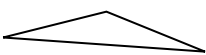


13. _____


14. _____

15. _____

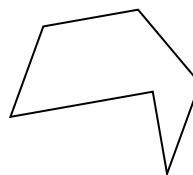
13)



14)



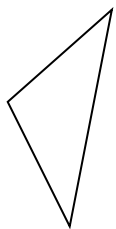
15)



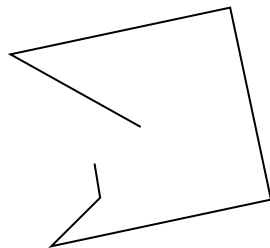


Определите, какая фигура изображена перед нами.

1)



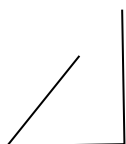
2)



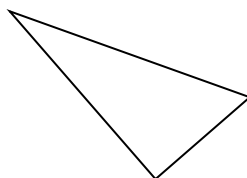
3)



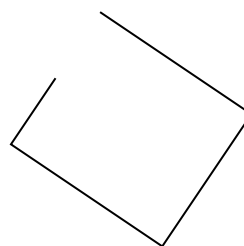
4)



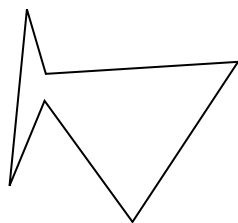
5)



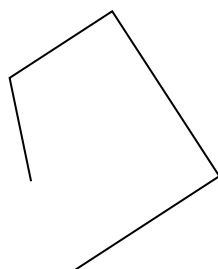
6)



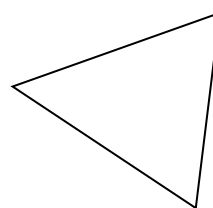
7)




8)



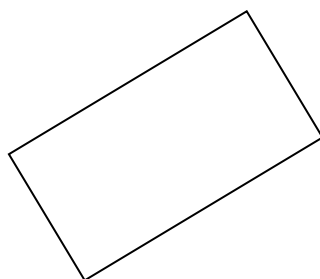
9)




10)



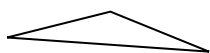
11)




12)



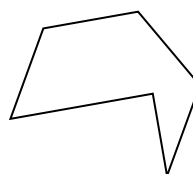
13)



14)



15)



ОТВЕТЫ

1. треугольник

2. другая

3. другая

4. другая

5. треугольник

6. другая

7. шестиугольник

8. другая

9. треугольник

10. другая

11. прямоугольник

12. шестиугольник

13. треугольник

14. другая

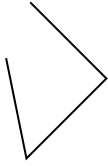
15. шестиугольник



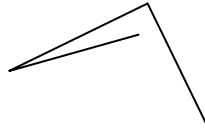
Определите, какая фигура изображена перед нами.

ОТВЕТЫ

1)



2)



3)



1. _____

2. _____

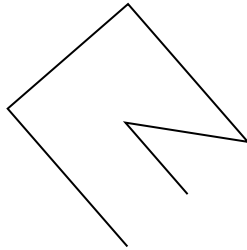
3. _____

4. _____

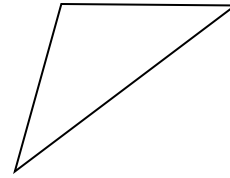
4)



5)



6)



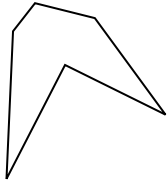
5. _____

6. _____

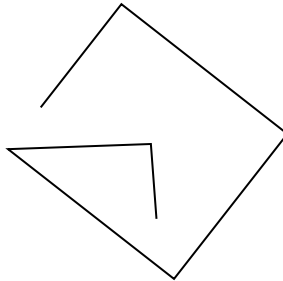
7. _____

8. _____


7)



8)



9)




9. _____

10. _____

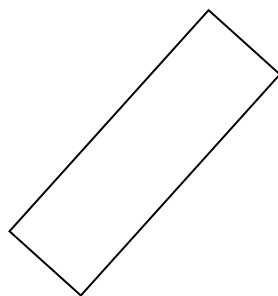
11. _____

12. _____

10)



11)



12)

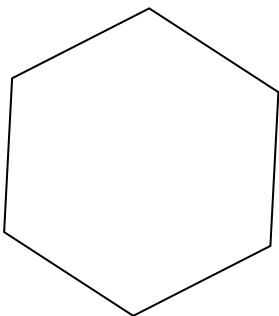


13. _____

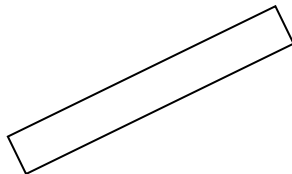
14. _____

15. _____

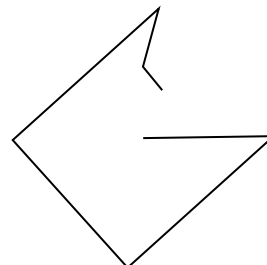
13)



14)



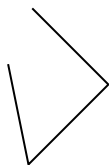
15)



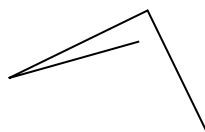


Определите, какая фигура изображена перед нами.

1)



2)



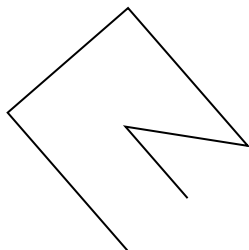
3)



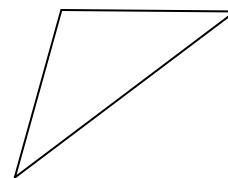
4)



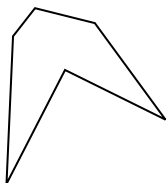
5)



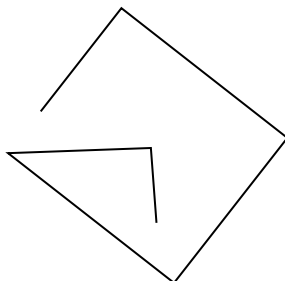
6)




7)




8)



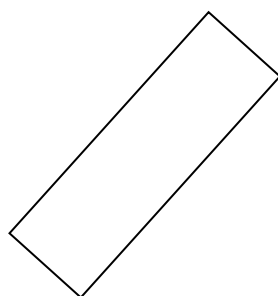
9)



10)



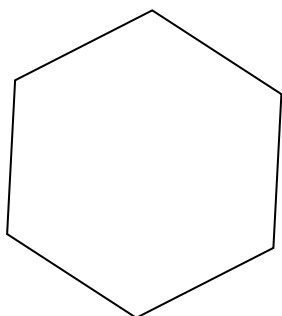
11)



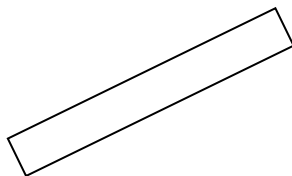
12)



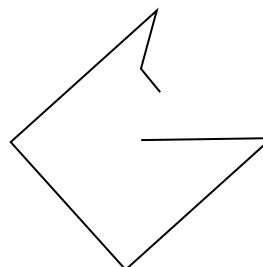
13)



14)



15)



ОТВЕТЫ

1. другая

2. другая

3. треугольник

4. другая

5. другая

6. треугольник

7. шестиугольник

8. другая

9. треугольник

10. квадрат

11. прямоугольник

12. прямоугольник

13. шестиугольник

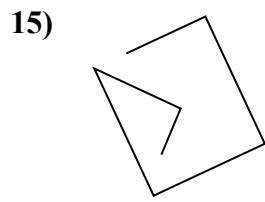
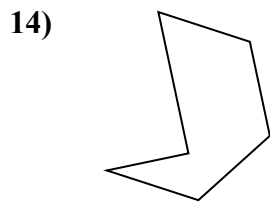
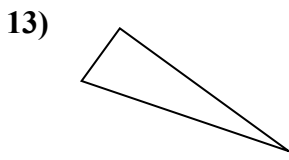
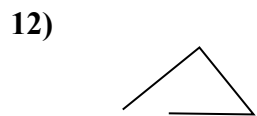
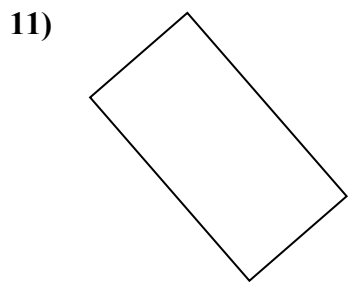
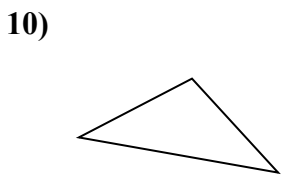
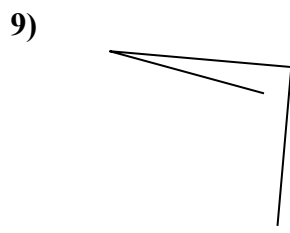
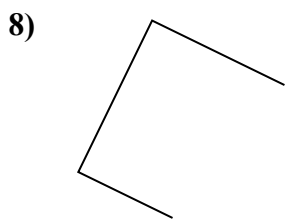
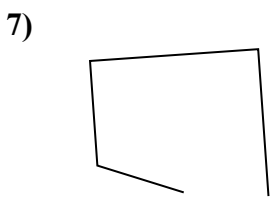
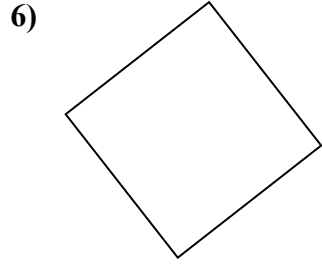
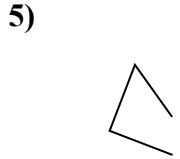
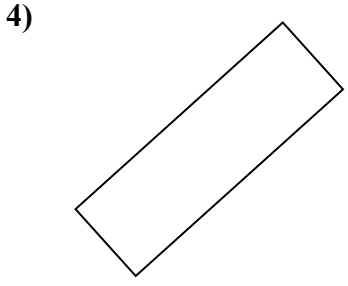
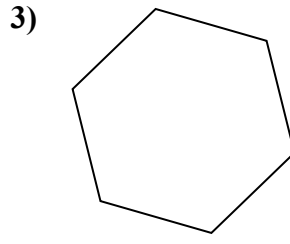
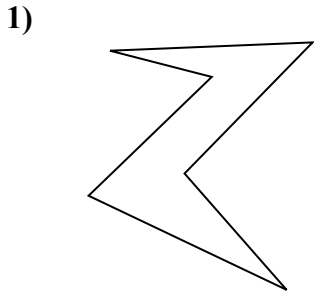
14. прямоугольник

15. другая



Определите, какая фигура изображена перед нами.

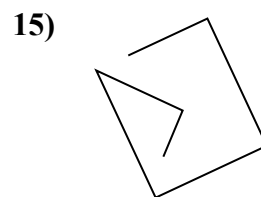
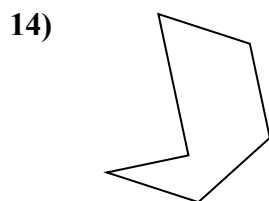
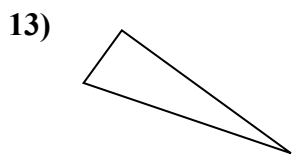
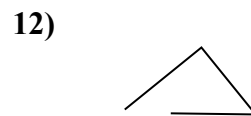
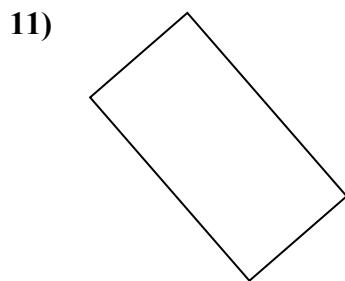
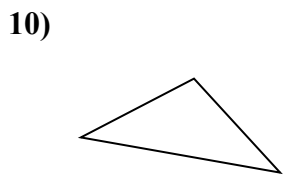
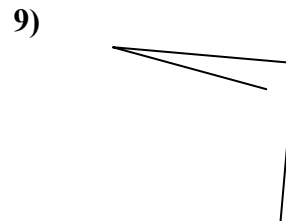
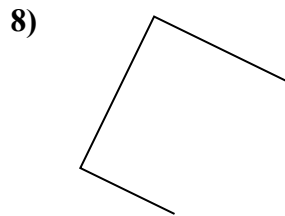
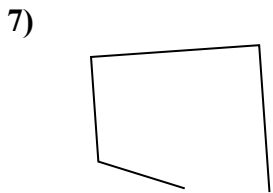
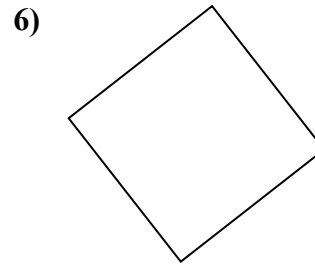
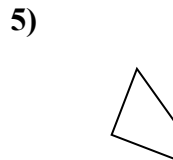
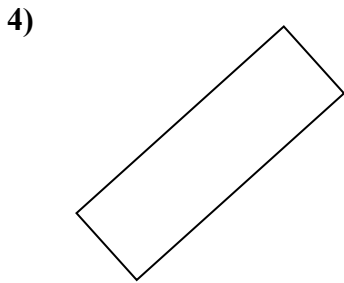
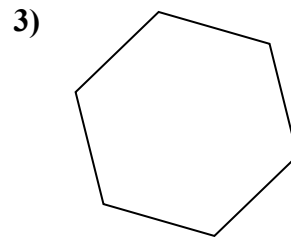

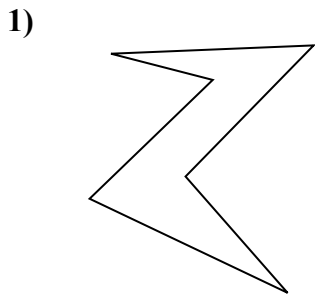
ОТВЕТЫ



- 1. _____
- 2. _____
- 3. _____
- 4. _____
- 5. _____
- 6. _____
- 7. _____
- 8. _____
- 9. _____
- 10. _____
- 11. _____
- 12. _____
- 13. _____
- 14. _____
- 15. _____



Определите, какая фигура изображена перед нами.



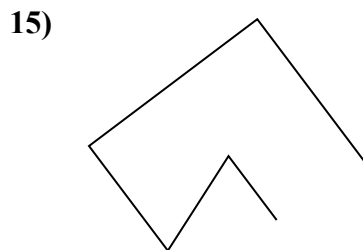

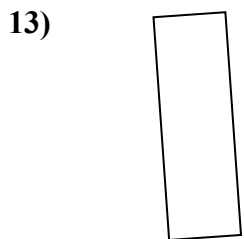
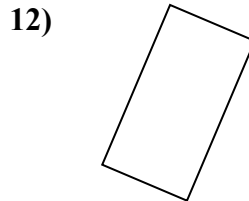
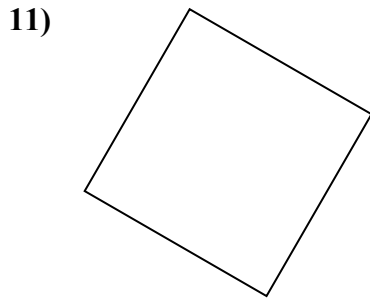
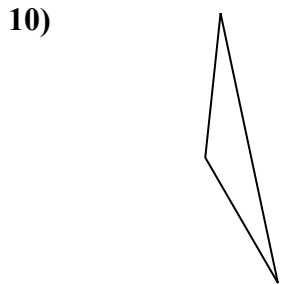

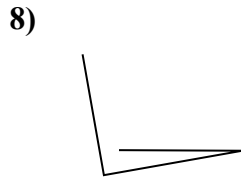

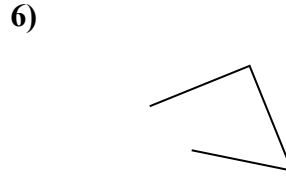
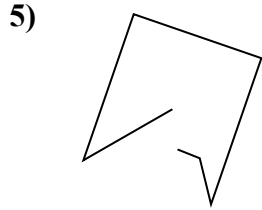
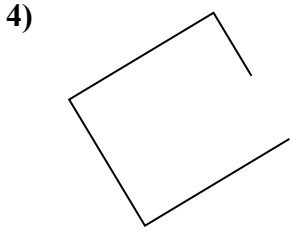

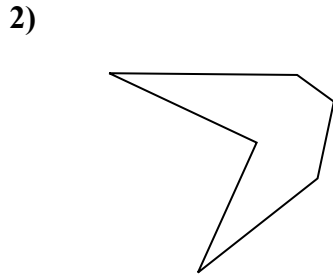
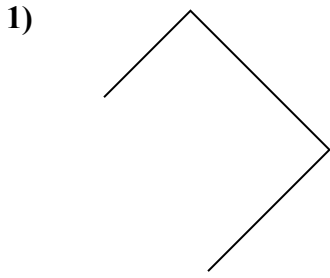
ОТВЕТЫ

- 1. шестиугольник
- 2. прямоугольник
- 3. шестиугольник
- 4. прямоугольник
- 5. другая
- 6. квадрат
- 7. другая
- 8. другая
- 9. другая
- 10. треугольник
- 11. прямоугольник
- 12. другая
- 13. треугольник
- 14. шестиугольник
- 15. другая



Определите, какая фигура изображена перед нами.

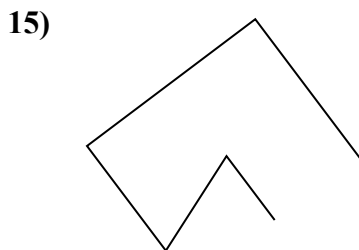

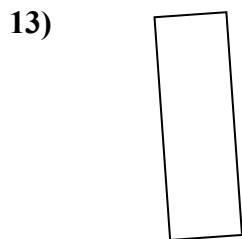
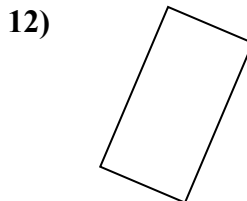
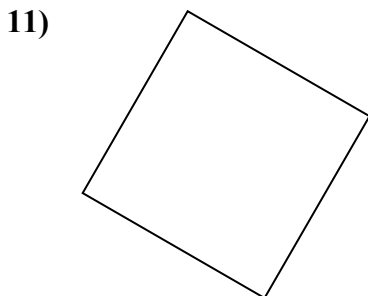
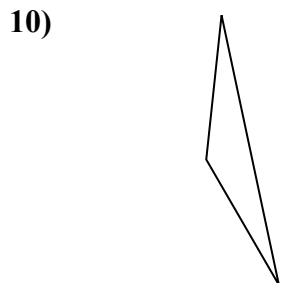

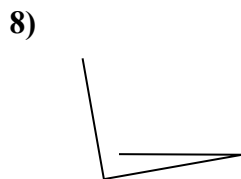

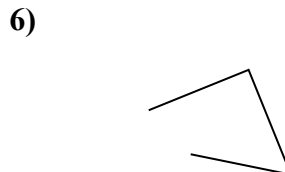
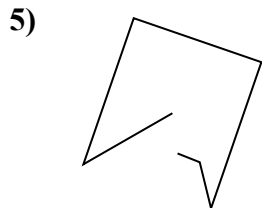
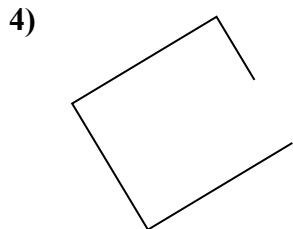

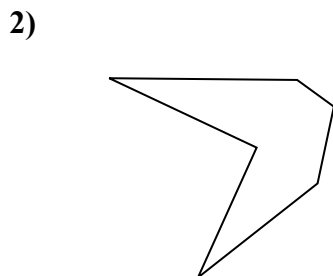
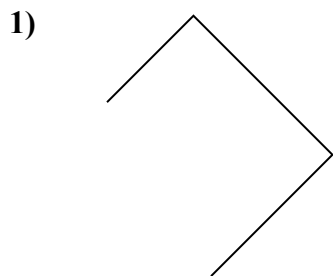
ОТВЕТЫ



1. _____
2. _____
3. _____
4. _____
5. _____
6. _____
7. _____
8. _____
9. _____
10. _____
11. _____
12. _____
13. _____
14. _____
15. _____



Определите, какая фигура изображена перед нами.



ОТВЕТЫ

1. другая

2. шестиугольник

3. прямоугольник

4. другая

5. другая

6. другая

7. треугольник

8. другая

9. шестиугольник

10. треугольник

11. квадрат

12. прямоугольник

13. прямоугольник

14. шестиугольник

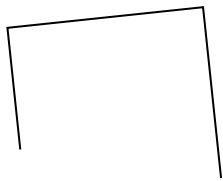
15. другая



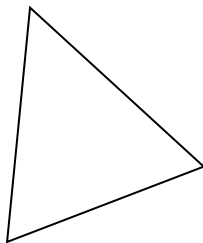
Определите, какая фигура изображена перед нами.

ОТВЕТЫ

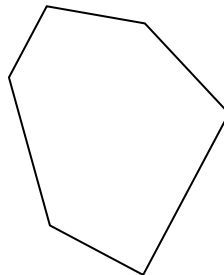
1)



2)

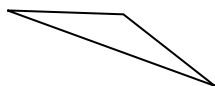


3)

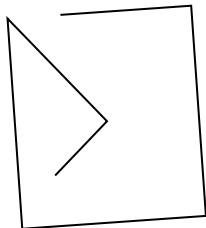


1. _____


4)



5)



6)



2. _____

3. _____

4. _____

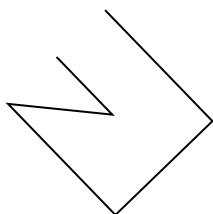
5. _____

6. _____


7. _____

8. _____

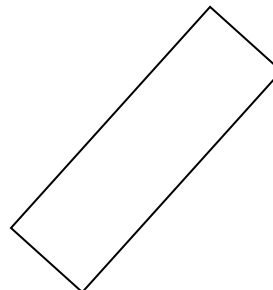
7)



8)



9)



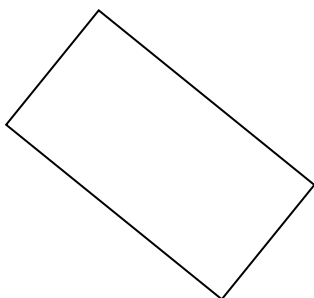
9. _____

10. _____

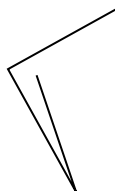
11. _____

12. _____


10)



11)



12)

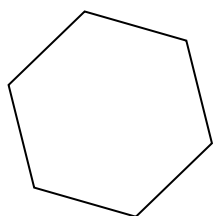


13. _____

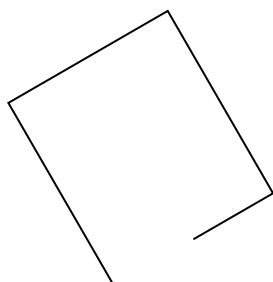
14. _____

15. _____

13)



14)



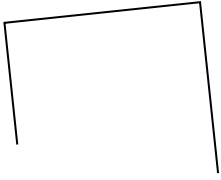
15)



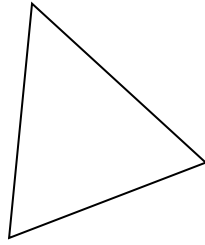


Определите, какая фигура изображена перед нами.

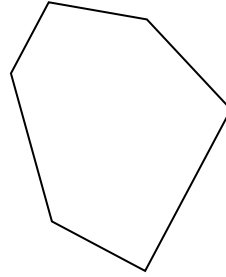
1)



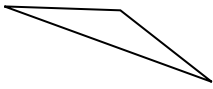
2)



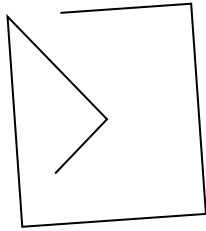
3)




4)



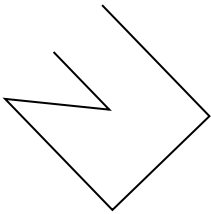
5)




6)



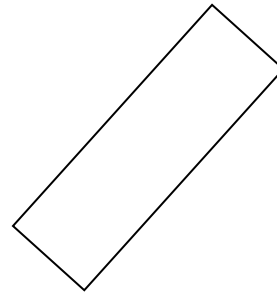
7)



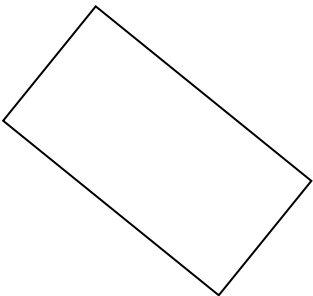
8)



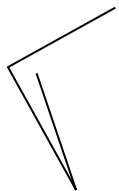
9)




10)



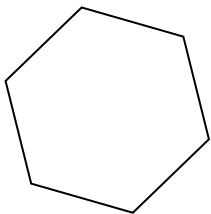
11)



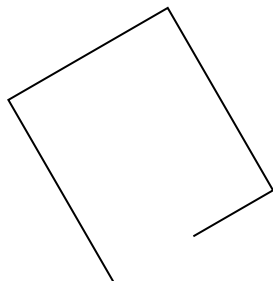
12)



13)



14)



15)



ОТВЕТЫ

1. другая

2. треугольник

3. шестиугольник

4. треугольник

5. другая

6. шестиугольник

7. другая

8. квадрат

9. прямоугольник

10. прямоугольник

11. другая

12. другая

13. шестиугольник

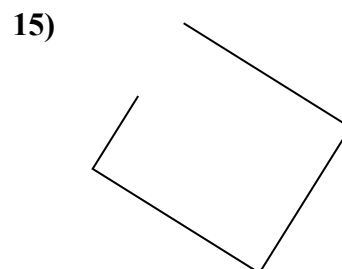
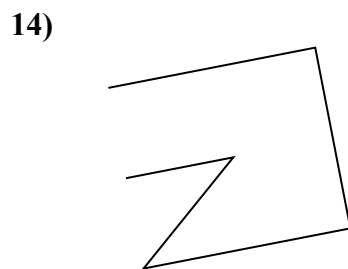
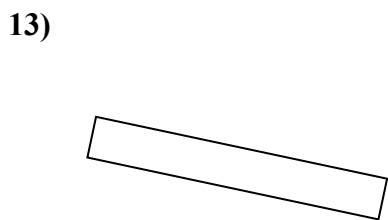
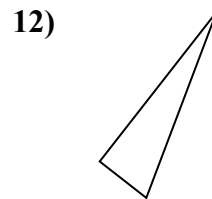
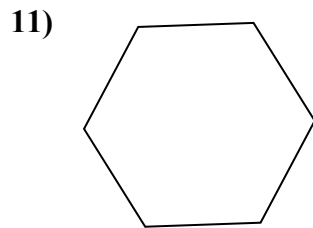
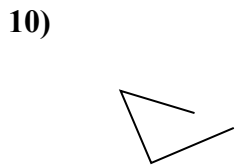
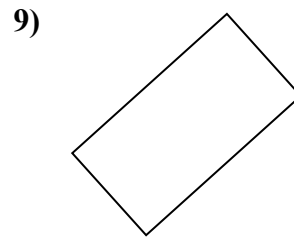
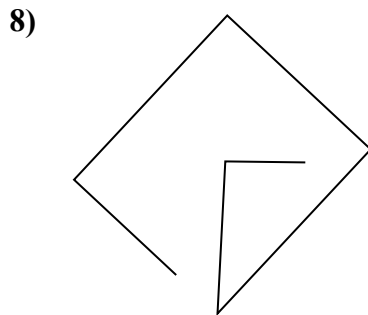
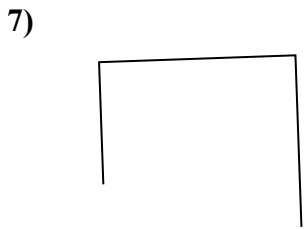
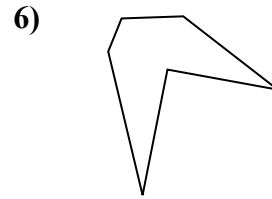
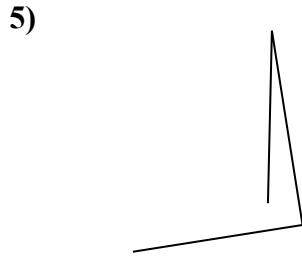
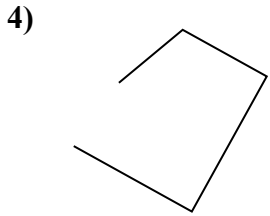
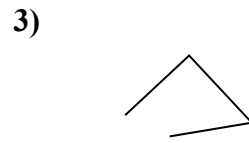
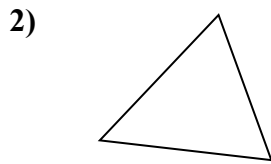

14. другая

15. треугольник



Определите, какая фигура изображена перед нами.

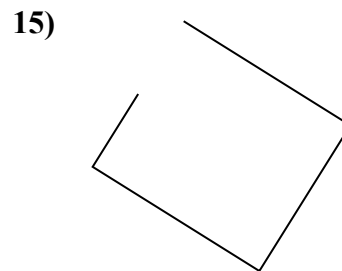
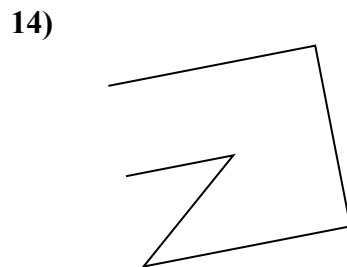
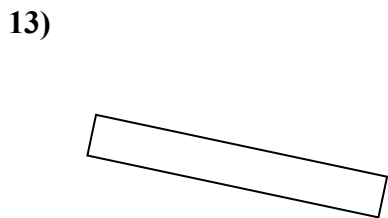
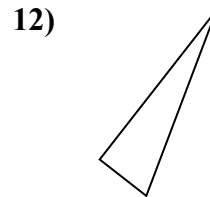
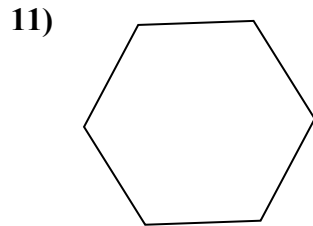
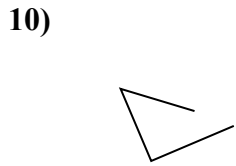
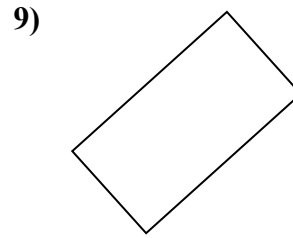
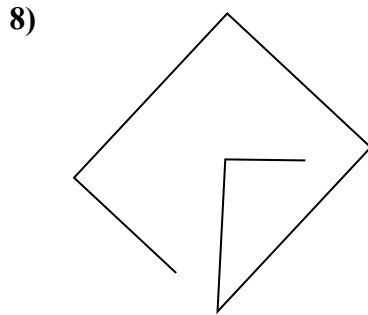
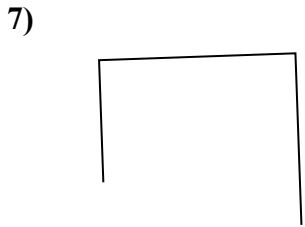
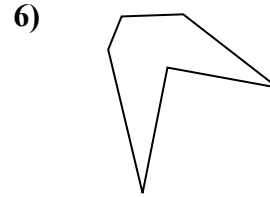
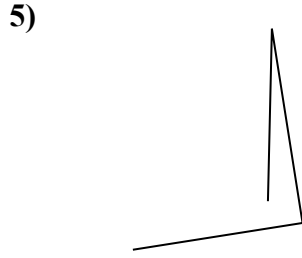
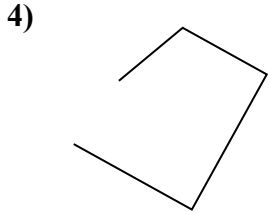
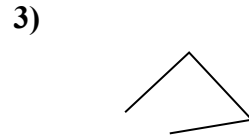
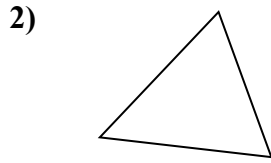

ОТВЕТЫ



- 1. _____
- 2. _____
- 3. _____
- 4. _____
- 5. _____
- 6. _____
- 7. _____
- 8. _____
- 9. _____
- 10. _____
- 11. _____
- 12. _____
- 13. _____
- 14. _____
- 15. _____



Определите, какая фигура изображена перед нами.



ОТВЕТЫ

1. шестиугольник

2. треугольник

3. другая

4. другая

5. другая

6. шестиугольник

7. другая

8. другая

9. прямоугольник

10. другая

11. шестиугольник

12. треугольник

13. прямоугольник

14. другая

15. другая

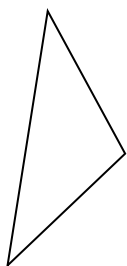


Определите, какая фигура изображена перед нами.

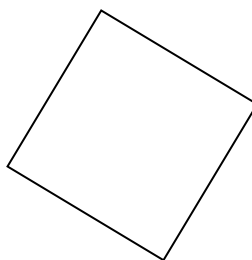
1)



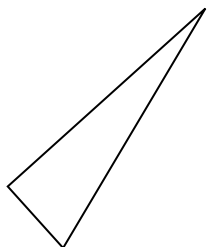
2)



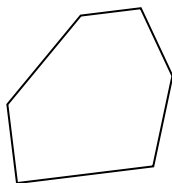
3)



4)



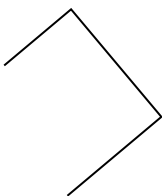
5)




6)



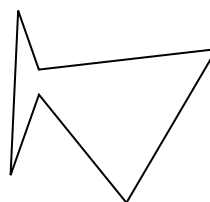
7)



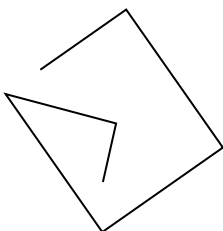
8)



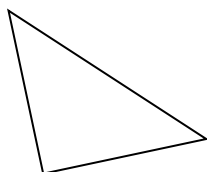
9)



10)



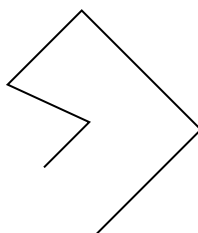
11)



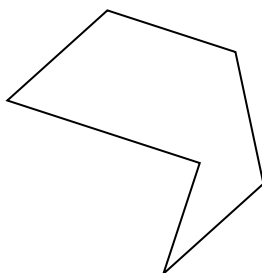
12)



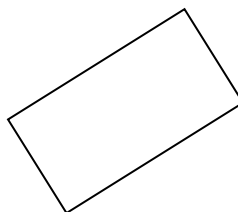
13)



14)



15)



ОТВЕТЫ

1. _____

2. _____

3. _____

4. _____

5. _____

6. _____

7. _____

8. _____

9. _____

10. _____

11. _____

12. _____

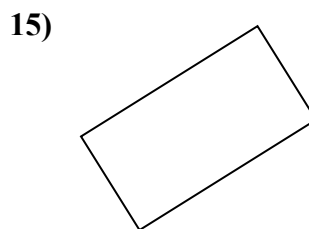
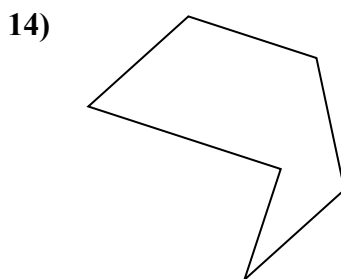
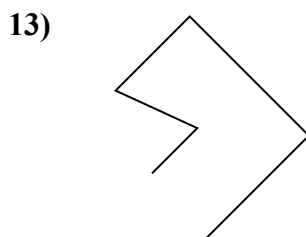
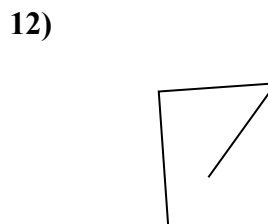
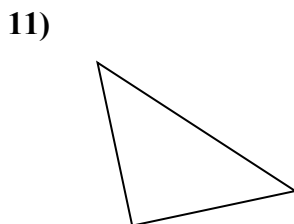
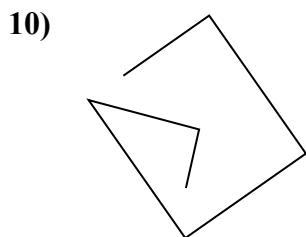
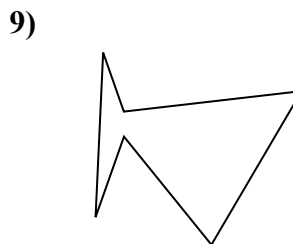
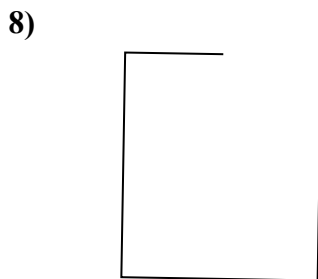
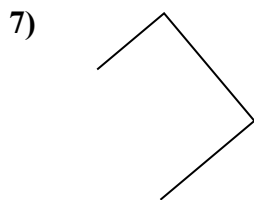

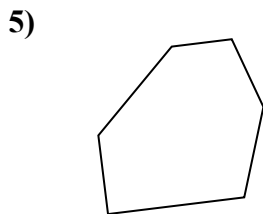
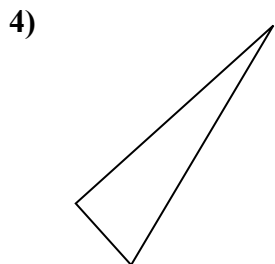
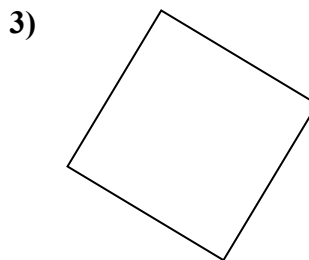
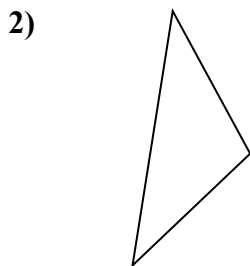
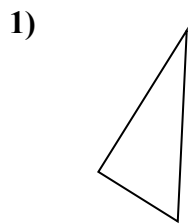
13. _____

14. _____

15. _____



Определите, какая фигура изображена перед нами.



ОТВЕТЫ

1. треугольник

2. треугольник

3. квадрат

4. треугольник

5. шестиугольник

6. другая

7. другая

8. другая

9. шестиугольник

10. другая

11. треугольник

12. другая

13. другая

14. шестиугольник

15. прямоугольник