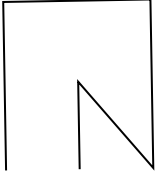




Определите, какая фигура изображена перед нами.

ОТВЕТЫ

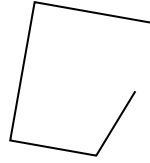
1)



2)



3)



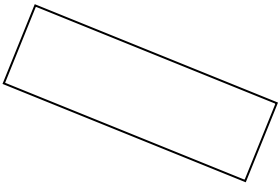
1. _____

2. _____

3. _____

4. _____

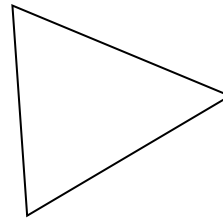
4)



5)



6)




5. _____

6. _____

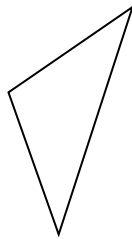
7. _____

8. _____

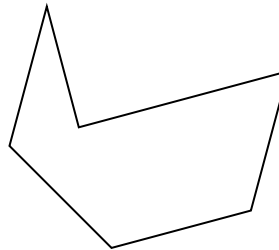
7)



8)



9)



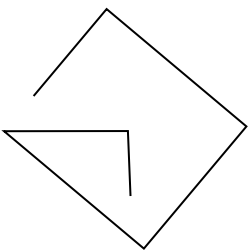
9. _____

10. _____

11. _____

12. _____

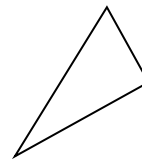
10)



11)



12)




13. _____


14. _____

15. _____

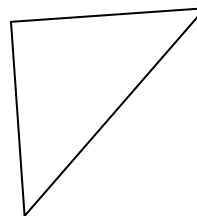
13)



14)



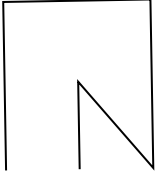
15)





Определите, какая фигура изображена перед нами.

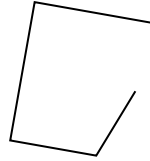
1)



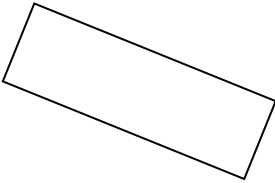
2)



3)



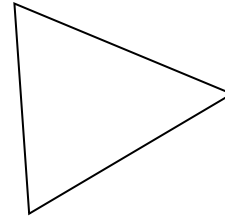
4)




5)



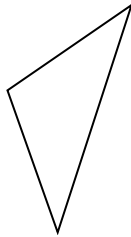
6)



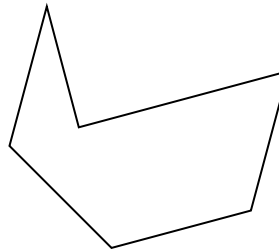
7)



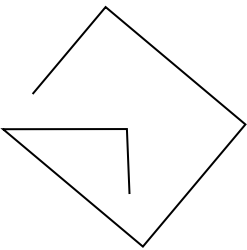
8)



9)



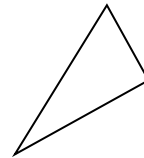
10)




11)




12)



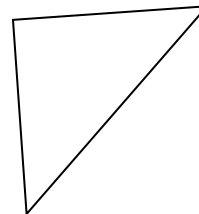
13)



14)



15)



ОТВЕТЫ

1. другая

2. другая

3. другая

4. прямоугольник

5. другая

6. треугольник

7. шестиугольник

8. треугольник

9. шестиугольник

10. другая

11. другая

12. треугольник

13. другая

14. квадрат

15. треугольник