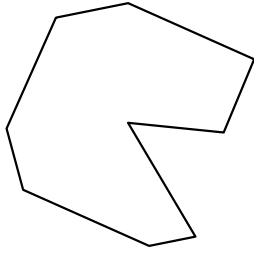




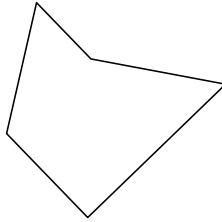
Определите тип данных фигур.

Ответы

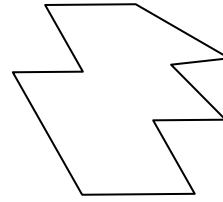
1)



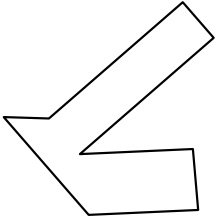
2)



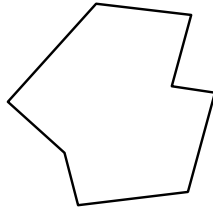
3)



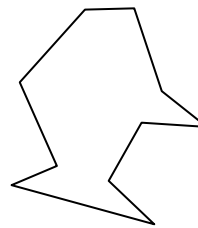
4)



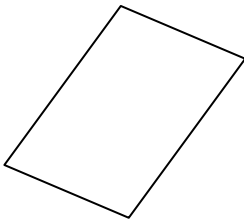
5)




6)



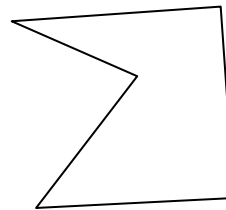
7)



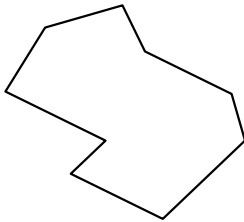
8)



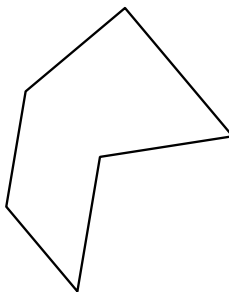
9)



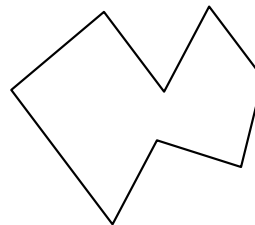
10)




11)



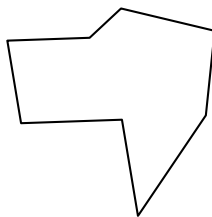
12)



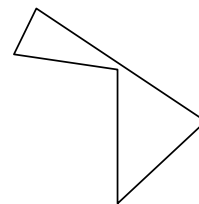
13)




14)



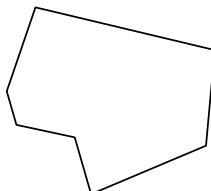
15)




16)



17)



18)



1. \_\_\_\_\_

2. \_\_\_\_\_

3. \_\_\_\_\_

4. \_\_\_\_\_

5. \_\_\_\_\_

6. \_\_\_\_\_

7. \_\_\_\_\_

8. \_\_\_\_\_

9. \_\_\_\_\_

10. \_\_\_\_\_

11. \_\_\_\_\_

12. \_\_\_\_\_

13. \_\_\_\_\_

14. \_\_\_\_\_

15. \_\_\_\_\_

16. \_\_\_\_\_

17. \_\_\_\_\_

18. \_\_\_\_\_

19. \_\_\_\_\_

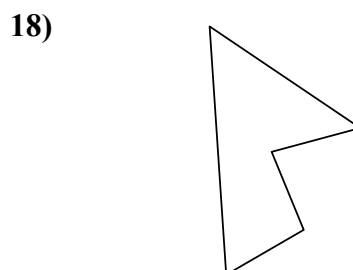
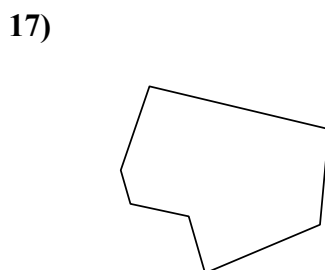
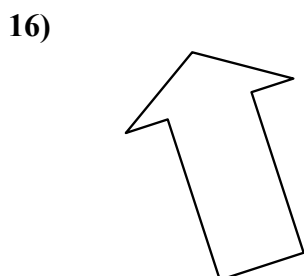
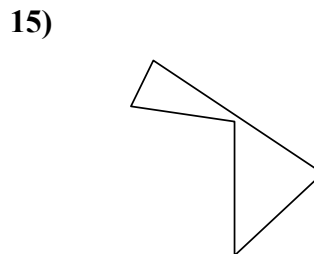
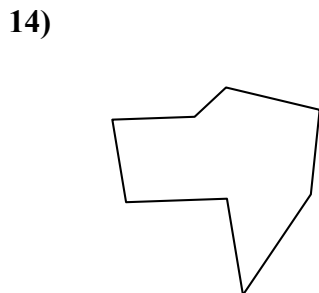
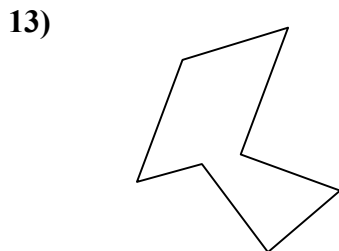
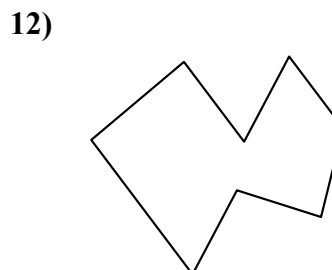
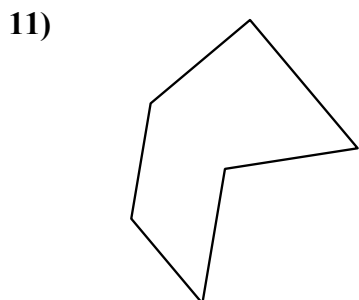
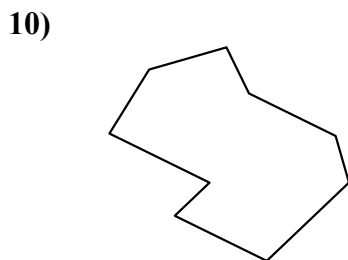
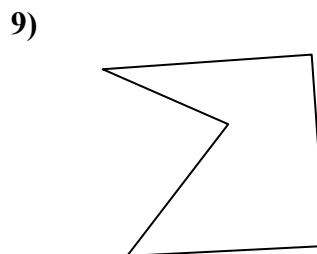
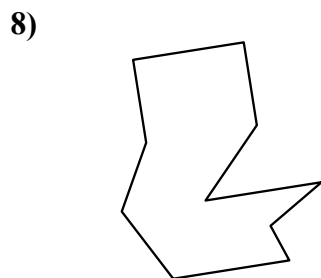
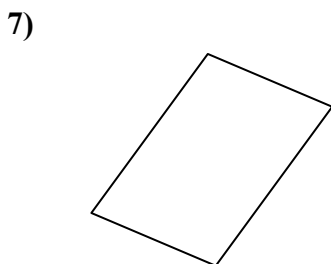
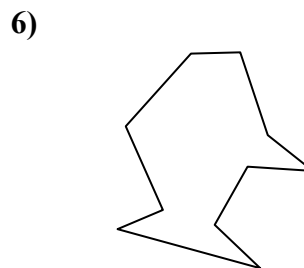
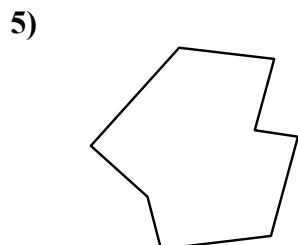
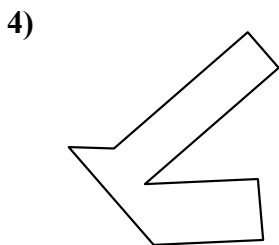
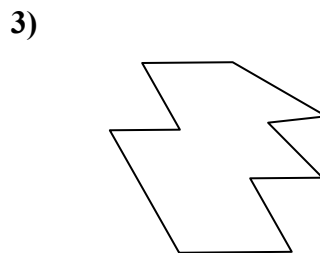
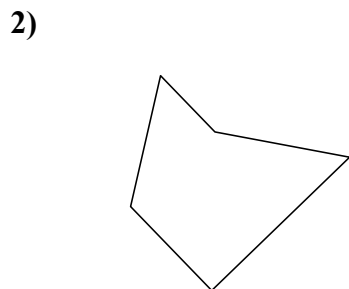
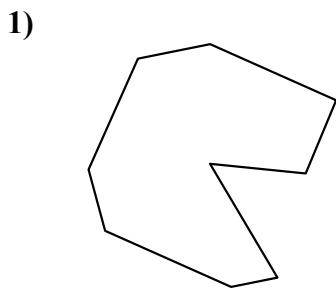
20. \_\_\_\_\_

21. \_\_\_\_\_



Определите тип данных фигур.

**ОТВЕТЫ**



1. девятугольник

2. пятигольник

3. десятугольник

4. восьмигольник

5. восьмигольник

6. десятугольник

7. четырёхгольник

8. десятугольник

9. пятигольник

10. девятугольник

11. шестигольник

12. восьмигольник

13. семигольник

14. восьмигольник

15. пятигольник

16. семигольник

17. семигольник

18. пятигольник

19. девятугольник

20. девятугольник

21. пятигольник