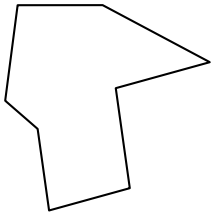




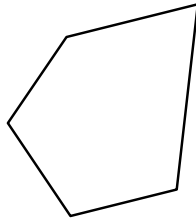
Определите тип данных фигур.

ОТВЕТЫ


1)



2)

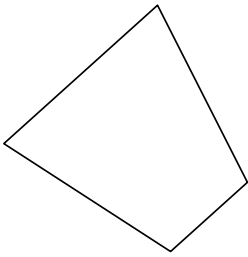


3)

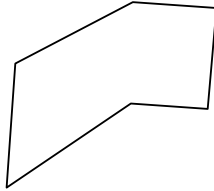


1. _____

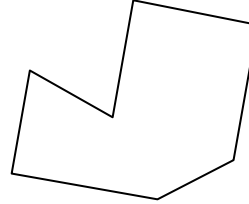
4)



5)

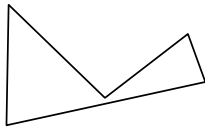


6)




2. _____

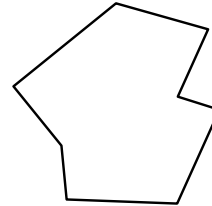
7)



8)

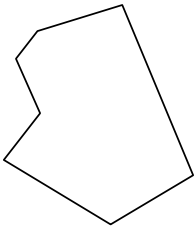


9)

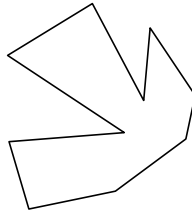


3. _____

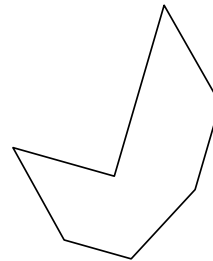
10)



11)

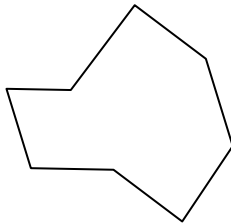


12)

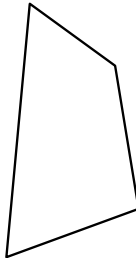


4. _____

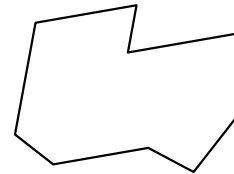
13)



14)

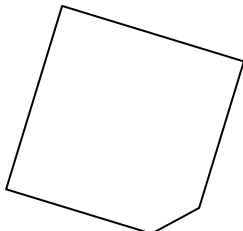


15)

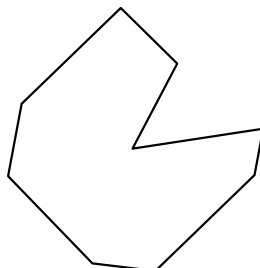


5. _____

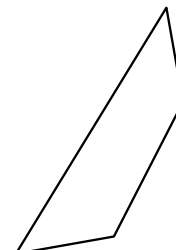
16)



17)



18)



6. _____

7. _____

8. _____

9. _____

10. _____

11. _____

12. _____

13. _____

14. _____

15. _____

16. _____

17. _____

18. _____

19. _____

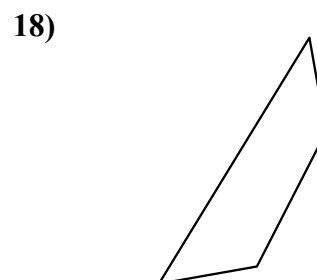
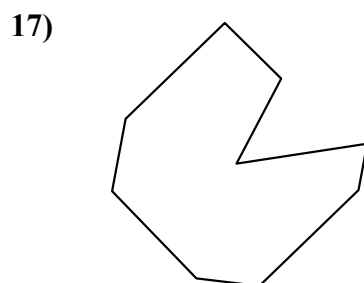
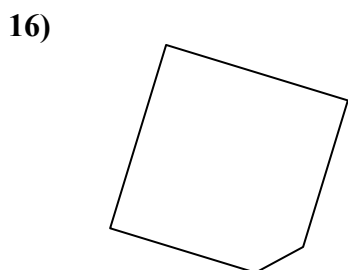
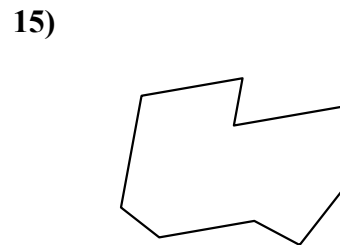
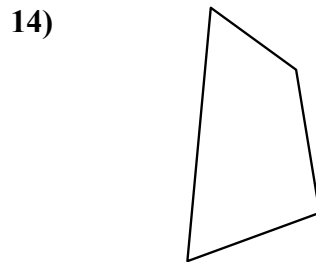
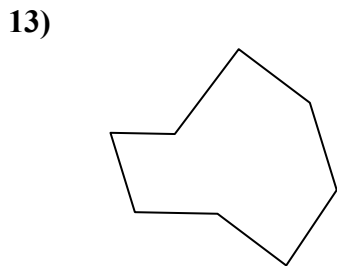
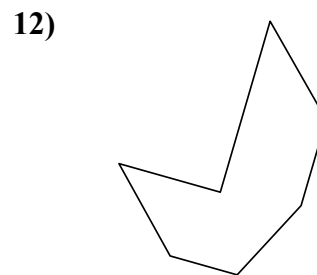
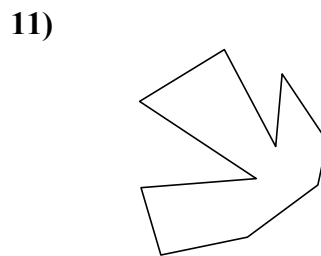
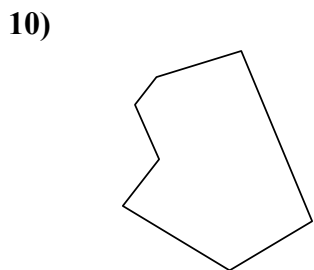
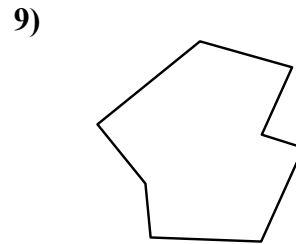
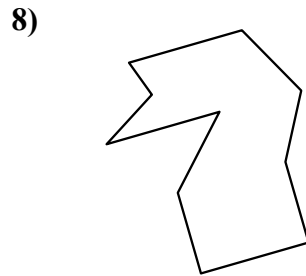
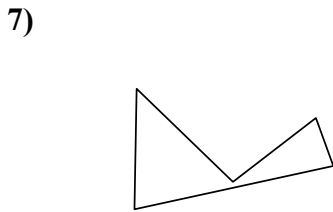
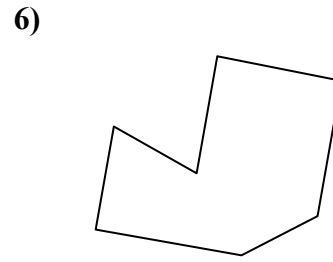
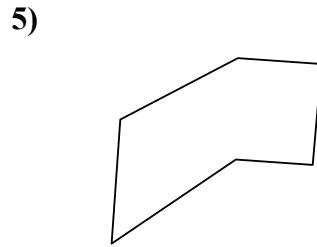
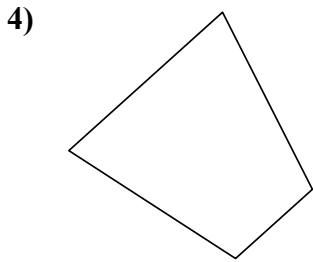
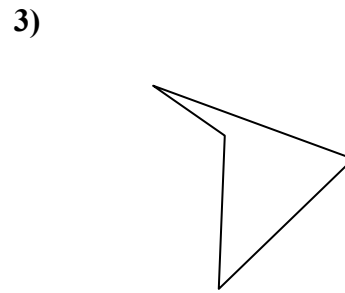
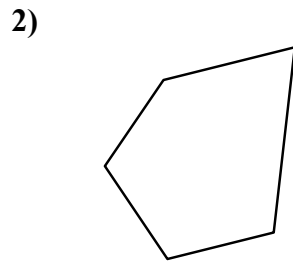
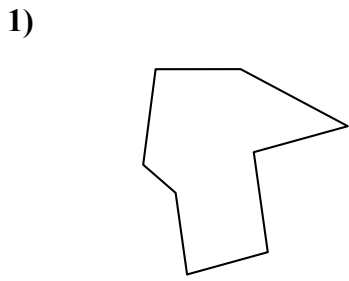
20. _____

21. _____



Определите тип данных фигур.

ОТВЕТЫ



1. восьмиугольник

2. пятиугольник

3. четырёхугольник

4. четырёхугольник

5. шестиугольник

6. семиугольник

7. пятиугольник

8. десятиугольник

9. восьмиугольник

10. семиугольник

11. десятиугольник

12. семиугольник

13. восьмиугольник

14. четырёхугольник

15. девятиугольник

16. пятиугольник

17. девятиугольник

18. четырёхугольник

19. семиугольник

20. шестиугольник

21. девятиугольник