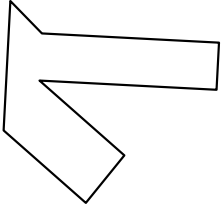




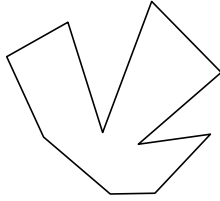
Определите тип данных фигур.

Ответы

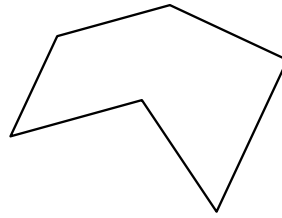
1)



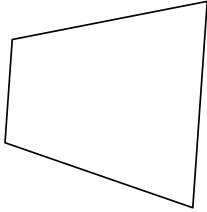
2)



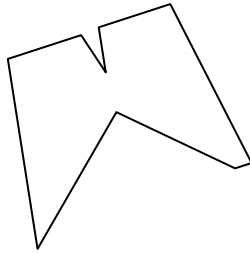
3)




4)



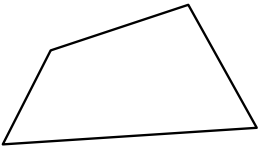
5)



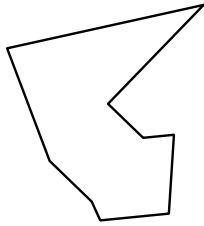
6)



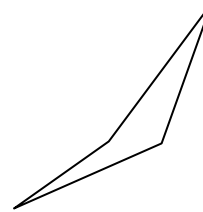
7)



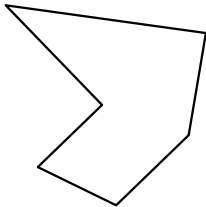
8)



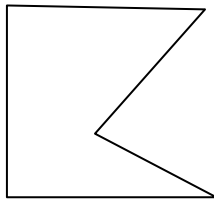
9)



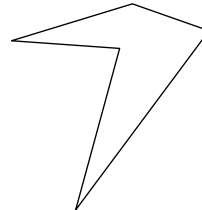
10)



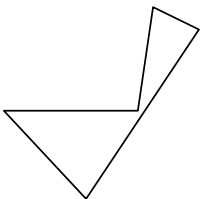
11)



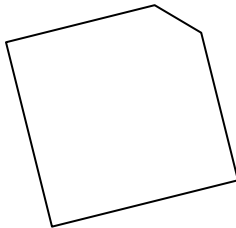
12)



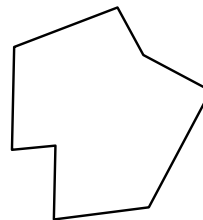
13)



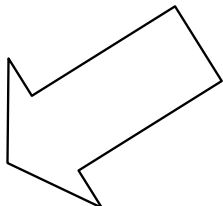
14)



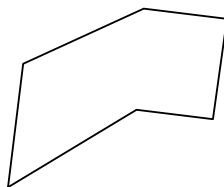
15)



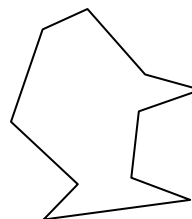
16)



17)



18)



1. _____

2. _____

3. _____

4. _____

5. _____

6. _____

7. _____

8. _____

9. _____

10. _____

11. _____

12. _____

13. _____

14. _____

15. _____

16. _____

17. _____

18. _____

19. _____

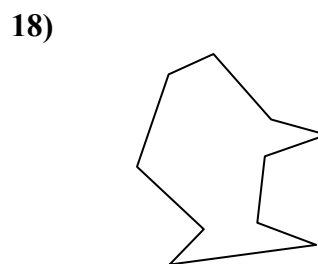
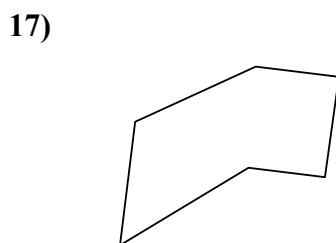
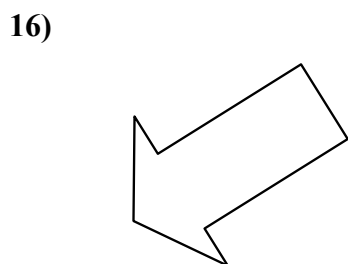
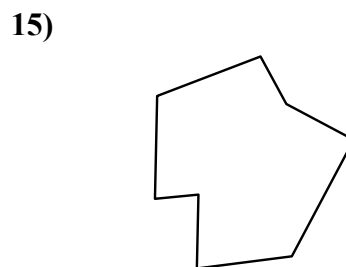
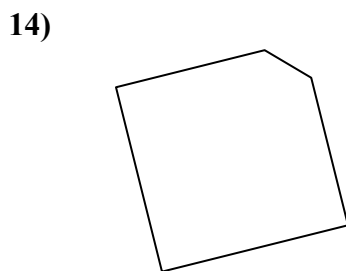
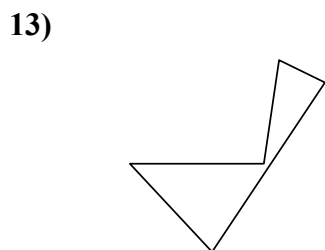
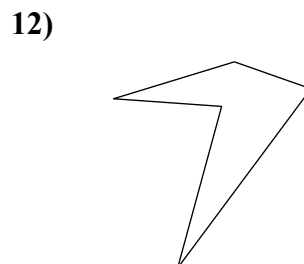
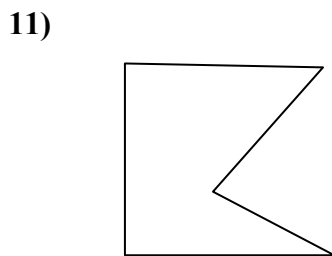
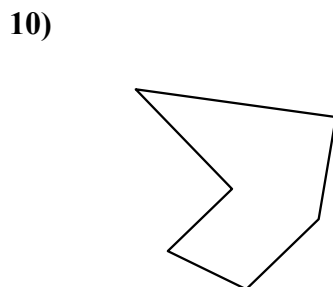
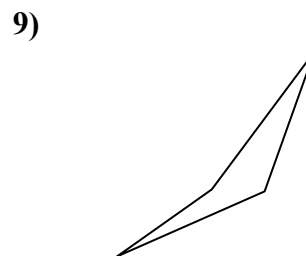
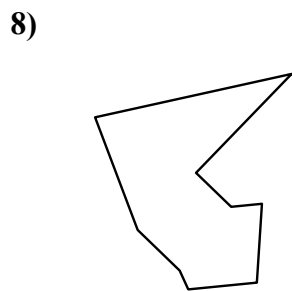
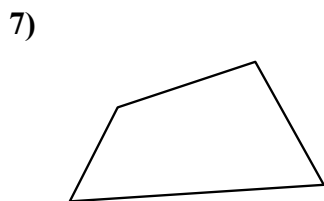


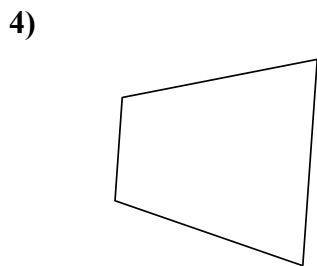
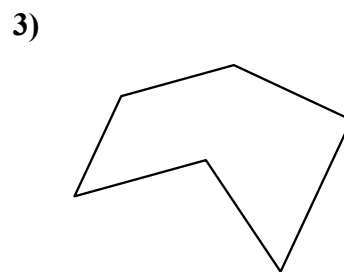
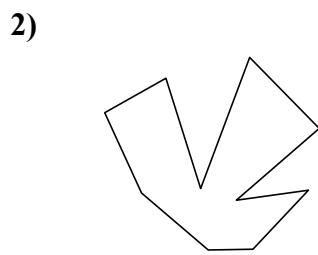

20. _____

21. _____



Определите тип данных фигур.

ОТВЕТЫ



1. восьмиугольник

2. десятиугольник

3. шестиугольник

4. четырёхугольник

5. девятиугольник

6. четырёхугольник

7. четырёхугольник

8. девятиугольник

9. четырёхугольник

10. шестиугольник

11. пятиугольник

12. пятиугольник

13. пятиугольник

14. пятиугольник

15. восьмиугольник

16. семиугольник

17. шестиугольник

18. десятиугольник

19. шестиугольник

20. девятиугольник

21. шестиугольник