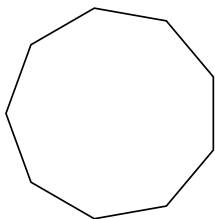


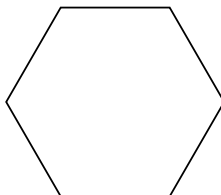


Определите тип данных фигур.

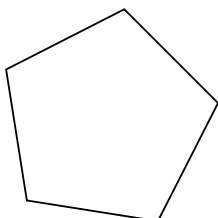
1)



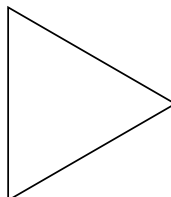
2)



3)



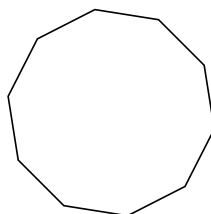
4)



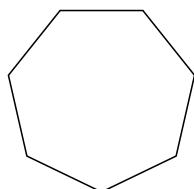
5)



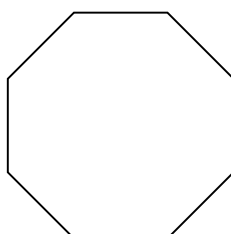
6)



7)



8)



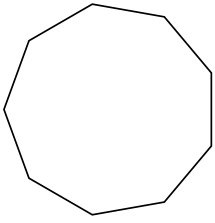
**ОТВЕТЫ**

- 1. \_\_\_\_\_
- 2. \_\_\_\_\_
- 3. \_\_\_\_\_
- 4. \_\_\_\_\_
- 5. \_\_\_\_\_
- 6. \_\_\_\_\_
- 7. \_\_\_\_\_
- 8. \_\_\_\_\_

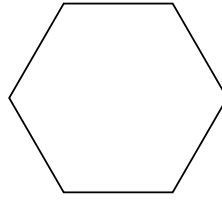


Определите тип данных фигур.

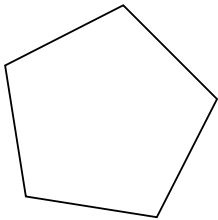
1)



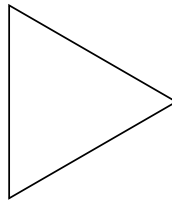
2)




3)



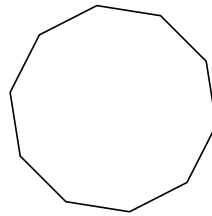
4)



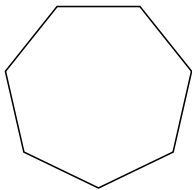
5)



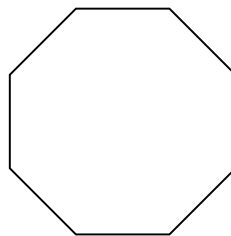
6)



7)



8)



**ОТВЕТЫ**

1. девятиугольник
2. шестиугольник
3. пятиугольник
4. треугольник
5. четырёхугольник
6. десятиугольник
7. семиугольник
8. восьмиугольник