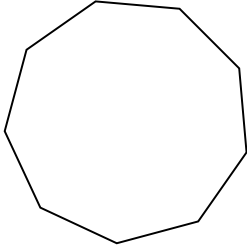


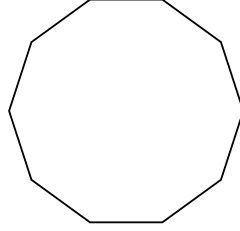


Определите тип данных фигур.


1)



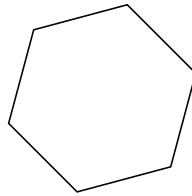
2)



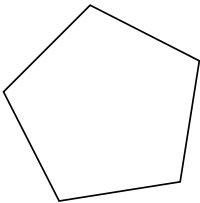
3)



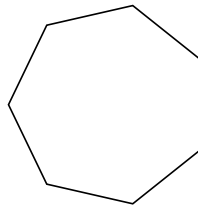
4)



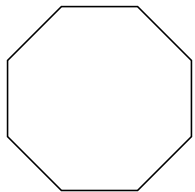
5)




6)



7)



8)



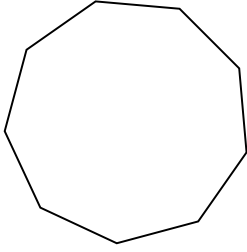
ОТВЕТЫ

- 1. \_\_\_\_\_
- 2. \_\_\_\_\_
- 3. \_\_\_\_\_
- 4. \_\_\_\_\_
- 5. \_\_\_\_\_
- 6. \_\_\_\_\_
- 7. \_\_\_\_\_
- 8. \_\_\_\_\_

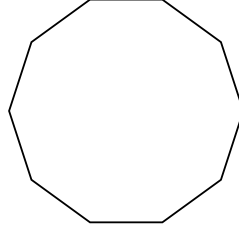


Определите тип данных фигур.


1)



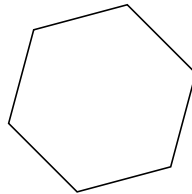
2)



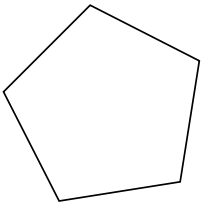
3)



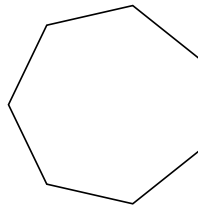
4)



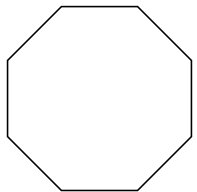
5)




6)



7)



8)



**ОТВЕТЫ**

1. девятиугольник
2. десятиугольник
3. треугольник
4. шестиугольник
5. пятиугольник
6. семиугольник
7. восьмиугольник
8. четырёхугольник