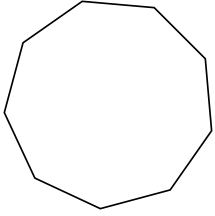


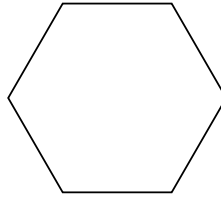


Определите тип данных фигур.


1)



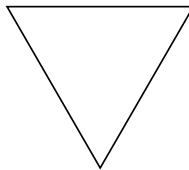
2)



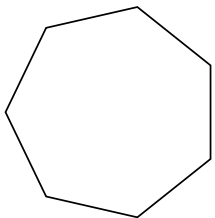
3)



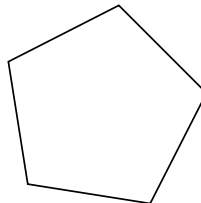
4)



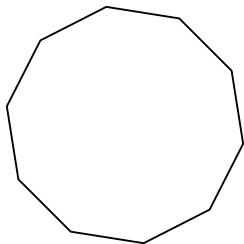
5)



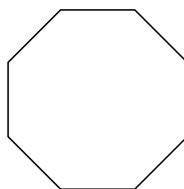
6)



7)



8)



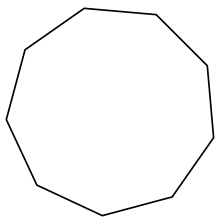
ОТВЕТЫ

- 1. _____
- 2. _____
- 3. _____
- 4. _____
- 5. _____
- 6. _____
- 7. _____
- 8. _____

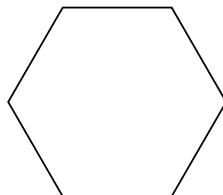


Определите тип данных фигур.


1)



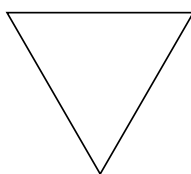
2)



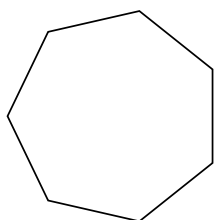
3)



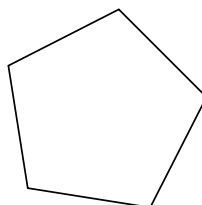
4)



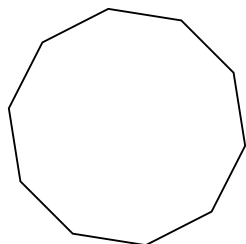
5)



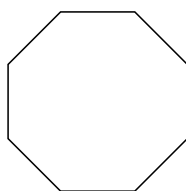
6)



7)



8)



ОТВЕТЫ

1. девятиугольник

2. шестиугольник

3. четырёхугольник

4. треугольник

5. семиугольник

6. пятиугольник

7. десятиугольник

8. восьмиугольник