



Определите, является ли каждый треугольник острым (A), тупым (O) или прямым (R), а также равносторонним (E), равнобедренным (I) или разносторонним (S).

ОТВЕТЫ

Acute Triangle:

All angles are less than 90° .

Obtuse Triangle:

One angle is greater than 90° .

Right Triangle:

One angle is 90° .

Equilateral Triangle:

3 equal sides. 3 equal angles.

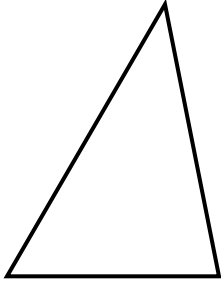
Isosceles Triangle:

2 equal sides. 2 equal angles.

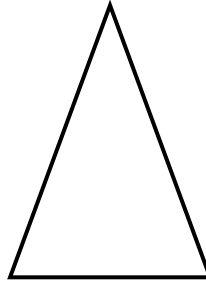
Scalene Triangle:

No equal sides. No equal angles.

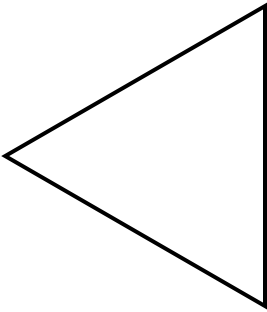
1)



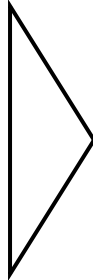
2)



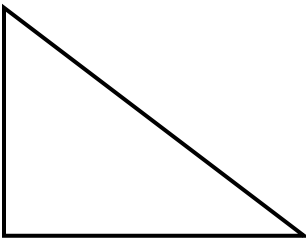
3)



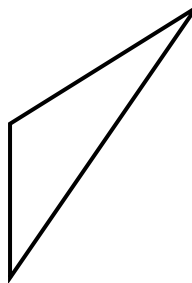
4)



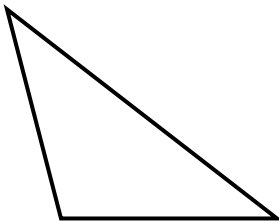
5)



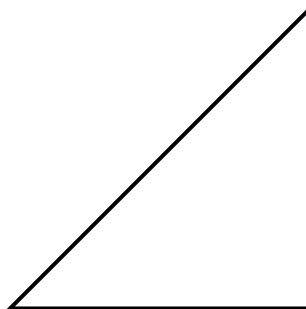
6)



7)



8)



1. _____
2. _____
3. _____
4. _____
5. _____
6. _____
7. _____
8. _____



Определите, является ли каждый треугольник острым (A), тупым (O) или прямым (R), а также равносторонним (E), равнобедренным (I) или разносторонним (S).

Acute Triangle:

All angles are less than 90° .

Obtuse Triangle:

One angle is greater than 90° .

Right Triangle:

One angle is 90° .

Equilateral Triangle:

3 equal sides. 3 equal angles.

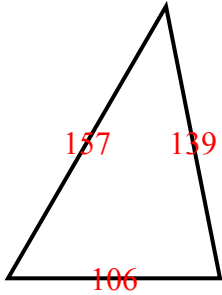
Isosceles Triangle:

2 equal sides. 2 equal angles.

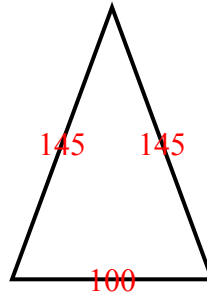
Scalene Triangle:

No equal sides. No equal angles.

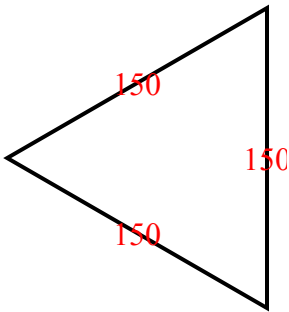
1)



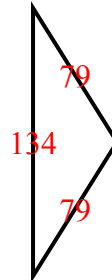
2)



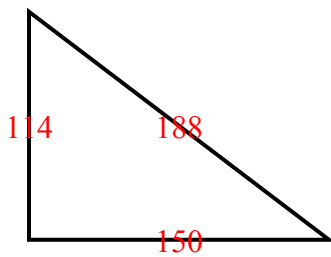
3)



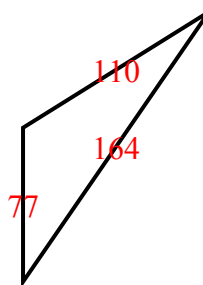
4)



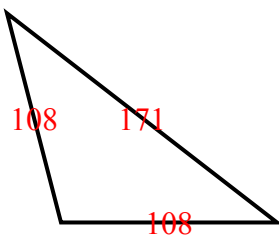
5)



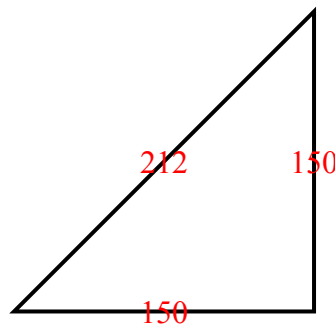
6)



7)



8)



ОТВЕТЫ

1. AS

2. AI

3. AE

4. OI

5. RS

6. OS

7. OI

8. RI