



Определите, является ли каждый треугольник острым (A), тупым (O) или прямым (R), а также равносторонним (E), равнобедренным (I) или разносторонним (S).

**Ответы**

**Acute Triangle:**

All angles are less than  $90^\circ$ .

**Obtuse Triangle:**

One angle is greater than  $90^\circ$ .

**Right Triangle:**

One angle is  $90^\circ$ .

**Equilateral Triangle:**

3 equal sides. 3 equal angles.

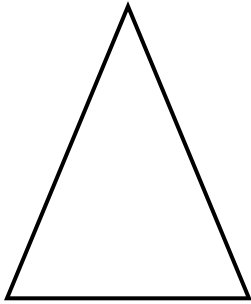
**Isosceles Triangle:**

2 equal sides. 2 equal angles.

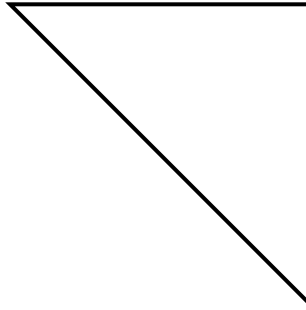
**Scalene Triangle:**

No equal sides. No equal angles.

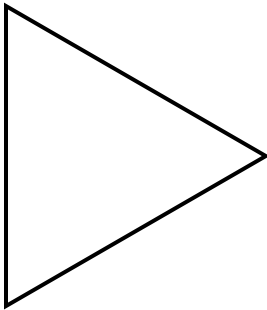
1)



2)



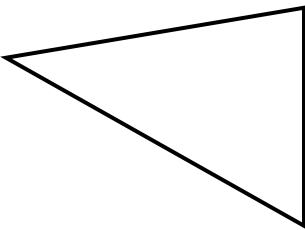
3)



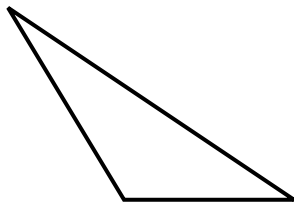
4)



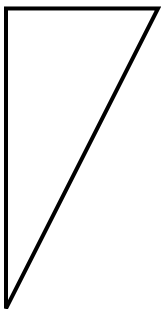
5)



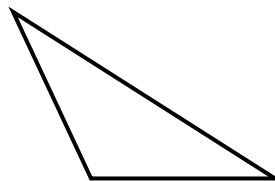
6)



7)



8)



1. \_\_\_\_\_
2. \_\_\_\_\_
3. \_\_\_\_\_
4. \_\_\_\_\_
5. \_\_\_\_\_
6. \_\_\_\_\_
7. \_\_\_\_\_
8. \_\_\_\_\_



Определите, является ли каждый треугольник острым (A), тупым (O) или прямым (R), а также равносторонним (E), равнобедренным (I) или разносторонним (S).

**Acute Triangle:**

All angles are less than  $90^\circ$ .

**Obtuse Triangle:**

One angle is greater than  $90^\circ$ .

**Right Triangle:**

One angle is  $90^\circ$ .

**Equilateral Triangle:**

3 equal sides. 3 equal angles.

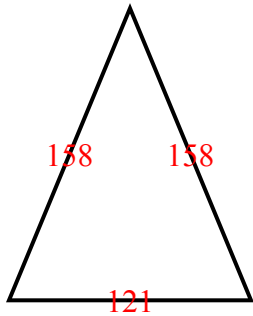
**Isosceles Triangle:**

2 equal sides. 2 equal angles.

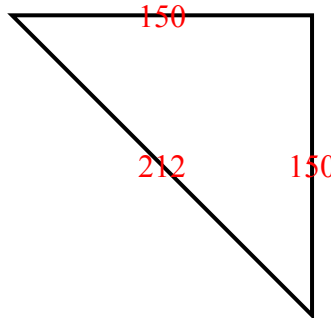
**Scalene Triangle:**

No equal sides. No equal angles.

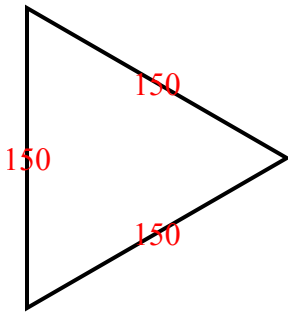
1)



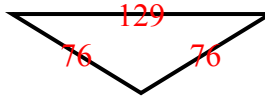
2)



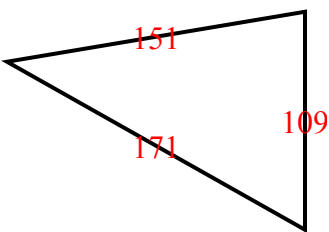
3)



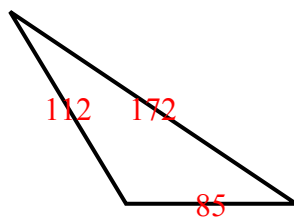
4)



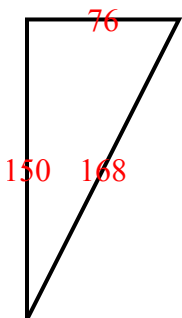
5)



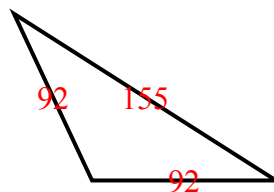
6)



7)



8)



**ОТВЕТЫ**

1. AI

2. RI

3. AE

4. OI

5. AS

6. OS

7. RS

8. OI