



Определите, является ли каждый треугольник острым (A), тупым (O) или прямым (R), а также равносторонним (E), равнобедренным (I) или разносторонним (S).

ОТВЕТЫ

Acute Triangle:

All angles are less than 90° .

Obtuse Triangle:

One angle is greater than 90° .

Right Triangle:

One angle is 90° .

Equilateral Triangle:

3 equal sides. 3 equal angles.

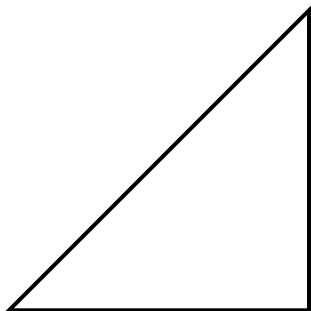
Isosceles Triangle:

2 equal sides. 2 equal angles.

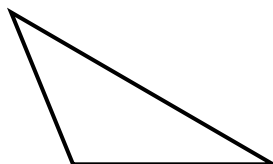
Scalene Triangle:

No equal sides. No equal angles.

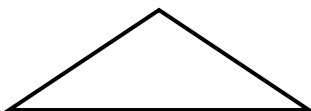
1)



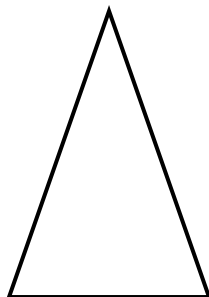
2)



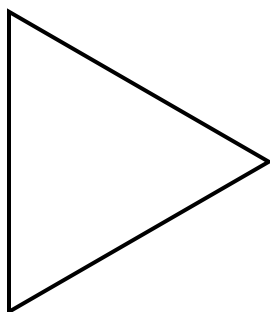
3)



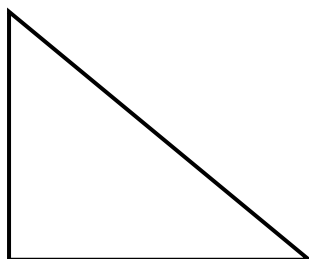
4)



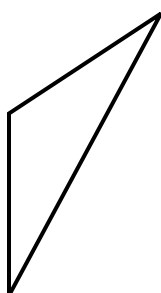
5)



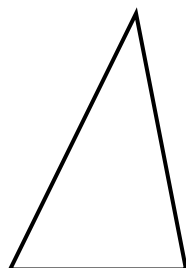
6)



7)



8)



1. _____
2. _____
3. _____
4. _____
5. _____
6. _____
7. _____
8. _____



Определите, является ли каждый треугольник острым (A), тупым (O) или прямым (R), а также равносторонним (E), равнобедренным (I) или разносторонним (S).

Acute Triangle:

All angles are less than 90° .

Obtuse Triangle:

One angle is greater than 90° .

Right Triangle:

One angle is 90° .

Equilateral Triangle:

3 equal sides. 3 equal angles.

Isosceles Triangle:

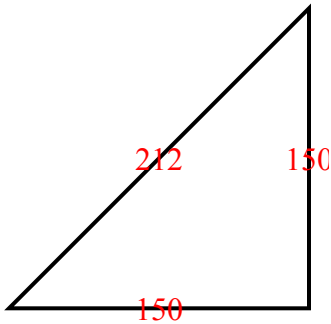
2 equal sides. 2 equal angles.

Scalene Triangle:

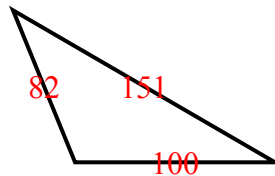
No equal sides. No equal angles.

ОТВЕТЫ

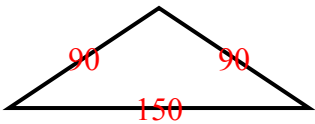
1)



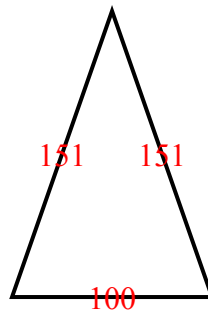
2)



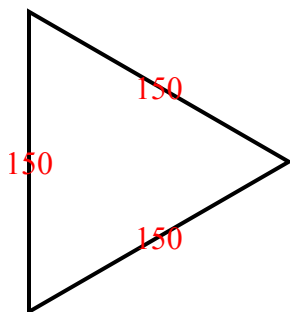
3)



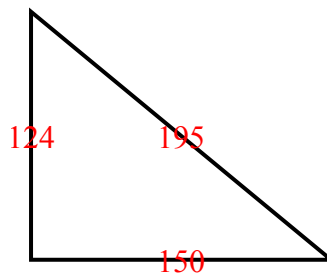
4)



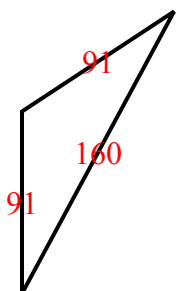
5)



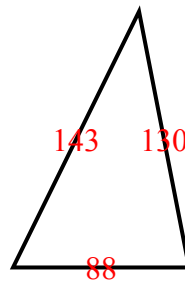
6)



7)



8)



1. RI
2. OS
3. OI
4. AI
5. AE
6. RS
7. OI
8. AS



Определите, является ли каждый треугольник острым (A), тупым (O) или прямым (R), а также равносторонним (E), равнобедренным (I) или разносторонним (S).

ОТВЕТЫ

Acute Triangle:

All angles are less than 90° .

Obtuse Triangle:

One angle is greater than 90° .

Right Triangle:

One angle is 90° .

Equilateral Triangle:

3 equal sides. 3 equal angles.

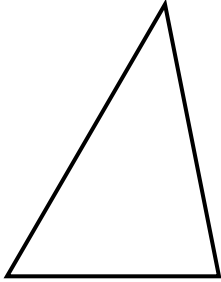
Isosceles Triangle:

2 equal sides. 2 equal angles.

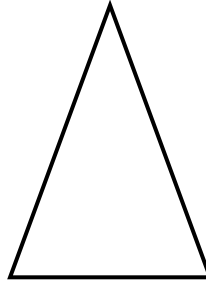
Scalene Triangle:

No equal sides. No equal angles.

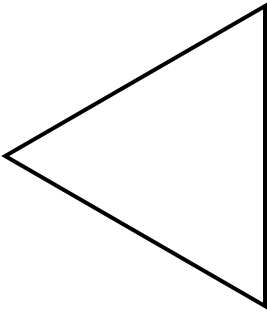
1)



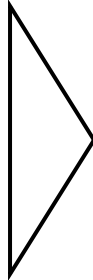
2)



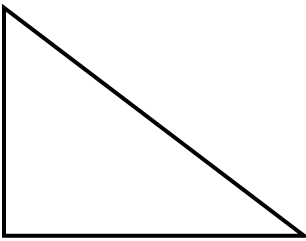
3)



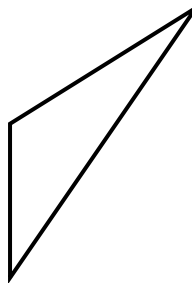
4)



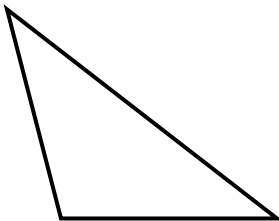
5)



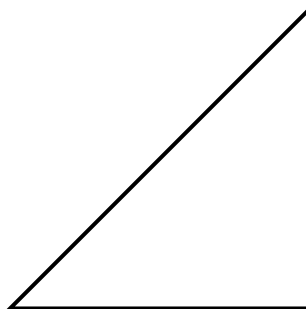
6)



7)



8)



1. _____
2. _____
3. _____
4. _____
5. _____
6. _____
7. _____
8. _____



Определите, является ли каждый треугольник острым (A), тупым (O) или прямым (R), а также равносторонним (E), равнобедренным (I) или разносторонним (S).

Acute Triangle:

All angles are less than 90° .

Obtuse Triangle:

One angle is greater than 90° .

Right Triangle:

One angle is 90° .

Equilateral Triangle:

3 equal sides. 3 equal angles.

Isosceles Triangle:

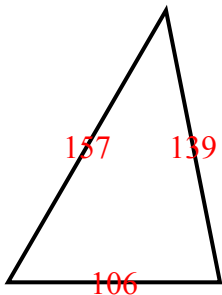
2 equal sides. 2 equal angles.

Scalene Triangle:

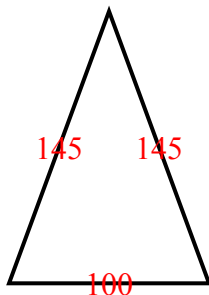
No equal sides. No equal angles.

ОТВЕТЫ

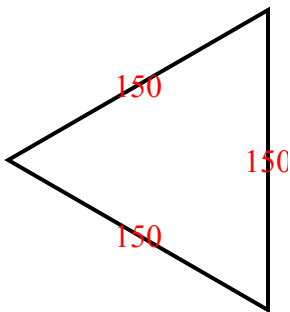
1)



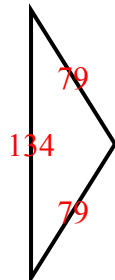
2)



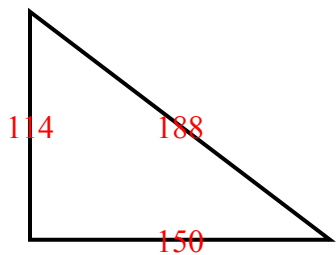
3)



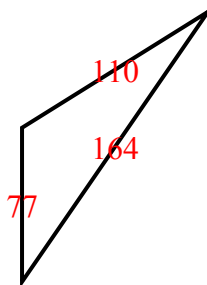
4)



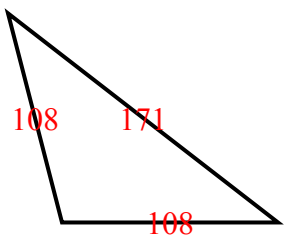
5)



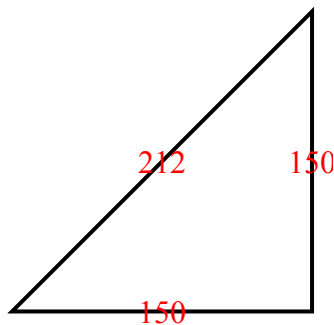
6)



7)



8)



1. AS
2. AI
3. AE
4. OI
5. RS
6. OS
7. OI
8. RI



Определите, является ли каждый треугольник острым (A), тупым (O) или прямым (R), а также равносторонним (E), равнобедренным (I) или разносторонним (S).

Ответы

Acute Triangle:

All angles are less than 90° .

Obtuse Triangle:

One angle is greater than 90° .

Right Triangle:

One angle is 90° .

Equilateral Triangle:

3 equal sides. 3 equal angles.

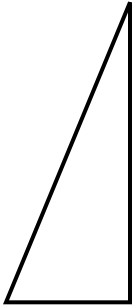
Isosceles Triangle:

2 equal sides. 2 equal angles.

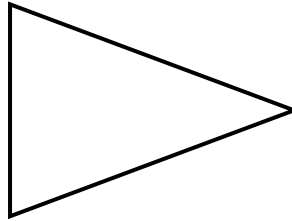
Scalene Triangle:

No equal sides. No equal angles.

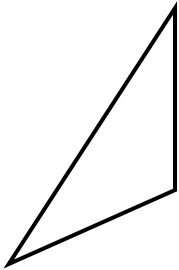
1)



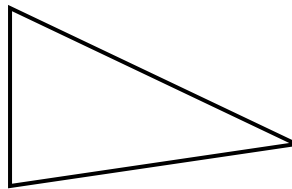
2)



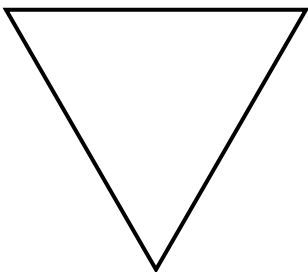
3)



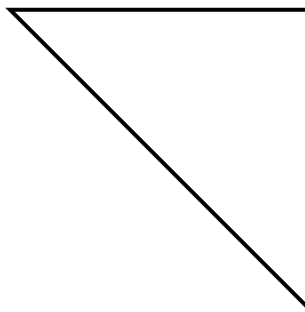
4)



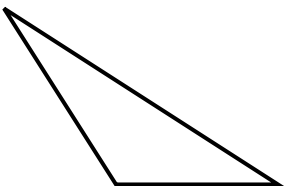
5)



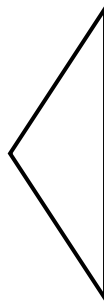
6)



7)



8)



1. _____
2. _____
3. _____
4. _____
5. _____
6. _____
7. _____
8. _____



Определите, является ли каждый треугольник острым (A), тупым (O) или прямым (R), а также равносторонним (E), равнобедренным (I) или разносторонним (S).

Acute Triangle:

All angles are less than 90° .

Obtuse Triangle:

One angle is greater than 90° .

Right Triangle:

One angle is 90° .

Equilateral Triangle:

3 equal sides. 3 equal angles.

Isosceles Triangle:

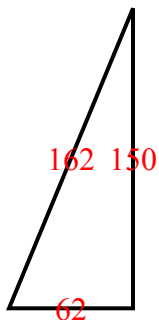
2 equal sides. 2 equal angles.

Scalene Triangle:

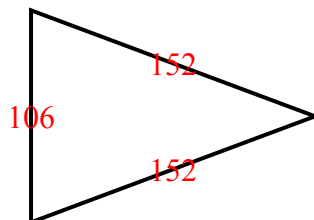
No equal sides. No equal angles.

ОТВЕТЫ

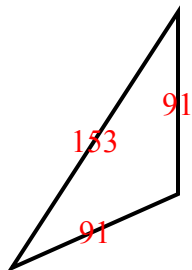
1)



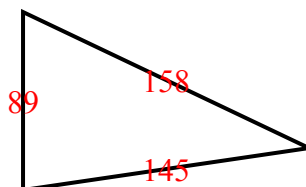
2)



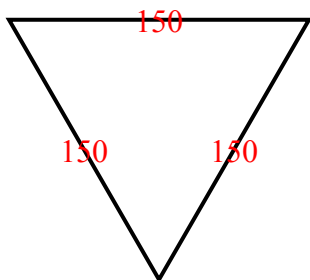
3)



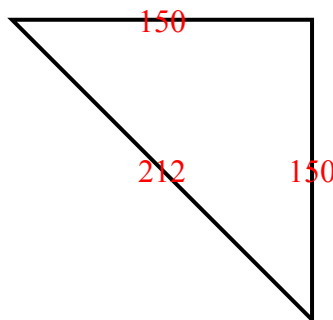
4)



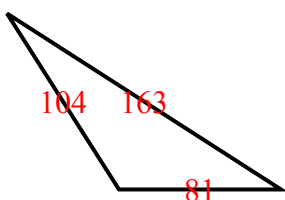
5)



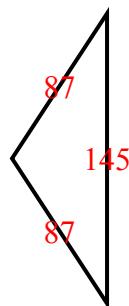
6)



7)



8)



- 1. RS
- 2. AI
- 3. OI
- 4. AS
- 5. AE
- 6. RI
- 7. OS
- 8. OI



Определите, является ли каждый треугольник острым (A), тупым (O) или прямым (R), а также равносторонним (E), равнобедренным (I) или разносторонним (S).

ОТВЕТЫ

Acute Triangle:

All angles are less than 90° .

Obtuse Triangle:

One angle is greater than 90° .

Right Triangle:

One angle is 90° .

Equilateral Triangle:

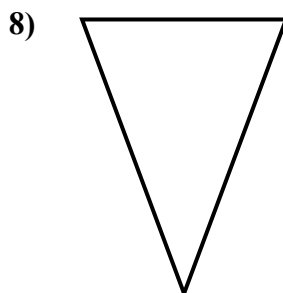
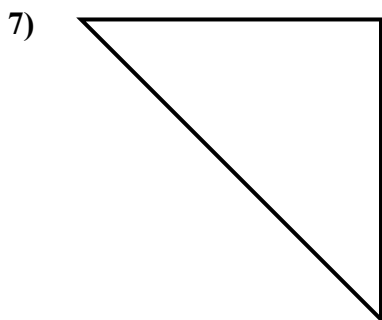
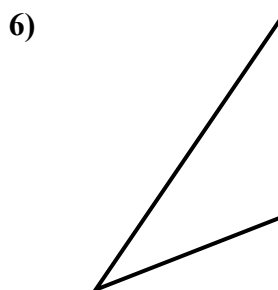
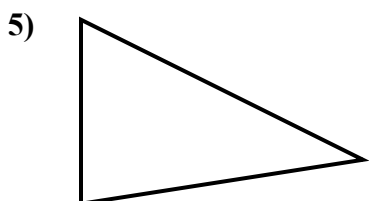
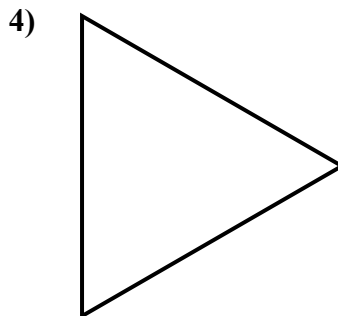
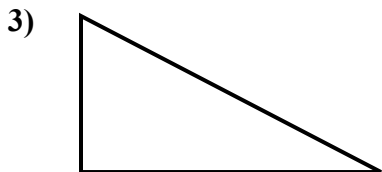
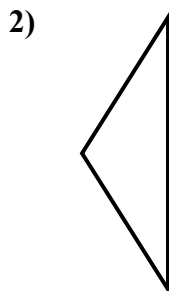
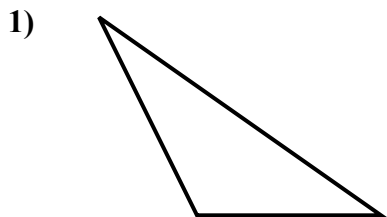
3 equal sides. 3 equal angles.

Isosceles Triangle:

2 equal sides. 2 equal angles.

Scalene Triangle:

No equal sides. No equal angles.



1. _____
2. _____
3. _____
4. _____
5. _____
6. _____
7. _____
8. _____



Определите, является ли каждый треугольник острым (A), тупым (O) или прямым (R), а также равносторонним (E), равнобедренным (I) или разносторонним (S).

Acute Triangle:

All angles are less than 90° .

Obtuse Triangle:

One angle is greater than 90° .

Right Triangle:

One angle is 90° .

Equilateral Triangle:

3 equal sides. 3 equal angles.

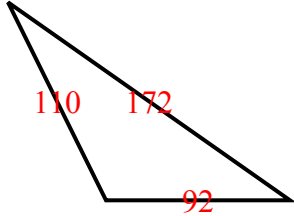
Isosceles Triangle:

2 equal sides. 2 equal angles.

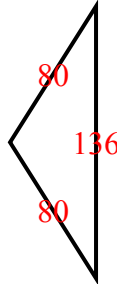
Scalene Triangle:

No equal sides. No equal angles.

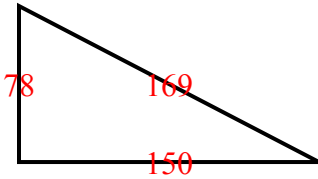
1)



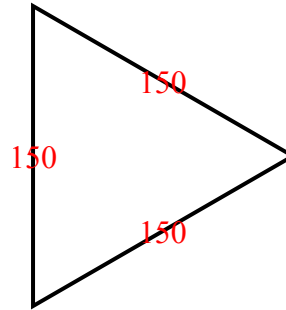
2)



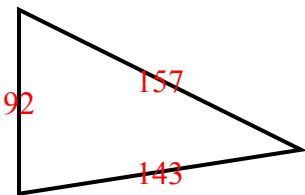
3)



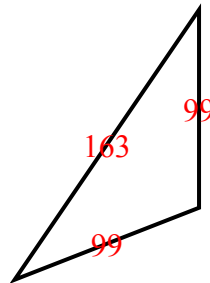
4)



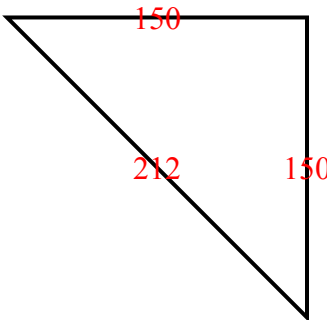
5)



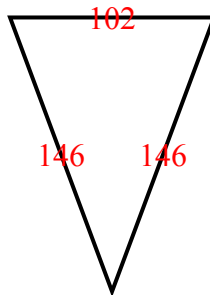
6)



7)



8)



ОТВЕТЫ

1. OS

2. OI

3. RS

4. AE

5. AS

6. OI

7. RI

8. AI



Определите, является ли каждый треугольник острым (A), тупым (O) или прямым (R), а также равносторонним (E), равнобедренным (I) или разносторонним (S).

ОТВЕТЫ

Acute Triangle:

All angles are less than 90° .

Obtuse Triangle:

One angle is greater than 90° .

Right Triangle:

One angle is 90° .

Equilateral Triangle:

3 equal sides. 3 equal angles.

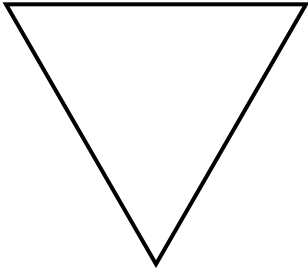
Isosceles Triangle:

2 equal sides. 2 equal angles.


Scalene Triangle:

No equal sides. No equal angles.

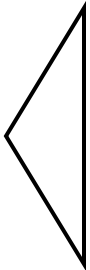
1)



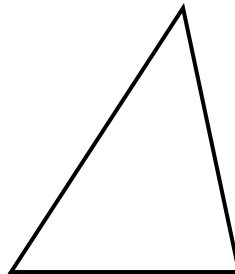
2)



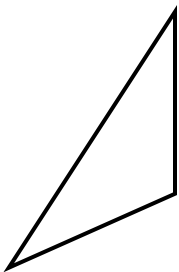
3)



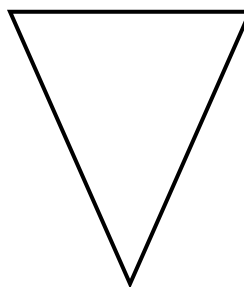
4)



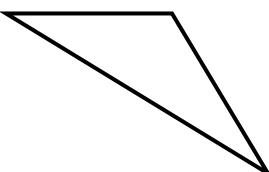
5)



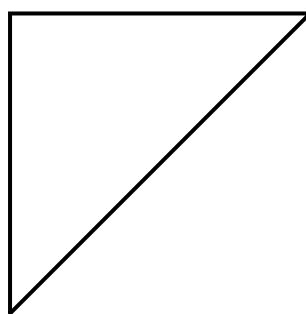
6)



7)



8)



1. _____
2. _____
3. _____
4. _____
5. _____
6. _____
7. _____
8. _____



Определите, является ли каждый треугольник острым (A), тупым (O) или прямым (R), а также равносторонним (E), равнобедренным (I) или разносторонним (S).

Acute Triangle:

All angles are less than 90° .

Obtuse Triangle:

One angle is greater than 90° .

Right Triangle:

One angle is 90° .

Equilateral Triangle:

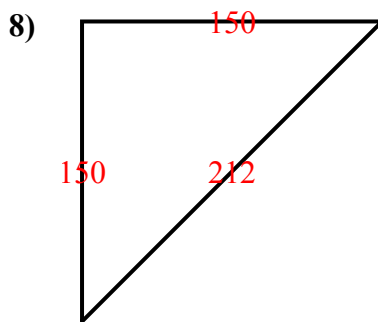
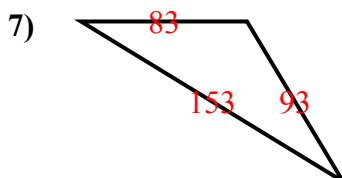
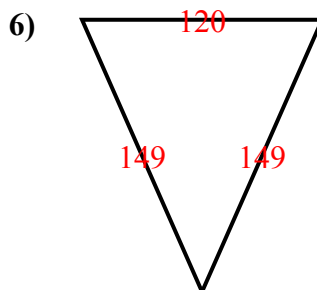
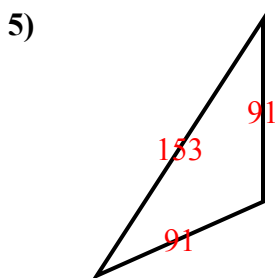
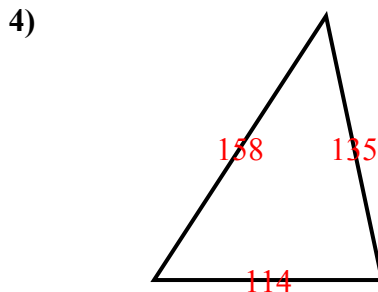
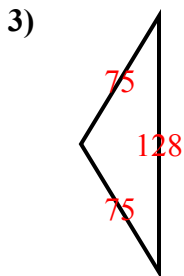
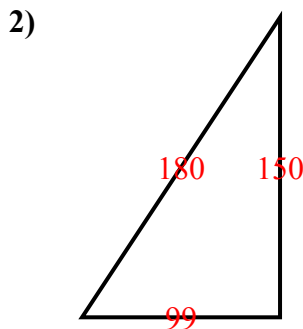
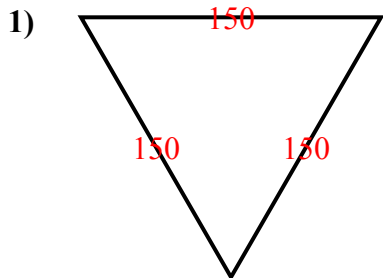
3 equal sides. 3 equal angles.

Isosceles Triangle:

2 equal sides. 2 equal angles.

Scalene Triangle:

No equal sides. No equal angles.



ОТВЕТЫ

1. AE

2. RS

3. OI

4. AS

5. OI

6. AI

7. OS

8. RI



Определите, является ли каждый треугольник острым (A), тупым (O) или прямым (R), а также равносторонним (E), равнобедренным (I) или разносторонним (S).

ОТВЕТЫ

Acute Triangle:

All angles are less than 90° .

Obtuse Triangle:

One angle is greater than 90° .

Right Triangle:

One angle is 90° .

Equilateral Triangle:

3 equal sides. 3 equal angles.

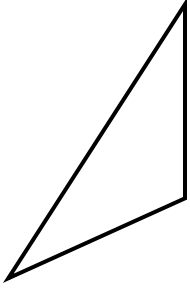
Isosceles Triangle:

2 equal sides. 2 equal angles.

Scalene Triangle:

No equal sides. No equal angles.

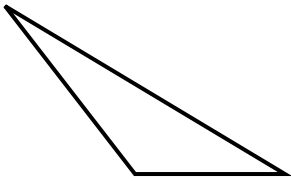
1)



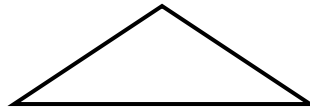
2)



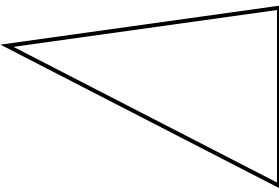
3)



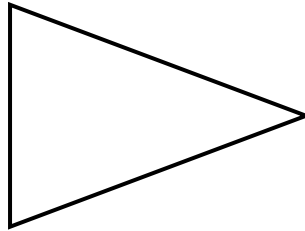
4)



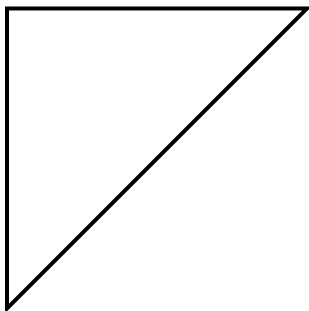
5)



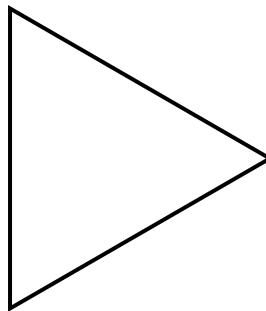
6)



7)



8)



1. _____
2. _____
3. _____
4. _____
5. _____
6. _____
7. _____
8. _____



Определите, является ли каждый треугольник острым (A), тупым (O) или прямым (R), а также равносторонним (E), равнобедренным (I) или разносторонним (S).

Acute Triangle:

All angles are less than 90° .

Obtuse Triangle:

One angle is greater than 90° .

Right Triangle:

One angle is 90° .

Equilateral Triangle:

3 equal sides. 3 equal angles.

Isosceles Triangle:

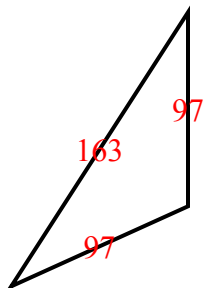
2 equal sides. 2 equal angles.

Scalene Triangle:

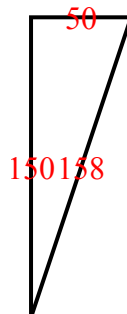
No equal sides. No equal angles.

ОТВЕТЫ

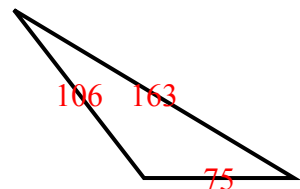
1)



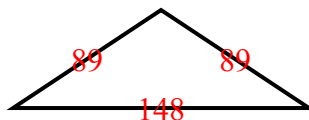
2)



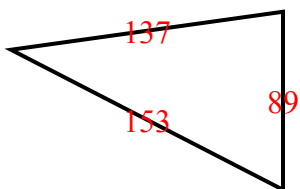
3)



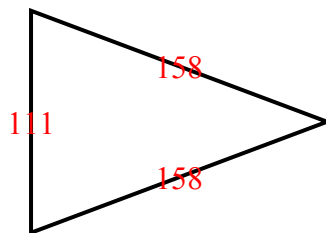
4)



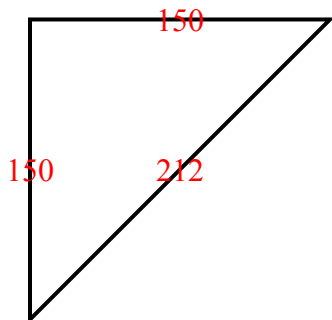
5)



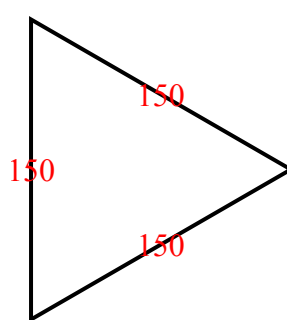
6)



7)



8)



- 1. OI
- 2. RS
- 3. OS
- 4. OI
- 5. AS
- 6. AI
- 7. RI
- 8. AE



Определите, является ли каждый треугольник острым (A), тупым (O) или прямым (R), а также равносторонним (E), равнобедренным (I) или разносторонним (S).

ОТВЕТЫ

Acute Triangle:

All angles are less than 90° .

Obtuse Triangle:

One angle is greater than 90° .

Right Triangle:

One angle is 90° .

Equilateral Triangle:

3 equal sides. 3 equal angles.

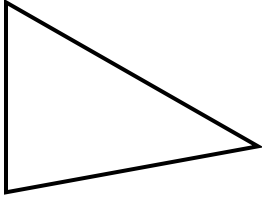
Isosceles Triangle:

2 equal sides. 2 equal angles.

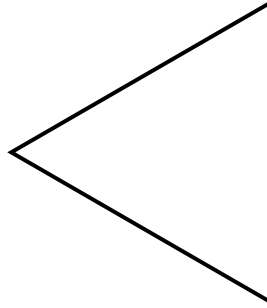
Scalene Triangle:

No equal sides. No equal angles.

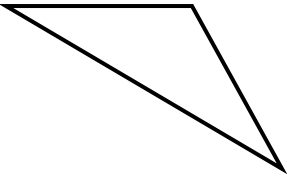
1)



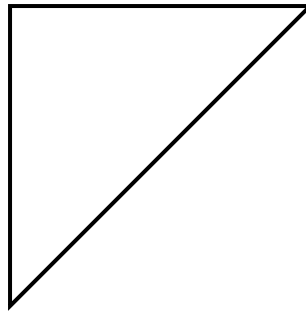
2)



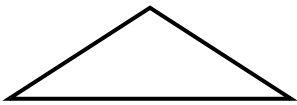
3)



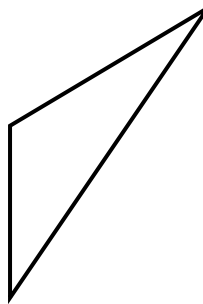
4)



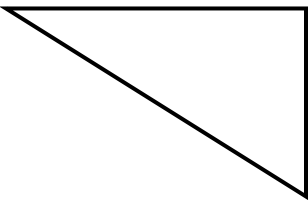
5)



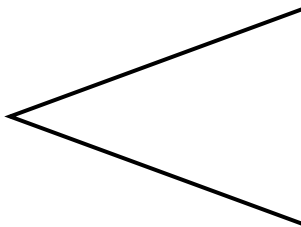
6)



7)



8)



- 1. _____
- 2. _____
- 3. _____
- 4. _____
- 5. _____
- 6. _____
- 7. _____
- 8. _____



Определите, является ли каждый треугольник острым (A), тупым (O) или прямым (R), а также равносторонним (E), равнобедренным (I) или разносторонним (S).

Acute Triangle:

All angles are less than 90° .

Obtuse Triangle:

One angle is greater than 90° .

Right Triangle:

One angle is 90° .

Equilateral Triangle:

3 equal sides. 3 equal angles.

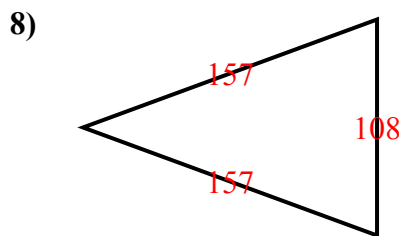
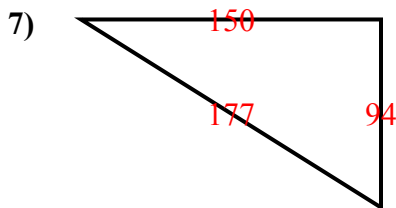
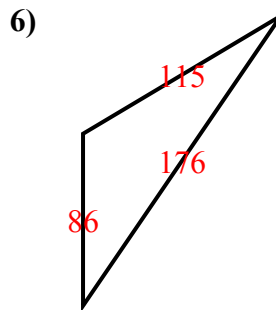
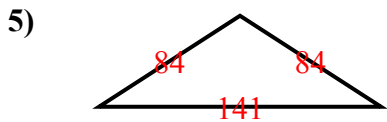
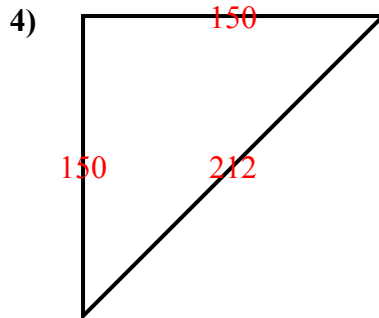
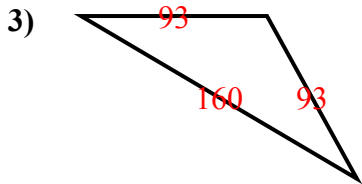
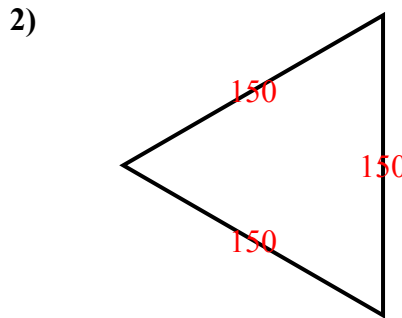
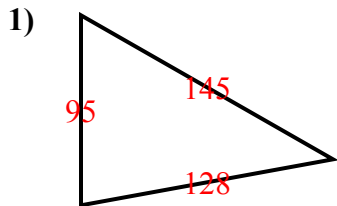
Isosceles Triangle:

2 equal sides. 2 equal angles.

Scalene Triangle:

No equal sides. No equal angles.

ОТВЕТЫ



- 1. AS
- 2. AE
- 3. OI
- 4. RI
- 5. OI
- 6. OS
- 7. RS
- 8. AI



Определите, является ли каждый треугольник острым (A), тупым (O) или прямым (R), а также равносторонним (E), равнобедренным (I) или разносторонним (S).

ОТВЕТЫ

Acute Triangle:

All angles are less than 90° .

Obtuse Triangle:

One angle is greater than 90° .

Right Triangle:

One angle is 90° .

Equilateral Triangle:

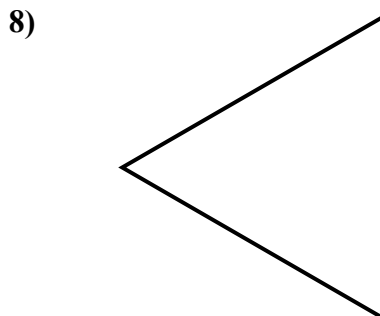
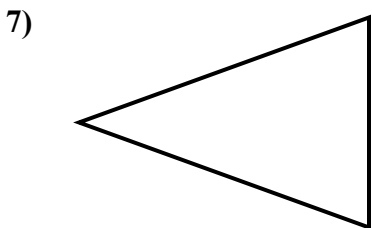
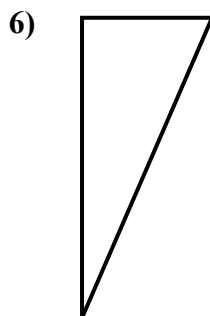
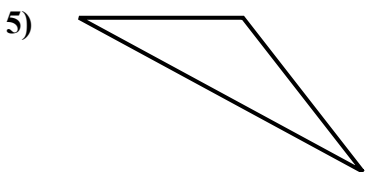
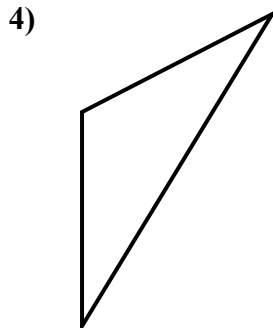
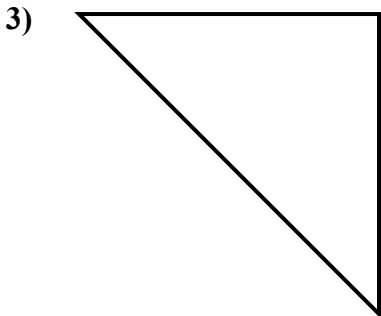
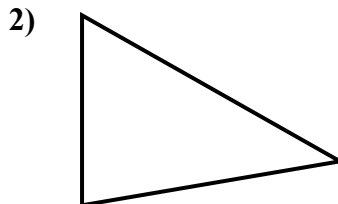
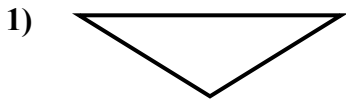
3 equal sides. 3 equal angles.

Isosceles Triangle:

2 equal sides. 2 equal angles.

Scalene Triangle:

No equal sides. No equal angles.



1. _____
2. _____
3. _____
4. _____
5. _____
6. _____
7. _____
8. _____



Определите, является ли каждый треугольник острым (A), тупым (O) или прямым (R), а также равносторонним (E), равнобедренным (I) или разносторонним (S).

Acute Triangle:

All angles are less than 90° .

Obtuse Triangle:

One angle is greater than 90° .

Right Triangle:

One angle is 90° .

Equilateral Triangle:

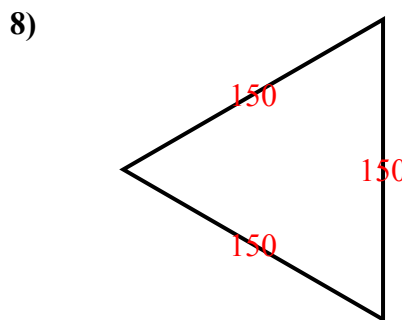
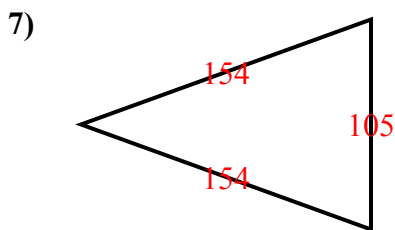
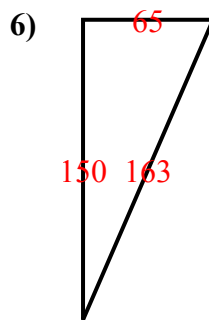
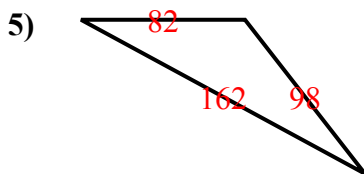
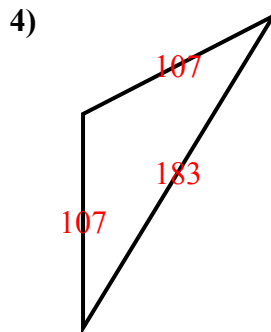
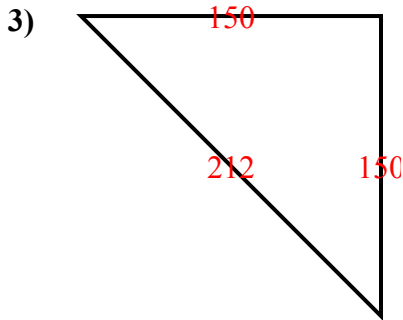
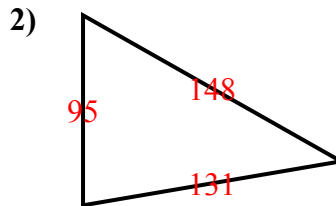
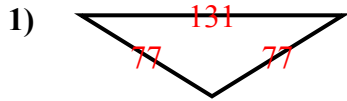
3 equal sides. 3 equal angles.

Isosceles Triangle:

2 equal sides. 2 equal angles.

Scalene Triangle:

No equal sides. No equal angles.



ОТВЕТЫ

1. OI

2. AS

3. RI

4. OI

5. OS

6. RS

7. AI

8. AE



Определите, является ли каждый треугольник острым (A), тупым (O) или прямым (R), а также равносторонним (E), равнобедренным (I) или разносторонним (S).

Ответы

Acute Triangle:

All angles are less than 90° .

Obtuse Triangle:

One angle is greater than 90° .

Right Triangle:

One angle is 90° .

Equilateral Triangle:

3 equal sides. 3 equal angles.

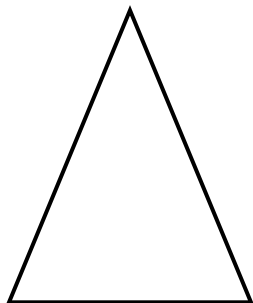
Isosceles Triangle:

2 equal sides. 2 equal angles.

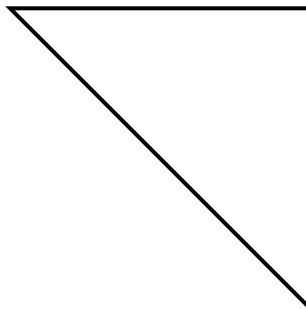
Scalene Triangle:

No equal sides. No equal angles.

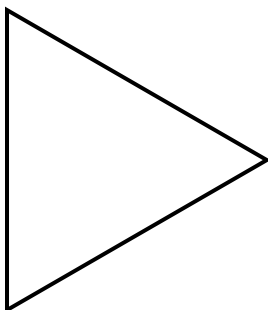
1)



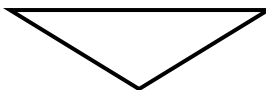
2)



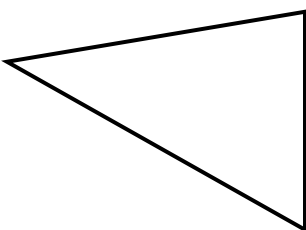
3)



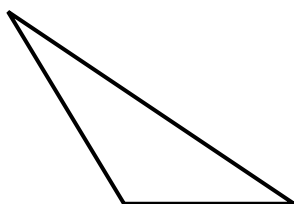
4)



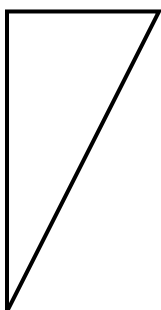
5)



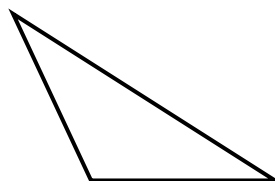
6)



7)



8)



1. _____
2. _____
3. _____
4. _____
5. _____
6. _____
7. _____
8. _____



Определите, является ли каждый треугольник острым (A), тупым (O) или прямым (R), а также равносторонним (E), равнобедренным (I) или разносторонним (S).

Acute Triangle:

All angles are less than 90° .

Obtuse Triangle:

One angle is greater than 90° .

Right Triangle:

One angle is 90° .

Equilateral Triangle:

3 equal sides. 3 equal angles.

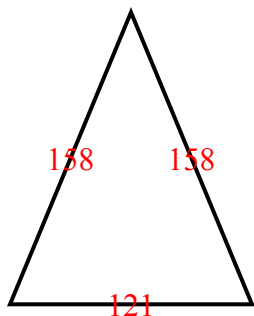
Isosceles Triangle:

2 equal sides. 2 equal angles.

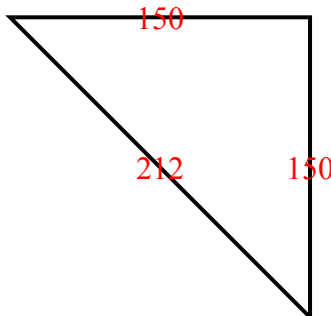
Scalene Triangle:

No equal sides. No equal angles.

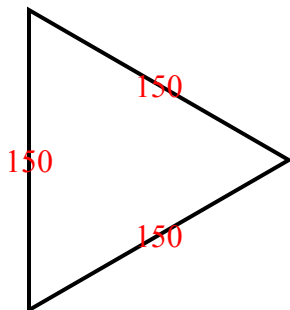
1)



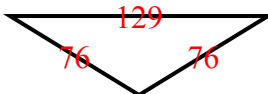
2)



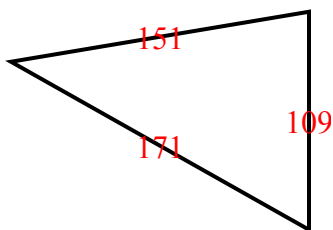
3)



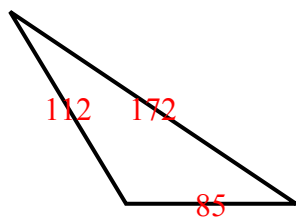
4)



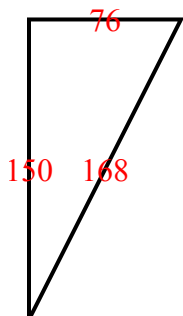
5)



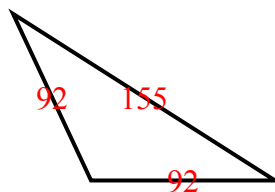
6)



7)



8)



ОТВЕТЫ

1. AI

2. RI

3. AE

4. OI

5. AS

6. OS

7. RS

8. OI



Определите, является ли каждый треугольник острым (A), тупым (O) или прямым (R), а также равносторонним (E), равнобедренным (I) или разносторонним (S).

Ответы

Acute Triangle:

All angles are less than 90° .

Obtuse Triangle:

One angle is greater than 90° .

Right Triangle:

One angle is 90° .

Equilateral Triangle:

3 equal sides. 3 equal angles.

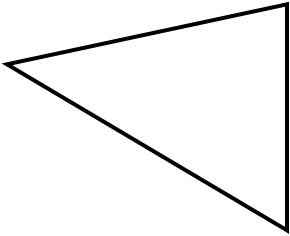
Isosceles Triangle:

2 equal sides. 2 equal angles.

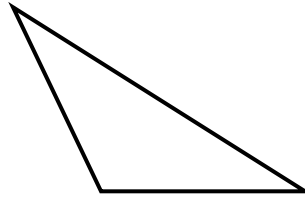
Scalene Triangle:

No equal sides. No equal angles.

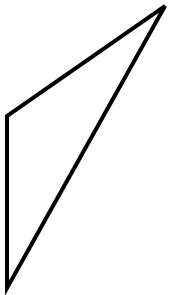
1)



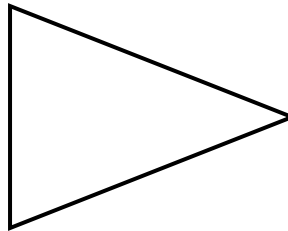
2)



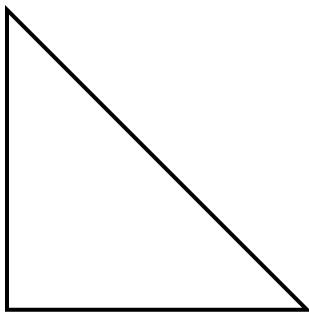
3)



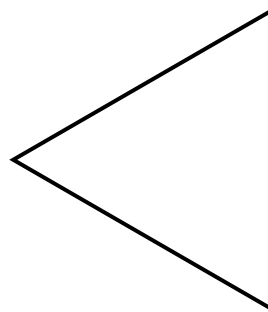
4)



5)



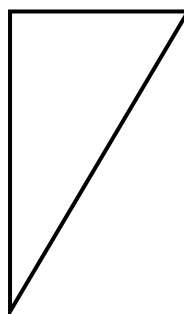
6)



7)



8)



1. _____
2. _____
3. _____
4. _____
5. _____
6. _____
7. _____
8. _____



Определите, является ли каждый треугольник острым (A), тупым (O) или прямым (R), а также равносторонним (E), равнобедренным (I) или разносторонним (S).

Acute Triangle:

All angles are less than 90° .

Obtuse Triangle:

One angle is greater than 90° .

Right Triangle:

One angle is 90° .

Equilateral Triangle:

3 equal sides. 3 equal angles.

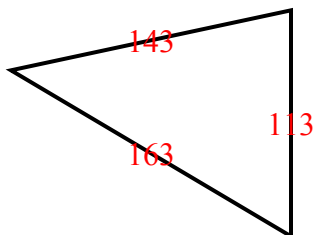
Isosceles Triangle:

2 equal sides. 2 equal angles.

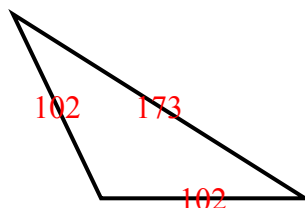
Scalene Triangle:

No equal sides. No equal angles.

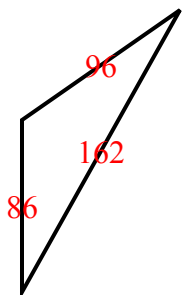
1)



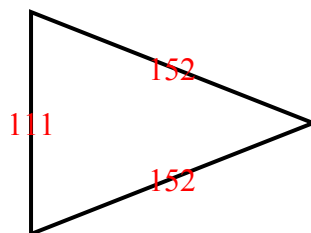
2)



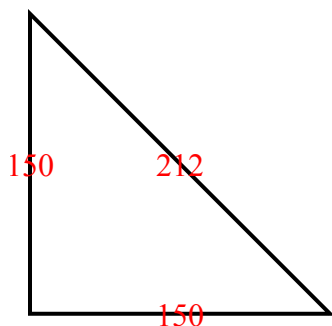
3)



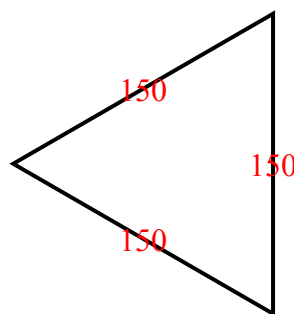
4)



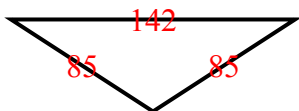
5)



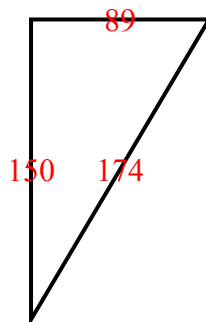
6)



7)



8)



ОТВЕТЫ

1. AS

2. OI

3. OS

4. AI

5. RI

6. AE

7. OI

8. RS