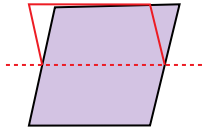


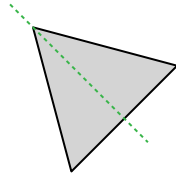


Определите, является ли данная линия линией симметрии.

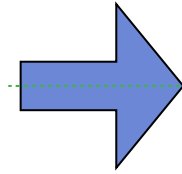
об)



1)



2)



об. **по**

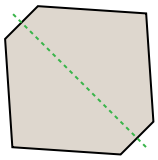
1. **да**

2. **да**

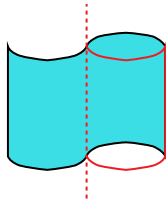
3. **да**

4. **по**

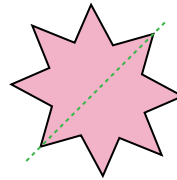
3)



4)



5)



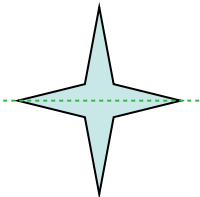
5. **да**

6. **да**

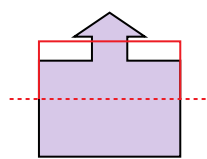
7. **по**

8. **да**

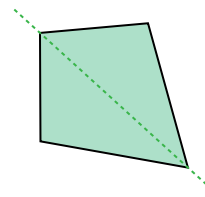
6)



7)



8)

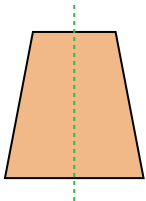


9. **да**

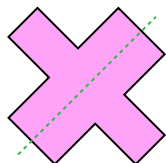
10. **да**

11. **да**

9)



10)



11)

