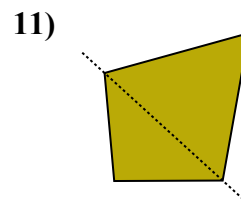
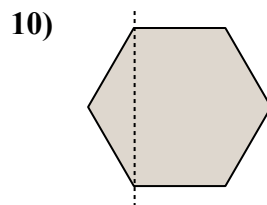
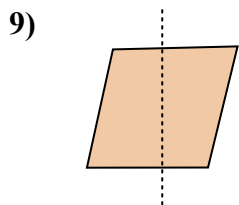
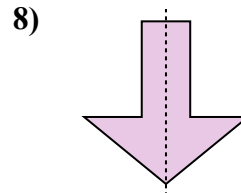
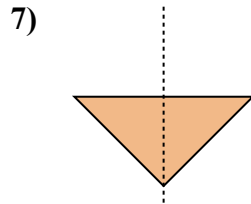
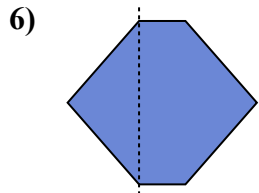
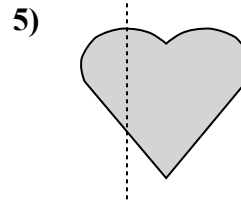
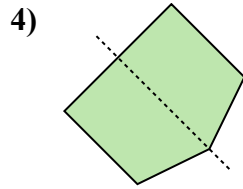
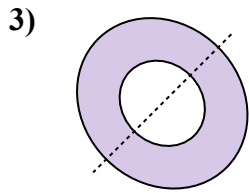
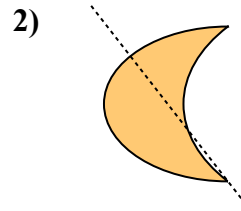
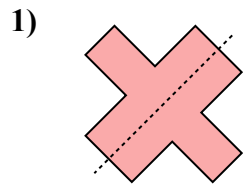
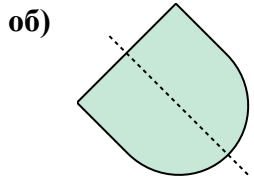




Определите, является ли данная линия линией симметрии.

ОТВЕТЫ



об. да

1. _____

2. _____

3. _____

4. _____

5. _____

6. _____

7. _____

8. _____

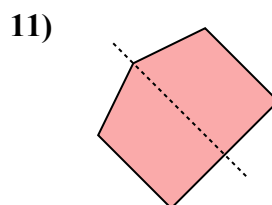
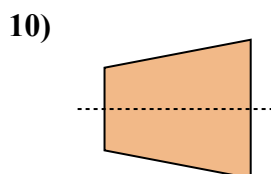
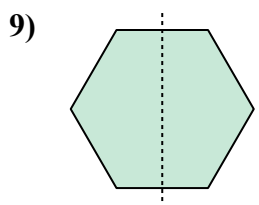
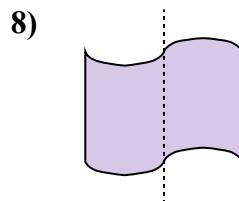
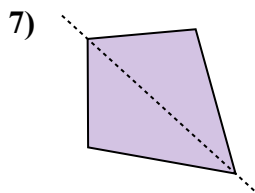
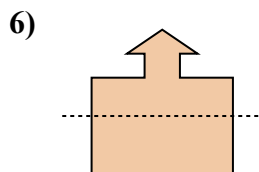
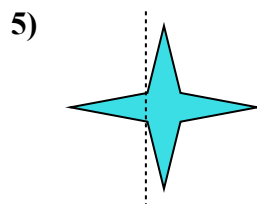

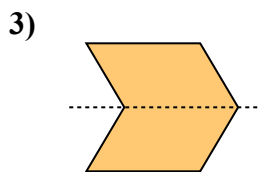
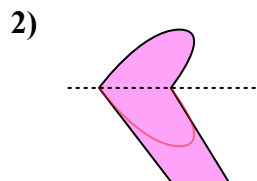

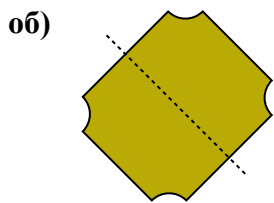
9. _____

10. _____

11. _____



Определите, является ли данная линия линией симметрии.



ОТВЕТЫ

об. да

1. _____

2. _____

3. _____

4. _____

5. _____

6. _____

7. _____

8. _____

9. _____

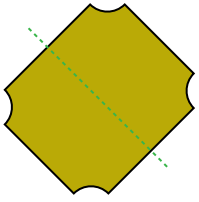
10. _____

11. _____

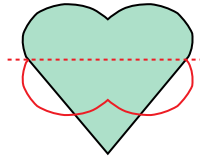


Определите, является ли данная линия линией симметрии.

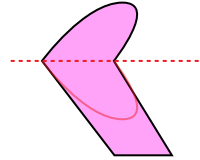
об)



1)



2)



об. да

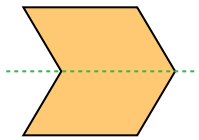
1. но

2. но

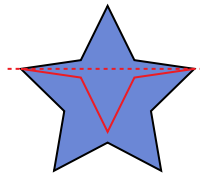
3. да

4. но

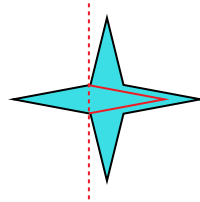
3)



4)



5)



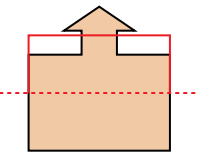
5. но

6. но

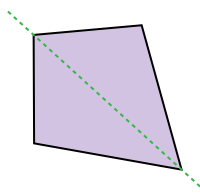
7. да

8. но

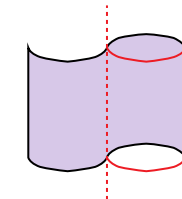
6)



7)



8)

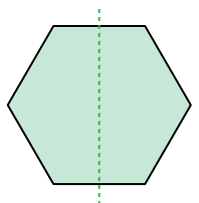


9. да

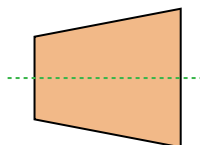
10. да

11. да

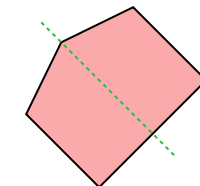
9)



10)



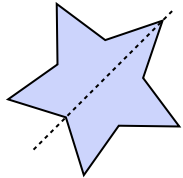
11)



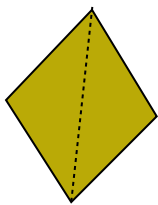


Определите, является ли данная линия линией симметрии.

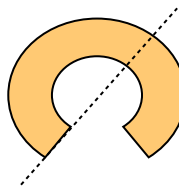
об)



1)



2)



Ответы

об. да

1. _____

2. _____

3. _____

4. _____

5. _____

6. _____

7. _____

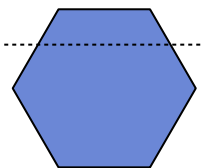
8. _____

9. _____

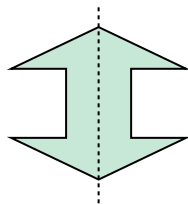
10. _____

11. _____

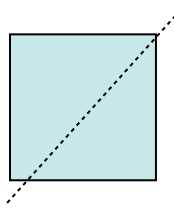
3)



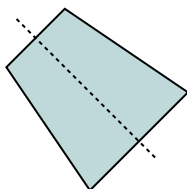
4)



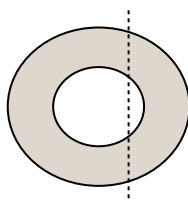
5)



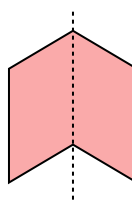
6)



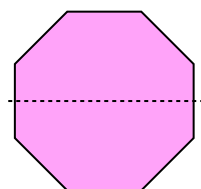
7)



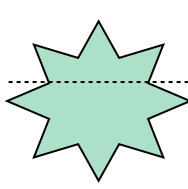
8)



9)



10)



11)

