

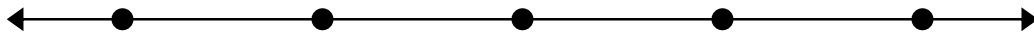


Решите каждую задачу.


1) $92\,628 - 84\,635 =$



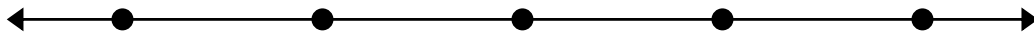
2) $28\,255 - 27\,053 =$



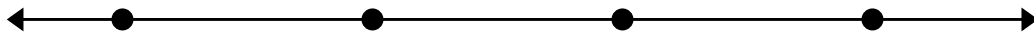
3) $36\,706 - 11\,215 =$




4) $96\,262 - 61\,077 =$




5) $72\,549 - 39\,050 =$



6) $96\,949 - 62\,588 =$



7) $17\,963 - 17\,643 =$

**Ответы**

1. _____

2. _____

3. _____

4. _____

5. _____

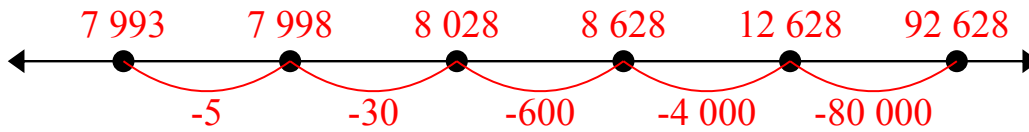
6. _____

7. _____

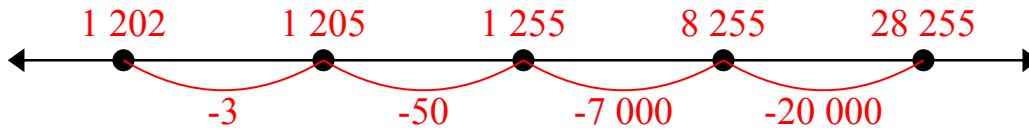


Решите каждую задачу.

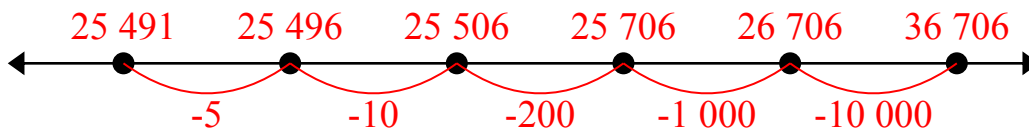
1) $92\,628 - 84\,635 =$



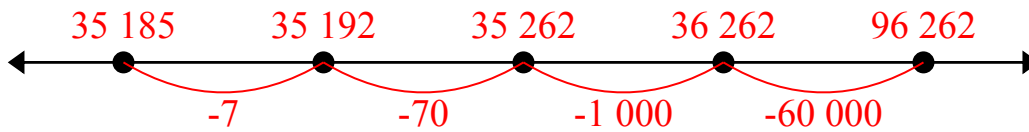
2) $28\,255 - 27\,053 =$



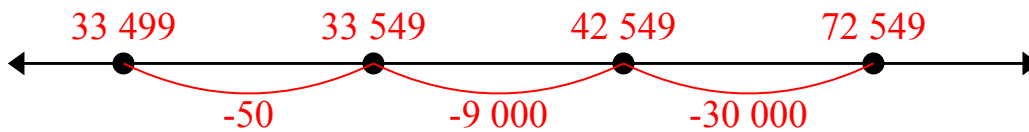
3) $36\,706 - 11\,215 =$



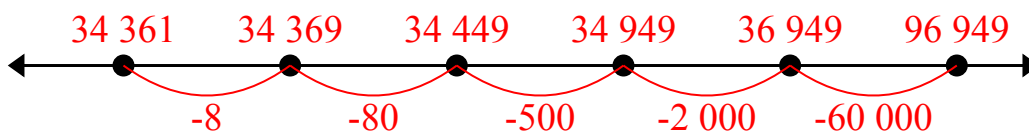
4) $96\,262 - 61\,077 =$



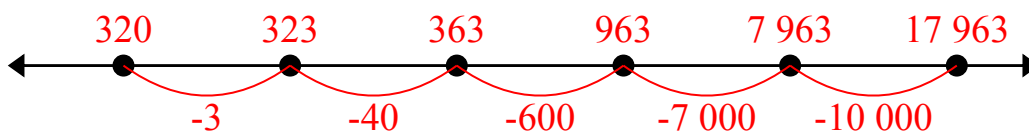
5) $72\,549 - 39\,050 =$



6) $96\,949 - 62\,588 =$



7) $17\,963 - 17\,643 =$



Ответы

1. 7 993
2. 1 202
3. 25 491
4. 35 185
5. 33 499
6. 34 361
7. 320



Решите каждую задачу.

7 993

35 185

33 499

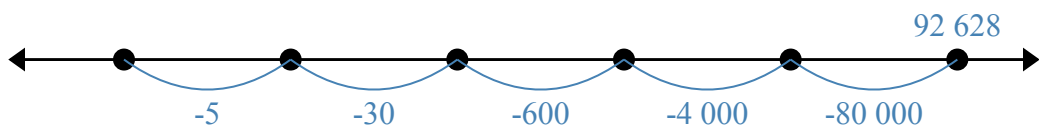
320

34 361

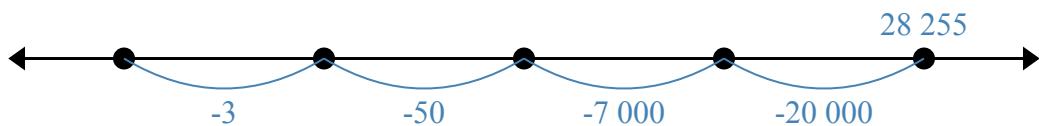
25 491

1 202

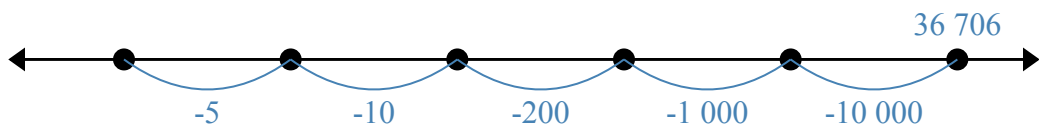
1) $92\,628 - 84\,635 =$



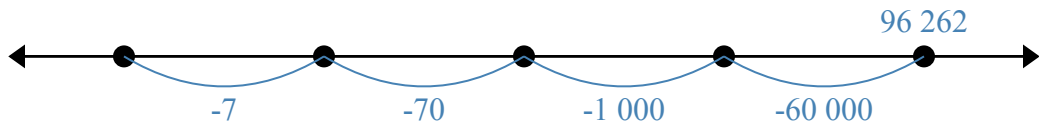
2) $28\,255 - 27\,053 =$




3) $36\,706 - 11\,215 =$



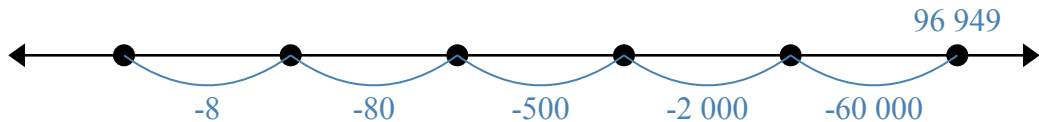
4) $96\,262 - 61\,077 =$



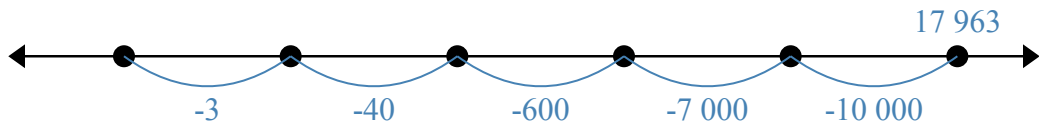
5) $72\,549 - 39\,050 =$



6) $96\,949 - 62\,588 =$



7) $17\,963 - 17\,643 =$



Ответы

1. _____

2. _____

3. _____

4. _____

5. _____

6. _____

7. _____