

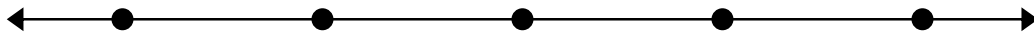


Решите каждую задачу.


1) $64\,241 - 25\,697 =$



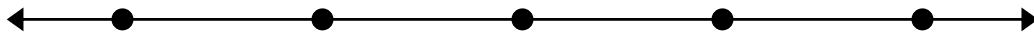
2) $87\,421 - 25\,068 =$



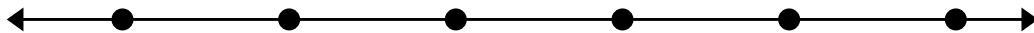
3) $93\,766 - 48\,652 =$



4) $67\,626 - 63\,802 =$




5) $87\,430 - 53\,276 =$



6) $96\,992 - 79\,618 =$



7) $98\,368 - 59\,257 =$

**Ответы**

1. _____

2. _____

3. _____

4. _____

5. _____

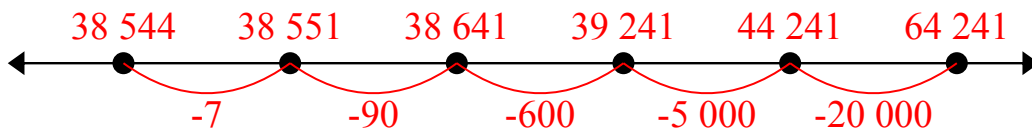
6. _____

7. _____

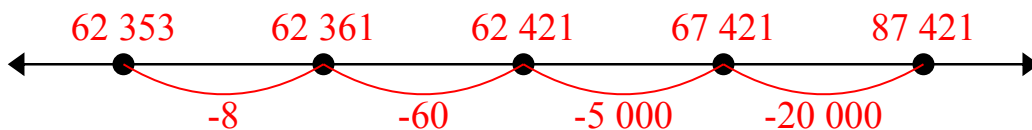


Решите каждую задачу.

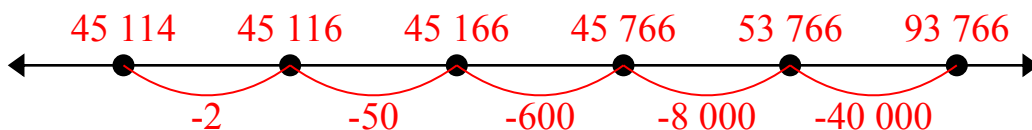
1) $64\,241 - 25\,697 =$



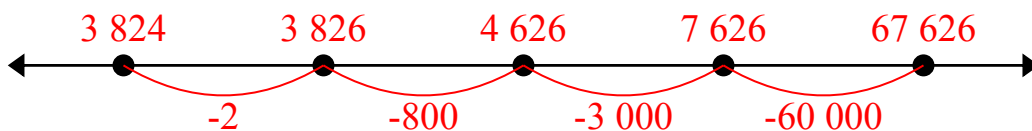
2) $87\,421 - 25\,068 =$



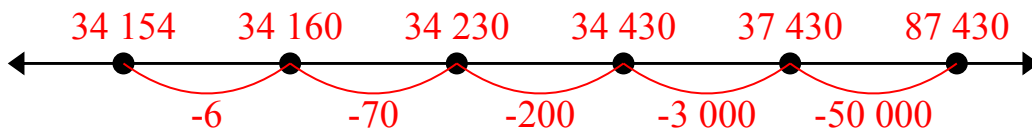
3) $93\,766 - 48\,652 =$



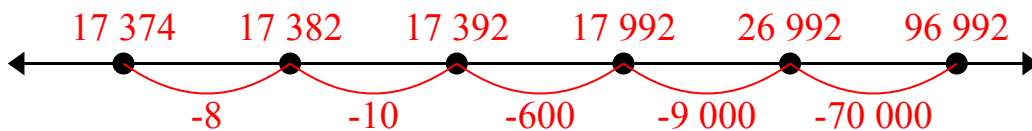
4) $67\,626 - 63\,802 =$



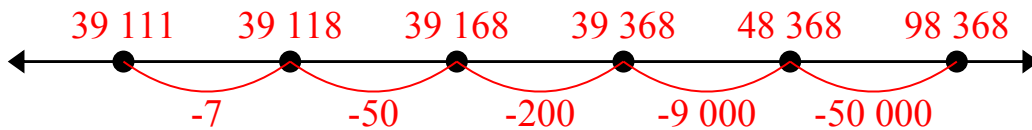
5) $87\,430 - 53\,276 =$



6) $96\,992 - 79\,618 =$



7) $98\,368 - 59\,257 =$



Ответы

1. 38 544

2. 62 353

3. 45 114

4. 3 824

5. 34 154

6. 17 374

7. 39 111



Решите каждую задачу.

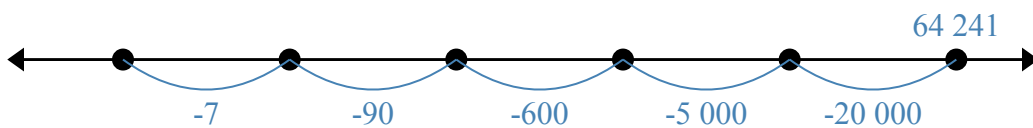
39 111
38 544

62 353
3 824

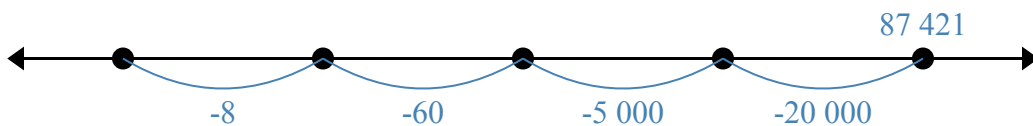
17 374
34 154

45 114

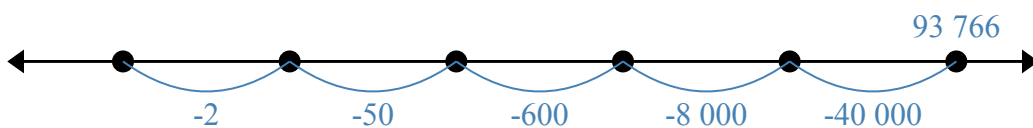
1) $64\,241 - 25\,697 =$



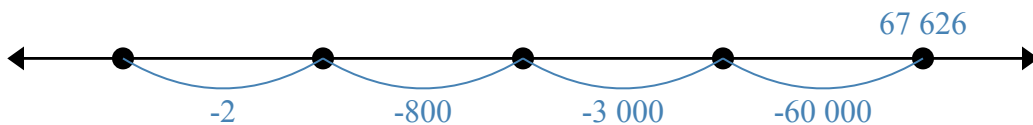
2) $87\,421 - 25\,068 =$



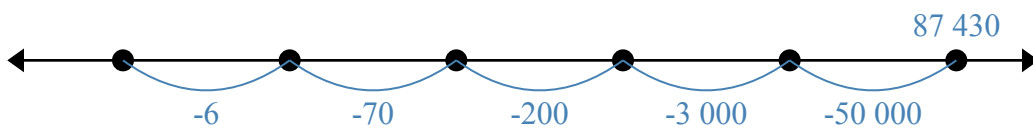
3) $93\,766 - 48\,652 =$



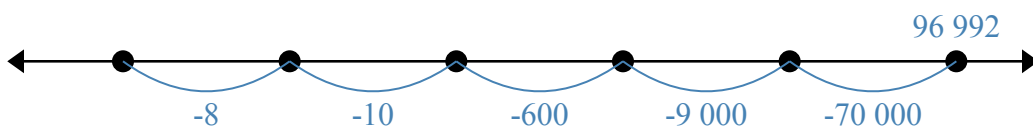
4) $67\,626 - 63\,802 =$



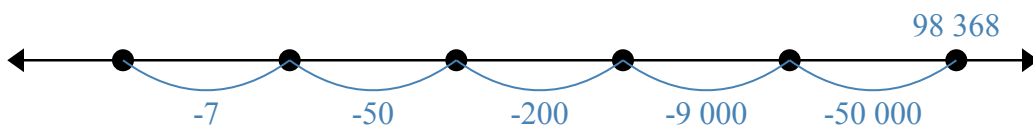
5) $87\,430 - 53\,276 =$



6) $96\,992 - 79\,618 =$



7) $98\,368 - 59\,257 =$



Ответы

1. _____
2. _____
3. _____
4. _____
5. _____
6. _____
7. _____