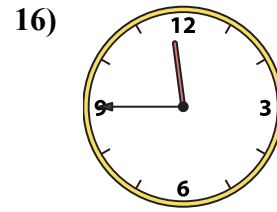
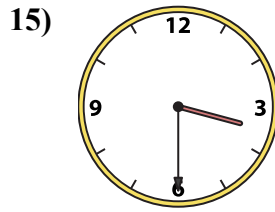
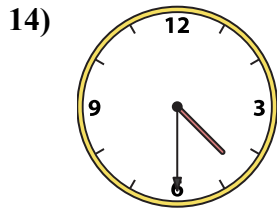
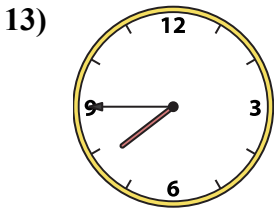
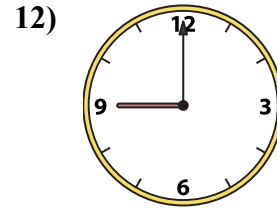
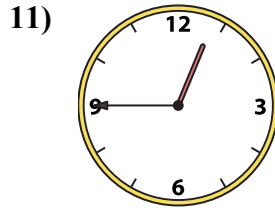
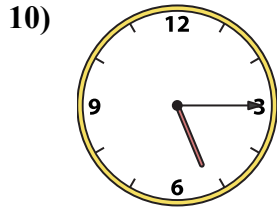
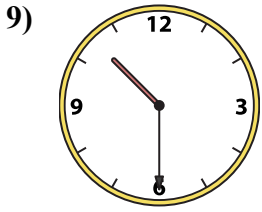
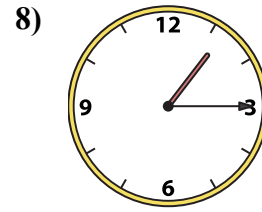
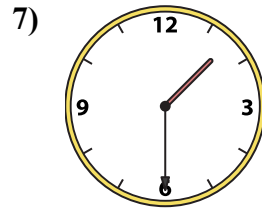
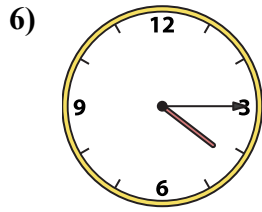
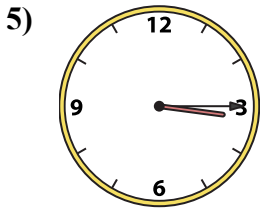
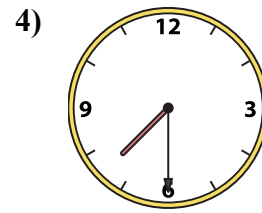
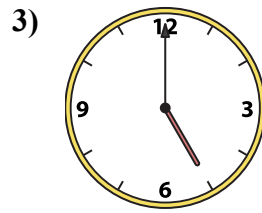
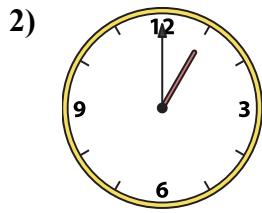
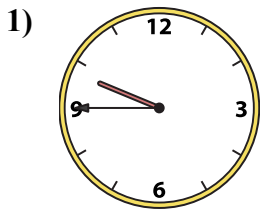




Совместите аналоговые часы с цифровыми часами.

ОТВЕТЫ



1. _____
2. _____
3. _____
4. _____
5. _____
6. _____
7. _____
8. _____
9. _____
10. _____
11. _____
12. _____
13. _____
14. _____
15. _____
16. _____

A. 11:45

B. 10:30

C. 1:00

D. 7:45

E. 5:00

F. 4:30

G. 4:15

H. 5:15

I. 3:15

J. 3:30

K. 9:00

L. 7:30

M. 1:30

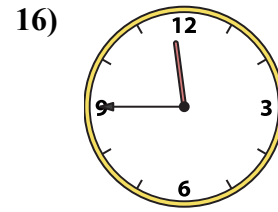
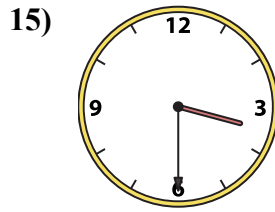
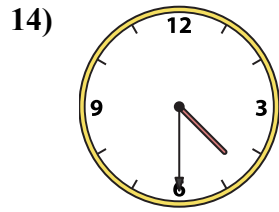
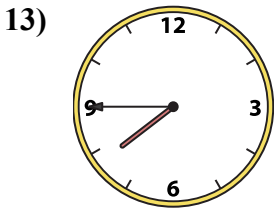
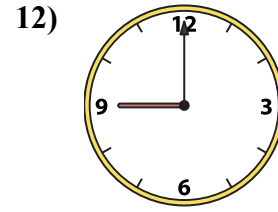
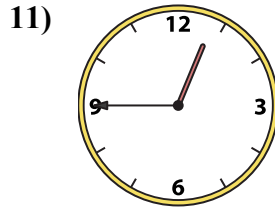
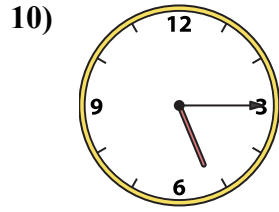
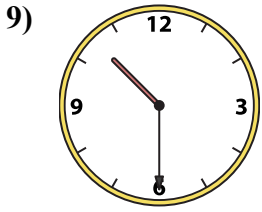
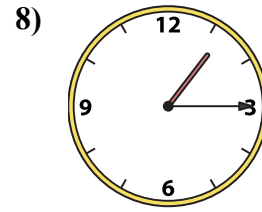
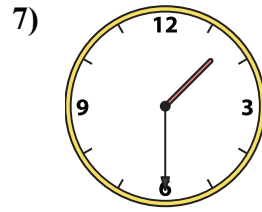
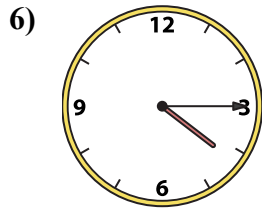
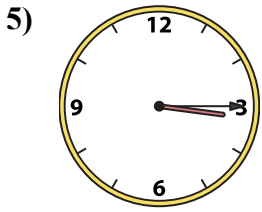
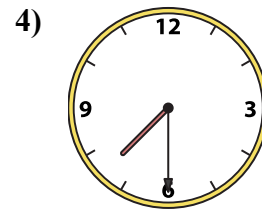
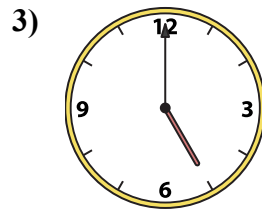
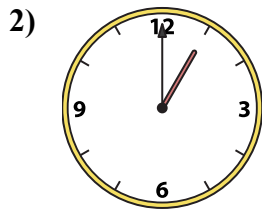
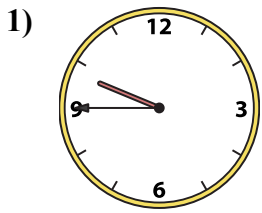
N. 9:45

O. 1:15

P. 12:45



Совместите аналоговые часы с цифровыми часами.



A. 11:45

B. 10:30

C. 1:00

D. 7:45

E. 5:00

F. 4:30

G. 4:15

H. 5:15

I. 3:15

J. 3:30

K. 9:00

L. 7:30

M. 1:30

N. 9:45

O. 1:15

P. 12:45

ОТВЕТЫ

1. N

2. C

3. E

4. L

5. I

6. G

7. M

8. O

9. B

10. H

11. P

12. K

13. D

14. F

15. J

16. A