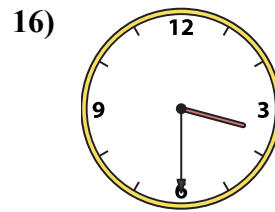
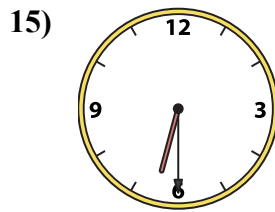
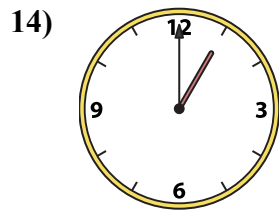
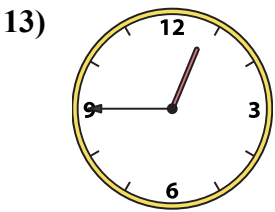
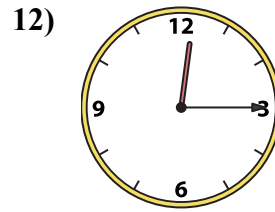
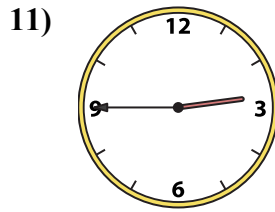
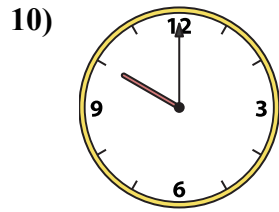
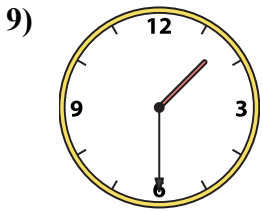
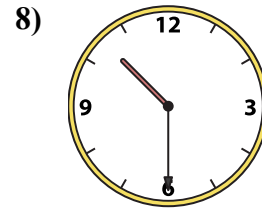
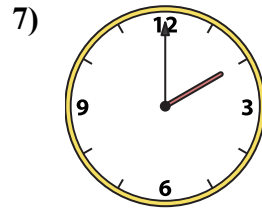
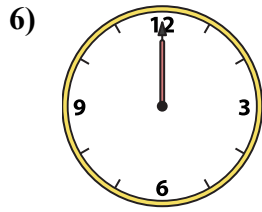
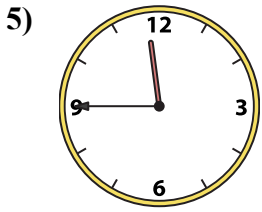
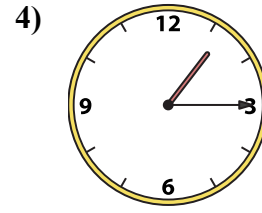
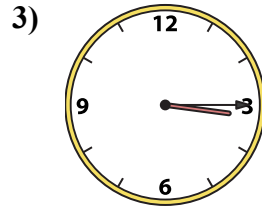
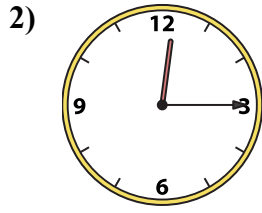
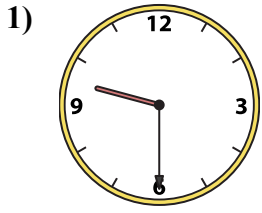




Совместите аналоговые часы с цифровыми часами.

ОТВЕТЫ



- 1. _____
- 2. _____
- 3. _____
- 4. _____
- 5. _____
- 6. _____
- 7. _____
- 8. _____
- 9. _____
- 10. _____
- 11. _____
- 12. _____
- 13. _____
- 14. _____
- 15. _____
- 16. _____

A. 10:00

B. 6:30

C. 3:30

D. 2:00

E. 1:30

F. 12:15

G. 12:45

H. 9:30

I. 1:15

J. 10:30

K. 12:15

L. 12:00

M. 3:15

N. 2:45

O. 1:00

P. 11:45



Совместите аналоговые часы с цифровыми часами.

1)

2)

3)

4)

5)

6)

7)

8)

9)

10)

11)

12)

13)

14)

15)

16)

A. B. C. D.

E. F. G. H.

I. J. K. L.

M. N. O. P.

ОТВЕТЫ

1. Н
2. К
3. М
4. И
5. Р
6. Л
7. Д
8. Ж
9. Е
10. А
11. Н
12. Ф
13. Г
14. О
15. В
16. С