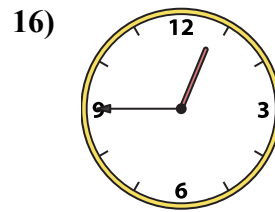
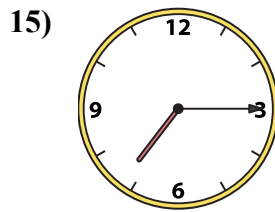
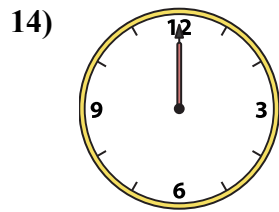
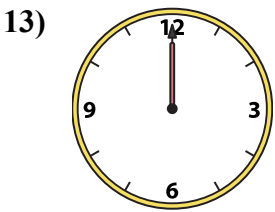
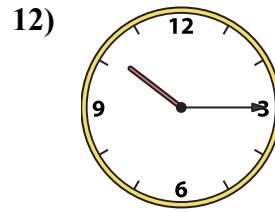
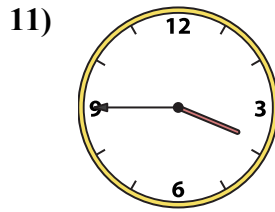
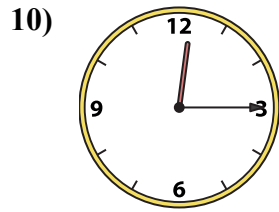
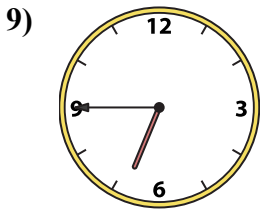
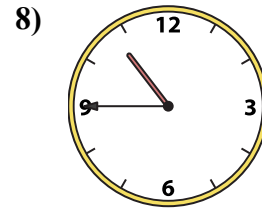
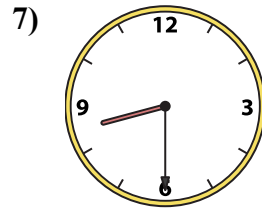
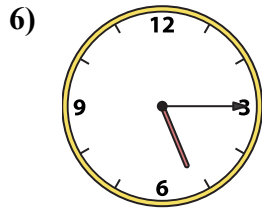
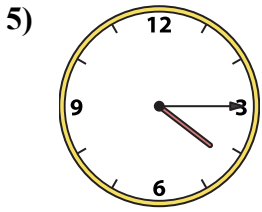
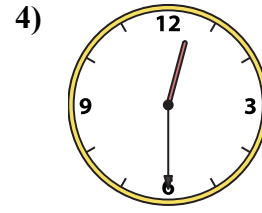
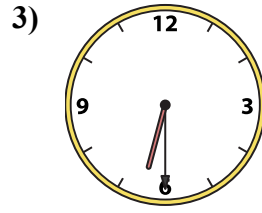
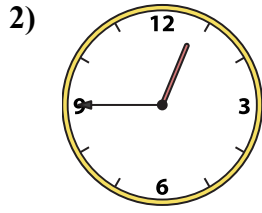
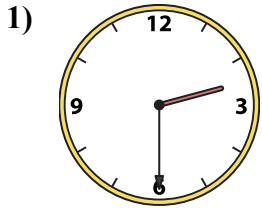




Совместите аналоговые часы с цифровыми часами.

ОТВЕТЫ



1. _____
2. _____
3. _____
4. _____
5. _____
6. _____
7. _____
8. _____
9. _____
10. _____
11. _____
12. _____
13. _____
14. _____
15. _____
16. _____

A. 12:30

B. 5:15

C. 6:30

D. 10:15

E. 12:00

F. 7:15

G. 8:30

H. 12:15

I. 12:00

J. 6:45

K. 12:45

L. 4:15

M. 2:30

N. 3:45

O. 10:45

P. 12:45



Совместите аналоговые часы с цифровыми часами.

1)

2)

3)

4)

5)

6)

7)

8)

9)

10)

11)

12)

13)

14)

15)

16)

A. B. C. D.

E. F. G. H.

I. J. K. L.

M. N. O. P.

ОТВЕТЫ

1. М
2. К
3. С
4. А
5. Л
6. В
7. Г
8. О
9. Ж
10. И
11. Н
12. Д
13. Е
14. И
15. Ф
16. Р