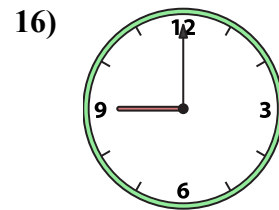
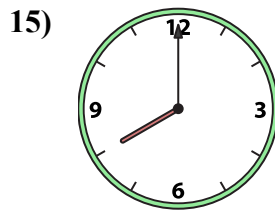
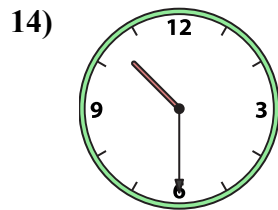
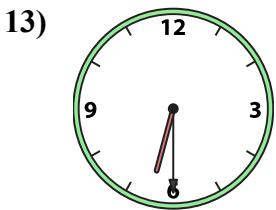
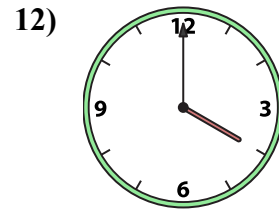
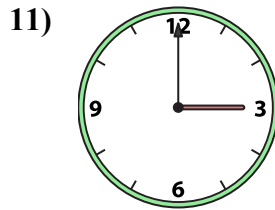
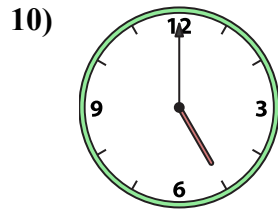
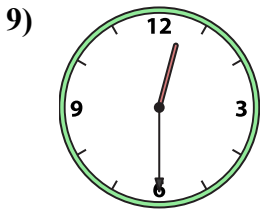
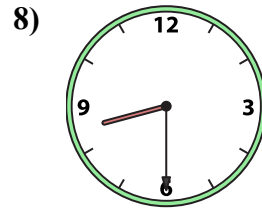
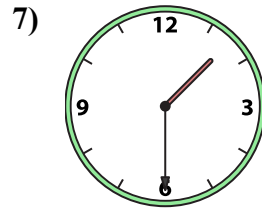
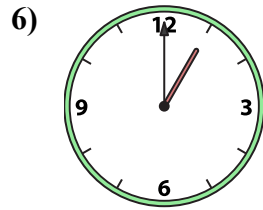
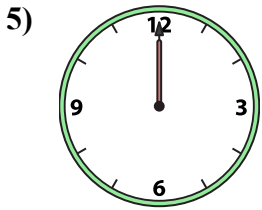
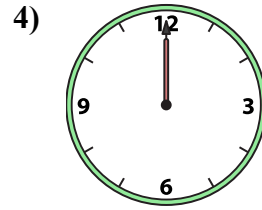
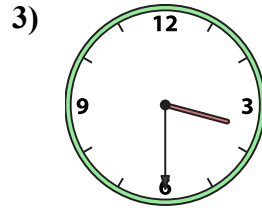
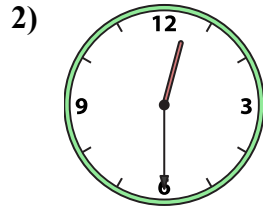





Подберите соответствующие часы к цифровым циферблатам снизу.

ОТВЕТЫ



1. _____
2. _____
3. _____
4. _____
5. _____
6. _____
7. _____
8. _____
9. _____
10. _____
11. _____
12. _____
13. _____
14. _____
15. _____
16. _____

A. 3:30

B. 9:00

C. 12:00

D. 12:00

E. 10:30

F. 12:30

G. 8:00

H. 11:00

I. 5:00

J. 1:30

K. 12:30

L. 4:00

M. 3:00

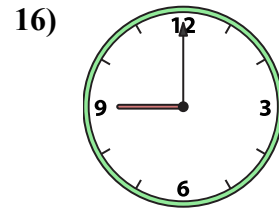
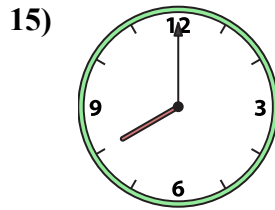
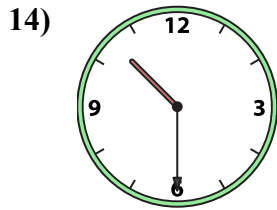
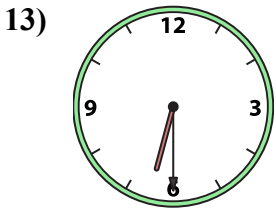
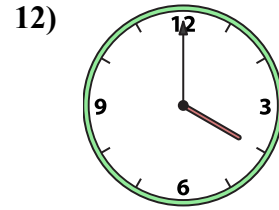
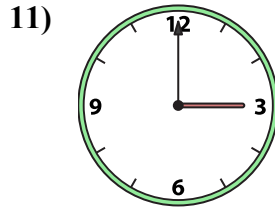
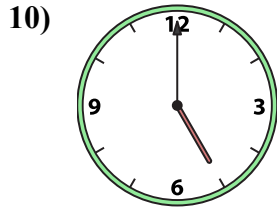
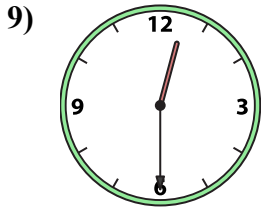
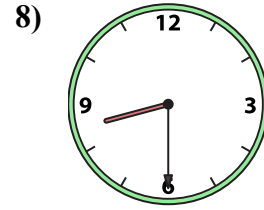
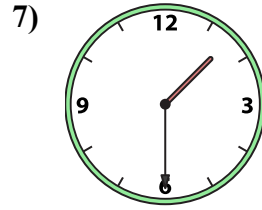
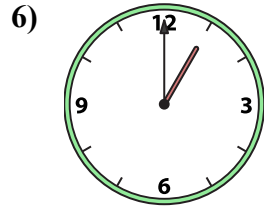
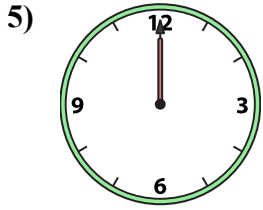
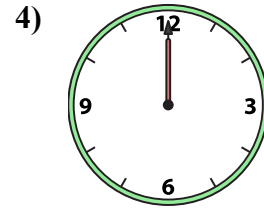
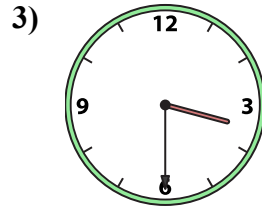
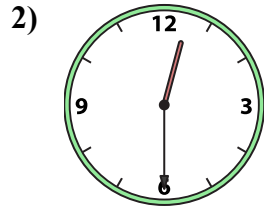

N. 6:30

O. 8:30

P. 1:00



Подберите соответствующие часы к цифровым циферблатам снизу.



A.

B.

C.

D.

E.

F.

G.

H.

I.

J.

K.

L.

M.

N.

O.

P.

ОТВЕТЫ

1. Н

2. Ф

3. А

4. С

5. Д

6. Р

7. Ж

8. О

9. К

10. И

11. М

12. Л

13. Н

14. Е

15. Г

16. В