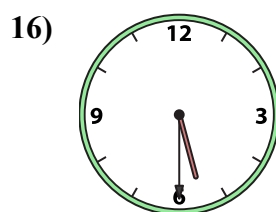
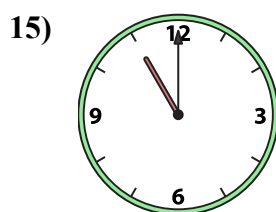
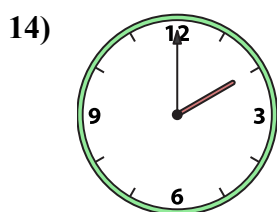
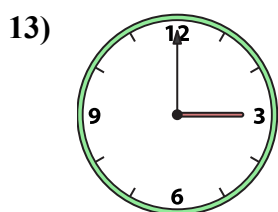
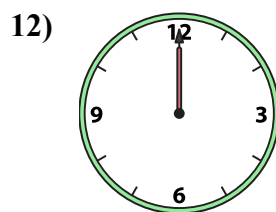
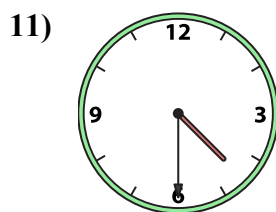
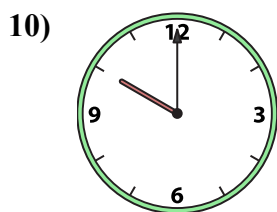
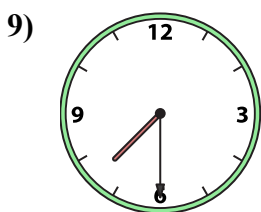
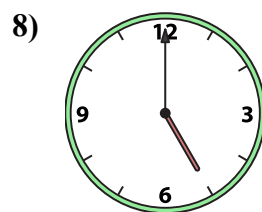

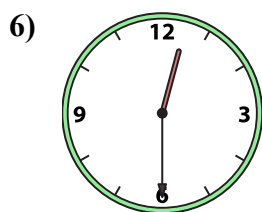
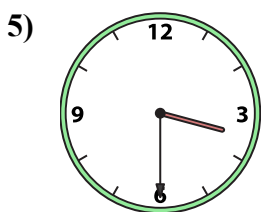
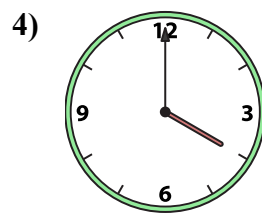
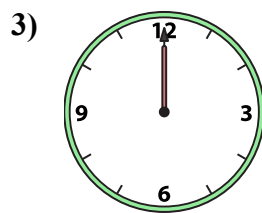
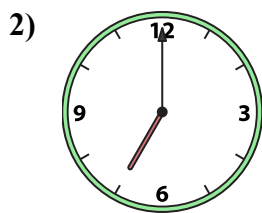
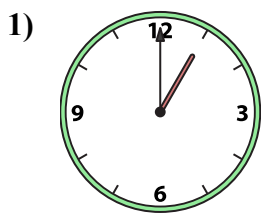




Подберите соответствующие часы к цифровым циферблатам снизу.

ОТВЕТЫ



A. 11:00

B. 1:00

C. 5:00

D. 4:30

E. 4:00

F. 3:30

G. 5:30

H. 7:30

I. 12:30

J. 2:00

K. 10:00

L. 7:00

M. 12:00

N. 1:30

O. 3:00

P. 12:00

1. _____

2. _____

3. _____

4. _____

5. _____

6. _____

7. _____

8. _____

9. _____

10. _____

11. _____

12. _____

13. _____

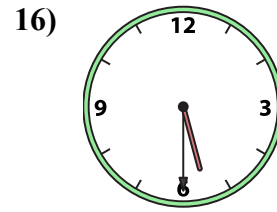
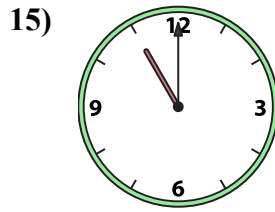
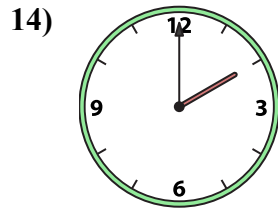
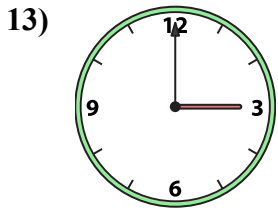
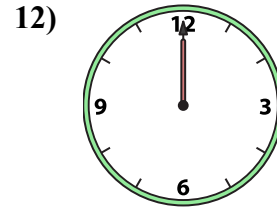
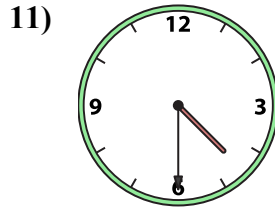
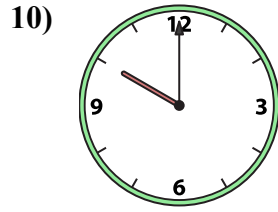
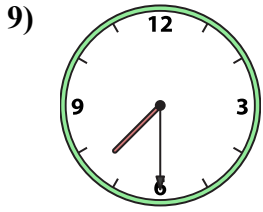
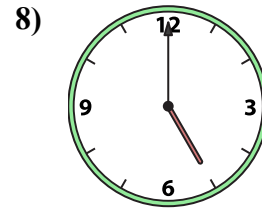
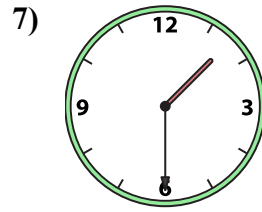
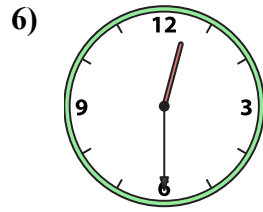
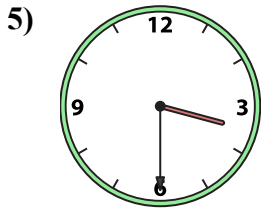
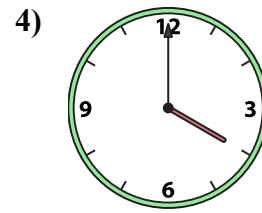
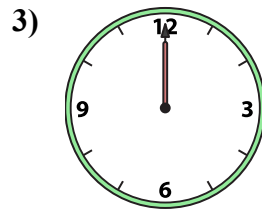
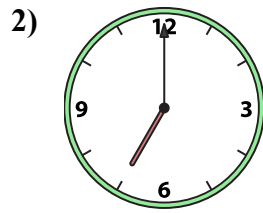
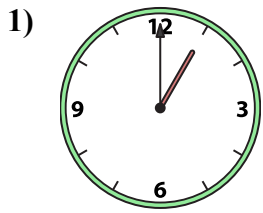
14. _____

15. _____

16. _____



Подберите соответствующие часы к цифровым циферблатам снизу.



A. 11:00

B. 1:00

C. 5:00

D. 4:30

E. 4:00

F. 3:30

G. 5:30

H. 7:30

I. 12:30

J. 2:00

K. 10:00

L. 7:00

M. 12:00

N. 1:30

O. 3:00

P. 12:00

ОТВЕТЫ

1. B

2. L

3. M

4. E

5. F

6. I

7. N

8. C

9. H

10. K

11. D

12. P

13. O

14. J

15. A

16. G