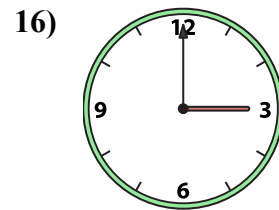
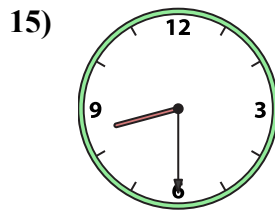
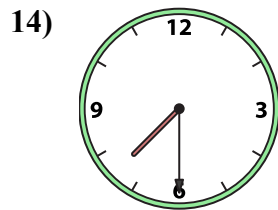
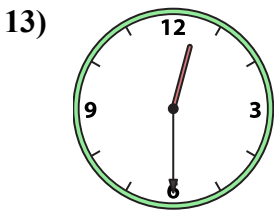
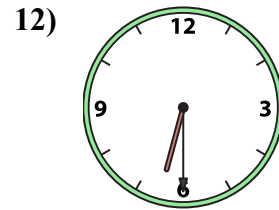
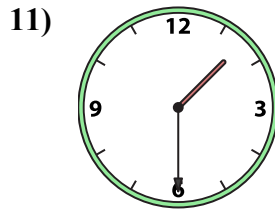
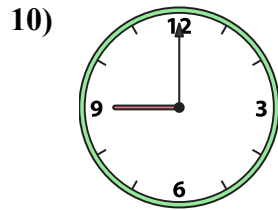
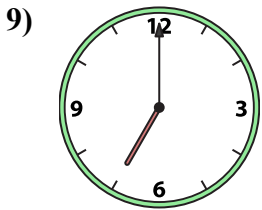
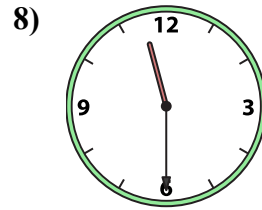
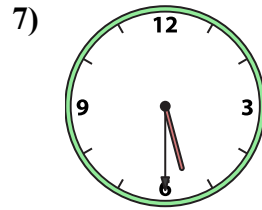
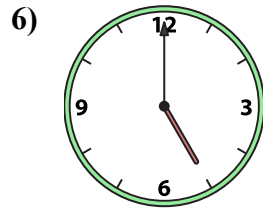
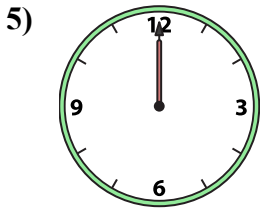
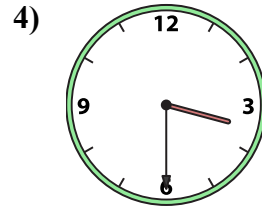
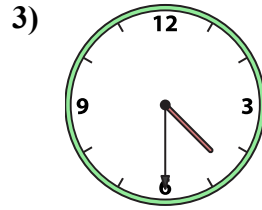
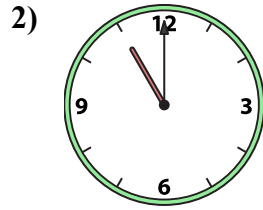
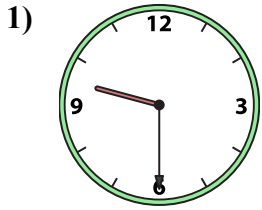




Подберите соответствующие часы к цифровым циферблатам снизу.

**ОТВЕТЫ**



1. \_\_\_\_\_
2. \_\_\_\_\_
3. \_\_\_\_\_
4. \_\_\_\_\_
5. \_\_\_\_\_
6. \_\_\_\_\_
7. \_\_\_\_\_
8. \_\_\_\_\_
9. \_\_\_\_\_
10. \_\_\_\_\_
11. \_\_\_\_\_
12. \_\_\_\_\_
13. \_\_\_\_\_
14. \_\_\_\_\_
15. \_\_\_\_\_
16. \_\_\_\_\_

A. 5:30

B. 3:00

C. 3:30

D. 12:00

E. 6:30

F. 7:30

G. 9:30

H. 4:30

I. 8:30

J. 5:00

K. 9:00

L. 11:00

M. 7:00

N. 1:30

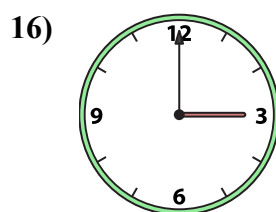
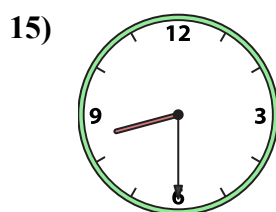
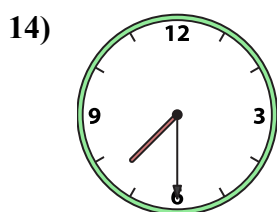
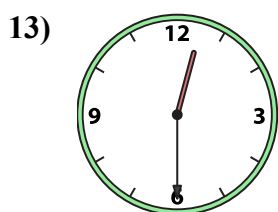
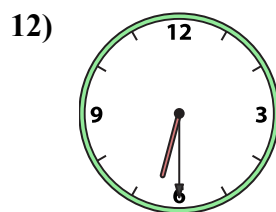
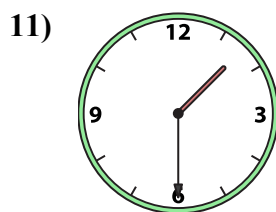
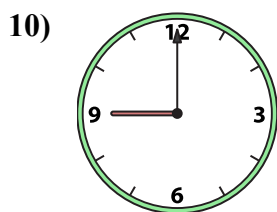
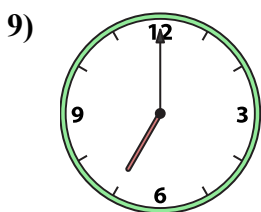
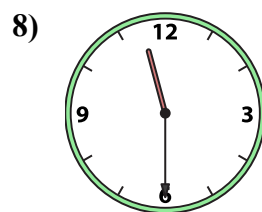
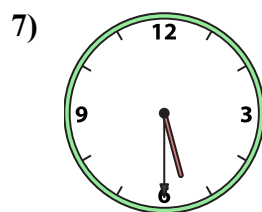
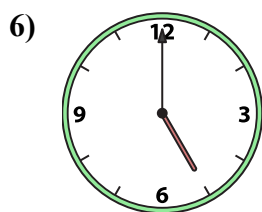
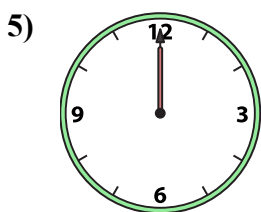
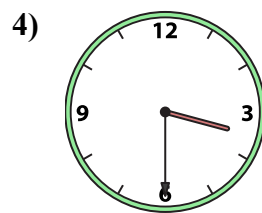
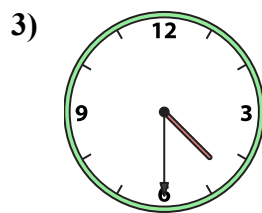
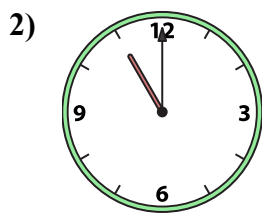
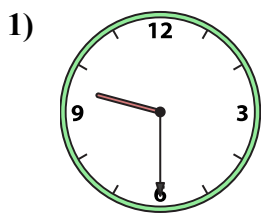
O. 12:30

P. 11:30



Подберите соответствующие часы к цифровым циферблатам снизу.

**ОТВЕТЫ**



A. 5:30

B. 3:00

C. 3:30

D. 12:00

E. 6:30

F. 7:30

G. 9:30

H. 4:30

I. 8:30

J. 5:00

K. 9:00

L. 11:00

M. 7:00

N. 1:30

O. 12:30

P. 11:30

1. G

2. L

3. H

4. C

5. D

6. J

7. A

8. P

9. M

10. K

11. N

12. E

13. O

14. F

15. I

16. B