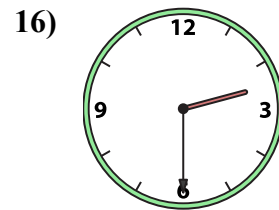
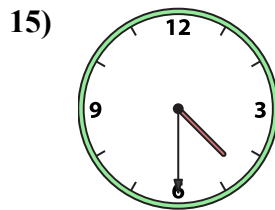
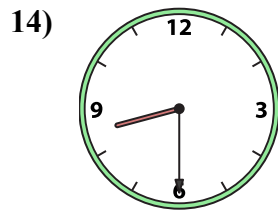
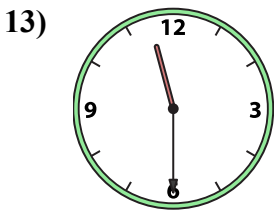
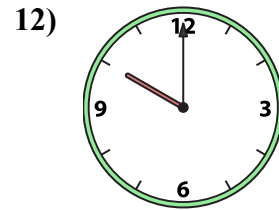
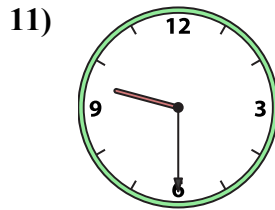
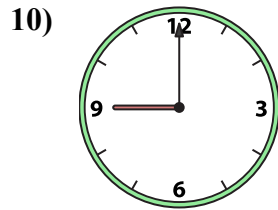
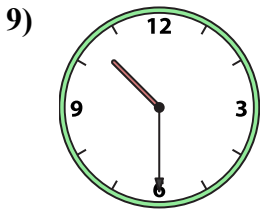
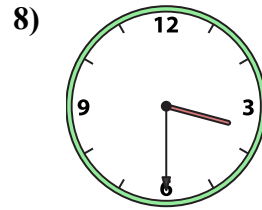
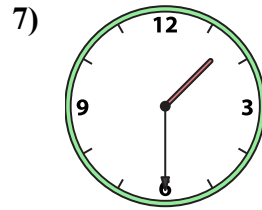
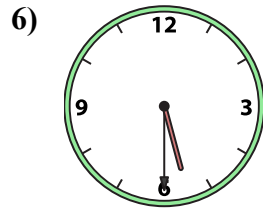
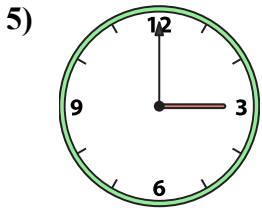
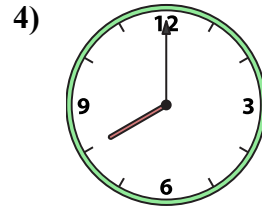
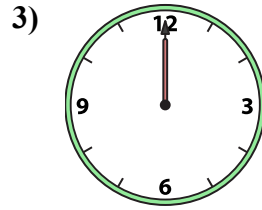
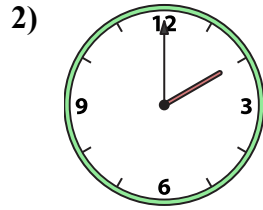
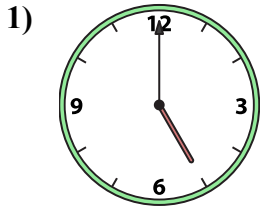




Подберите соответствующие часы к цифровым циферблатам снизу.

ОТВЕТЫ



1. _____
2. _____
3. _____
4. _____
5. _____
6. _____
7. _____
8. _____
9. _____
10. _____
11. _____
12. _____
13. _____
14. _____
15. _____
16. _____

A. 12:00

B. 8:00

C. 1:30

D. 3:00

E. 2:30

F. 4:30

G. 2:00

H. 10:30

I. 9:00

J. 10:00

K. 5:30

L. 9:30

M. 8:30

N. 5:00

O. 11:30

P. 3:30



Подберите соответствующие часы к цифровым циферблатам снизу.

1)

2)

3)

4)

5)

6)

7)

8)

9)

10)

11)

12)

13)

14)

15)

16)

A. B. C. D.

E. F. G. H.

I. J. K. L.

M. N. O. P.

ОТВЕТЫ

1. N
2. G
3. A
4. B
5. D
6. K
7. C
8. P
9. H
10. I
11. L
12. J
13. O
14. M
15. F
16. E