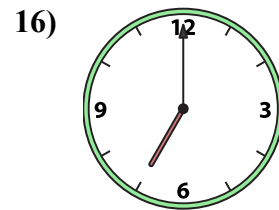
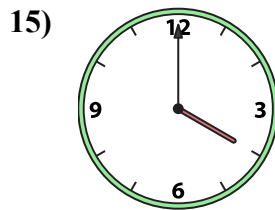
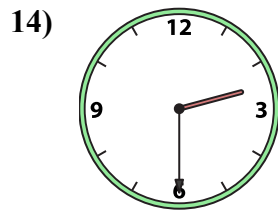
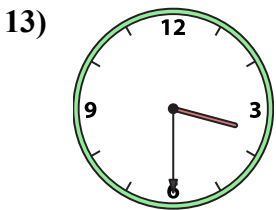
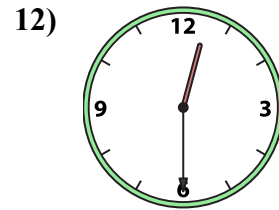
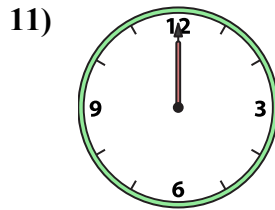
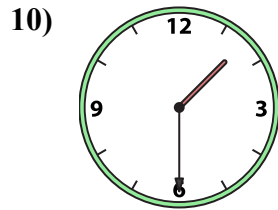
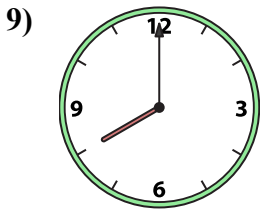
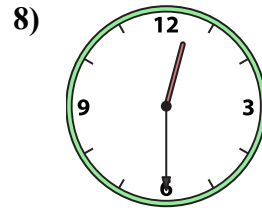
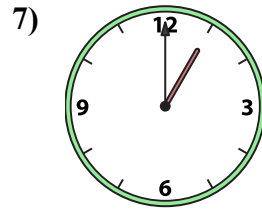
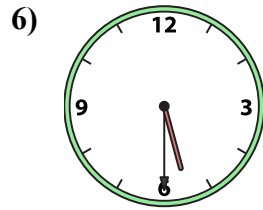
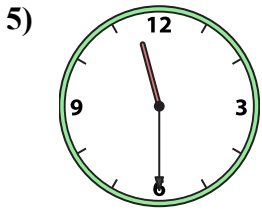
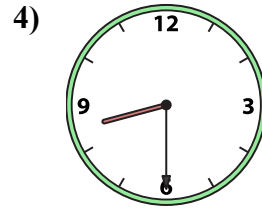
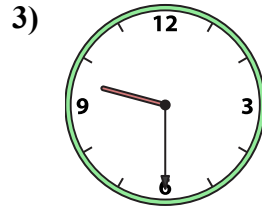
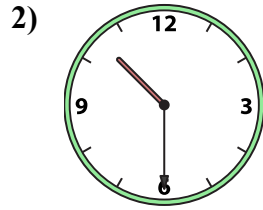
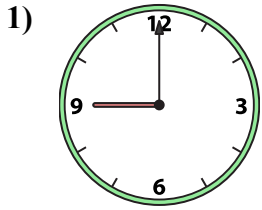




Подберите соответствующие часы к цифровым циферблатам снизу.

**ОТВЕТЫ**



1. \_\_\_\_\_
2. \_\_\_\_\_
3. \_\_\_\_\_
4. \_\_\_\_\_
5. \_\_\_\_\_
6. \_\_\_\_\_
7. \_\_\_\_\_
8. \_\_\_\_\_
9. \_\_\_\_\_
10. \_\_\_\_\_
11. \_\_\_\_\_
12. \_\_\_\_\_
13. \_\_\_\_\_
14. \_\_\_\_\_
15. \_\_\_\_\_
16. \_\_\_\_\_

A. 12:00

B. 10:30

C. 11:30

D. 8:00

E. 2:30

F. 1:00

G. 9:30

H. 8:30

I. 9:00

J. 1:30

K. 7:00

L. 12:30

M. 3:30

N. 5:30

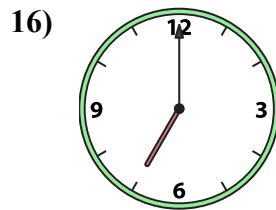
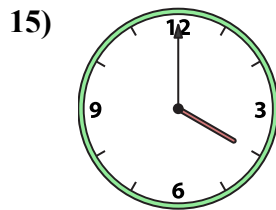
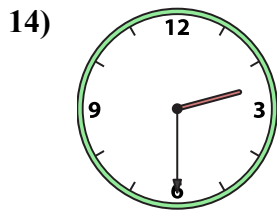
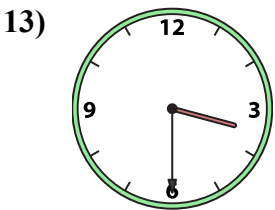
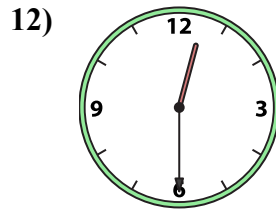
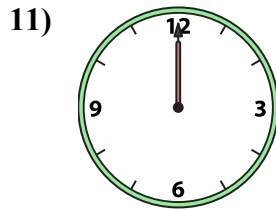
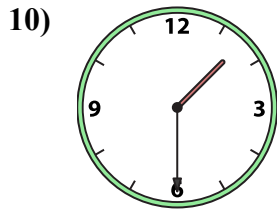
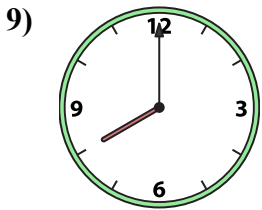
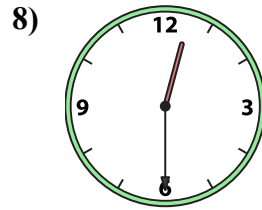
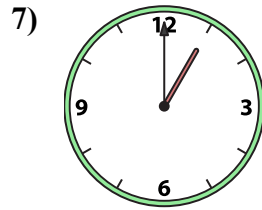
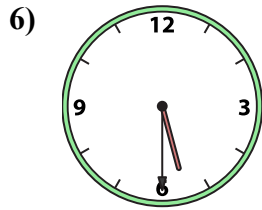
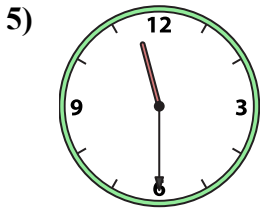
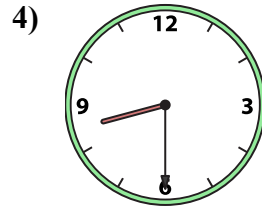
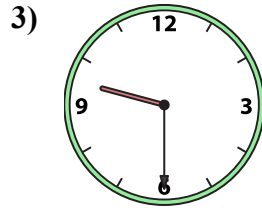
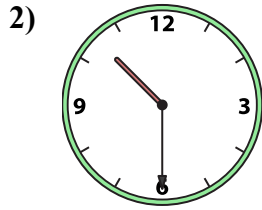
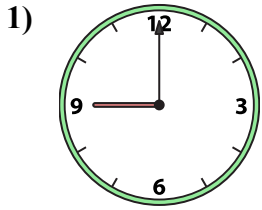
O. 4:00

P. 12:30



Подберите соответствующие часы к цифровым циферблатам снизу.

**ОТВЕТЫ**



A. 12:00

B. 10:30

C. 11:30

D. 8:00

E. 2:30

F. 1:00

G. 9:30

H. 8:30

I. 9:00

J. 1:30

K. 7:00

L. 12:30

M. 3:30

N. 5:30

O. 4:00

P. 12:30

1. I

2. B

3. G

4. H

5. C

6. N

7. F

8. L

9. D

10. J

11. A

12. P

13. M

14. E

15. O

16. K