
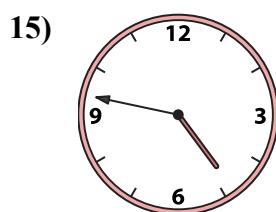
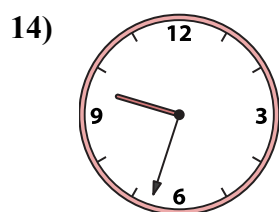
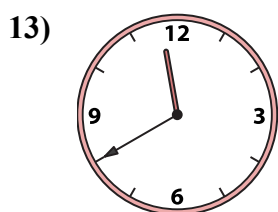
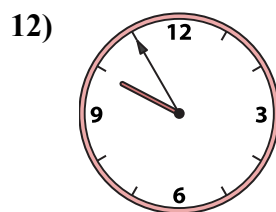
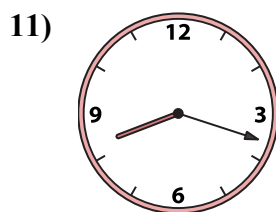
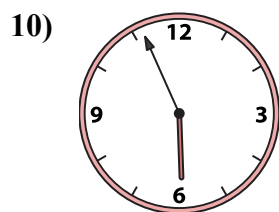

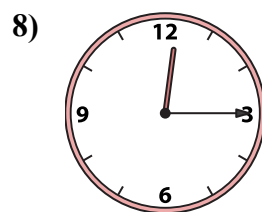

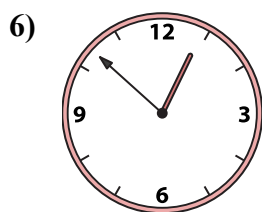

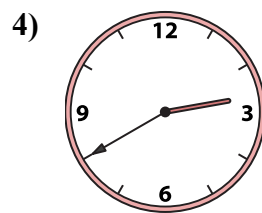
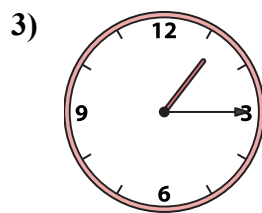
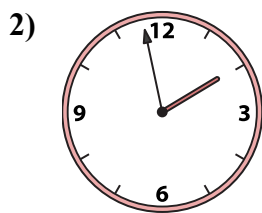
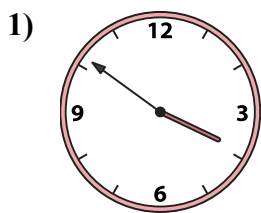




Подберите соответствующие часы к цифровым циферблатам снизу.

ОТВЕТЫ



1. _____
2. _____
3. _____
4. _____
5. _____
6. _____
7. _____
8. _____
9. _____
10. _____
11. _____
12. _____
13. _____
14. _____
15. _____
16. _____

A. 9:55

B. 5:56

C. 4:47

D. 11:40

E. 3:51

F. 1:58

G. 8:18

H. 1:15

I. 6:57

J. 8:58

K. 9:33

L. 12:52

M. 11:55


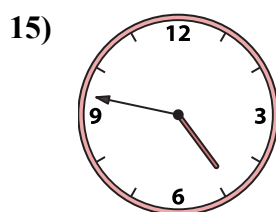
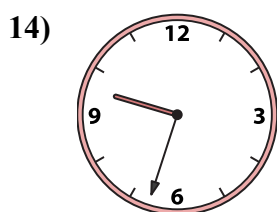
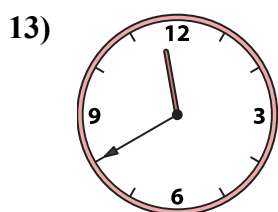
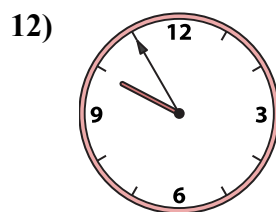
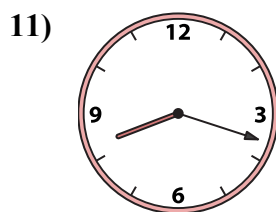
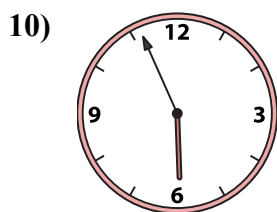
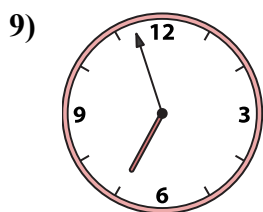
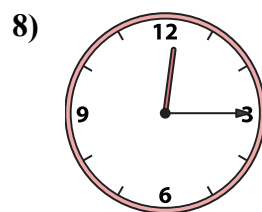

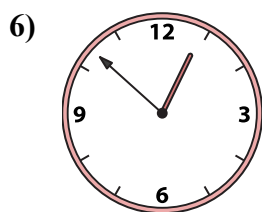
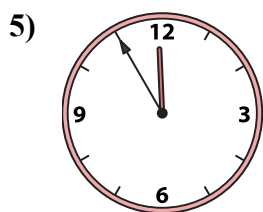
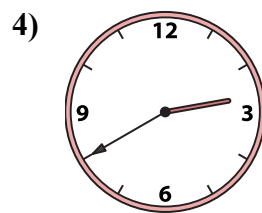
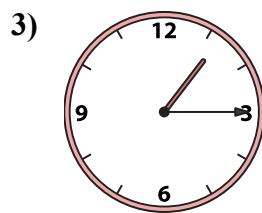
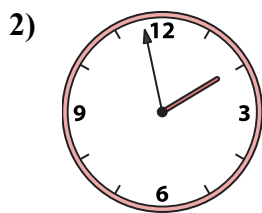
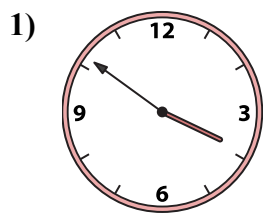
N. 12:15

O. 12:36

P. 2:40



Подберите соответствующие часы к цифровым циферблатам снизу.



A. 9:55

B. 5:56

C. 4:47

D. 11:40

E. 3:51

F. 1:58

G. 8:18

H. 1:15

I. 6:57

J. 8:58

K. 9:33

L. 12:52

M. 11:55

N. 12:15

O. 12:36

P. 2:40

ОТВЕТЫ

1. E

2. F

3. H

4. P

5. M

6. L

7. O

8. N

9. I

10. B

11. G

12. A

13. D

14. K

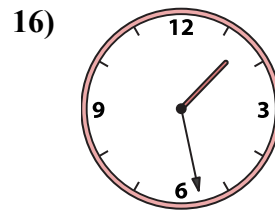
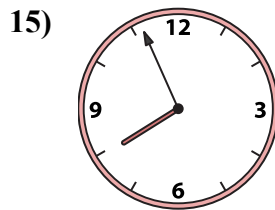
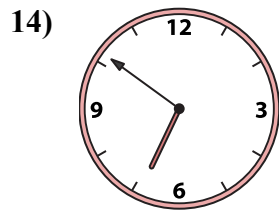
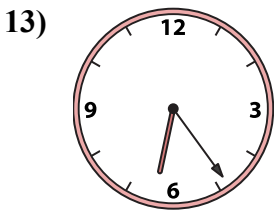
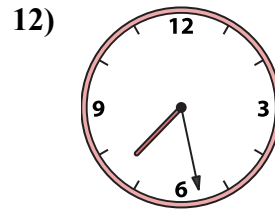
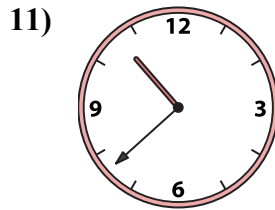
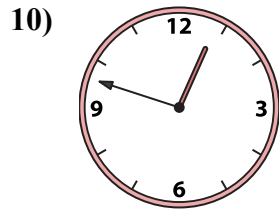
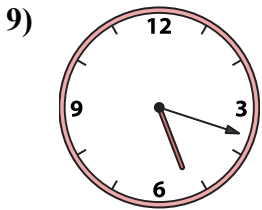
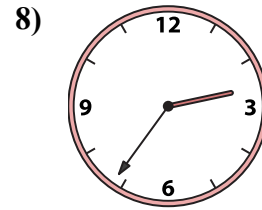
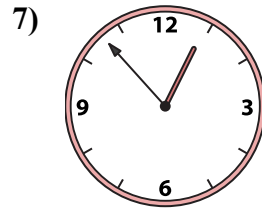
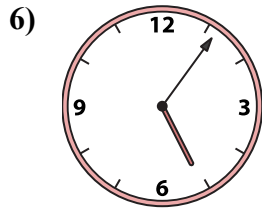
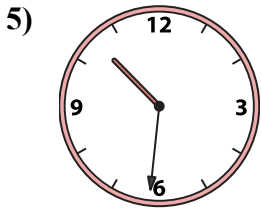
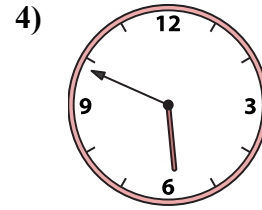
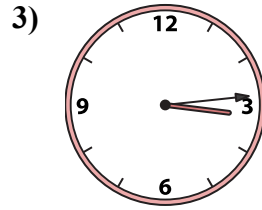
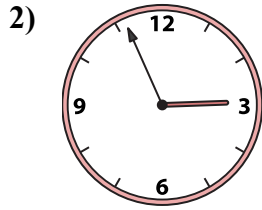
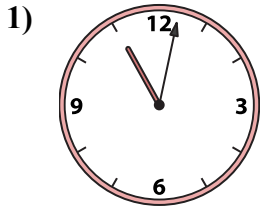
15. C

16. J



Подберите соответствующие часы к цифровым циферблатам снизу.

ОТВЕТЫ



1. _____
2. _____
3. _____
4. _____
5. _____
6. _____
7. _____
8. _____
9. _____
10. _____
11. _____
12. _____
13. _____
14. _____
15. _____
16. _____

A. 2:56

B. 10:31

C. 7:56

D. 6:24

E. 3:14

F. 5:49

G. 2:36

H. 1:28

I. 5:06

J. 10:38

K. 7:28

L. 12:53

M. 5:18


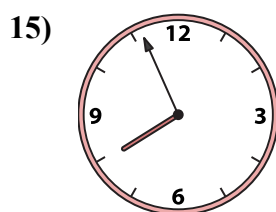
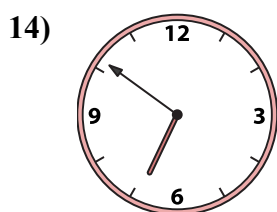

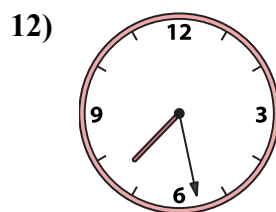
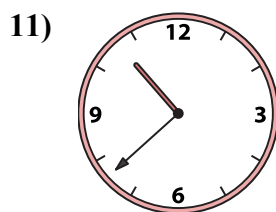
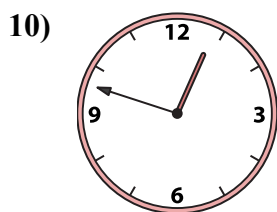
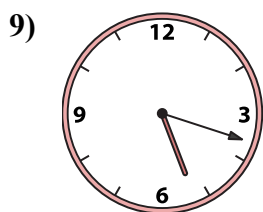
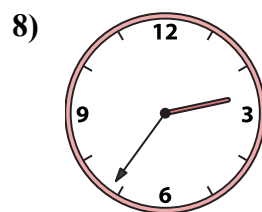

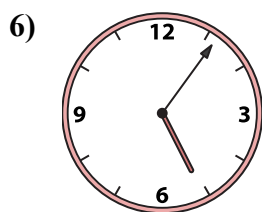

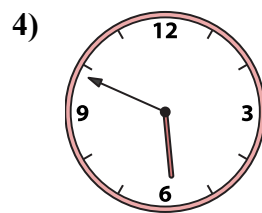
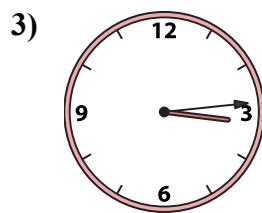
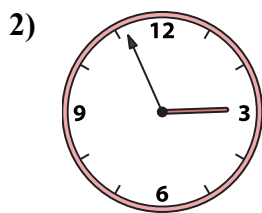
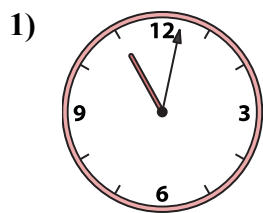
N. 12:48

O. 11:02

P. 6:51



Подберите соответствующие часы к цифровым циферблатам снизу.



A. 2:56

B. 10:31

C. 7:56

D. 6:24

E. 3:14

F. 5:49

G. 2:36

H. 1:28

I. 5:06

J. 10:38

K. 7:28

L. 12:53

M. 5:18

N. 12:48

O. 11:02

P. 6:51

ОТВЕТЫ

1. O

2. A

3. E

4. F

5. B

6. I

7. L

8. G

9. M

10. N

11. J

12. K

13. D

14. P

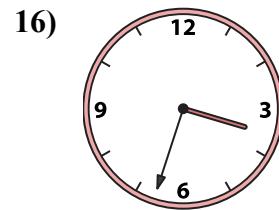
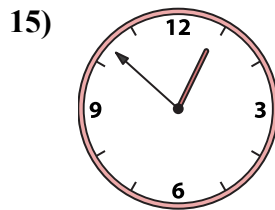
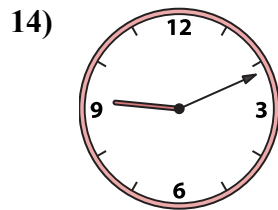
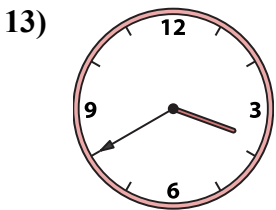
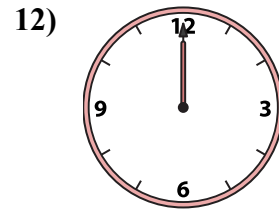
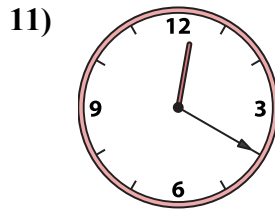
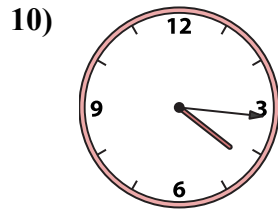
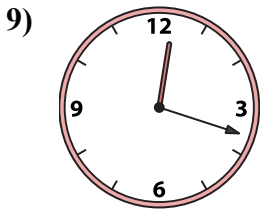
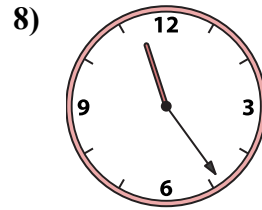
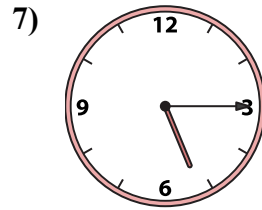
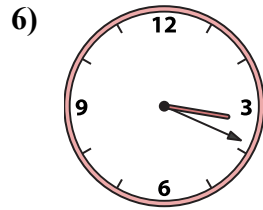
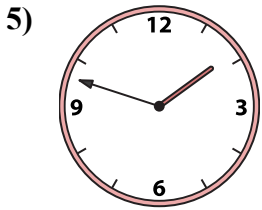
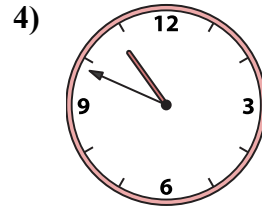
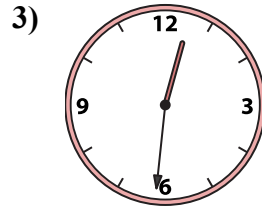
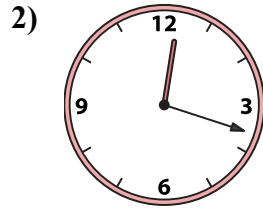
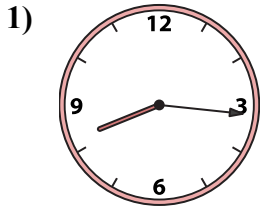
15. C

16. H



Подберите соответствующие часы к цифровым циферблатам снизу.

ОТВЕТЫ



1. _____
2. _____
3. _____
4. _____
5. _____
6. _____
7. _____
8. _____
9. _____
10. _____
11. _____
12. _____
13. _____
14. _____
15. _____
16. _____

A. 3:40

B. 9:11

C. 12:20

D. 12:18

E. 12:00

F. 12:18

G. 10:49

H. 12:52

I. 8:16

J. 11:24

K. 5:15

L. 1:48

M. 12:31

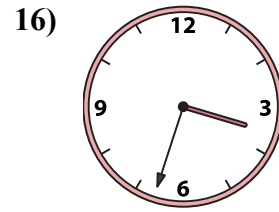
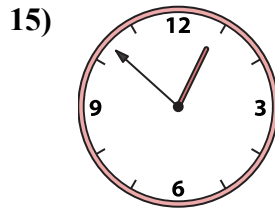
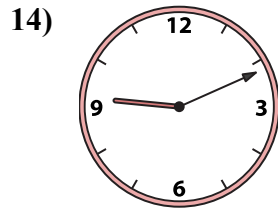
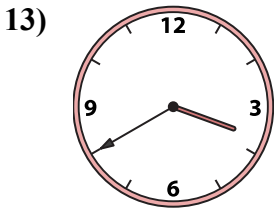
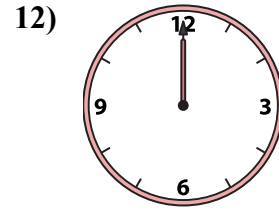
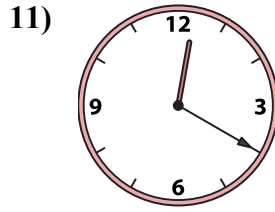
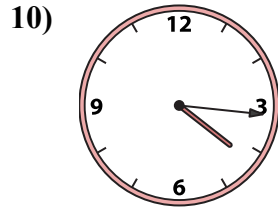
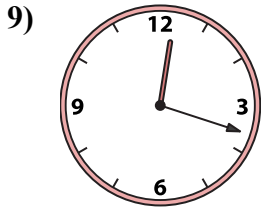
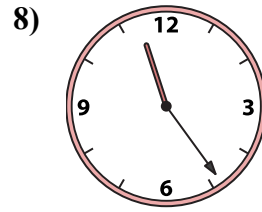
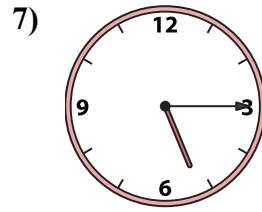
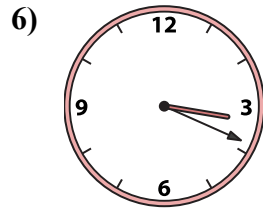
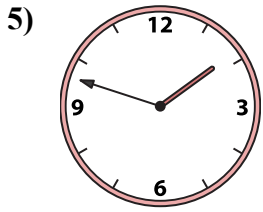
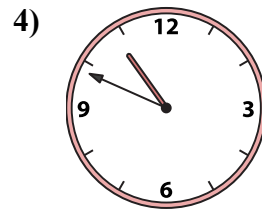
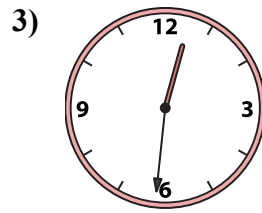
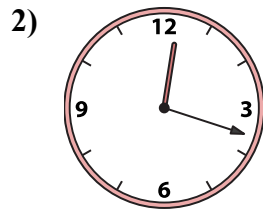
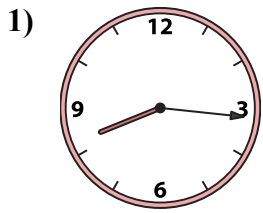
N. 4:16

O. 3:33

P. 3:19



Подберите соответствующие часы к цифровым циферблатам снизу.



A. 3:40

B. 9:11

C. 12:20

D. 12:18

E. 12:00

F. 12:18

G. 10:49

H. 12:52

I. 8:16

J. 11:24

K. 5:15

L. 1:48

M. 12:31

N. 4:16

O. 3:33

P. 3:19

ОТВЕТЫ

1. I

2. D

3. M

4. G

5. L

6. P

7. K

8. J

9. F

10. N

11. C

12. E

13. A

14. B

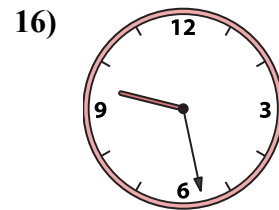
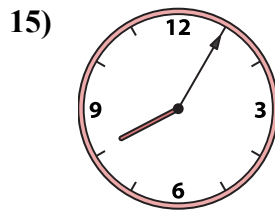
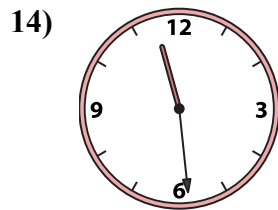
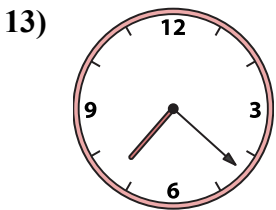
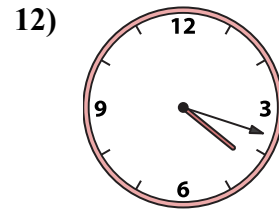
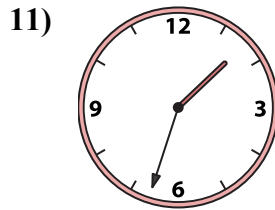
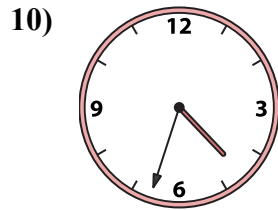
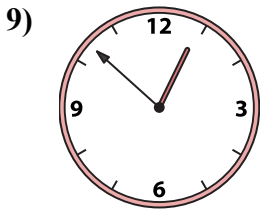
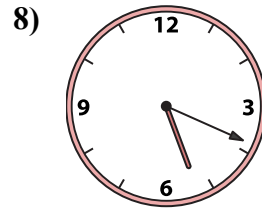
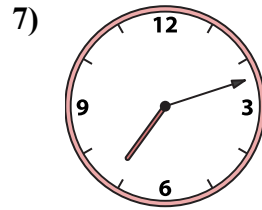
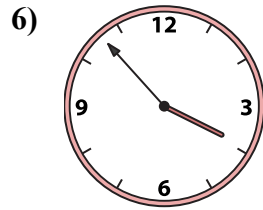
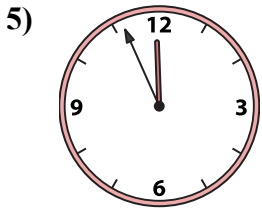
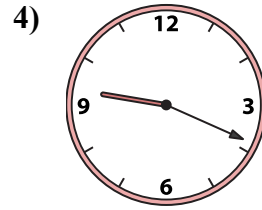
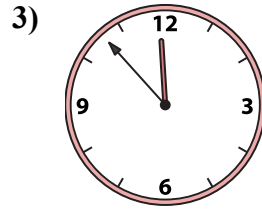
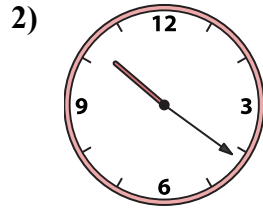
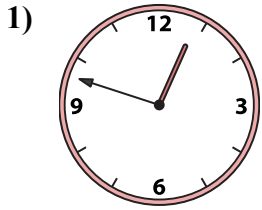
15. H

16. O



Подберите соответствующие часы к цифровым циферблатам снизу.

ОТВЕТЫ



A.

B.

C.

D.

E.

F.

G.

H.

I.

J.

K.

L.

M.

N.


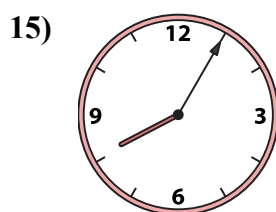
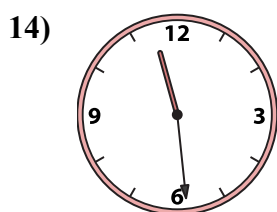
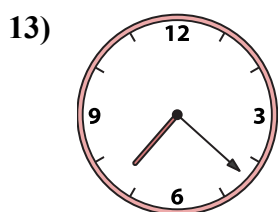
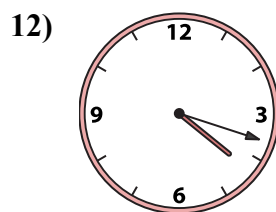
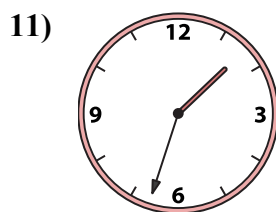
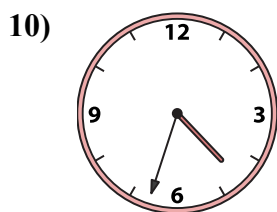
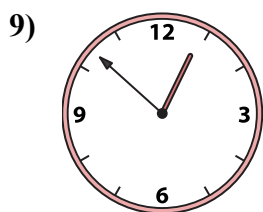
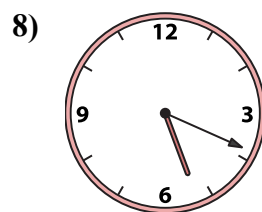
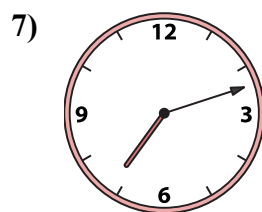
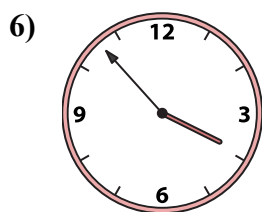

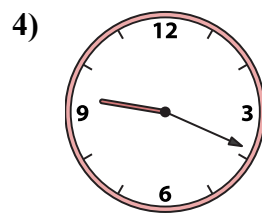
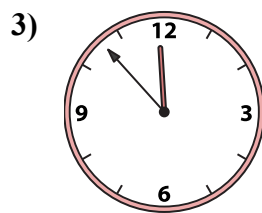
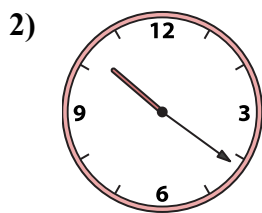
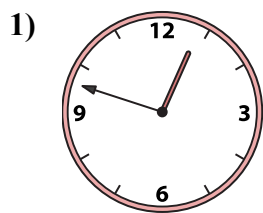
O.

P.

1. _____
2. _____
3. _____
4. _____
5. _____
6. _____
7. _____
8. _____
9. _____
10. _____
11. _____
12. _____
13. _____
14. _____
15. _____
16. _____



Подберите соответствующие часы к цифровым циферблатам снизу.



ОТВЕТЫ

1. E

2. L

3. C

4. M

5. A

6. D

7. H

8. J

9. N

10. I

11. F

12. O

13. K

14. G

15. P

16. B

A. 11:56

B. 9:28

C. 11:53

D. 3:53

E. 12:48

F. 1:33

G. 11:29

H. 7:12

I. 4:33

J. 5:19

K. 7:22

L. 10:21

M. 9:19

N. 12:52

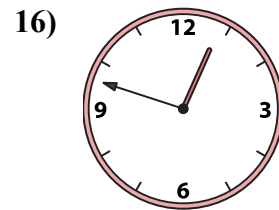
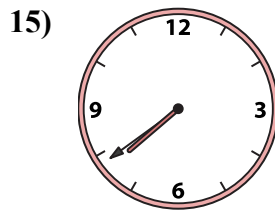
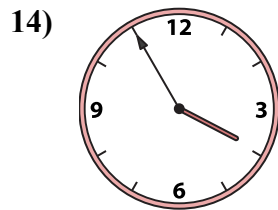
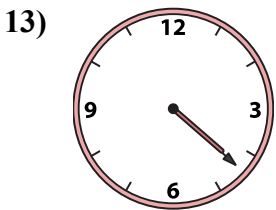
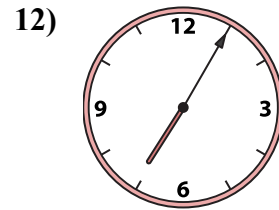
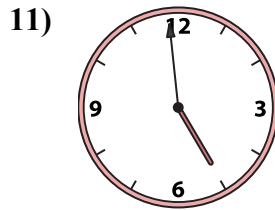
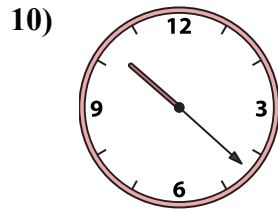
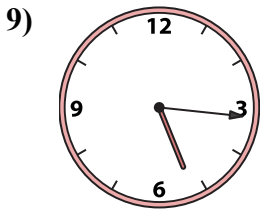
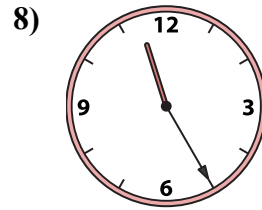
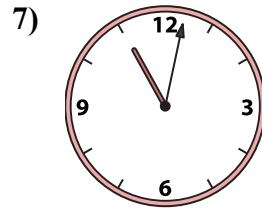
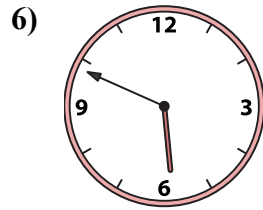
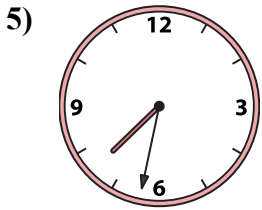
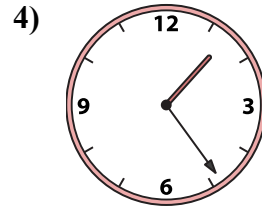
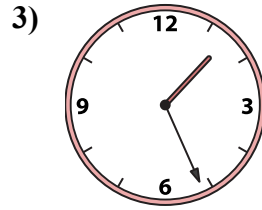
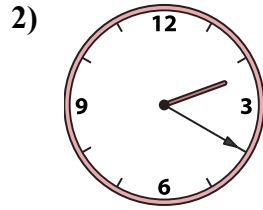

O. 4:18

P. 8:05



Подберите соответствующие часы к цифровым циферблатам снизу.

ОТВЕТЫ



A. 11:02

B. 1:24

C. 11:25

D. 5:16

E. 4:59

F. 4:22

G. 3:55

H. 5:49

I. 7:32

J. 1:01

K. 1:26

L. 12:48

M. 7:39

N. 2:20



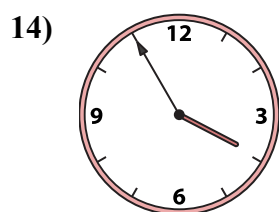
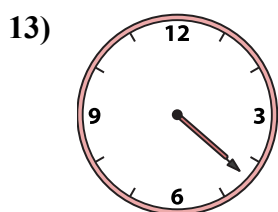
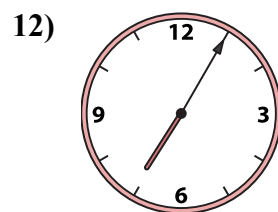
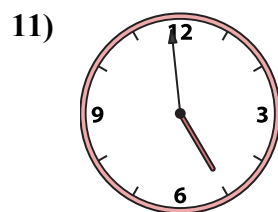
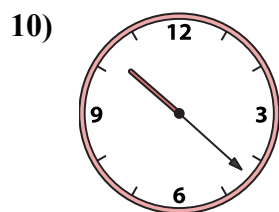
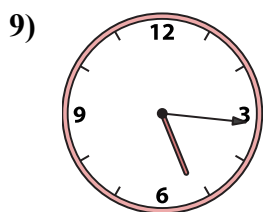
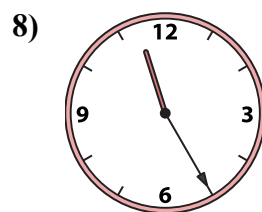

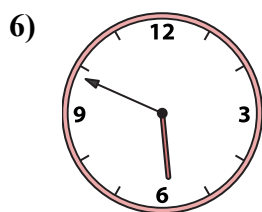
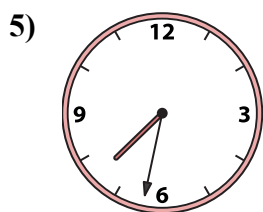
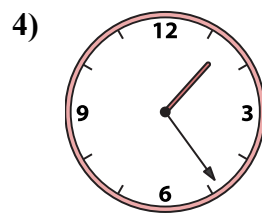
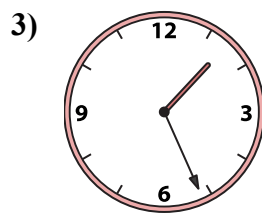
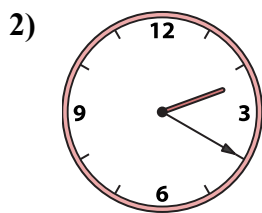
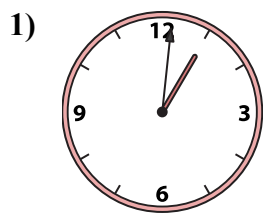
O. 10:22

P. 7:05

1. _____
2. _____
3. _____
4. _____
5. _____
6. _____
7. _____
8. _____
9. _____
10. _____
11. _____
12. _____
13. _____
14. _____
15. _____
16. _____



Подберите соответствующие часы к цифровым циферблатам снизу.



A. 11:02

B. 1:24

C. 11:25

D. 5:16

E. 4:59

F. 4:22

G. 3:55

H. 5:49

I. 7:32

J. 1:01

K. 1:26

L. 12:48

M. 7:39

N. 2:20

O. 10:22

P. 7:05

ОТВЕТЫ

1. J

2. N

3. K

4. B

5. I

6. H

7. A

8. C

9. D

10. O

11. E

12. P

13. F

14. G

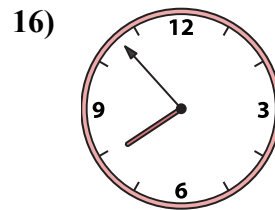
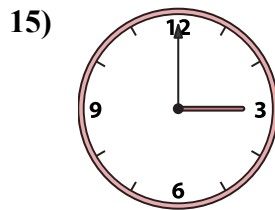
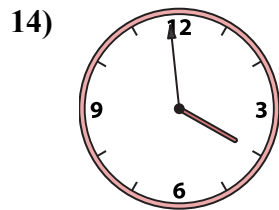
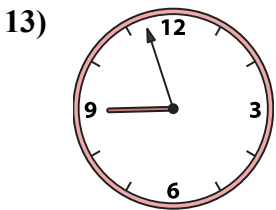
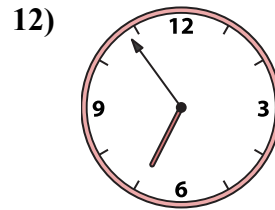
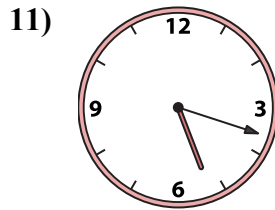
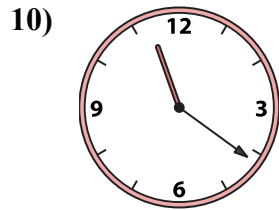
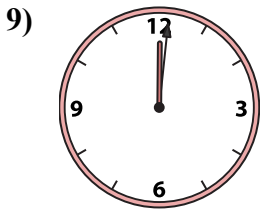
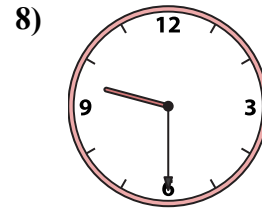
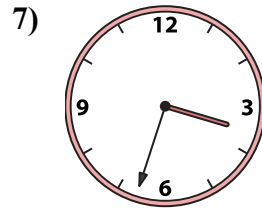
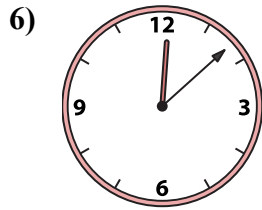
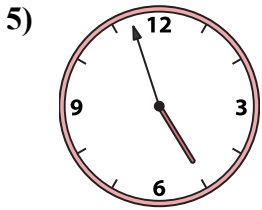
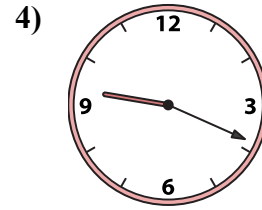
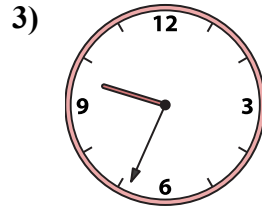
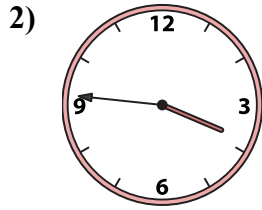
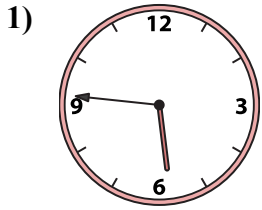
15. M

16. L



Подберите соответствующие часы к цифровым циферблатам снизу.

ОТВЕТЫ



1. _____
2. _____
3. _____
4. _____
5. _____
6. _____
7. _____
8. _____
9. _____
10. _____
11. _____
12. _____
13. _____
14. _____
15. _____
16. _____

A. 5:46

B. 3:00

C. 3:46

D. 12:08

E. 3:33

F. 6:54

G. 7:53

H. 12:01

I. 9:30

J. 3:59

K. 4:57

L. 8:57

M. 5:18


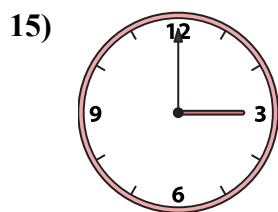
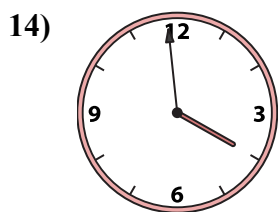
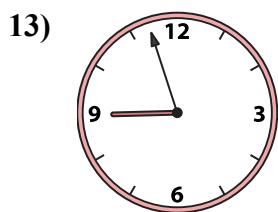
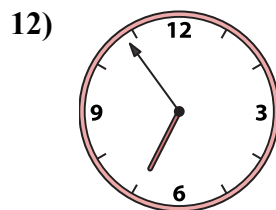
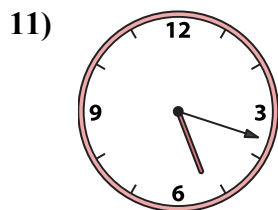
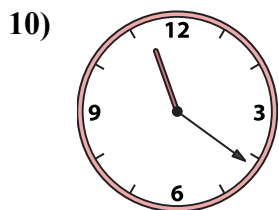
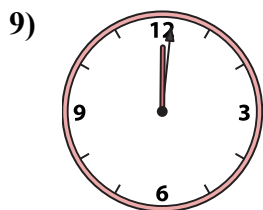
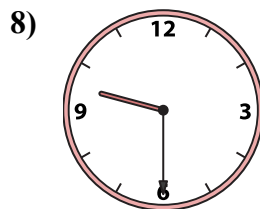
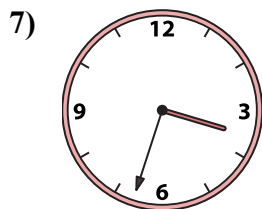

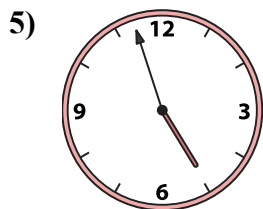
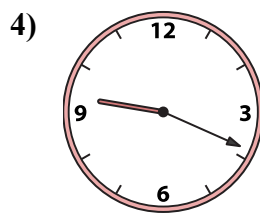
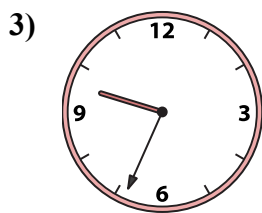
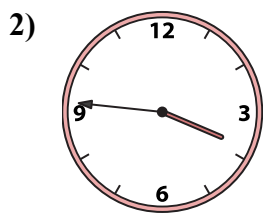
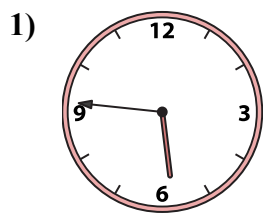
N. 9:34

O. 9:19

P. 11:21



Подберите соответствующие часы к цифровым циферблатам снизу.



ОТВЕТЫ

1. A

2. C

3. N

4. O

5. K

6. D

7. E

8. I

9. H

10. P

11. M

12. F

13. L

14. J

15. B

16. G

A. 5:46

B. 3:00

C. 3:46

D. 12:08

E. 3:33

F. 6:54

G. 7:53

H. 12:01

I. 9:30

J. 3:59

K. 4:57

L. 8:57

M. 5:18

N. 9:34

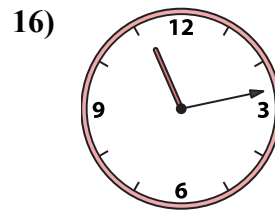
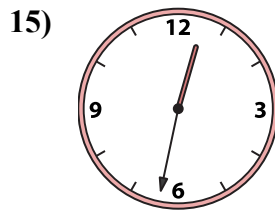
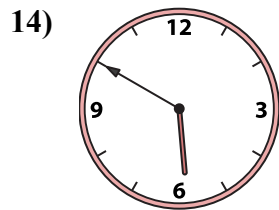
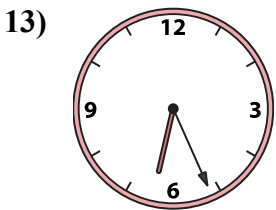
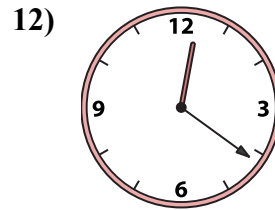
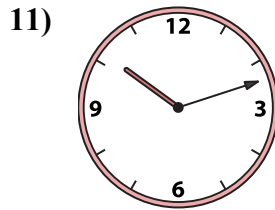
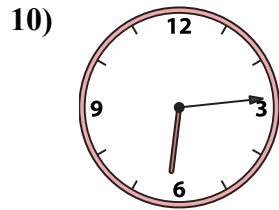
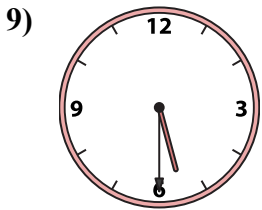
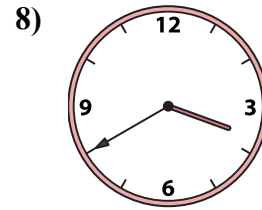
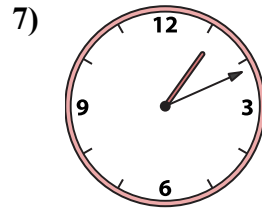

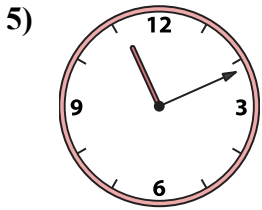
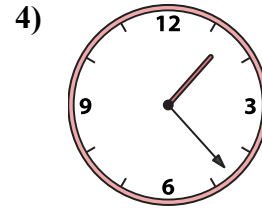
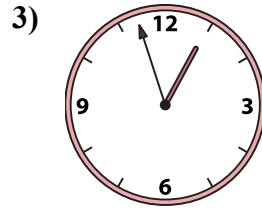
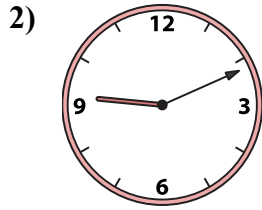
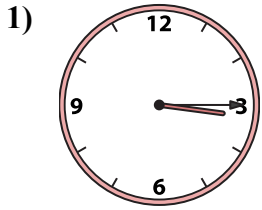
O. 9:19

P. 11:21



Подберите соответствующие часы к цифровым циферблатам снизу.

ОТВЕТЫ



1. _____
2. _____
3. _____
4. _____
5. _____
6. _____
7. _____
8. _____
9. _____
10. _____
11. _____
12. _____
13. _____
14. _____
15. _____
16. _____

A. 10:12

B. 3:40

C. 1:23

D. 12:32

E. 12:21

F. 3:15

G. 1:11

H. 6:14

I. 5:50

J. 2:02

K. 5:30

L. 6:26

M. 12:57

N. 11:11

O. 11:13

P. 9:11



Подберите соответствующие часы к цифровым циферблатам снизу.

ОТВЕТЫ

1)

2)

3)

4)

5)

6)

7)

8)

9)

10)

11)

12)

13)

14)

15)

16)

1. **F**
2. **P**
3. **M**
4. **C**
5. **N**
6. **J**
7. **G**
8. **B**
9. **K**
10. **H**
11. **A**
12. **E**
13. **L**
14. **I**
15. **D**
16. **O**

A. 10:12 B. 3:40 C. 1:23 D. 12:32

E. 12:21 F. 3:15 G. 1:11 H. 6:14

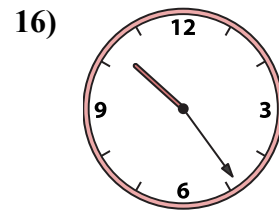
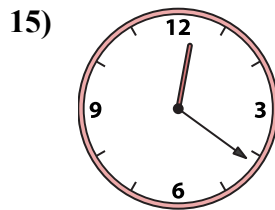
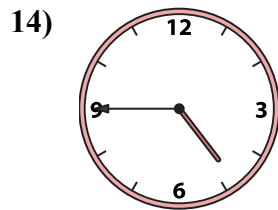
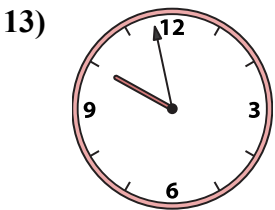
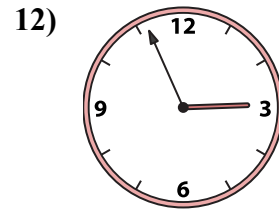
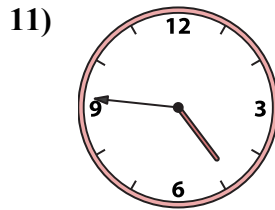
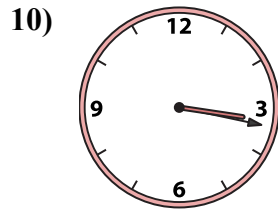
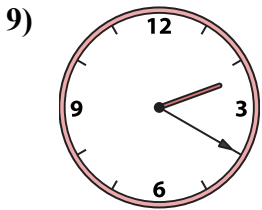
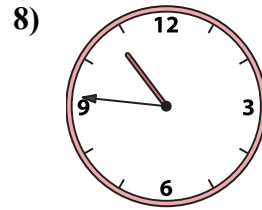
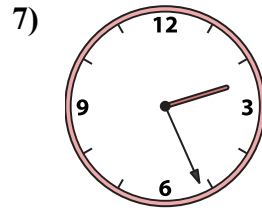
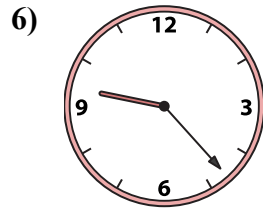
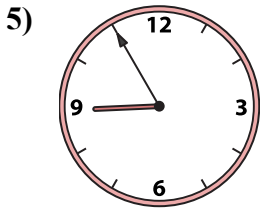
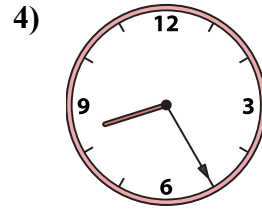
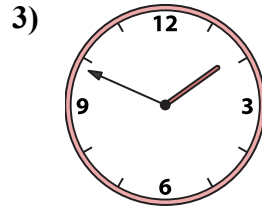
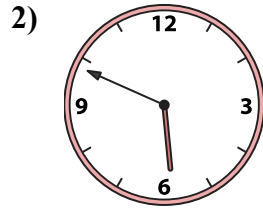
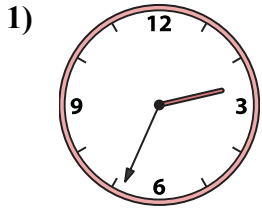
I. 5:50 J. 2:02 K. 5:30 L. 6:26

M. 12:57 N. 11:11 O. 11:13 P. 9:11



Подберите соответствующие часы к цифровым циферблатам снизу.

ОТВЕТЫ



A.

B.

C.

D.

E.

F.

G.

H.

I.

J.

K.

L.

M.

N.

O.

P.

1. _____

2. _____

3. _____

4. _____

5. _____

6. _____

7. _____

8. _____

9. _____

10. _____

11. _____

12. _____

13. _____


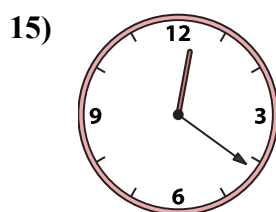
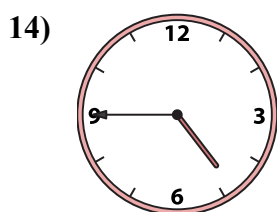

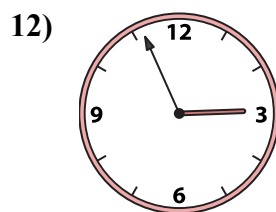
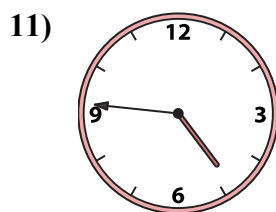
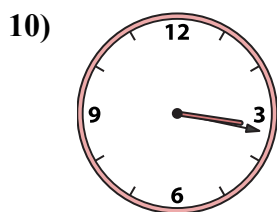
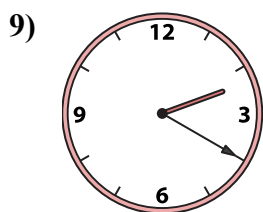


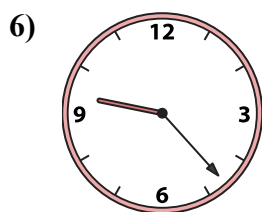
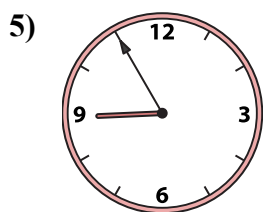
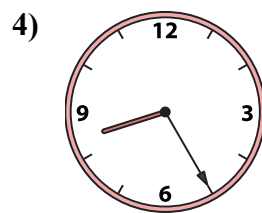
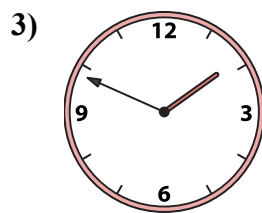
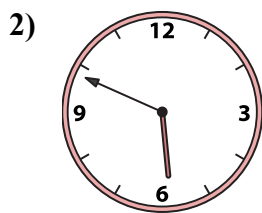
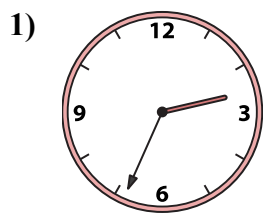
14. _____

15. _____

16. _____



Подберите соответствующие часы к цифровым циферблатам снизу.



ОТВЕТЫ

1. N

2. M

3. C

4. B

5. P

6. K

7. H

8. J

9. G

10. D

11. I

12. E

13. O

14. F

15. A

16. L

A. 12:21

B. 8:25

C. 1:49

D. 3:17

E. 2:56

F. 4:45

G. 2:20

H. 2:26

I. 4:46

J. 10:46

K. 9:23

L. 10:24

M. 5:49

N. 2:34



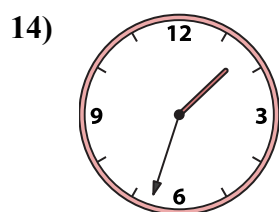
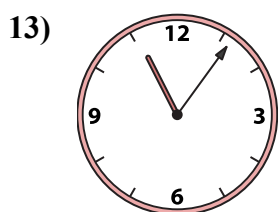
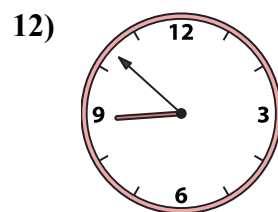
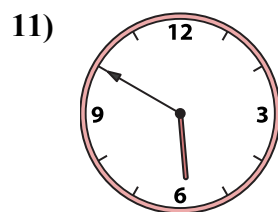
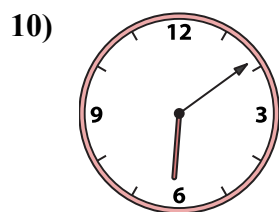


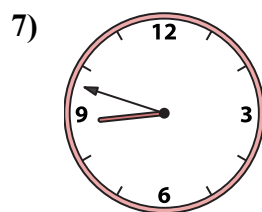
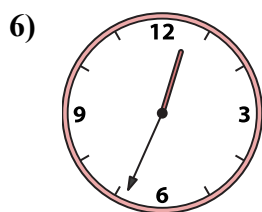
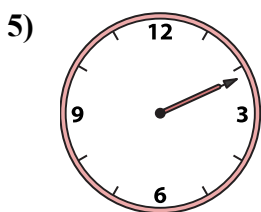
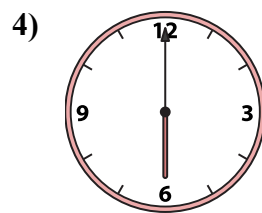
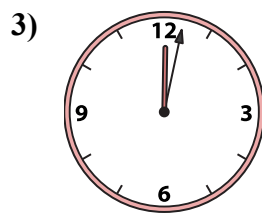


O. 9:58

P. 8:55



Подберите соответствующие часы к цифровым циферблатам снизу.

ОТВЕТЫ



1. _____
2. _____
3. _____
4. _____
5. _____
6. _____
7. _____
8. _____
9. _____
10. _____
11. _____
12. _____
13. _____
14. _____
15. _____
16. _____

A. 6:09

B. 1:33

C. 6:00

D. 6:36

E. 12:02

F. 2:11

G. 12:34

H. 10:51

I. 1:07

J. 8:48

K. 8:52

L. 5:50

M. 6:26

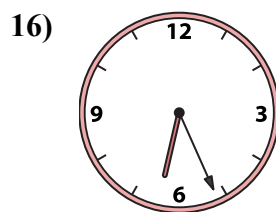
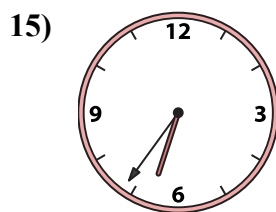

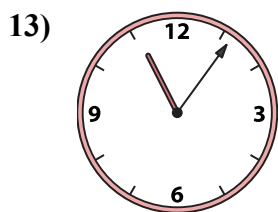
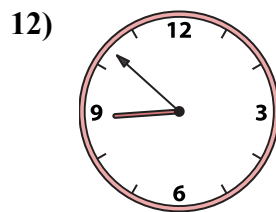
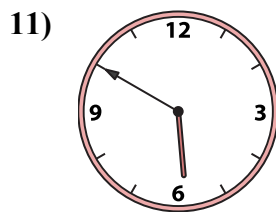
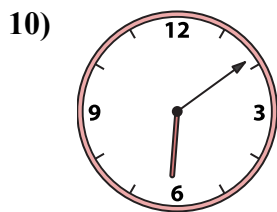


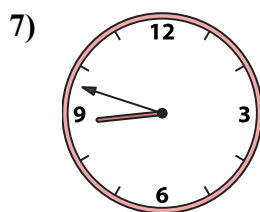
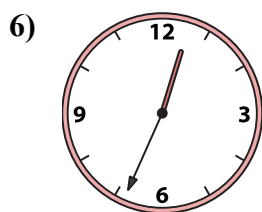
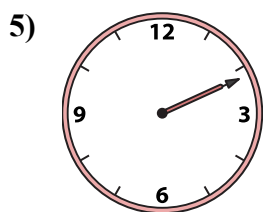
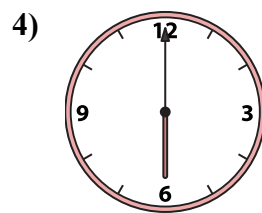
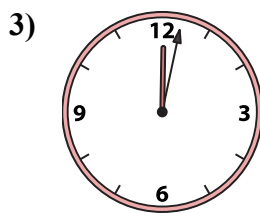

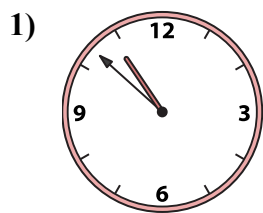
N. 10:57

O. 10:52

P. 11:06



Подберите соответствующие часы к цифровым циферблатам снизу.



A. 6:09

B. 1:33

C. 6:00

D. 6:36

E. 12:02

F. 2:11

G. 12:34

H. 10:51

I. 1:07

J. 8:48

K. 8:52

L. 5:50

M. 6:26

N. 10:57

O. 10:52

P. 11:06

ОТВЕТЫ

1. O

2. I

3. E

4. C

5. F

6. G

7. J

8. H

9. N

10. A

11. L

12. K

13. P

14. B

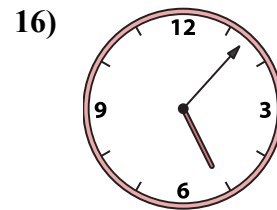
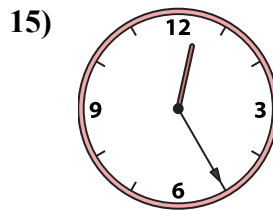
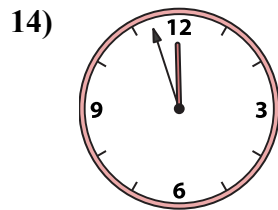
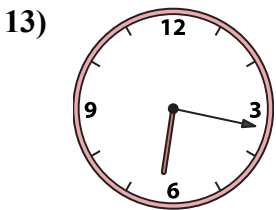
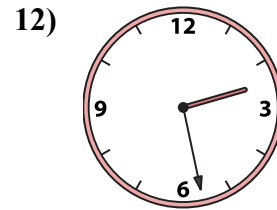
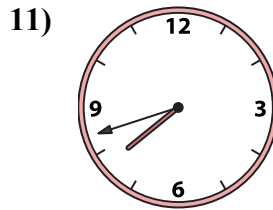
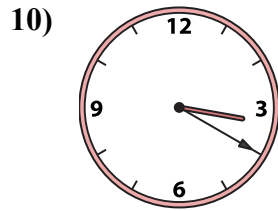
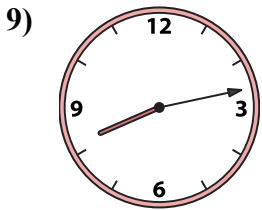
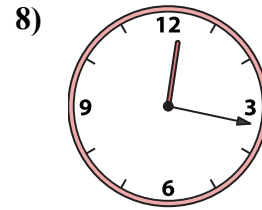
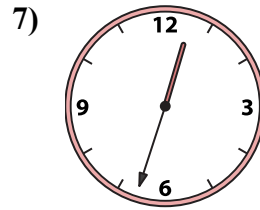
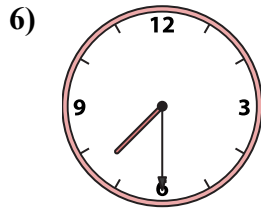
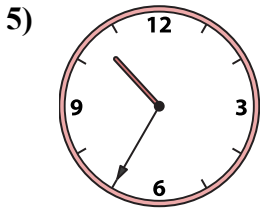
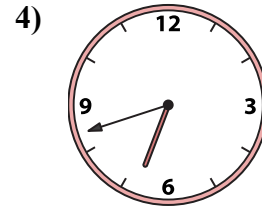
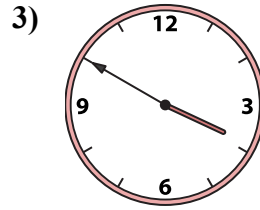
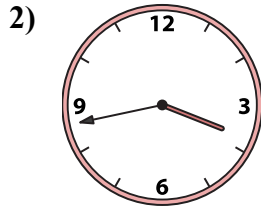
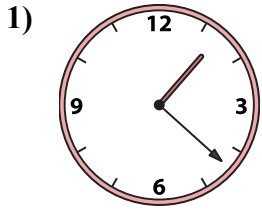
15. D

16. M



Подберите соответствующие часы к цифровым циферблатам снизу.

ОТВЕТЫ



1. _____
2. _____
3. _____
4. _____
5. _____
6. _____
7. _____
8. _____
9. _____
10. _____
11. _____
12. _____
13. _____
14. _____
15. _____
16. _____

A. 10:35

B. 2:28

C. 7:42

D. 12:33

E. 6:42

F. 1:22

G. 12:25

H. 6:17

I. 3:50

J. 3:20

K. 11:57

L. 5:07

M. 7:30

N. 3:43

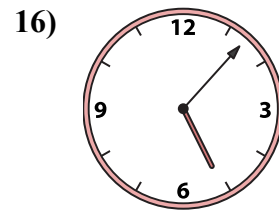
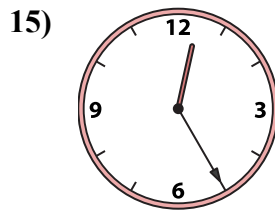
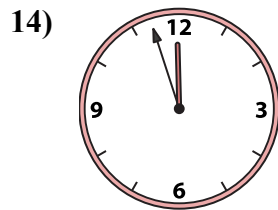
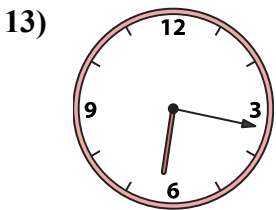
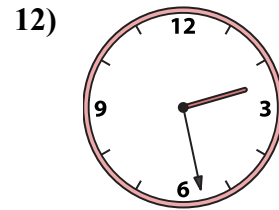
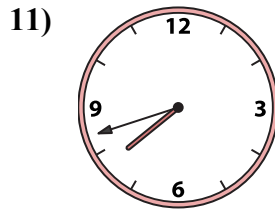
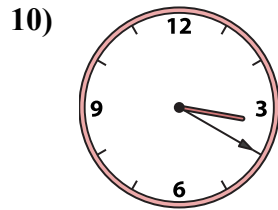
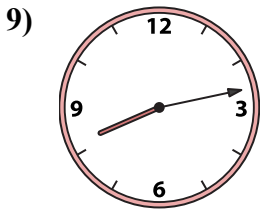
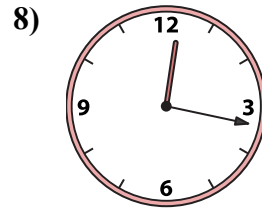
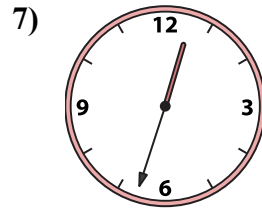
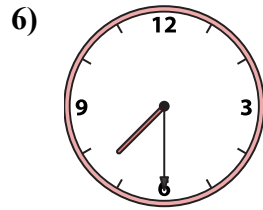
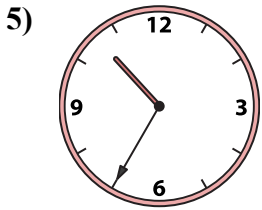
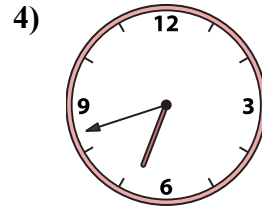
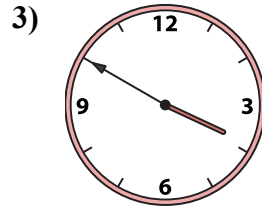
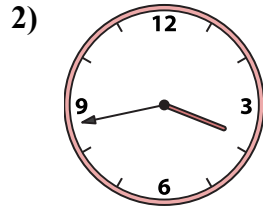
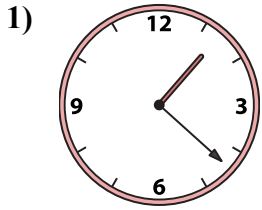
O. 8:13

P. 12:17



Подберите соответствующие часы к цифровым циферблатам снизу.

ОТВЕТЫ



A. 10:35

B. 2:28

C. 7:42

D. 12:33

E. 6:42

F. 1:22

G. 12:25

H. 6:17

I. 3:50

J. 3:20

K. 11:57

L. 5:07

M. 7:30

N. 3:43

O. 8:13

P. 12:17

1. F

2. N

3. I

4. E

5. A

6. M

7. D

8. P

9. O

10. J

11. C

12. B

13. H

14. K

15. G

16. L