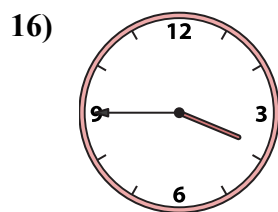
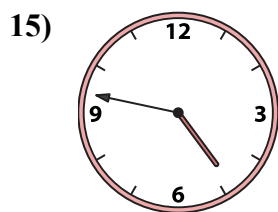
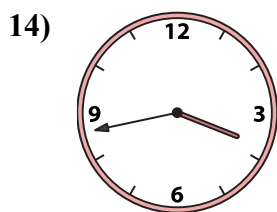
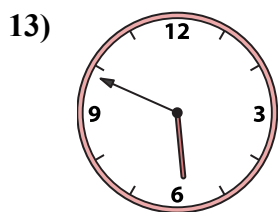
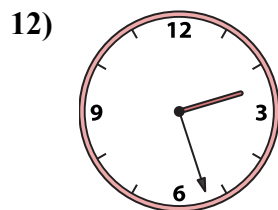
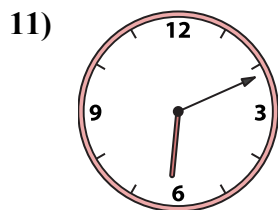
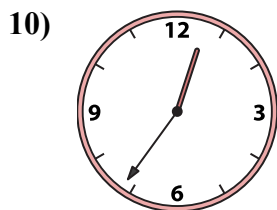

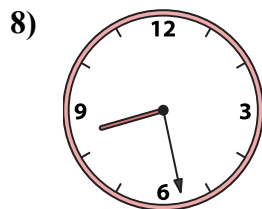
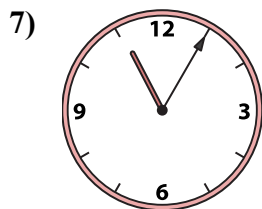
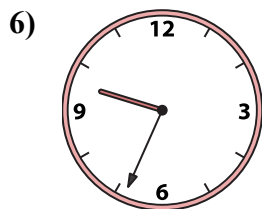
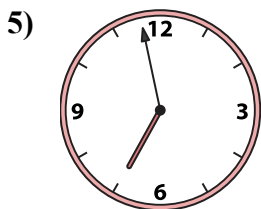
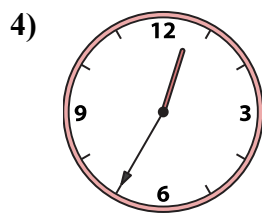
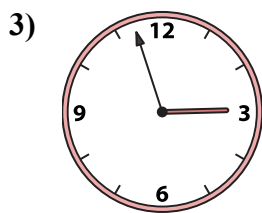
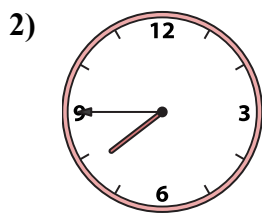





Подберите соответствующие часы к цифровым циферблатам снизу.

ОТВЕТЫ



1. _____
2. _____
3. _____
4. _____
5. _____
6. _____
7. _____
8. _____
9. _____
10. _____
11. _____
12. _____
13. _____
14. _____
15. _____
16. _____

A. 7:45

B. 2:27

C. 3:43

D. 4:47

E. 12:36

F. 11:05

G. 3:45

H. 9:34

I. 2:57

J. 12:43

K. 1:07

L. 6:58

M. 12:35

N. 8:28

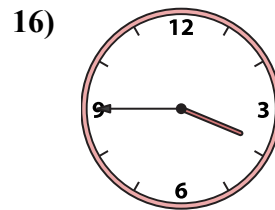
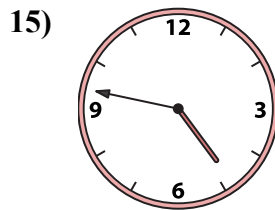
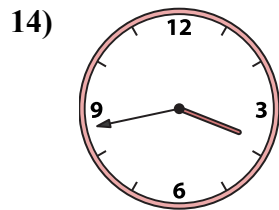
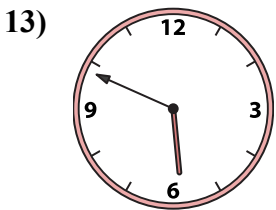
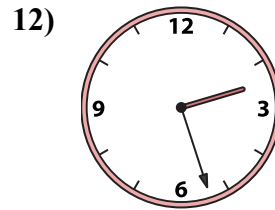
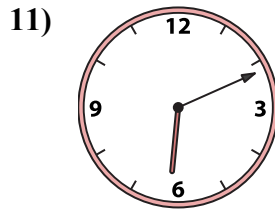
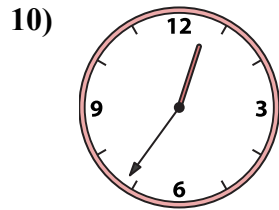
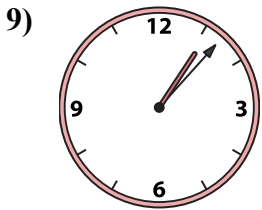
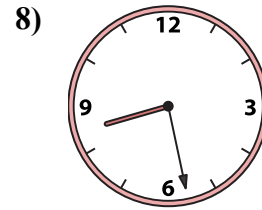
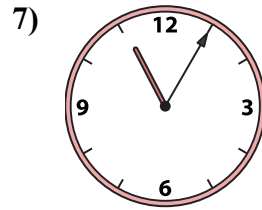
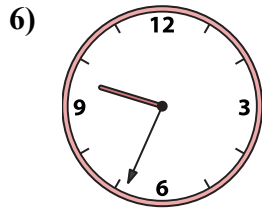
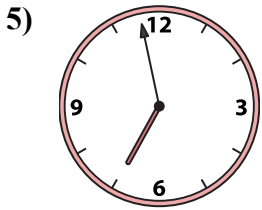
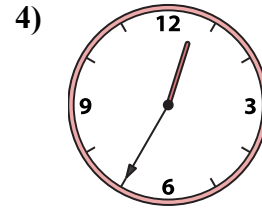
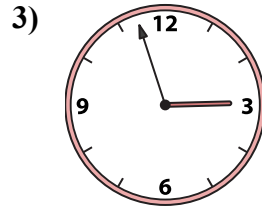
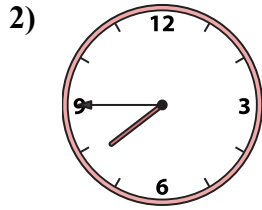
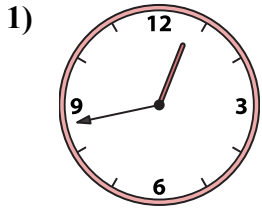
O. 5:49

P. 6:11



Подберите соответствующие часы к цифровым циферблатам снизу.

ОТВЕТЫ



1. J

2. A

3. I

4. M

5. L

6. H

7. F

8. N

9. K

10. E

11. P

12. B

13. O

14. C

15. D

16. G

A. 7:45

B. 2:27

C. 3:43

D. 4:47

E. 12:36

F. 11:05

G. 3:45

H. 9:34

I. 2:57

J. 12:43

K. 1:07

L. 6:58

M. 12:35

N. 8:28

O. 5:49

P. 6:11