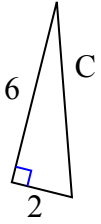




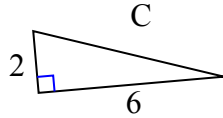
Определите значение 'С', округлите ответ до сотен.

Ответы

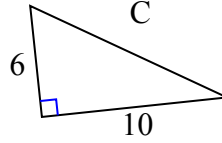
1)



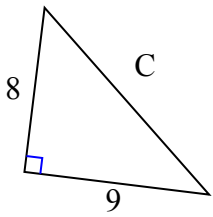
2)



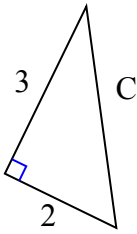
3)



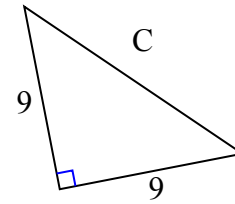
4)



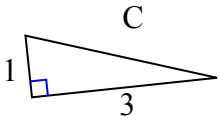
5)



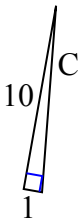
6)



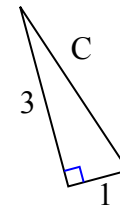
7)



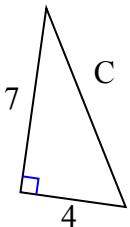
8)



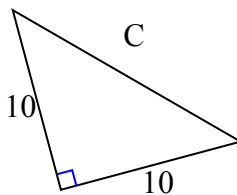
9)



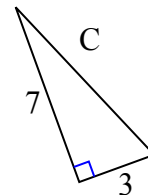
10)



11)



12)

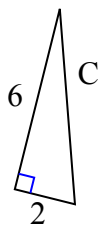


1. _____
2. _____
3. _____
4. _____
5. _____
6. _____
7. _____
8. _____
9. _____
10. _____
11. _____
12. _____



Определите значение 'C', округлите ответ до сотен.

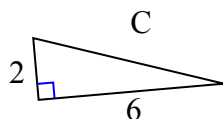
1)



$$36 + 4 = 40$$

$$\sqrt{40} = 6,32$$

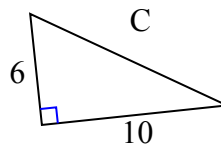
2)



$$4 + 36 = 40$$

$$\sqrt{40} = 6,32$$

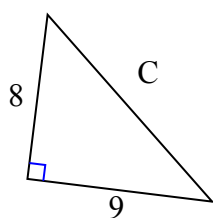
3)



$$36 + 100 = 136$$

$$\sqrt{136} = 11,66$$

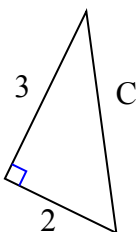
4)



$$64 + 81 = 145$$

$$\sqrt{145} = 12,04$$

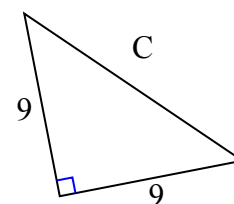
5)



$$9 + 4 = 13$$

$$\sqrt{13} = 3,61$$

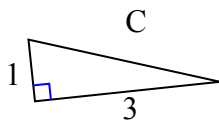
6)



$$81 + 81 = 162$$

$$\sqrt{162} = 12,73$$

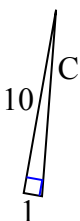
7)



$$1 + 9 = 10$$

$$\sqrt{10} = 3,16$$

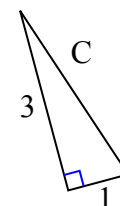
8)



$$100 + 1 = 101$$

$$\sqrt{101} = 10,05$$

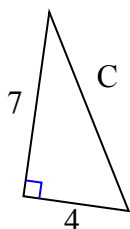
9)



$$9 + 1 = 10$$

$$\sqrt{10} = 3,16$$

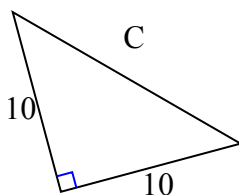
10)



$$49 + 16 = 65$$

$$\sqrt{65} = 8,06$$

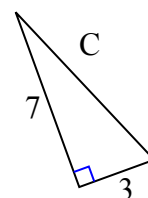
11)



$$100 + 100 = 200$$

$$\sqrt{200} = 14,14$$

12)



$$49 + 9 = 58$$

$$\sqrt{58} = 7,62$$

ОТВЕТЫ1. 6,322. 6,323. 11,664. 12,045. 3,616. 12,737. 3,168. 10,059. 3,1610. 8,0611. 14,1412. 7,62