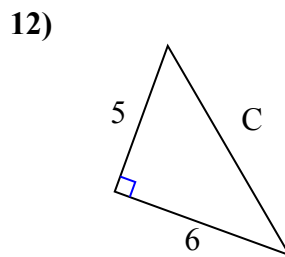
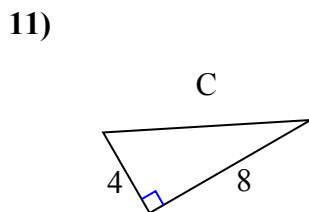
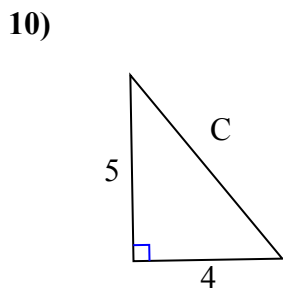
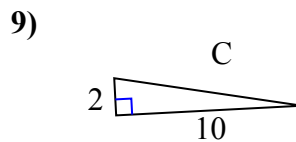
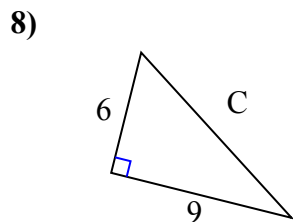
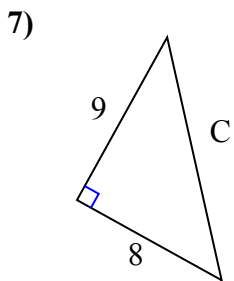
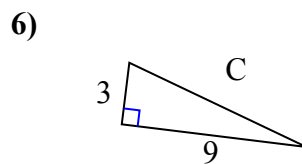
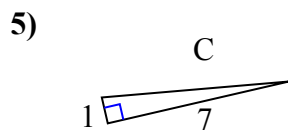
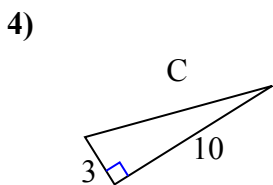
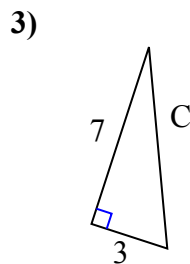
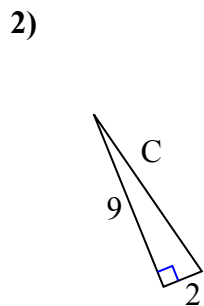
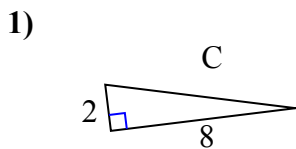




Определите значение 'C', округлите ответ до сотен.

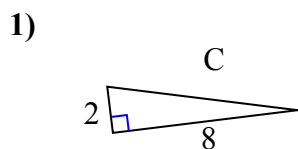
ОТВЕТЫ



1. _____
2. _____
3. _____
4. _____
5. _____
6. _____
7. _____
8. _____
9. _____
10. _____
11. _____
12. _____

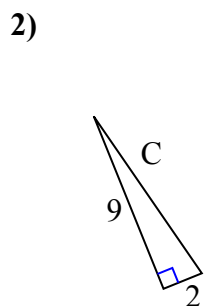


Определите значение 'C', округлите ответ до сотен.



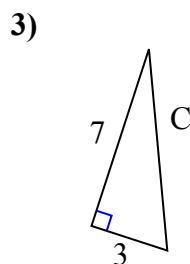
$$4 + 64 = 68$$

$$\sqrt{68} = 8,25$$



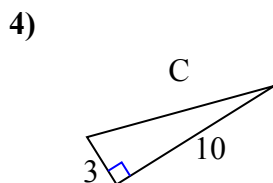
$$81 + 4 = 85$$

$$\sqrt{85} = 9,22$$



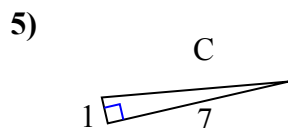
$$49 + 9 = 58$$

$$\sqrt{58} = 7,62$$



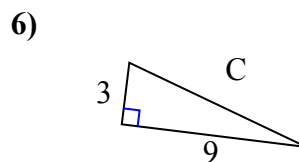
$$9 + 100 = 109$$

$$\sqrt{109} = 10,44$$



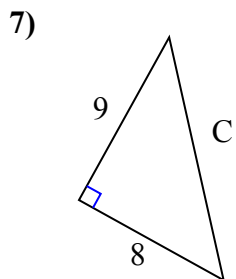
$$1 + 49 = 50$$

$$\sqrt{50} = 7,07$$



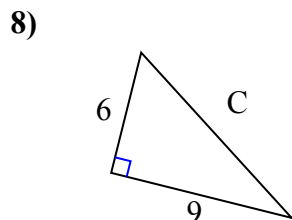
$$9 + 81 = 90$$

$$\sqrt{90} = 9,49$$



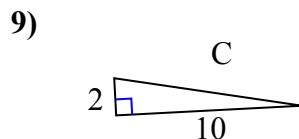
$$81 + 64 = 145$$

$$\sqrt{145} = 12,04$$



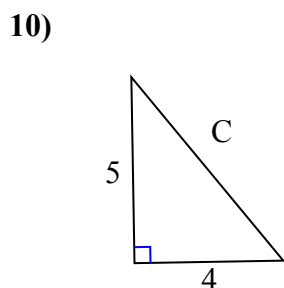
$$36 + 81 = 117$$

$$\sqrt{117} = 10,82$$



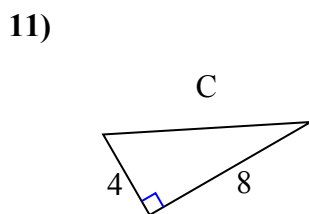
$$4 + 100 = 104$$

$$\sqrt{104} = 10,2$$



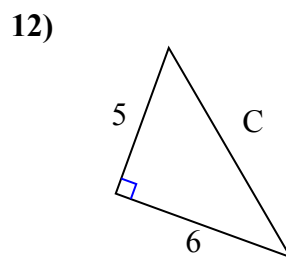
$$25 + 16 = 41$$

$$\sqrt{41} = 6,4$$



$$16 + 64 = 80$$

$$\sqrt{80} = 8,94$$



$$25 + 36 = 61$$

$$\sqrt{61} = 7,81$$

ОТВЕТЫ1. 8,252. 9,223. 7,624. 10,445. 7,076. 9,497. 12,048. 10,829. 10,210. 6,411. 8,9412. 7,81