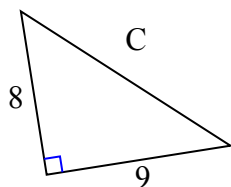




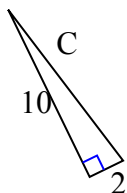
Определите значение 'С', округлите ответ до сотен.

**Ответы**

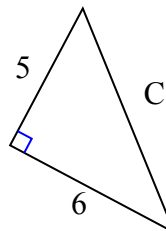
1)



2)



3)



1. \_\_\_\_\_

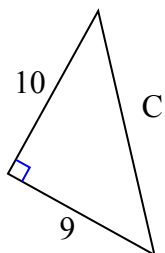
2. \_\_\_\_\_

3. \_\_\_\_\_

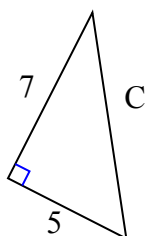
4. \_\_\_\_\_

5. \_\_\_\_\_

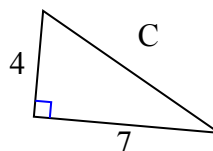
4)



5)



6)

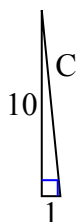


6. \_\_\_\_\_

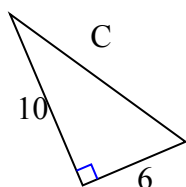
7. \_\_\_\_\_

8. \_\_\_\_\_

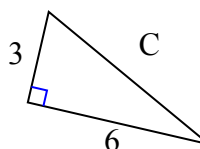
7)



8)



9)



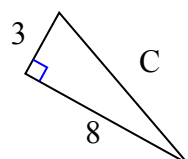
9. \_\_\_\_\_

10. \_\_\_\_\_

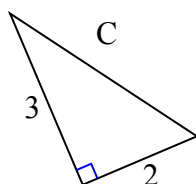
11. \_\_\_\_\_

12. \_\_\_\_\_

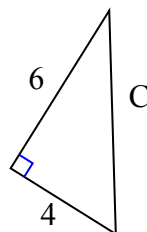
10)



11)



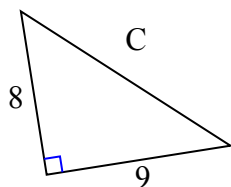
12)





Определите значение 'C', округлите ответ до сотен.

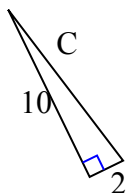
1)



$$64 + 81 = 145$$

$$\sqrt{145} = 12,04$$

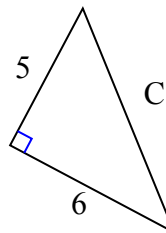
2)



$$100 + 4 = 104$$

$$\sqrt{104} = 10,2$$

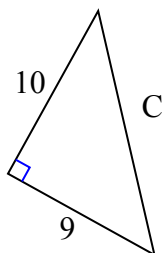
3)



$$25 + 36 = 61$$

$$\sqrt{61} = 7,81$$

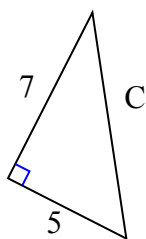
4)



$$100 + 81 = 181$$

$$\sqrt{181} = 13,45$$

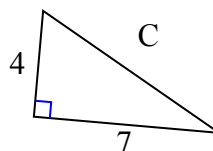
5)



$$49 + 25 = 74$$

$$\sqrt{74} = 8,6$$

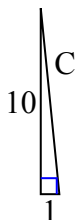
6)



$$16 + 49 = 65$$

$$\sqrt{65} = 8,06$$

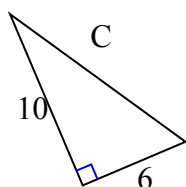
7)



$$100 + 1 = 101$$

$$\sqrt{101} = 10,05$$

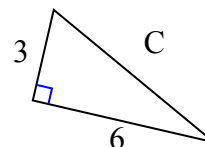
8)



$$100 + 36 = 136$$

$$\sqrt{136} = 11,66$$

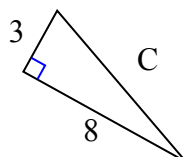
9)



$$9 + 36 = 45$$

$$\sqrt{45} = 6,71$$

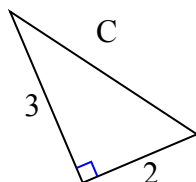
10)



$$9 + 64 = 73$$

$$\sqrt{73} = 8,54$$

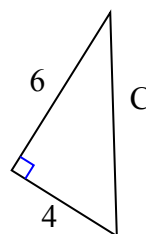
11)



$$9 + 4 = 13$$

$$\sqrt{13} = 3,61$$

12)



$$36 + 16 = 52$$

$$\sqrt{52} = 7,21$$

**Ответы**

1. 12,04
2. 10,2
3. 7,81
4. 13,45
5. 8,6
6. 8,06
7. 10,05
8. 11,66
9. 6,71
10. 8,54
11. 3,61
12. 7,21